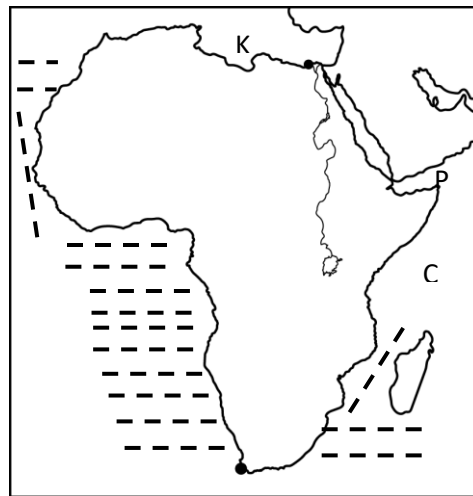


**YUDESI DAY & BOARDING NURSERY & PRIMARY SCHOOL  
P.7 SOCIAL STUDIES HOLIDAY PACKAGE TERM 1, 2020**

**SECTION A:**

1. What is a continent?
2. Name any two neighbouring continents of Africa.
3. Which method is used to locate Africa by using imaginary lines?
4. Mention any one method of locating places apart from using imaginary lines.

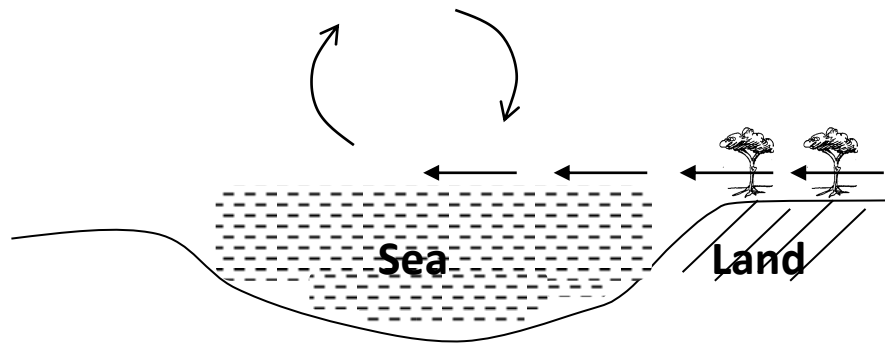
Study the map below and answer the questions that follow.



5. Name the feature marked K.
6. Which continent is shown above?
7. How is the ocean marked C important to Africa?
8. Use letter Y to show the Atlantic Ocean on the above map.
9. Why was the Suez Canal built?
10. Mention one country which helped to construct the Suez Canal.
11. State any one reason why Abdel Nasser nationalized the Suez Canal.
12. If it is 8:05a.m in Accra, Ghana, what time is it in Uganda which is 45°E?
13. If it is 9:15p.m in town Z at 10°E, what time is it in town M at 1°W?
14. Compare Uganda and Ghana in terms of location.

15. What are physical features?
16. Which other term refers to physical features?
17. Mention the physical feature that covers the largest part of Africa.
18. State any one reason why plateau areas have dense population.
19. What does the term Inselberg mean?
20. Name the highest peak in Africa.
21. By what process was Mt. Atlas formed?
22. Mention any one example of forces which helped in the formation of block Mountains.
23. Give any two challenges forced by the people who stay around mountains.
24. Why does R. Nile flow northwards?
25. Name the widest river in Africa.
26. How was Lake Victoria formed?
27. State any two characteristics of rift valley lakes.
28. What do we call the steep sides of a rift valley?
29. Give any one way of caring for lakes and rivers.
30. State the difference between climate and weather.
31. How is the knowledge of climate in an area useful to farmers?
32. Which instrument is used to record the hours of bright sunshine?
33. Mention any one example of weather disasters.
34. Which type of climate in Africa is hot and wet?
35. State any one characteristic of equatorial climate.
36. Name any two crops grown in equatorial margins.
37. Apart from equatorial, mention two other types of climate in Africa.
38. How does altitude influence climate.
39. Write any two human activities that affect the climate positively.

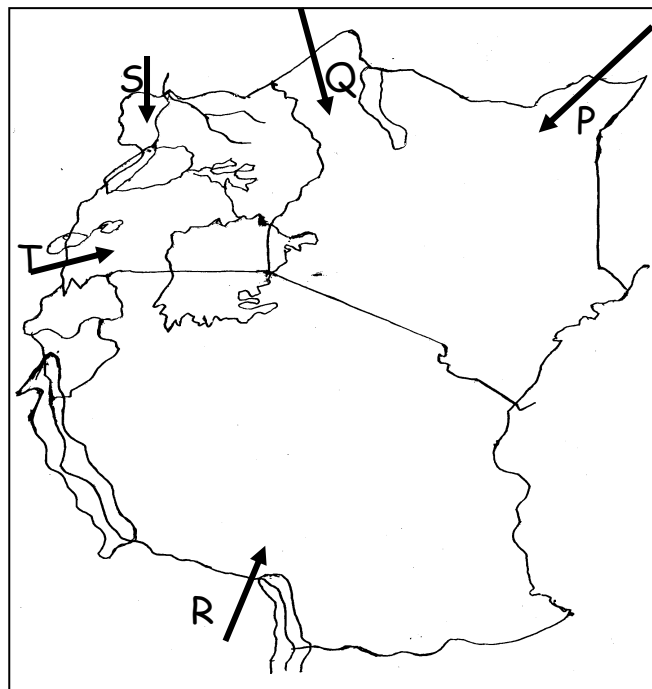
Study the diagram below and use it to answer the questions that follow.



40. Which type of breeze is shown below?
41. At what time of the day does the above breeze take place?
42. Give any two ways of conserving the climate of an area.
43. Mention any one cause of climate change in the world today.
44. State the difference between planted and natural vegetation.
45. Write any two examples of tree species found in planted forests.
46. Why are most national parks located in savanna vegetation areas?
47. What do we call the trees that do not shed their leaves majorly in the dry season?
48. Why is lumbering a common activity in D.R.C?
49. How does rural electrification help to conserve the vegetation?
50. Name the largest rain forest in Uganda.
51. State any two ways the tourism sector has promoted economic growth in Uganda.
52. Give the meaning of the terms below.
  - i) clan
  - ii) family
  - iii) tribe
53. How did early man obtain food?

54. Give any two important discoveries of early man.
55. Why Dr. Louis Leakey important in the history of East Africa?
56. Mention the origin home land of the Bantu people.
57. How was Pubungu important in the migration of the Nilotics?
58. Name any two tribes among the plain Nilotes in Uganda.
59. Why have some Nilotes in East Africa adopted mixed farming?

Study the map of East Africa and use it to answer the questions that follow.



60. Name the ethnic groups that used the routes P and Q below to enter East Africa.
61. Which group of Bantu entered East Africa using route R?
62. State any one cause of the migration of the tribal group T.
63. Name any one skill that was introduced by the Bantu in East Africa.
64. Who were the earliest people to settle in South Africa?
65. Which African region is mainly occupied by the Arabs?
66. Name the largest international organisation in the world.

67. State any one achievement of the UN.
68. What title is given to the chief administrator of the UN?
69. Which UN organ maintains world peace through its peace keepers?
70. Write WHO in full.
71. Which current disease is being fought by WHO worldwide?
72. Give any one way people should apply to survive the above disease.
73. Which voluntary association unites Britain with her former colonies?
74. Why have most countries stopped or suspended all international flights?
75. In which part of the Bible do we read the story of creation?
76. Name the creatures that God made on the days below.
  - i) 1<sup>st</sup> day
  - ii) 4<sup>th</sup> day
77. Give any one reason why God created man in His own image?
78. From which material did God create man?
79. How did man destroy his relationship with God?
80. Why was Jesus sent on earth?
81. Give any one consequence of Adam and Eve's fall to mankind.
82. How have some people failed to live up to God's expectations?
83. What does the term reconciliation mean?
84. Give any two Christian ways of reconciliation.