



# KINGS WAY PRIMARY SCHOOL

P. 2 RECESS REVISION 2020-(SET FIVE)

## LITERACY IB

DURATION : 2 HOURS

Name \_\_\_\_\_ stream \_\_\_\_\_

### SECTION A (30 MKS)

1. Why do you come to school?  
\_\_\_\_\_

2. Name one thing found in our classroom.  
\_\_\_\_\_

3. A \_\_\_\_\_ is a place where people go to learn.

4. What do you use for writing in class?  
\_\_\_\_\_

5. **Draw a picture of a tree below.**



6. In which village is our school found?  
\_\_\_\_\_

7. Who heads a family?  
\_\_\_\_\_

8. How do you come to school?  
\_\_\_\_\_

9. Write down our school motto.  
\_\_\_\_\_

10. What is the name of our school?  
\_\_\_\_\_

11. Which school symbol directs people to our school?  
\_\_\_\_\_

12. Who heads a school?  
\_\_\_\_\_

13. Mention the name of your class teacher.  
\_\_\_\_\_

---

14. Write social studies in short.

---

15. Name one subject taught at school.

---

16. Who cooks food at home?

---

17. Name one type of food eaten at school.

---

18. A \_\_\_\_\_ is a place where people live / stay.

19. Who teaches children at school?

---

20. Write down one school symbol.

---

21. Give one member of a nuclear family.

---

22. In which district is our school found?

---

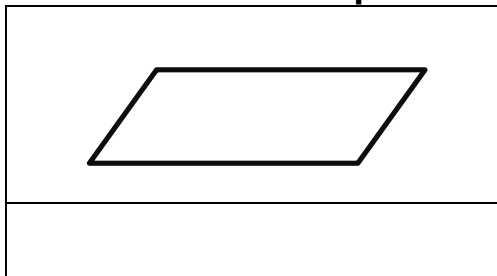
23. Mention one strong building material.

---

24. What is the role of your father at home?

---

25. **Name the drawn map below.**



26. Which animal guards our home?

---

27. Name one feature found on our school badge.

---

28. Why do school children put on uniforms?

---

29. What do we call a part of an anthem?

---

30. Mention any one colour of the Uganda flag.

---

**SECTION B 70 MARKS**

31. What do we call things man cannot do without?

b. Draw these basic needs below.

<b>food</b>	<b>shelter</b>	<b>clothes</b>

32. A \_\_\_\_\_ is a group of people related by blood, marriage or adoption.

b) Name the two people who start a family.



i) \_\_\_\_\_

ii) \_\_\_\_\_

c) Give one role of children at home.

33. Which school symbol makes children smart?

b) Name the drawn school symbols.

34. Match people and their work.

Cooks

Heads a school.

Drivers

Opens and closes the gate.

Teachers

Prepares food at school.

Gatekeepers

drives school vehicles

Headteacher

teaches children

35. Draw the following building materials.

<b>bricks</b>	<b>stones</b>	<b>sand</b>	<b>timber</b>

36. What is a house?

---

---

b) Mention any three parts of a good house.

i) \_\_\_\_\_

ii) \_\_\_\_\_

iii) \_\_\_\_\_

37. What is a community?

---

---

b) Name any two examples of communities you know.

i) \_\_\_\_\_

ii) \_\_\_\_\_

c) Which community is the smallest?

---

38. Draw these things you see on the way to school.

<b>car</b>	<b>people</b>	<b>trees</b>	<b>a dog</b>

39. Name four things found our own school badge.

i) \_\_\_\_\_

ii) \_\_\_\_\_

iii) \_\_\_\_\_

iv) \_\_\_\_\_

**END**



# KINGS WAY PRIMARY SCHOOL

P. 2 RECESS REVISION 2020-(SET FIVE)

## LITERACY 1A

DURATION : 2 HOURS

Name \_\_\_\_\_ stream \_\_\_\_\_

### SECTION A (30 MARKS)

1. Name one part found on the head.

\_\_\_\_\_

2. Name one non-living thing.

\_\_\_\_\_

3. Write one common accident at school.

\_\_\_\_\_

4. Give one example of a flowering plant.

\_\_\_\_\_

5. Which insect gives us honey?

\_\_\_\_\_

6. Name this type of weather.



\_\_\_\_\_

7. Piglet is to a pig as \_\_\_\_\_ is to goat.

8. Name one place where we dispose rubbish at school.

\_\_\_\_\_

9. Give one way of making water safe for drinking.

\_\_\_\_\_

10. Mention the sense organ for feeling.

\_\_\_\_\_

11. Write one childhood killer disease.

\_\_\_\_\_

12. Why do animals move?

\_\_\_\_\_

13. State the main source of food.

\_\_\_\_\_

14. What name is given to small organism that cause diseases?

---

15. Name any one example of a vector.

---

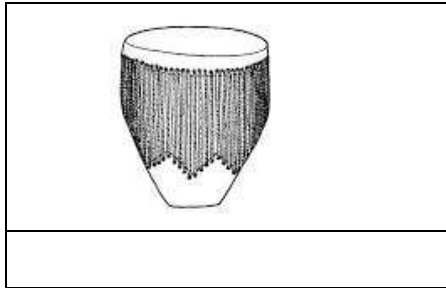
16. Write the best food for babies.

---

17. Give one way of exercising the body.

---

18. Name these things made out of skins.



19. Why is cow called a domestic animal?

---

20. What is personal hygiene?

---

21. An insect has \_\_\_\_\_ main body parts.

22. How is the sun useful to us?

---

23. Write one way of keeping food safe.

---

24. Give one way nurses care for us when we are sick.

---

25. Give one reason why people eat food.

---

26. Name one part that helps an insect to move.

---

27. What should be done after visiting a toilet?

---

28. Which part of a plant makes food?

---

29. Give one way of caring for;  
teeth \_\_\_\_\_

30. Name one animal kept at home.

\_\_\_\_\_

**Section B**

31. Give two ways of keeping your home clean.

i) \_\_\_\_\_

ii) \_\_\_\_\_

b) **Name two items used to clean home.**


33. List down two common diseases in our locality.

i) \_\_\_\_\_

ii) \_\_\_\_\_

b) How do we control diseases at school?

\_\_\_\_\_

c) Name any two other parts of a plant.

i) \_\_\_\_\_

ii) \_\_\_\_\_

34. Name the parts of a plant shown below.



\_\_\_\_\_

b) How is the part above useful to us.

\_\_\_\_\_

35. Give two reasons why we give first aid to a casualty.

i) \_\_\_\_\_

ii) \_\_\_\_\_

b. Give two causes of accidents at school.

i) \_\_\_\_\_

ii) \_\_\_\_\_

36. Match animals to their habitats.

lion

water

cow

kennel

dog

den

fish

kraal

37. State two elements of weather.

i) \_\_\_\_\_

ii) \_\_\_\_\_

b. List down two things used on rainy weather.

i) \_\_\_\_\_

ii) \_\_\_\_\_

38. Draw and name two items we use to keep our body clean.


39. Give two uses of water at school.

i) \_\_\_\_\_

ii) \_\_\_\_\_

b. Mention two natural source of water.

i) \_\_\_\_\_

ii) \_\_\_\_\_

40. Write "true" or false.

a) Living things move \_\_\_\_\_

b) Non living thing feed \_\_\_\_\_

c) A car is a living thing \_\_\_\_\_

d) A cat is a living thing \_\_\_\_\_ **END**





# KINGS WAY PRIMARY SCHOOL

P. 2 RECESS REVISION 2020-(SET FIVE)

## RELIGIOUS EDUCATION

DURATION : 2 HOURS

Name \_\_\_\_\_ stream \_\_\_\_\_

### SECTION A (30 MARKS)

1. \_\_\_\_\_ is the study of man and his belief.

2. Why do people go to church?  
\_\_\_\_\_

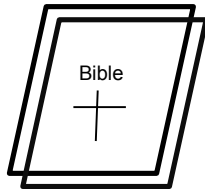
3. Who created you? \_\_\_\_\_

4. Mention any one thing found in church.  
\_\_\_\_\_

5. Where do moslems go for Juma prayers?  
\_\_\_\_\_

6. Give one Christian name for boys.  
\_\_\_\_\_

7. Name this Holy book.



\_\_\_\_\_

8. Who leads prayer in the mosque?  
\_\_\_\_\_

9. Write your religious name.  
\_\_\_\_\_

10. Mention the Holy book for moslems.  
\_\_\_\_\_

11. Write R.E in full.  
\_\_\_\_\_

12. Who was the mother of Prophet Muhammad?  
\_\_\_\_\_

13. **Draw one thing used in baptism.**



14. What did God use to create man?

---

15. Which animal tempted Eve to eat the forbidden fruit?

---

16. How do we talk to God?

---

17. Who built the ark?

---

18. Name the river where Jesus was baptized.

---

19. Mention the first miracle Jesus performed.

---

20. Name one thing found in the mosque.

---

21. How many times do moslems pray a day?

---

22. Why do we study R.E.?

---

23. What is a church?

---

24. How can you help your neighbour in class?

---

25. Write one thing you can ask through prayer.

---

26. Why do people repent?

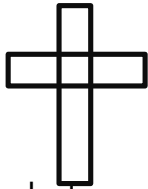
---

27. Mention one symbol in Islam.

---

28. A \_\_\_\_\_ calls moslems for prayers.

29. Name the drawn religious symbol.



\_\_\_\_\_

30. What does the name Peter mean?

---

**Section B**

31. What is a prayer?

---

b. Mention three prayers said by moslems.

i) \_\_\_\_\_

ii) \_\_\_\_\_

iii) \_\_\_\_\_

32. **Draw the body parts used for the following.**

<b>seeing</b>	<b>hearing</b>	<b>walking</b>	<b>tasting</b>

33a. Write four things a good child should do at school.

i) \_\_\_\_\_

ii) \_\_\_\_\_

iii) \_\_\_\_\_

iv) \_\_\_\_\_

34. **Fill in the missing letters.**

a. ch\_\_rch

c. B\_\_ble

b. mos\_\_\_\_ue

d. Je\_\_\_\_us

35. Match list A to list B correctly.

	A	B
i)	Mary	Our father in heaven.
ii)	Koran	the mother of Jesus.
iii)	Amina	the Holy book for Christians.
iv)	Bible	the mother of prophet Muhammed.
v)	God	the Holy book for moslems.

36. Which prayer did Jesus teach his Apostles?

\_\_\_\_\_

b. Name any four disciples of Jesus.

i) \_\_\_\_\_

ii) \_\_\_\_\_




iii) \_\_\_\_\_

iv) \_\_\_\_\_

37. **Tick** only people who need help.

teachers,                      the poor,                      the blind, nurses  
the sick,                      drivers,                      the lame.

38a) **Name these sources of light God created.**

		
_____	_____	_____

b. Name the first two people God created.

i) \_\_\_\_\_

ii) \_\_\_\_\_

**END**



# KINGS WAY PRIMARY SCHOOL

## P. 2 RECESS REVISION 2020-(SET FIVE)

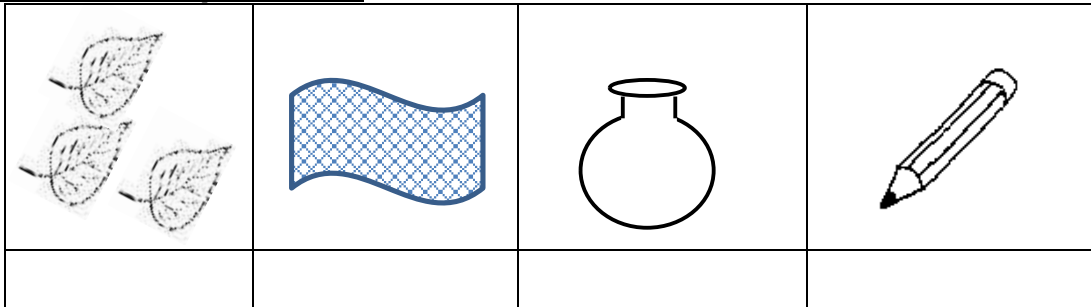
### ENGLISH

DURATION : 2 HOURS & 15 MINUTES

Name \_\_\_\_\_ Stream \_\_\_\_\_

### SECTION A (30 MARKS)

#### 1. Name the pictures.



#### 2. Fill in the missing letters.

Octob\_\_r

w\_\_ter

e\_\_\_e

B\_\_\_by

acc\_\_\_dent

m\_\_\_ize

#### 3. Use "a" or an to complete the sentences.

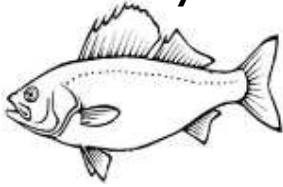
- I have \_\_\_\_\_ egg.
- The pen is on \_\_\_\_\_ desk.
- That is \_\_\_\_\_ owl.
- \_\_\_\_\_ elephant has a small tail.

#### 4. Read and draw pictures.

The ball is on the chair.	Daddy is driving a car.	Mary has a flower and a doll.

5. **What can you see?**

a)



\_\_\_\_\_

b)




\_\_\_\_\_

c)



\_\_\_\_\_

d)



\_\_\_\_\_

6. **Form a small word from the big word.**

carpenter \_\_\_\_\_

teacher \_\_\_\_\_

blackboard \_\_\_\_\_

7. **Give the opposite of these words.**

a. poor \_\_\_\_\_

b. bad \_\_\_\_\_

c. girl \_\_\_\_\_

d. queen \_\_\_\_\_

8. **Arrange in A,B,C or alphabetical order.**

a) car, boat, earoplane, helicopter.

\_\_\_\_\_

b) mat, doll, rope, cat.

---

## Section B

9. **Use the verb given in brackets correctly.**

- a) Our baby is \_\_\_\_\_ now. (cry)
- b) I \_\_\_\_\_ my uniform last Friday. (wash)
- c) She is \_\_\_\_\_ a jar on a jeep. (put)
- d) Juma \_\_\_\_\_ to the mosque every Friday. (go)

10. **Fill in the gaps with 'on', 'over' 'in' near.**

- a) Gerald is standing \_\_\_\_\_ the chair.
- b) The water is \_\_\_\_\_ the pot.
- c) The aeroplane is flying \_\_\_\_\_ the hill.
- d) The milk is \_\_\_\_\_ the glass.

11. **Fill in "have" or "has".**

- a) Tom and Tina \_\_\_\_\_ good bags.
- b) Those boys \_\_\_\_\_ nice balls.
- c) My daddy \_\_\_\_\_ a beautiful car.
- d) The lorry \_\_\_\_\_ four wheels.

12. **Re-write the sentences correctly.**

- a) speaks Sam English good.

\_\_\_\_\_

- b) goes to everyday school She.

\_\_\_\_\_

- c) playing football now I am.

\_\_\_\_\_

13. **Give the plural form of the underlined words.**

- a) The basket is in the kitchen.

\_\_\_\_\_

- b) The lorry is red in colour.

\_\_\_\_\_

- c) I have a mango in my school bag.

14. **Use: Yes, it is or No, it is not.**



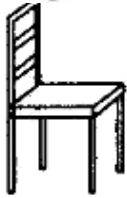
Is this a cow?

\_\_\_\_\_



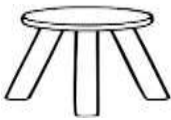
Is this a book?

\_\_\_\_\_



Is this a chair?

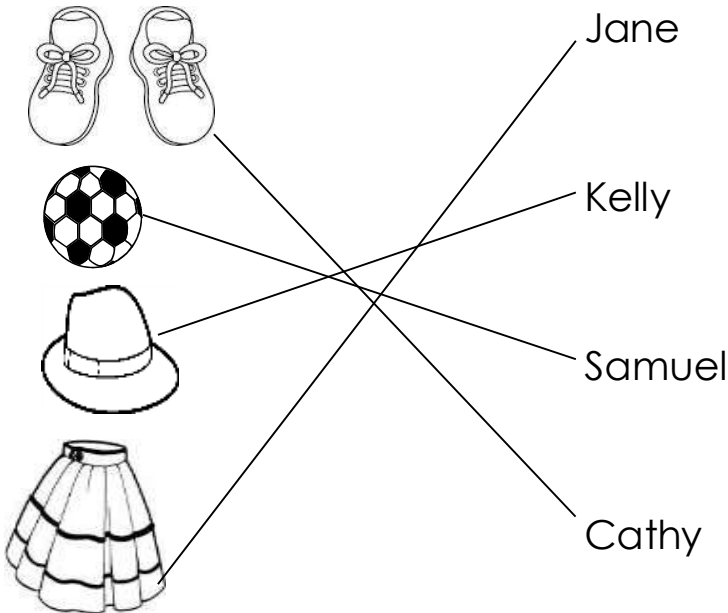
\_\_\_\_\_



Is this a cup?

\_\_\_\_\_

15. **Find the path and answer the questions in full sentences.**



**Questions**

a) Who has a ball?

\_\_\_\_\_

b) How many balls does Samuel have?

\_\_\_\_\_

c) Who has a hat?



---

d) Who wears shoes?

---


e. What does Jane have?

---

**16. Make good sentences.**

a) sitting: \_\_\_\_\_

b)



\_\_\_\_\_

c) come \_\_\_\_\_

**17. Match correctly.**

A dog

moos

A lion

mews

A monkey

barks

A cat

roars

A cow

chatters

**END**



# KINGS WAY PRIMARY SCHOOL

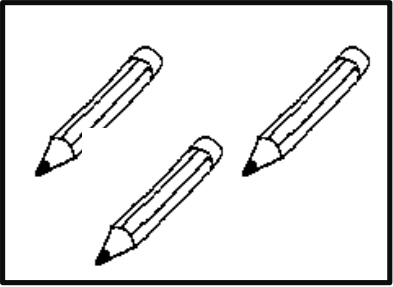

P. 2 RECESS REVISION 2020-(SET FIVE)

## MATHEMATICS

DURATION : 2 HOURS & 30 MINUTES

Name \_\_\_\_\_ stream \_\_\_\_\_

### SECTION A

1.	<b>Add correctly</b> $4 + 5 =$
2.	Write in words. $8 =$ _____ $12 =$ _____
3.	Name these sets. <div style="border: 1px solid black; padding: 5px; display: inline-block; margin-right: 20px;">1, 2, 3, 4, 5</div> _____ <div style="border: 1px solid black; padding: 5px; display: inline-block; margin-right: 20px;"></div> _____
4.	What number comes after 19, _____
5.	2 tens, 3 ones = _____
6.	Write the shaded fraction.  _____

7

Draw these shapes.

triangle	cone	rectangle

8

Write the missing numbers.

80, 70, 60, \_\_\_\_\_, \_\_\_\_\_, 30, \_\_\_\_\_, 10

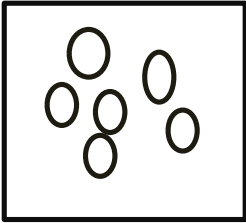

9

Complete the abacus.

H	T	O	H	T	O
○	○	○	○○	○○○○	○
4 3 2					







10

Join these sets.

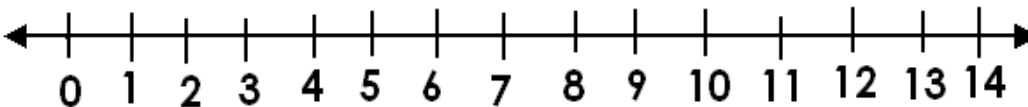
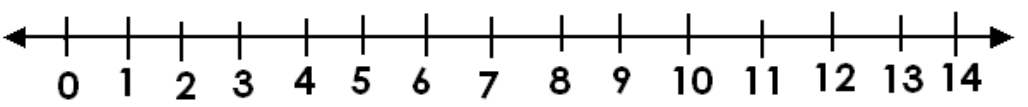
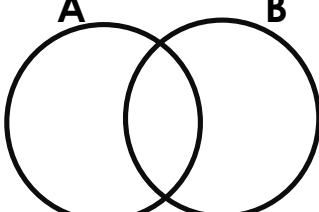
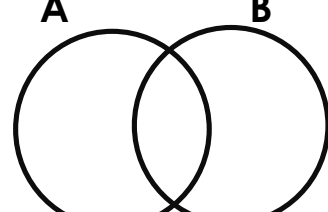
	+		=	
6	+	3	=	_____

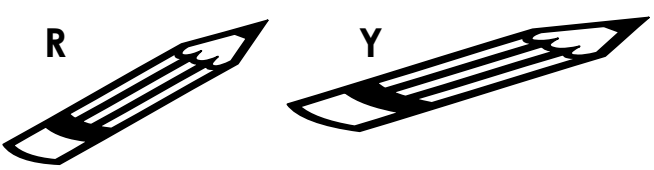
11

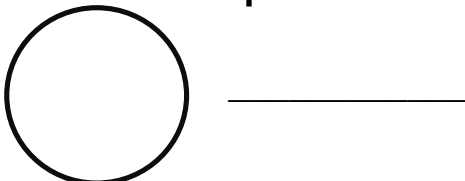












Fill in the number

		
_____ tens		_____ ones
		
_____ tens		_____ ones



17	<p><b>Multiply/ times.</b></p> <p><math>6 \times 2 =</math></p> <p><math>5 \times 0 \times 3 =</math></p> <div style="display: flex; align-items: center; justify-content: center; margin-left: 200px;"> <div style="text-align: center; margin-right: 10px;"> <math display="block">\begin{array}{r} 1 \quad 2 \\ X \quad 4 \\ \hline \end{array}</math> </div> <div style="border: 1px solid black; width: 100px; height: 40px; margin-left: 10px;"></div> </div>
18	<p>Tom has 12 mangoes. Alice has 10 mangoes. How many mangoes do they have altogether?</p> <p>b. Share 8 cakes equally between 2 children. What does each child get?</p> <p>c. Remove 4 apples from 7 apples equals _____ apples.</p>
19	<p>Workout using the numberline.</p> <p>a) <math>6 + 2</math></p> <div style="text-align: center; margin: 10px 0;">  </div> <p style="text-align: center; margin: 10px 0;"><math>5 - 3</math></p> <div style="text-align: center; margin: 10px 0;">  </div>
20	<p><b>Shade the given sets.</b></p> <div style="display: flex; justify-content: space-around; align-items: center;"> <div style="text-align: center;"> <p>A                      B</p>  <p><b>AUB</b></p> </div> <div style="text-align: center;"> <p>A                      B</p>  <p><b>AnB</b></p> </div> </div>

21	<p><b>Subtract / takeaway</b></p> <p><math>10 - 4 =</math> <span style="margin-left: 200px;"><math>5 - 0 =</math></span></p> <table style="margin-left: 20px; border-collapse: collapse;"> <tr> <td style="text-align: center; padding-right: 20px;">T</td> <td style="text-align: center;">O</td> </tr> <tr> <td style="text-align: center; padding-right: 20px;">9</td> <td style="text-align: center;">7</td> </tr> <tr> <td style="text-align: center; padding-right: 20px;">-3</td> <td style="text-align: center;">2</td> </tr> <tr> <td colspan="2" style="text-align: center; padding-top: 10px;"> <div style="border: 1px solid black; width: 100px; height: 30px; margin: 0 auto;"></div> </td> </tr> </table>	T	O	9	7	-3	2	<div style="border: 1px solid black; width: 100px; height: 30px; margin: 0 auto;"></div>	
T	O								
9	7								
-3	2								
<div style="border: 1px solid black; width: 100px; height: 30px; margin: 0 auto;"></div>									
22	<p><b>Work out</b></p> <p>a) <math>\frac{3}{7} + \frac{2}{7} =</math> <span style="margin-left: 100px;">b) <math>\frac{3}{9} + \frac{1}{9} + \frac{2}{9} =</math></span></p> <p>c) <math>\frac{4}{5} - \frac{2}{5} =</math></p>								
23	<p><b>Compare their length using longer or shorter.</b></p> <div style="text-align: center; margin-bottom: 20px;">  </div> <p>a) Pencil R is _____ than pencil Y</p> <p>b) Pencil Y is _____ than pencil R</p>								
24	<p><b>Find the missing numbers.</b></p> <p>a) <span style="border: 1px solid black; display: inline-block; width: 30px; height: 30px; vertical-align: middle;"></span> + 2 = 27</p> <p>b) <span style="border: 1px solid black; display: inline-block; width: 30px; height: 30px; vertical-align: middle;"></span> - 5 = 5</p>								

25	<p><b>Draw these set symbols.</b></p> <p>a) Empty set</p> <p>b) Union set</p> <p>c) Intersection set</p>								
26	<p><b>Answer correctly.</b></p> <p>a) How many months make year?</p> <p>b) Write the first day of the week.</p>								
27	<p><b>Name this shape</b></p> 								
28	<p><b>Write the names of these fractions.</b></p> <p><math>\frac{1}{3}</math> _____                      <math>\frac{1}{9}</math> _____</p>								
29	<p><b>Study the graph and answer questions that follow below.</b></p> <table border="1" data-bbox="389 1575 1047 1921"> <tr> <td data-bbox="389 1575 535 1869">  </td> <td data-bbox="535 1575 690 1869">  </td> <td data-bbox="690 1575 885 1869">  </td> <td data-bbox="885 1575 1047 1869">  </td> </tr> <tr> <td data-bbox="389 1869 535 1921"><b>Alice</b></td> <td data-bbox="535 1869 690 1921"><b>Allan</b></td> <td data-bbox="690 1869 885 1921"><b>Amon</b></td> <td data-bbox="885 1869 1047 1921"><b>Anna</b></td> </tr> </table>					<b>Alice</b>	<b>Allan</b>	<b>Amon</b>	<b>Anna</b>
									
<b>Alice</b>	<b>Allan</b>	<b>Amon</b>	<b>Anna</b>						

a)

**Questions**

How many apples has Amon? \_\_\_\_\_

b)

Who has the least number of apples? \_\_\_\_\_

c)

How many apples has Alice and Anna? \_\_\_\_\_

d)

How many apples do the children have altogether?  
\_\_\_\_\_