



KINGS WAY PRIMARY SCHOOL

P. 2 RECESS REVISION 2020 - (SET SIX)

ENGLISH

DURATION : 2 HOURS & 15 MINUTES

Name _____ Stream _____

SECTION A (50 MARKS)

1. Write these words correctly.

- a) edri _____
- b) hcolos _____
- c) gba _____
- d) chertea _____

2. Arrange these words in alphabetical order.

a) lorry, car, train, bus

b) set, sat, small, sweater

c) bag, house, man, egg

3. How many are there?

a.  They are _____ insects.

b.  There are _____ pots

c.  There are _____ sweets.

d.  There are _____ apples.

4. Write young ones of the animals below.

Animal	young one
a) cow	_____
b) goat	_____
c) duck	_____
d) pig	_____
e) hen	_____

5. Write these abbreviations in full.

- a) can't _____
- b) hasn't _____
- c) won't _____
- d) haven't _____
- e) shan't _____




6. Use 'a' or 'an' correctly.

- a) This is _____ egg.
- b) It is _____ dish.
- c) _____ hen has two legs.
- d) Give me _____ book please.

7. Complete these sentences with the correct pronouns.

- a) This is her book. It is _____
- b) Here is Peter's pencil. It is _____
- c) That is my house. It is _____
- d) Those are our chairs. They are _____
- e) That is their desk. It is _____

8. Name these pictures below.

9. Match animals to their homes.

Animals	homes
a) dog	kraal
b) lion	kraal
c) snail	kennel
d) cow	den
e) pig	shell

10. Re-arrange these sentences to form correct sentences.

a) animals is a goat A domestic.

b) Is doing Mary What?

c) friends Sarah many has.

11. Give the opposite of the underlined words.

a) He is driving a car. _____

b) My aunt is a nurse. _____

c) His brother is very good. _____

d) My dress is dirty. _____

12. Circle the different word.

a) cow, lion, goat, sheep

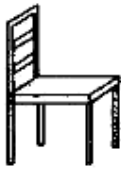
b) stone, chalk, pen, pencil

c) mother, son, father, house

d) Sarah, James, Rita, Brenda

Section B (50 marks)

13. **Write the number of the picture.**

1. A flower is in the tin.
2. The ball is on the table.
3. Boys are playing football.
4. I can see three chairs.
5. The woman is sitting on the stool.

13b) **Write colours of these things.**

- a) blood _____
- b) milk _____
- c) grass _____
- d) charcoal _____
- e) water _____
- f) grass _____

14a) **Read the story and answer the questions in full sentences.**

My name is Samuel. I am doctor. My father is a farmer. My sister is a nurse. She likes playing netball. My father likes playing football and we are a happy family.

Questions

1. Who is a doctor according to the story?

2. **Make small words from these words.**

a) father _____

b) football _____

c) playing _____

d) she _____

14b) **Write these number-words in figures.**

ten _____

thirty _____

eleven _____

three _____

four _____

15a) **Re-arrange these sentences to make a good story.**

a) He started walking towards me.

b) The man was throwing stones.

c) One day, was going back home.

d) I ran as fast as I could to save my life.

e) I met a mad man.

a. _____

b. _____

c. _____

d. _____

15b) **Write five sentences from the table.**

Is	much	is a pen and a book?
They a dog	am	
Tom	are	
How	eats	
	has	

- a. _____
- b. _____
- c. _____
- d. _____

16a) **Read the poem and answer the questions in full sentences.**

I am a boat
 I am made of wood,
 A carpenter made me.
 A fisherman uses me,
 To move on the boat,
 To get fish from the lake.

Questions

16b) **Write these words in capital letters.**

- a) hospital _____
- b) market _____
- c) nest _____
- d) dog _____
- e) web _____

17a) **Fill in the correct tense of verbs in the sentences.**

- a) Peter is _____ to school now. (walk)
- b) Who is _____ Luganda from the classroom. (speak)
- c) Boys are _____ their bedroom. (clean)
- d) Sarah is _____ an umbrella. (carry)
- e) He is _____ hands loudly. (clap)
- f) We are _____ home now. (go)

17b) **Replace a noun with a pronoun in a new sentence.**

- a) Mary is cooking food.

- b) Samuel is rushing to school.

- c) Boys are playing football.

- d) Suzan and I are sleeping.

(we, she, They, He)



KINGS WAY PRIMARY SCHOOL

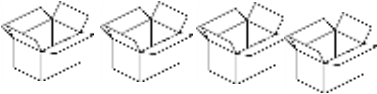


P. 2 RECESS REVISION 2020 - (SET SIX)

MATHEMATICS

DURATION : 2 HOURS & 30 MINUTES

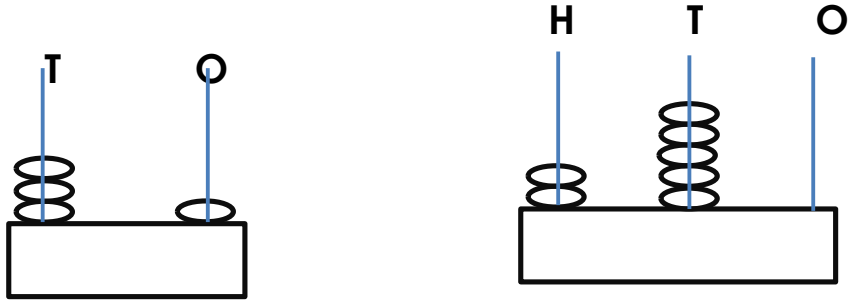
Name _____ stream _____

SECTION A

1.	Add correctly. a) $4 + 2 + 3 =$ _____ b) $\begin{array}{r} 2 \quad 4 \\ +1 \quad 2 \\ \hline \end{array}$
2.	Count and write in words. a)  = _____ b)  = _____ c)  = _____
3	Fill in the missing numbers. a) 1 st , 2 nd , 3 rd , _____, _____, 6 th , _____ b) 10, 20, _____, 40, _____, 60, _____ c) 9, 8, 7, _____, 5, _____, 3, 2, _____
4	Multiply correctly. a) $5 \times 2 =$ _____ b) $0 \times 5 \times 4 =$ _____ $\begin{array}{r} 3 \\ \times 4 \\ \hline \end{array}$

5

Count and write the beads on the abacus.



6

Name the set symbol below.

a) \emptyset _____

b) U _____

c) $=$ _____

7

Draw these shapes.

rectangle	oval	triangle	kite

8

Subtract/take away

$6 - 6 =$ _____

c.
$$\begin{array}{r} 6 \ 2 \\ - 4 \ 1 \\ \hline \end{array}$$

d.
$$\begin{array}{r} 4 \ 6 \ 3 \\ - 2 \ 5 \ 0 \\ \hline \end{array}$$

$$\begin{array}{r} 7 \\ - 4 \\ \hline \end{array}$$

Section B

9


Circle the smaller number.

a. 18 and 81


b. 20 and 02

10

Name these sets.



{ } _____



11

Match correctly.

21

twelve

15

ninth

12

twenty-one

9th

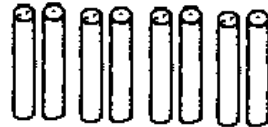
fifteen

12


Count in tens and ones.



= _____ tens _____ ones.



= _____ tens _____ ones.



= _____ tens _____ ones.

13

Draw these sets.

A set of 6 tins.



A set of 5 flowers.



14

Write in figures.

i) Forty seven _____

ii) Ninety four _____

iii) One hundred _____

15

Write the place value of the circled digit.

a) 4⑥ _____

b) ③27 _____

c) 4⑩9 _____

16

Fill in the missing numbers.

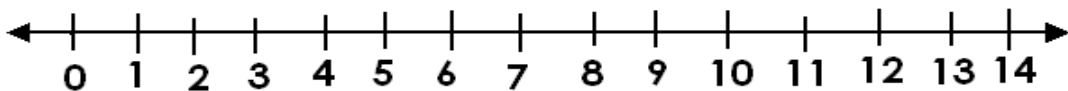
a. $\square + 3 = 7$

b. $\square - 4 = 6$

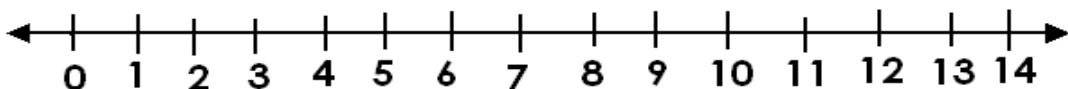
17

Add using a number line.


$4 + 3 = \underline{\quad}$




$2 + 5 + 4 = \underline{\quad}$



18 Write the shaded fractions.



= _____



= _____

19 Write the days of the week corrcetly.

dayThurs _____

dayTues _____

dayMon _____

20 **Read and workout.**

a) Find the sum of 4 and 6.

b) How many eyes do 4 girls have?

c) Share 8 oranges equally among 4 boys. How many does each boy get?

Five takeway three gives. _____

21 Workout

$$\frac{3}{5} + \frac{1}{5}$$

b. $\frac{9}{10} - \frac{6}{10}$

END



KINGS WAY PRIMARY SCHOOL

P. 2 RECESS REVISION 2020 - (SET SIX)

RELIGIOUS EDUCATION

DURATION : 2 HOURS

Name _____ stream _____

SECTION A

1. In how many days did God create the world?

2. Which subject teaches us about God?

3. Name the heavenly father of Jesus.

4. How many times do moslems pray a day?

5. **Draw a Koran in the space below.**



6. The name Emmanuel means. _____

7. Where do you go for prayers?

8. Give any one thing we need in life.

9. Who is the first prophet in Islam?

10. How is Allah important to Muslims?

11. In which garden did Adam and Eve live?

12. Why did God create man?

13. Mention any one activity done in church.

14. Give one role of a father at home.

15. Who calls moslems for prayers?

16. _____ is the total submission to the will of Allah.
17. How does God/Allah show us His love?

18. Why are people given Christian names?

19. In which book do we read God's word?

20. When do Christians become members of God's family?

21. Who is an angel?

22. How do Christians talk to God?

23. What did God create last?

24. What does the word salat mean?

25. What was the work of Joseph?

26. Mention any one thing found in the mosque.

27. Why did God /Allah give you the mouth?

28. Where do moslems face while praying?

29. Who was created in God's image?

30. Name the place where Jesus changed water into wine.

SECTION B

31. Why is a church important to children?

b. Give any three things found in a church.

i) _____

ii) _____

iii) _____

c. Mention one danger of sleeping in the church during prayer.

32. a) Mention the persons that make up the Holy Trinity.

i) _____

ii) _____

iii) _____

b. **Draw and name two symbols of the church.**

33. **Match correctly.**

- | | |
|--------------------|----------------------------|
| i) Simon Peter | most beloved |
| ii) John | betrayed Jesus |
| iii) Thomas | denied Jesus three times. |
| iv) Judas Iscariot | doubted Jesus resurrection |

34. a) Who is a prophet?

b. Write down any three prophets of Allah.

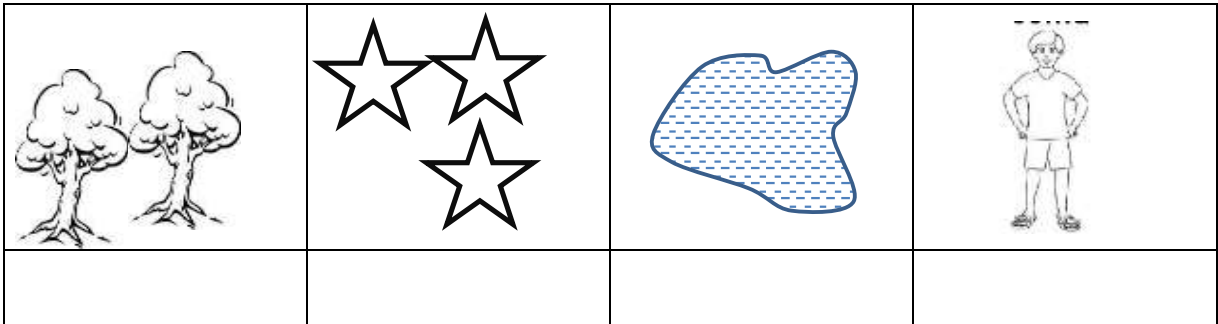
i) _____

ii) _____

- iii) _____
35. a. What is worship?

- b. Write down any three prophets of Allah.
i) _____
ii) _____
- c. Mention any one way we worship God.

36. **Name these God's creation.**



37a) Who is a neighbour according to Jesus?

- b. Write down any three people who don't need help.
i) _____
ii) _____
iii) _____

38. A _____ is group of people living and working together.

b. Give any two roles of children in a family.

- i) _____
ii) _____

39. Mention any two gospel books in the Bible.

- i) _____
ii) _____

**END
SUCCESS**



KINGS WAY PRIMARY SCHOOL

P. 2 RECESS REVISION 2020 - (SET SIX)

LITERACY IA

DURATION : 2 HOURS

Name _____ stream _____

SECTION A (30 MARKS)

- Name one domestic animal



- Write one activity people do in wet season.

- Give one way of preparing food.

- Circle the activity that keeps the classroom clean
Jump, sweeping, singing
- Mention one common disease vector.

- Which organs is used for feeling?

- Name these garden tools.

	
- How do dogs move?

- Give one danger of too much sunshine.

- What are flowering plants?

11. Name one thing found on a child health card.

12. Give one source of proteins.

13. Write the clouds that give us rain.

14. What accident can one get by playing with a razorblade?

15. Write one member of a nuclear family.

16. How are trees useful in our compound?

17. Name one immunisable disease in infants

18. Name one place where we get food.

19. Which method of preserving food is shown below?



20. Why should you wash hands after visiting a toilet?

21. Mutton is to a sheep as _____ is to goats.

22. Write one way of keeping your teeth clean.

23. What is wind?

24. Name one type of germs.

25. Legs and arms form _____ (trunk, limbs)

26. Where do sick people go to the hospital?

27. State one way of protecting yourself from mosquito bites.

28. Name the place where feaces are disposed.

29. What does a cow use for protection?

30. Why is a stone a non-living thing?

Section B

31. Why do animals move from place to place?

i) _____

ii) _____

b) Lion, Fox, Kob, are _____ animals.

c) Name one products got from animals.

32.a) What is a personal hygiene?

b) Give two ways of promoting sanitation.

i) _____

ii) _____

c) Write one danger we face when we in a dirty home.

33. Give two classes of food.

i) _____

ii) _____

b) Give two uses of food in the body.

i) _____

ii) _____

34. Match vectors to their diseases.

Vector

- Housefly
- Mosquito
- Tsetse fly
- Mad dog
- Housefly _____
- Mosquito _____
- Tsetse fly _____
- Mad dog _____

diseases

- sleeping sickness
- rabies
- trachoma
- malaria

35. Identify two characteristics of living things.

- i) _____
- ii) _____




b. Give two groups of living things.

- i) _____
- ii) _____

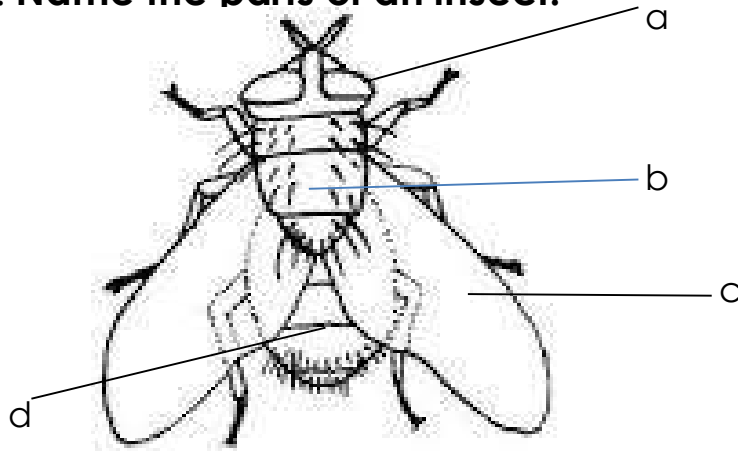
36. Complete the table correctly.

Sense organ	Senses
tongue	_____
_____	smelling
skin	_____
_____	hearing

37. Name these things used when giving first aid.

38. Name the parts of an insect.



b. Give the importance of these parts.

a) _____

b) _____

39. Write two body exercises.

i) _____

ii) _____

b. How are body exercises useful to a P.2 girl?

END

Success



KINGS WAY PRIMARY SCHOOL

P. 2 RECESS REVISION 2020 - (SET SIX)

LITERACY IB

DURATION : 2 HOURS

Name _____ stream _____

SECTION A (30 MKS)

1. A _____ is a place where people go to learn.
2. In which village is our school found?

3. Name this school symbol below.



4. Why do you come to school?

5. Write one feature found on your school badge?


6. What does the teacher use to write on the chalkboard?

7. Name any one object found in class.


8. Who cooks food at school?

9. A _____ heads a family.

10. Name this object used to open the door.




11. Draw yourself playing at school.



12. Why do we need pencils at school?

13. Where do sick people go for treatment while at school?

14. Name this item found in a house.



15. Underline one building at our school.
(canteen, hospital, kitchen, broom, garden)

16. Draw a map of a hut in the space below.



17. Name the animal that guards our homes.

18. Where do we cook food from?

19. A _____ is a group of people living together related by blood, marriage or adoption.

20. Who heads a school?

21. How do you come to school?

22. Who is the head of Department social studies in your school?

23. Name one thing we get from the sheep.

24. Why do children put on school uniform?

25. Write one activity done at school?

26. Why do we need a broom at homes?

27. Write one role of children at home.

28. Name one need of a school.

29. Name one game that children do outside class.

30. Apart from eggs and meet, name any other thing we get from hens.

SECTION B 70

31. Name one important person found in a community.

- b. Name four important places in your community.
i) _____
ii) _____
iii) _____
iv) _____
32. A _____ is a group of people living and working together.
- b. Write down any two people who keep peace in the community.
i) _____
ii) _____
33. What is a school?

- b. Name any two things found in our school badge.
i) _____
ii) _____
34. A _____ family is where we find a father mother and their children.
- b. Write any three members in a nuclear family.
i) _____
ii) _____

35. Match people to their work tools.

- | | |
|--------------|-------|
| i) Teacher | Bible |
| ii) Reverend | chalk |
| iii) Farmer | gun |
| iv) Soldier | hoe |



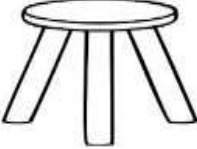

36. Why are drivers important in our community?

b. Draw the following building materials.

grass	stones	nail	water

37. What is a home?

38. Name these things found at home.

39. How is a hoe important to a farmer?

40. Why do people buy things?

b. Name any one thing we buy from the market?

END