



# KINGS WAY PRIMARY SCHOOL

P. 4 RECESS REVISION 2020-(SET SIX)

## MATHEMATICS

**DURATION : 2 HOURS 30 MINUTES**

Name .....STREAM.....

**Read the following instructions carefully**

1. This paper has **two** Sections: **A** and **B**.
2. Section **A** has 20 answer questions (40 marks)
3. Section **B** has 12 questions (60 marks)
4. Answer **ALL** questions. Answers to both sections must be written in the spaces provided.
5. All answers must be written using a blue or black ballpoint pen or ink. Diagrams should be drawn in pencil.
6. Unnecessary alteration of work may lead to loss of marks.
7. Any handwriting that cannot be easily read may lead to loss of marks.
8. Do not fill anything in the box indicated for examiner's use only.

FOR EXAMINERS USE ONLY		
QN. NO.	MARK	
1 - 10		
11 - 20		
21 - 22		
23 - 24		
25 - 26		
27 - 28		
29 - 30		
31 - 32		
<b>TOTAL</b>		

**SECTION A (40 MARKS)**


1. Workout:  $2 + 3$

2. Set  $R = \{a, b, c, d\}$  and  
Set  $K = \{a, e, i, o, u\}$   
Find  $R \cap K$ .

3. What is the place value of 4 in the number 2468?

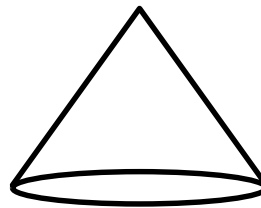
4. Find the next numbers in the sequence below  
1, 3, 5, 7, 9, \_\_\_\_\_, \_\_\_\_\_

5. Workout:  $\frac{2}{7} + \frac{3}{7}$

6. If  represents 12 flowers, how many flowers are represented by



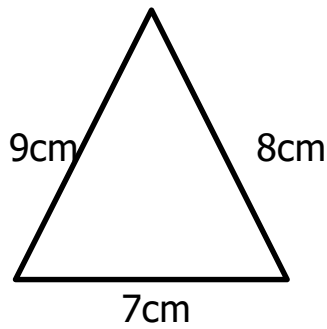
7. Name the shape below.



8. How many months are in 4 years?

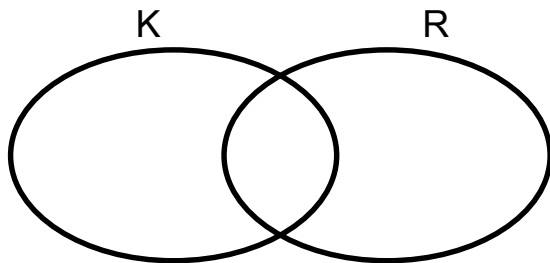
9. One counter books costs sh. 3,000.  
How much will Cissy pay for 4 similar books.

10. Workout the distance around the figure below.



11. Collect the like terms  
 $2y + p + y + 2p$

12. Shade Set R on the Venn diagram below.



13. Divide:  $4 \overline{)404}$

14. Express 26 as a Roman numeral

15. Find LCM of 2 and 3

16. Convert 18000m to Kilometres.

17. Change  $2\frac{3}{4}$  to an improper fraction.

18. Find the missing number.

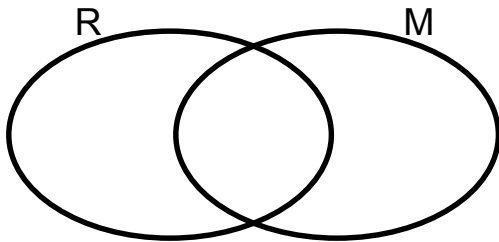
+ 6 = 12

19. Write in figures. "Seven thousand thirty nine".

20. Find the GCF of 8 and 12.

**SECTION B (60 MARKS)**

21. Give that set  $M = \{0, 2, 4, 6, 8\}$  and set  $R = \{1, 2, 3, 4, 5\}$   
 a) Represent the above information on the Venn diagram below. (3mks)



c) Find  $n(R \cup M)$

b) Find  $n(R \cap M)$  (2mks)

22. Workout the following

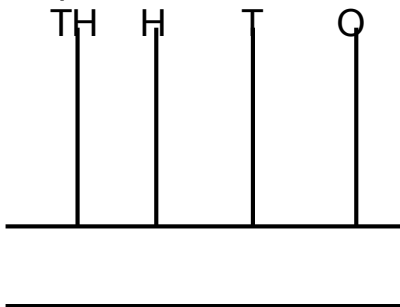
a) 
$$\begin{array}{r} 239 \\ \times 3 \\ \hline \end{array}$$

(b) 
$$\begin{array}{r} 38136 \\ - 5014 \\ \hline \end{array}$$

c) 
$$\begin{array}{r} 12463 \\ + 29326 \\ \hline \end{array}$$

23. Given the number 2 3 4 5  
 a) Write the above number in expanded form.

b) Represent the number on the abacus below.



c) Find the sum of the value of 3 and of value in the number.

24. Fill in the missing numbers

a)  $\square \times 8 = 24$

b)  $13 - \square = 5$

c)  $\square + 11 = 20$

25. The table below shows litres of milk Mr. Kapere's cow produced in a week.

Day	Mon	Tue	Wed	Thur	Fri	Sat	Sun
<b>Number of litres</b>	12	10	9	15	10	13	5

a) On which day was the highest number of litres produced?

b) How many litres did the cow produce on Tuesday?

c) How many more litres were produced on Saturday than Wednesday?

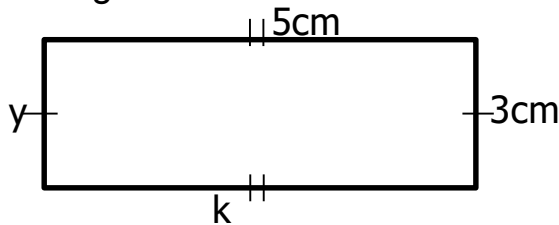
d) How many litres did the cow produce in the whole week?

26. Below is Diana's shopping list. Use it to answer the questions that follow.

ITEM	PRICE
A counter book	Sh. 3,000
A fountain pen	Sh. 1,500
A box file	Sh. 1,500
A ruler	Sh. 1,000

- a) What is the cheapest item on the list?
  
  
  
  
  
  
  
  
  
  
- b) How much is the most expensive item?
  
  
  
  
  
  
  
  
  
  
- c) How much did Diana pay for all items in the list?
  
  
  
  
  
  
  
  
  
  
- d) If Swengere had sh 5,000 and bought a counter book, how much money did she remain with?

27. Study the figure below and answer the questions that follow.


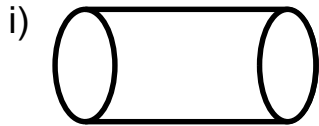


- a) Find the value of
  - i)k
  - ii)y

b) Find the perimeter of the figure above.

c) Workout the area of the above figure.

28. Name the geometrical figures below

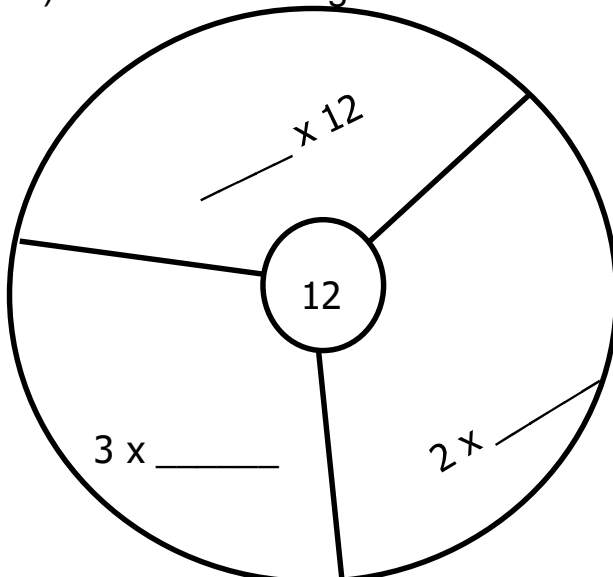


b) Draw the shapes

iii) trapezium

iv) cuboid

29. a) Fill in the missing factors




b) Find the lowest common factor (L.C.M OF 3 AND 4.

30. a) Workout:  $\frac{2}{8} + \frac{1}{8} + \frac{4}{8}$

c) What remains if  $\frac{7}{15}$  is subtracted from  $\frac{13}{15}$ ?

d) Name the unshaded fraction on the diagram below.



31. Use  $>$ ,  $<$  or  $=$  to complete the statements.

a)  $2 + 4$  \_\_\_\_\_  $2 \times 4$

b) 2 weeks \_\_\_\_\_ 14days

c) 35 \_\_\_\_\_ XXV

d)  $\frac{1}{2}$  \_\_\_\_\_  $\frac{1}{3}$



32. Given the digits 3, 5, 4 and 7

a) Use the digits above to form the smallest 4 digit number.

b) Form the largest 4 digit number using all the digits.

c) Find the sum of the smallest and the largest number formed above.

d) Write the largest 4 digit number formed above in words.

**END**



# KINGS WAY PRIMARY SCHOOL

## P. 4 RECESS REVISION 2020-(SET SIX)

### ENGLISH

**DURATION : 2 HOURS 15 MINUTES**

Name .....Stream .....

Read the following instructions carefully

1. This paper is made up of two Sections: A and B.
2. Section A has 50 questions (50 marks)
3. Section B has 5 questions (50 marks)
4. Attempt all questions. Answers to both sections must be written in the spaces provided.
5. All answers must be written with a blue ballpoint pen or in blue ink. Crossing out of answers will lead to loss of marks.
6. Any handwriting that cannot be easily read may lead to loss of marks.

FOR EXAMINERS USE ONLY		
QN. NO.	MARK	SIGN
1-10		
11-20		
21-30		
31 - 40		
41 - 50		
51		
52		
53		
54		
55		
TOTAL		

**SECTION A**  
**SUB-SECTION 1**

**For questions 1-10, use the correct form of the word in brackets to complete the sentences.**

1. Our head girl is a \_\_\_\_\_ tall Rwandan girl. (beauty)
2. Primary Four children are \_\_\_\_\_ their end of term one examination now.(do)
3. There were very many \_\_\_\_\_ in Jinja town in 1982.(industry)
4. The soldiers walked \_\_\_\_\_ to meet the president at Namboole National Stadium. (hurry)
5. A number of Sudanese were seen \_\_\_\_\_ the boarder coming to Uganda. (cross)
6. All the late comers \_\_\_\_\_ going to be punished by the teachers on duty. (to be)
7. Our cat has just killed a \_\_\_\_\_.(mice)
8. December is the \_\_\_\_\_ month of the year.(twelve)
9. Our matron \_\_\_\_\_ our uniforms every day.(wash)
10. Your handwriting is \_\_\_\_\_ than mine.(good)

**For questions 11-15, fill in the blank spaces with a suitable word to complete the sentences.**

11. The thief jumped \_\_\_\_\_ the fence and ran away.
12. My sister \_\_\_\_\_ watching films to reading story books.
13. The head teacher of Mother Majeri Primary School is \_\_\_\_\_ honest man.
14. Driver is to car as \_\_\_\_\_ is to aeroplane.
15. After giving birth to three \_\_\_\_\_, the she-goat died.

**For questions 16-18, rewrite the sentences giving the opposite of the underlined word.**

16. The prince lives a luxurious life.
- \_\_\_\_\_

17. Teachers like impolite children.
- \_\_\_\_\_

18. Travelling by train is more expensive than travelling by bus.

---

**For questions 19 -20, use the given words in sentences to show that you know the difference in their meaning.**

19. their: \_\_\_\_\_

---

20. there: \_\_\_\_\_

---

**For questions 21-23, re-write the sentences giving the plural form of the underlined word.**

21. A donkey is a very useful animal.

---

22. The radio has been taken for repair.

---

23. My goose should be fed in time.

---

**For questions 19-20, write the following abbreviations in full**

24. etc. \_\_\_\_\_

25. Wed. \_\_\_\_\_

26. Rev. \_\_\_\_\_

**For questions 27 and 28, arrange the words in alphabetical order.**

27. cough, care, cure, cereal

---

28. hell, heaven, hill, heel

---

**For questions 29-30, give one word for the underlined group of words**

29. We have not seen the man who mends shoes for a week now.

---

30. Most samosas are made in a shape of a triangle.

---

**SUB-SECTION II**

**For questions 31-50, rewrite the sentences as instructed in the brackets.**

31. I went to sleep immediately my father returned home.  
(Rewrite beginning: As soon as -----)

---

---

32. Sugar is sweet. Honey is very sweet.  
(Re-write using-----as-----as-----)

---

---

33. The maid will mop the house. The visitor will mop the house.  
(Join beginning: Either-----or-----)

---

---

34. Nansubuga is very lazy. She can't complete this work in an hour.  
(Re-write as one sentence using-----too-----to-----)

---

---

35. The tourist saw the signpost. He did not find the hotel.  
(Join the sentence beginning: Although-----)

---

---

36. We did the work and went to sleep.  
(Re-write the sentence using-----after-----)

---

---

37. Adong did not come to school. Apio did not come to school.  
(Join the sentences beginning: Neither -----)

---

---

38. The old woman is sweeping the kitchen.  
(Re-write the sentence beginning: The kitchen-----)  
\_\_\_\_\_  
\_\_\_\_\_
39. That pit is very deep. (Re-write the sentence beginning: What -----!)  
\_\_\_\_\_  
\_\_\_\_\_
40. Some children like beans more than chicken.  
(Re-write the sentence using-----prefer-----)  
\_\_\_\_\_  
\_\_\_\_\_
41. Walter is tall. Obuku is very tall. (Join the sentences using-----than-----)  
\_\_\_\_\_  
\_\_\_\_\_
42. The teacher of English was very angry. He could not mark our books.  
(Re-write as one sentences using-----so -----that-----)  
\_\_\_\_\_  
\_\_\_\_\_
43. Namakula goes to school on foot, \_\_\_\_\_?  
(Supply a suitable question tag)  
\_\_\_\_\_  
\_\_\_\_\_
44. Cathy is very old. She can go to the market alone.  
(Join the sentences using-----enough-----)  
\_\_\_\_\_  
\_\_\_\_\_
45. There wasn't any child in the classroom.  
(Re-write the sentence using-----some-----)  
\_\_\_\_\_  
\_\_\_\_\_

46. Apio is cleverer than Laker and Aber. (Begin: Of the three children,-----)  
\_\_\_\_\_  
\_\_\_\_\_
47. Kamanda likes playing computer games. (Re-write using ----fond of-----)  
\_\_\_\_\_  
\_\_\_\_\_
48. Juma boarded the fastest bus. He wanted to reach home early.  
(Join the sentences using -----in order-----)  
\_\_\_\_\_  
\_\_\_\_\_
49. Peter has bought a bag. The bag is yellow in colour.  
(Re-write as one sentence ending-----bag. )  
\_\_\_\_\_  
\_\_\_\_\_
50. A bad workman -----(Rewrite and complete the proverb correctly)  
\_\_\_\_\_  
\_\_\_\_\_

### Section B

51. **Read the passage below and answer the questions that follow in full sentences.**

#### **THE GREEDY MULULU**

Once upon a time, there lived a man called Mululu in Kitigoma Village. Every time he bought meat, he would tie a fibre on the biggest piece of meat. This fibre helped him to identify his piece of meat during the time of serving. He used to punish his children on the days of meat; not by caning them, but by refusing to give them meat so as to eat it alone. His wife could cut and count all the pieces of meat before boiling and she could only take soup and the end.

One day, Mululu's eldest son completed his studies at Makerere University. Mululu and his wife were excited and organized a very huge party for their son. Mululu invited many people including friends and relatives. He bought a lot of meat and ordered his wife to cut a piece as big as his head for him.

At dinner time, he ordered all visitors to serve themselves. As the wife was moving up and down, she forgot to keep Mululu's piece of meat aside. By the time she remembered, Mululu's brother-in-law had already enjoyed part of Mululu's piece of meat. When Mululu saw this, he screamed, jumped over the table, slapped his brother-in-law and snatched the piece of meat from him. Mululu's action left the guests in great shock. What a big embarrassment it was to the family! As if that wasn't enough, he went into his house, picked a panga ready to cut whoever said anything against him. This made all the guests to run away to save their dear lives.

**Questions**

1. What is the passage about?

---

---

2. Where did Mululu and his family live?

---

---

3. For whom did Mululu and his wife organize a party?

---

---

4. What did the wife forget to do according to the passage?

---

---

5. Why did the guests run away?

---

---

6. At which university did Mululu's son complete his studies?

---

---



7. According to the passage, whom did Mululu slap?

---

---

8. How did Mululu punish his children on the days of meat?

---

---

9. Write the plural form of "brother-in-law".

---

10. What is the title of the passage?

---

52. **Complete the table below correctly**

short	_____	shortest
_____	thinner	_____
kind	_____	_____
handsome	more handsome	_____
bad	_____	worst
_____	less	least
lazy	_____	_____

53. **Choose the words from the box to complete the letter correctly.**

Irundu Parents' Primary School,

\_\_\_\_\_,

KAMULI.

13<sup>th</sup> April, 2018

Dear \_\_\_\_\_,

How are you doing, and how is Dad? Let me hope Joan, John and Jessy are all okay.

Mum, we are given everything at school but the \_\_\_\_\_ we are served is not actually enough. This makes me hungry most of the time.

I therefore \_\_\_\_\_ you to send me some \_\_\_\_\_,  
biscuits and bread. This will enable me \_\_\_\_\_ on my books  
and pass the end of term one \_\_\_\_\_ well.  
Let me hope you are going to \_\_\_\_\_ to my request  
as soon as you get this letter.

Send my \_\_\_\_\_ to John and others.

Your daughter,  
\_\_\_\_\_

request, concentrate, food, regards, Faith Nabuduwa,  
respond, sugar, Mum, P.O. Box 2121, examinations

54. **Read the poem below and answer the questions that follow in full sentences**

When Dad punishes me,  
For the mistake I have made,  
I feel unhappy and cry a lot,  
Yes, I have made a mistake  
But let him forgive me,  
I fell happy when he forgives me.

When mum doesn't prepare food in time,  
I feel hungry and cry a lot,  
There is something missing in my stomach,  
And mum is the one who prepares food  
Yes, I need to eat to settle down.

**Samson Mulyambisi (P.4 Creative)**

**Questions**

a) How does the writer feel when Dad punishes him?

---

---

b) When does the writer feel hungry?

---

---

c) Give the opposite of 'unhappy'.

---

---

d) How does the writer feel when he is forgiven?

---

---

e) Who wrote the above poem?

---

---

f) In which class is the writer of the poem?

---

---

g) Who prepares food for the writer?

---

---

h) What does the writer need to settle down?

---

---

i) Why does the writer cry in the second stanza?

---

---

j) How many Stanzas has the poem?

---

---

55. **The map below shows part of Kagumba village in Masindi District. Study it carefully and then answer the questions that follow in full sentences.**

**Questions**

1) What does the above map show?

---

---

2) Which road do Jagwe's children take to reach school?

---

3) Which building is near the bore hole?

---

---

4) Where does Jagwe's family get treatment from?

---

5) To which school do Jagwe's children go?

---

---

6) Which road is near the playground according to the map?

---

---

7) In which direction is the forest from Jimmy's Clinic?

---

8) Where does Jagwe's family buy the items to use at home?

---

---

9) How is the borehole useful to the people of Kagumba Village?

---

---

10) In which district is Kagumba Village found?

---

**SUCCESS**  
**END**



# KINGS WAY PRIMARY SCHOOL

P. 4 RECESS REVISION 2020-(SET SIX)

## INTEGRATED SCIENCE

**DURATION: 2 HOURS 15 MINUTES**

Name ..... stream.....

**Read the following instructions carefully**

1. This paper is made up of two Sections: A and B.
2. Section **A** has 40 questions (40 marks)
3. Section B has 15 questions (60 marks)
4. Attempt all questions. Answers to both sections must be written in the spaces provided.
5. All answers must be written in blue or black ballpoint pen or ink but not in pencil. All work done in pencil, except diagrams, will **NOT** be marked.
6. Crossing out of answers will lead to loss of marks.
7. Any handwriting that cannot be easily read may lead to loss of marks.

FOR EXAMINERS USE ONLY		
QN. NO.	MARK	SIGN
1-10		
11-20		
21-30		
31 – 40		
41 – 50		
51		
52		
53		
54		
55		
<b>TOTAL</b>		

## SECTION A

1. Name the part of a plant that makes food.

---

2. Write down any one characteristic of living things.

---

3. State the basic units for measuring temperature.

---

4. How can we prevent contamination of prepared food?

---

5. Name the immunisable disease that makes children lame.

---

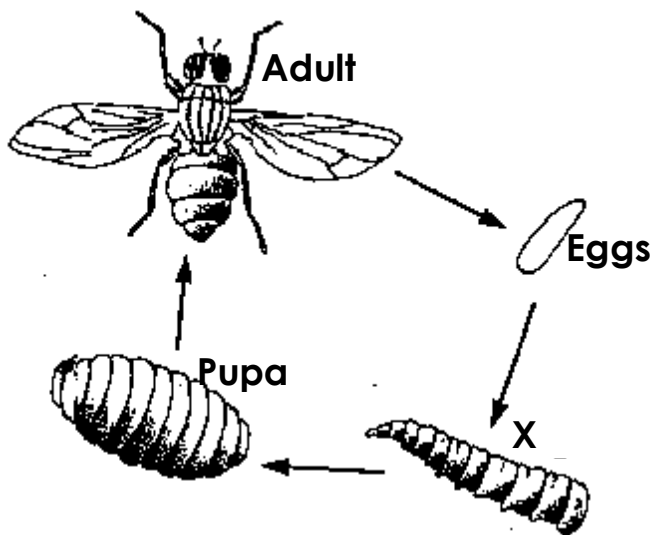
6. Give one form of energy got from a burning candle apart from light.

---

7. State any one way of harvesting perennial crops.

---

**Use the life cycle of a housefly below to answer questions 8 and 9.**



8. Name the stage marked **X**.

---

9. Apart from part **X**, mention any other active stage of a housefly.

---

10. Give any one material used for building permanent houses.

---

11. How is a latrine useful in a school?

---

12. Give any one example of a cereal crop.

---

13. Write HIV in full.

---

14. Why is salt used in the making of oral rehydration solution?

---

15. Why do people keep cats in their homes?

---

**Use the structure of a stem below to answer question 16 and 17.**



16. Name the part marked X

---

17. How is the stem important to a sugar cane plant?

---

18. State any one activity carried out during a health parade.

---

19. Write down any one importance of weeds to man.

---

20. State any one common cause of accidents at school.

---

21. Give any one way of preventing rusting of iron tools.

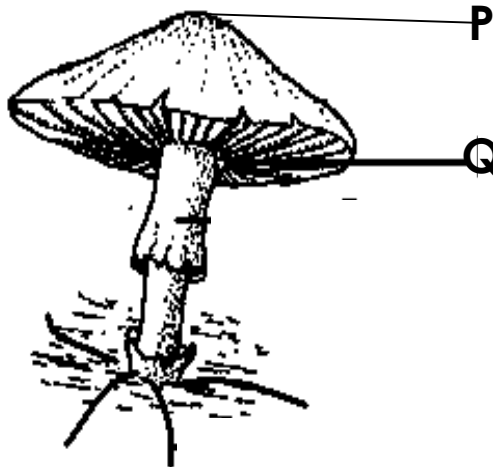
---

22. Which type of soil is most suitable for pottery?

---



The diagram below shows a mushroom. Study and use it to answer question 23 and 24.



23. Name the part marked **P**.

---

24. Give the function of the part marked **Q**.

---

25. Give any one modern method of preserving meat.

---

26. Why do people put on jackets during cold weather?

---

27. How does a wasp protect itself?

---

28. How is a cotyledon of a bean seed similar to the endosperm of a maize grain?

---

29. State any one way of preventing diseases at home without using drugs.

---

30. Name the sense organ for touch in the human body.

---

31. State the importance of a weather forecast to a crop farmer.

---

32. State one use of electricity at home apart from providing light.

---

33. Write down one reason for giving First Aid to casualties.

---

34. Give any one basic need of a dog.

---

35. How are shadows important to man?

---


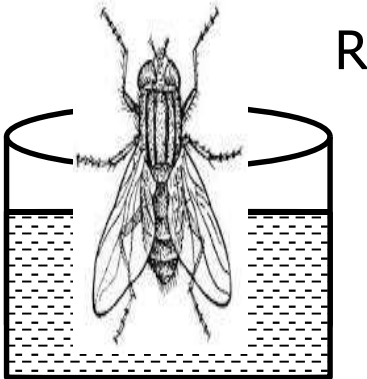
36. Why is carbondioxide used in fire extinguishers?

---

37. How is a rain gauge important in a weather station?

---

**Use the diagram below to answer the questions 38 and 39.**



38. In which container will the insect die after a short time?

---

39. Give a reason for your answer in (No.38) above.

---

40. Give any one source of food in the community.

---

**SECTION B (60 Marks)**

41. a) Apart from oxygen, give any other two components of air.

i) \_\_\_\_\_

ii) \_\_\_\_\_

b) state any one process that needs oxygen to take place

c) Which property of air enables one to take soda using a straw?

---

42. a) What is photosynthesis?

---

---

b) Write down the two raw materials needed for photosynthesis to take place.

i)

---

ii)

---

c) State one way man benefits from photosynthesis.

---

43. a) State any two ways of promoting sanitation at school.

i)

---

ii)

---

b) Give any two diseases that break out due to poor sanitation in the community.

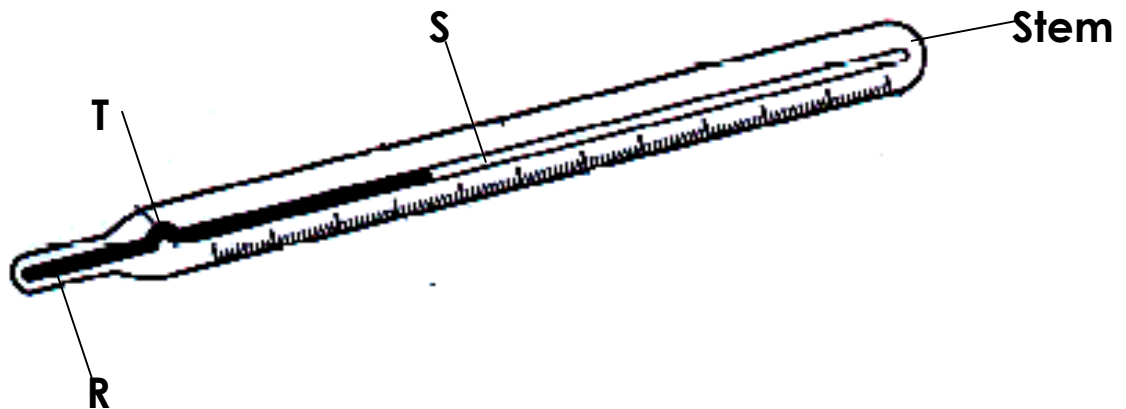
i)

---

ii)

---

44. **The diagram below shows a medical instrument. Study and use it to answer the questions that follows.**



a) State the importance of the instrument above to the doctor.

---

b) Give the function of part marked T.

---

c) Name the liquid metal used in part marked R.

---

d) Give any one reason why the liquid above is used in a clinical thermometer.

---

45. a) Give any two natural sources of water in the community.

i) \_\_\_\_\_

ii) \_\_\_\_\_

b) State any two domestic uses of water to people.

i) \_\_\_\_\_

ii) \_\_\_\_\_

46. a) Apart from weeding, state any other two ways farmers can care for their crops.

i) \_\_\_\_\_

ii) \_\_\_\_\_

b) Give any one example of a weed.

---

c) How are weeds dangerous to farmers?

---

47. a) Mention any one common accident at home.

---

b) Write down any two reasons why First Aid is given to casualties.

i) \_\_\_\_\_

ii) \_\_\_\_\_

c) How is spirit important when giving First Aid?

---

48. a) Give two ways farmers can care for their garden tools.

i) \_\_\_\_\_

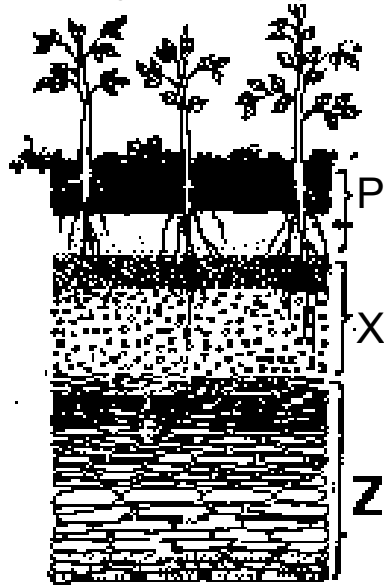
ii) \_\_\_\_\_

b) Give two conditions that make garden tools to rust.

i) \_\_\_\_\_

ii) \_\_\_\_\_

49. The diagram below shows soil layers. Study and use it to answer the questions that follow.



a) What name is given to the layers of soil shown above?

\_\_\_\_\_

b) Name the layers marked P and X.

i) P \_\_\_\_\_

ii) X \_\_\_\_\_

c) Which layer supports proper plant growth?

\_\_\_\_\_

50. a) Give any two ways of preparing food.

i) \_\_\_\_\_

ii) \_\_\_\_\_

b) Give any one reason why people prepare food.

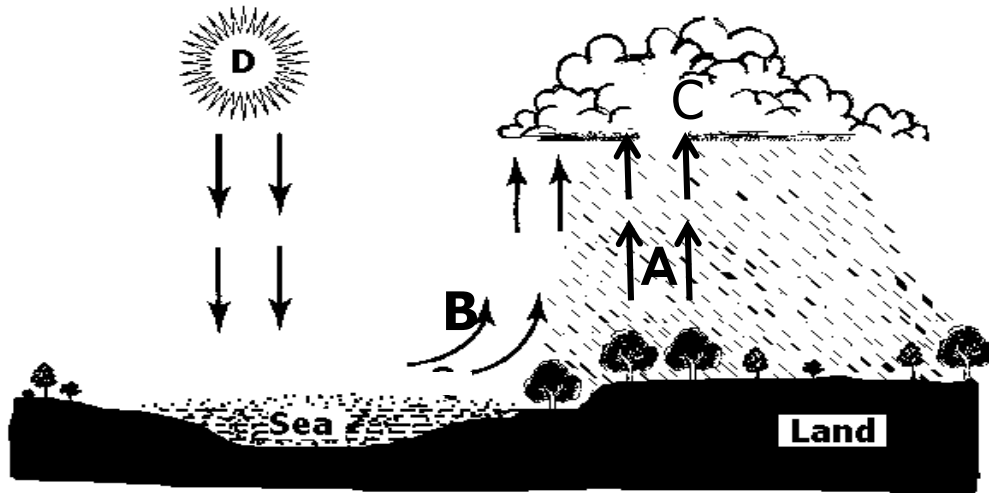
\_\_\_\_\_

c) State any one traditional method of preserving food.

\_\_\_\_\_

51. a) Give any two domestic animals kept for milk production.  
i) \_\_\_\_\_  
ii) \_\_\_\_\_
- b) Give any two products got from milk apart from yoghurt.  
i) \_\_\_\_\_  
ii) \_\_\_\_\_
52. a) Write down any two causes of dehydration in children.  
i) \_\_\_\_\_  
ii) \_\_\_\_\_
- b) State any one effect of dehydration.  
\_\_\_\_\_
- c) Why is Oral Rehydration Solution given to a dehydrated child?  
\_\_\_\_\_
53. a) Apart from village food path, name any other one type of a food path.  
\_\_\_\_\_
- b) Write down any two stages in a village food path.  
i) \_\_\_\_\_  
ii) \_\_\_\_\_
- c) Give any one block in a village food path.  
\_\_\_\_\_
54. a) What are germs?  
\_\_\_\_\_  
\_\_\_\_\_
- b) Give any two types of germs.  
i) \_\_\_\_\_  
ii) \_\_\_\_\_
- c) Give any one way in which germs are spread from one person to another.  
\_\_\_\_\_

55. The diagram below shows the water cycle. Study and use it to answer the questions that follow.



- a) Name the process marked A and B.
- i) A \_\_\_\_\_
- ii) B \_\_\_\_\_
- b) Name the clouds that give us rain.
- \_\_\_\_\_
- c) How is part labeled D important in a water cycle?
- \_\_\_\_\_

**END**



# KINGS WAY PRIMARY SCHOOL

P. 4 RECESS REVISION 2020-(SET SIX)

## SOCIAL STUDIES

**DURATION: 2 HOURS 15 MINUTES**

**Name .....**Stream.....

**Read the following instructions carefully**

1. This paper has two sections: **A** and **B**.
2. Answer **all** questions. **All** answers to both sections **A** and **B** must be written in the spaces provided.
3. **All** answers must be written using a blue or black ball-point pen or fountain pen.
4. Unnecessary changes of work may lead to loss of marks.
5. Any handwriting that cannot easily be read may lead to loss of marks.
6. Do **not** fill anything in the boxes indicated "**For Examiners' Use Only**" and those inside the question paper.

<b>FOR EXAMINERS' USE ONLY</b>		
<b>QN. NO.</b>	<b>MARK</b>	<b>EXRS' NO.</b>
<b>1-10</b>		
<b>11-20</b>		
<b>21-30</b>		
<b>31-40</b>		
<b>41-43</b>		
<b>44-46</b>		
<b>47-49</b>		
<b>50-52</b>		
<b>53-55</b>		
<b>TOTAL</b>		



## SECTION A

1. Write SST in full.

---

2. State any one role of a father at home.

---

3. How does the police keep law and order in our community?

---

4. Which school symbol directs people to school?

---

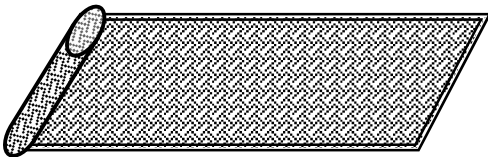
5. Give any one use of trees in the environment.

---

6. On which hill in Kampala do we find the water tanks?

---

7. Which local material is used to make the craft materials below?



---

8. Name any example of children rights.

---

9. State anyone material used for roofing permanent houses.

---

10. What do we call a person who gives First Aid?

---

11. State any example of a cash crop.

---

12. What are customs?

---

13. In which district is our school found?

---

14. Write any one economic activity carried out in our district.  
\_\_\_\_\_
15. State the importance of a scale to a map reader.  
\_\_\_\_\_
16. Name the man-made lake found in Rubaga division.  
\_\_\_\_\_
17. Give any one danger of deforestation to the environment.  
\_\_\_\_\_
18. Mention any one skill learnt in formal education.  
\_\_\_\_\_
19. State any one way early man obtained food.  
\_\_\_\_\_
20. How is too much rainfall dangerous in an area?  
\_\_\_\_\_
21. Who is a child?  
\_\_\_\_\_
22. Write any one way of preserving fish.  
\_\_\_\_\_
23. How many urban councils make up Kampala city?  
\_\_\_\_\_
24. What title is given to the traditional leader of Buganda Kingdom?  
\_\_\_\_\_
25. Which Ethnic group is related to the legend of a spear and the bead?  
\_\_\_\_\_
26. Give the opposite direction of North East.  
\_\_\_\_\_
27. How is the rain gauge important at the weather station?  
\_\_\_\_\_

28. Mention any one tool used for keeping time at school.

---

29. Write BOU in full.

---

30. How is shelter important to man?

---

31. What does red colour on the Uganda flag mean?

---

32. Which L.CI member is responsible for children's problems?

---

33. Write down your School Motto.

---

34. Draw the road sign below.



35. How are the Bagisu similar to Bakonjo in their culture?

---

**For questions 36-40, answer either Christianity or Islamic but not both on a number.**

36. Either: What did God create on the first day?

---

Or: What did Allah created on the first day?

---

37. Either: Who built the Ark?

---

Or: Who built the Ark?

---

38. Either: How did God punish man for disobeying Him?

---

Or: How did Allah punish man for disobeying Him?

---

39. Either: How did Jesus show love to people?

---

Or: How did Prophet Muhammad show love to His followers?

---

40. Either: How can we care for God's creation?

---

Or: How can we care for Allah's creation?

---

**Section B (60 marks)**

41. a) What are physical features?

---

b) Write any three examples of relief features.

i) \_\_\_\_\_

ii) \_\_\_\_\_

iii) \_\_\_\_\_

42. a) Give the type of rainfall that is received in areas around forests.

---

b) Name any process involved in the formation of the rainfall mentioned in (a) above.

---

c) State any two dangers of too much rainfall in any area.

i) \_\_\_\_\_

ii) \_\_\_\_\_

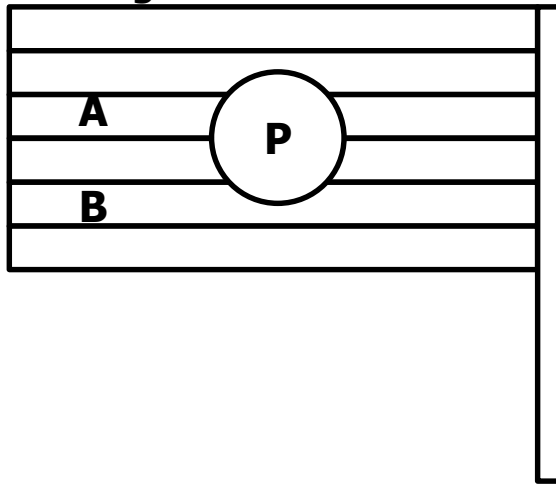
43. a) Mention the major line of Latitude marked  $0^\circ$  on a map.  
\_\_\_\_\_
- b) Give any two districts in Uganda that are crossed by the Equator.  
i) \_\_\_\_\_  
ii) \_\_\_\_\_
- c) State any one use of the lines of Latitude.  
\_\_\_\_\_
44. a) What is an Island?  
\_\_\_\_\_
- b) Give any one example of an Island district in Uganda.  
\_\_\_\_\_
- c) In which lake of Uganda is the district mentioned above located.  
\_\_\_\_\_
- d) What type of transport do people who live in Island areas commonly use?  
\_\_\_\_\_
45. a) Write K.C.C.A in full.  
\_\_\_\_\_
- b) From which animal did Kampala district get her name?  
\_\_\_\_\_
- c) What title is given to the political head of Kampala City?  
\_\_\_\_\_
- d) Give any one important place in Kampala city.  
\_\_\_\_\_
46. a) Name the weather instrument used to show the direction of wind.  
\_\_\_\_\_
- b) Give any one use of wind to man.  
\_\_\_\_\_

c) State any two dangers of strong wind in the environment.

ii) \_\_\_\_\_

ii) \_\_\_\_\_

47. Use the diagram below to answer the questions that follow.



a) How many colours has Uganda Flag?

\_\_\_\_\_

b) Name the colours of the Uganda flag marked on the diagram above.

i) A \_\_\_\_\_

ii) B \_\_\_\_\_

c) Give one place where the Ugandan flag is flown.

\_\_\_\_\_

48. a) What name is given to the group of people related by blood, marriage or adoption?

\_\_\_\_\_

b) Give any one type of a family.

\_\_\_\_\_

c) Mention any two duties of children in a home.

i) \_\_\_\_\_

ii) \_\_\_\_\_

49. a) Who is a leader?

\_\_\_\_\_

b) Mention any two qualities of a good leader.

i) \_\_\_\_\_

ii) \_\_\_\_\_

c) Why do we need prefects in our school?

\_\_\_\_\_

50. a) What are economic activities?

\_\_\_\_\_

b) Mention any two examples of economic activities people do in our community.

i) \_\_\_\_\_

ii) \_\_\_\_\_

c) Give any one problem people face while at work.

\_\_\_\_\_

**Questions 51 – 55 answer Either Christianity or Islam but not BOTH on a number**

51. Either: a) Who was the earthly father of Jesus?

\_\_\_\_\_

b) What was the work of Joseph the father of Jesus?

\_\_\_\_\_

c) Write short notes about the following places

i) Bethlehem\_\_\_\_\_

ii) Nazareth\_\_\_\_\_

Or: a) Who was the father of Prophet Muhammad.

\_\_\_\_\_

b) What was the work of Prophet Muhammad's father?

\_\_\_\_\_

c) Write short notes about following

i) Mecca\_\_\_\_\_

ii) Medina\_\_\_\_\_

52. Either:(a) Who is a Prophet?

\_\_\_\_\_

b) Mention any three examples of Prophet in Christianity.

i) \_\_\_\_\_

ii) \_\_\_\_\_

iii) \_\_\_\_\_

Or: a) Who is a Prophet?

\_\_\_\_\_

\_\_\_\_\_

b) Mention any three examples of prophet in Islam.

i) \_\_\_\_\_

ii) \_\_\_\_\_

iii) \_\_\_\_\_

53. Either: a) Which material did God use to create man?

\_\_\_\_\_

b) Give any two reasons why God created man.

i) \_\_\_\_\_

ii) \_\_\_\_\_

c) How did man disobey God?

\_\_\_\_\_

Or: a) Which material did Allah use to create man?

\_\_\_\_\_

b) Give any two reasons why Allah created man.

i) \_\_\_\_\_

ii) \_\_\_\_\_

c) How did man disobey Allah?

\_\_\_\_\_

54. Either : a) Who received the Ten commandments from God?

\_\_\_\_\_



b) Write down any two commandments in the Bible.

i) \_\_\_\_\_

ii) \_\_\_\_\_

c) On which mountain did Moses receive the Ten Commandments?

\_\_\_\_\_

Or: a) Who received the Tauret from Allah?

\_\_\_\_\_

b) Write down any two pillars of Islam.

i) \_\_\_\_\_

ii) \_\_\_\_\_

c) On which mountain did Prophet Muhammad receive the revelation of the Holy Qu'ran?

\_\_\_\_\_

55. **Both:** a) What is a prayer?

\_\_\_\_\_

\_\_\_\_\_

b) Give any three reasons why people pray to God/Allah.

i) \_\_\_\_\_

ii) \_\_\_\_\_

iii) \_\_\_\_\_

**WORK HARDER**  
**END**