



# KINGS WAY PRIMARY SCHOOL

P. 4 RECESS REVISION 2020 - (SET FOUR)

ENGLISH

**DURATION : 2 HOURS 15 MINUTES**

Name .....

Stream.....

## SECTION A (50 marks)

**Arrange the letter to form correct words.**

1. neelk \_\_\_\_\_
2. changea \_\_\_\_\_
3. collcet \_\_\_\_\_
4. charcoal \_\_\_\_\_

**Complete the sentences with correct words.**

5. Boaz sits \_\_\_\_\_ front of the teacher's table.
6. She borrowed a pen \_\_\_\_\_ John.
7. They did not come to school \_\_\_\_\_ he is sick.
8. Niece is to nephew as sister is to \_\_\_\_\_.
9. \_\_\_\_\_ is the last moth of the year.

**Use the correct forms of the words in the brackets to complete the sentences.**

10. The pupils \_\_\_\_\_ the questions correctly. (answer)  
11. The baby \_\_\_\_\_ loudly last night. (cry)  
12. She keeps two \_\_\_\_\_ at her farm. (sheep)  
13. My father \_\_\_\_\_ all the fees. (pay)  
14. He is the best \_\_\_\_\_ in the whole school. (run)

**Arrange the words in alphabetical order.**

15. cat, dog, rat, bird

---

16. mother, daughter, father, son

---

**Give the opposites of the following words.**

17. morning \_\_\_\_\_  
18. head girl \_\_\_\_\_

**Rewrite giving the plurals of the underlined words.**

19. I ate an orange yesterday.

---

20. I have an ox on our farm.

---

21. Mother bought a basket.

---

**Punctuate the sentences correctly.**

22. bosco goes to church on Sundays

---

23. may i come in please

---

24. she goes to hillside school

---

**Underline the odd word out.**

25. first, two, three, four

26. leaf, root, flower, stone

27. milk, soda, water, dress

**Write the following in full form**

28. that's \_\_\_\_\_

29. isn't \_\_\_\_\_

30. Dr. \_\_\_\_\_

31. Rev. \_\_\_\_\_

**Fill in a or an to complete the sentences.**

32. John has \_\_\_\_\_ orange in his bag.

33. she has \_\_\_\_\_ ring on her finger.

34. Jane is \_\_\_\_\_ good girl.

35. \_\_\_\_\_ apple a day keeps the doctor away.

**Give one word for the underlined group of words.**

36. Bosco goes to a place where we learn from.

---

37. Mother has gone to the place where the sick are treated.

---

38. let's drive to the place where Christians pray from.

---

39. We had the first meal of the day at 8:00a.m

---

40. Uncle is at the market buying apples, oranges and lemons.

---

**SECTION B (50 marks)**

**Rewrite the sentences as instructed in the brackets.**

41. Susan is honest. Susan is kind. (use.....and.....)  
\_\_\_\_\_
42. Mr. Hare went to the market. He did not buy anything.  
(Join using.....but.....)  
\_\_\_\_\_  
\_\_\_\_\_
43. He fell down. He was running. (Join using: .....while.....)  
\_\_\_\_\_  
\_\_\_\_\_
44. I like meat more than chicken.  
(Join using: .....too .....to.....)  
\_\_\_\_\_  
\_\_\_\_\_
45. Jesca is very fat. She cannot win the race. (Join using:  
.....too...to.....)  
\_\_\_\_\_  
\_\_\_\_\_
46. Musa is hungry. He did not have breakfast. (Join as one  
sentence using.....because.....)  
\_\_\_\_\_  
\_\_\_\_\_
47. As white as.... (Complete correctly)  
\_\_\_\_\_
48. Mary will travel to Japan. (Re-write and begin: She.....)  
\_\_\_\_\_  
\_\_\_\_\_
49. That is a man. He got an accident.(Rewrite using.....who...)  
\_\_\_\_\_  
\_\_\_\_\_
50. I have four legs and my young ones are calves. Who am I ?  
(Complete sensibly)  
\_\_\_\_\_  
\_\_\_\_\_

## SECTION B:

### 51. Read the story and answer the questions about it full sentences.

One day, grandmother was sick. Mother went to Kyebando to see grandmother. Maria and Musa stayed at home. Maria cooked food and washed utensils. Musa looked after the baby. He gave him milk in the evening, he was very happy. He said Musa and Maria were good children.

#### Questions:

1. Who are the children in the story?

---

---

2. Where did mother go?

---

---

3. Why did mother go to the village?

---

---

4. Who washed the utensils?

---

---

5. What did Musa do?

---

---

6. Mention any two utensils?

(i) \_\_\_\_\_ (ii) \_\_\_\_\_

7. When did father come back?

---

---

8. Who was sick in the story?

---

---

9. What did father say when he came back?

---

---

**52. Complete the table correctly.**

verb	Past tense	Past participle
_____	danced	_____
_____	created	created
fly	_____	flown
mop	mopped	_____
clap	_____	clapped

**B. Form adverbs from the given words.**

lazy lazily  
 angry \_\_\_\_\_  
 noisy \_\_\_\_\_  
 gentle \_\_\_\_\_  
 sensible \_\_\_\_\_  
 humble \_\_\_\_\_

**53. Study the information and answer questions in full sentences**

NAME: Katala Bosco  
 Age: 8 years  
 Tribe: Muganda  
 Father's name: Kapeere Bosco  
 Home village: Lumino  
 School : Mukono Primary School  
 Class : P.3  
 Teacher's name: Mr. Brown.

**Questions:**

1. Whose information is shown?

\_\_\_\_\_

2. Which tribe is Katala Bosco?

\_\_\_\_\_

3. Who is Katala's father?

---

4. Where does he live?

---

5. How old is Katala?

---

6. To which school does he go?

---

7. In which class is he?

---

8. Who is Katala's teacher?

---

9. Write P.3 in words.

---

10. In which class will he be next year?

---

**54. (a) Rewrite the sentences correctly to form a good story.**

a) She feared to go there alone.

b) Jane got a stick and killed it.

c) Mother sent Halima to the well to fetch water.

d) As they walked to the well, they saw a snake.

e) Halima called her friend to escort her.

a) \_\_\_\_\_

b) \_\_\_\_\_

c) \_\_\_\_\_

d) \_\_\_\_\_

e) \_\_\_\_\_

b) **Arrange the following sentences to form a good story.**

- i) I hope you all did homework.
- ii) Good morning class.
- iii) And if so, hand in for marking.
- iv) How are you class?
- v) As you get ready for the lesson.

- a) \_\_\_\_\_
- b) \_\_\_\_\_
- c) \_\_\_\_\_
- d) \_\_\_\_\_
- e) \_\_\_\_\_

**55. Form sentences using this table below.(2 marks each)**

<b>It is</b>	good to	thank others. shout at others. play with others. pray with others. beat young children for nothing.
<b>It is</b>	bad to	listen to others. help others.

- a) \_\_\_\_\_
- b) \_\_\_\_\_
- c) \_\_\_\_\_
- d) \_\_\_\_\_
- e) \_\_\_\_\_

**END**





# KINGS WAY PRIMARY SCHOOL

**P. 4 RECESS REVISION 2020-(SET FOUR)**

**INTEGRATED SCIENCE**

**DURATION:** 2 HOURS 15 MINUTES

**Name** ..... **Stream**.....

## SECTION A (40 MARKS)

1. Name one component of the environment.

---

2. Why should we sleep under treated mosquito nets?

---

3. Give any one source of water at school.

---

4. Write down one living thing.



---

5. How are leaves important to a plant?

---

6. State any one crop whose seeds are eaten by man.

---

7. Write down one way of caring for garden tools.

---

8. How is water useful to a P.4 pupil at home?

---

9. Give one importance of bees to people.

---

10. Why is a stone grouped under non-living things?

---

11. Name any one gas that is found in air.

---

12. How is the item drawn below useful to a P.4 child?



---

---

13. Which component of soil is formed by decaying of dead plants and animals?

---

14. How are nimbus clouds useful in the environment?

---

15. Why is a fish grouped under aquatic animals?

---

16. Give one human activity that causes soil erosion.

---

17. Name the body sense organ for feeling.

---

18. In which direction does the sun rise?

---

19. State any one basic need of people.

---

20. What name is given to the breathing organs of an insect?

---

21. Write down any one natural change in the environment.

---

22. Which vector spreads trachoma to man.

---

23. Name the vitamin our skins make from the sun.

---

24. Give one use of sand soil to people.

---

25. In which way can sanitation be promoted at school?

---

26. Name one domestic animal kept for milk production.

---

27. State one way of preparing food at home.

---

28. How can crop farmers care for their crops during the dry season?

---

29. Write any one use of electricity at home.

---

30. How is heavy rainfall dangerous to people?

---

31. Which type of soil is used to make the item below?



---

32. How is the item above useful in a home?

---

33. In which type of weather is an umbrella useful?

---

34. Name one product that is got from domestic birds.

---

35. State one method of preserving food at home.

---

36. Name one animal that lives in the bush.

---

37. How are legs useful to people?

---

38. What food value do we get from eating fish?

---

39. Write any one example of fungi in the environment.

---

40. In which season do farmers harvest their crops?

---

**Section B (60 marks)**

41. a) What are domestic birds?

---

---

b) Give two examples of domestic birds.

i)  

---

ii) 

---

c) State one importance of birds to people.

---

42. a) Which term refers to the removal of top soil by its agents?

---

b) Give any two agents of soil erosion.

i) 

---

ii) 

---

c) Write one way of controlling soil erosion.

---

43. Study the table below carefully and complete it correctly.

Organism	Breathing organs
Goat	a) _____
b) _____	spiracles
Fish	c) _____
d) _____	stomata

44. a) What is the main natural source of water in the environment?

b) \_\_\_\_\_  
\_\_\_\_\_

c) Name two containers that are used to collect water at home.

i) \_\_\_\_\_  
ii) \_\_\_\_\_

45. a) What is seed germination.

\_\_\_\_\_


b) Name two conditions needed for a seed to germinate.

i) \_\_\_\_\_  
ii) \_\_\_\_\_

c) What do we call a young plant in the garden?

\_\_\_\_\_

46. Study the diagram below carefully and answer the questions about it correctly.



- a) Name the parts marked O and P
  - i) O \_\_\_\_\_
  - ii) P \_\_\_\_\_
- b) How is part marked Q useful to the bird.
 

\_\_\_\_\_
- c) Name the structures that cover the bird's body.
 

\_\_\_\_\_

47. a) Name any two garden tools
- i) \_\_\_\_\_
  - ii) \_\_\_\_\_
- b) Give one way people use garden tools.
- \_\_\_\_\_
- c) State one way of taking care of garden tools.
- \_\_\_\_\_

48. Match List A to list B correctly

A	B
Cow	Fry
Sheep	Piglet
Pig	Calf
Fish	Lamb

- i) cow \_\_\_\_\_
- ii) sheep \_\_\_\_\_
- i) pig \_\_\_\_\_
- ii) fish \_\_\_\_\_

49. a) What is air?

---

---

b) Mention any two components of air.

i) 

---

ii) 

---

c) State any one property of air.

---

50. Sanitation is the general cleanliness of an area.

a) Give two ways of keeping the school compound clean.

i) 

---

ii) 

---

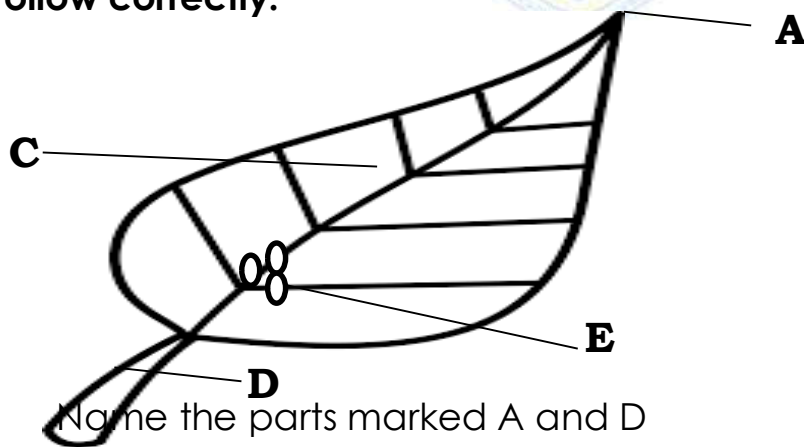
b) Write down one item used to keep the school compound clean.

---

b) Name one disease that can result from poor sanitation.

---

51. **The diagram below shows a plant leaf. Use it to answer the questions that follow correctly.**



a) Name the parts marked A and D

i) A 

---

ii) D 

---

b) State the function of the part marked E.

---

c) Give one use of leaves to plants.

---

52. a) Give any two reasons why we give first aid.

i) 


---

- ii) \_\_\_\_\_
- b) Write down any two items used to give first aid to casualties.
- i) \_\_\_\_\_
- ii) \_\_\_\_\_

53. a) What is a crop pest?
- \_\_\_\_\_
- b) Give any two examples of crop pests.
- i) \_\_\_\_\_
- ii) \_\_\_\_\_
- c) State any one way of controlling crop pests.
- \_\_\_\_\_

54. a) Write down any two examples of social insects.
- i) \_\_\_\_\_
- ii) \_\_\_\_\_
- b) State one characteristic of insects.
- \_\_\_\_\_
- c) Which part of an insect is used for feeling?
- \_\_\_\_\_

55. **The diagram below shows a structure used to store food. Use it to answer the questions that follow.**



- a) Name the structure above.
- \_\_\_\_\_
- b) How is part marked **Y** useful to the above structure.
- \_\_\_\_\_
- c) Give any two food stuffs that can be stored in the above structure.
- i) \_\_\_\_\_
- ii) \_\_\_\_\_

**END**





# KINGS WAY PRIMARY SCHOOL

P. 4 RECESS REVISION 2020-(SET FOUR)

**SOCIAL STUDIES**

**DURATION: 2 HOURS 15 MINUTES**

Name .....

Stream .....

**Instructions**

1. *Attempt all questions. Answers to both sections must be written in the spaces provided.*
2. *All answers must be written in pencil.*
3. *Crossing out of answers will lead to loss of marks.*

**SECTION A (40 Marks)**

1. What name is given to a home and its surroundings?

\_\_\_\_\_

2. Why should a school have a bell?

\_\_\_\_\_

3. Write down any one gift that Gulu gave to his daughter Nambi.

\_\_\_\_\_

4. Name the community where farmers sell their produce.

\_\_\_\_\_

5. **In the space given below, draw a map symbol of a bridge.**



6. What name is given to a low land between two hills or mountains?

\_\_\_\_\_

7. Give the basic need provided by police officers

\_\_\_\_\_

8. State any one role of children at home.

\_\_\_\_\_

9. Apart from communication , give ny other use of mobile phones to people

---

10. State any one reason why children should visit their relatives.

---


11. Give any one example of things made out of papyrus.

---

12. State the main source of water.


---

13. Mention anyone economic activity carried out on a physical feature drawn below



---

14. In the space given below, draw a map of tree.



15. Give any one product got from clay.

---

16. Write BOU in full.

---

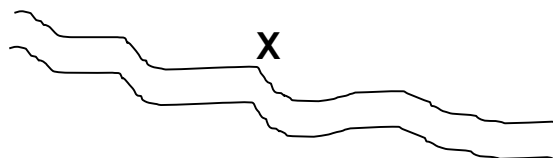
17. Name the type of wood is got from Mabira Forest.

---

18. State the type of transport that provides door to door services.

---

**Use the diagram below and answer questions 19-20**



19. Name the resource got from feature marked **X**.

---

20. Mention the physical feature marked **X**.

---

21. How can the above feature promote crop grow?

---

22. State any one way of preserving skins and hides.

---

23. Why does a doctor put on uniforms?

---

24. Write down any one duty of police in our division.

---

25. What are crafts?

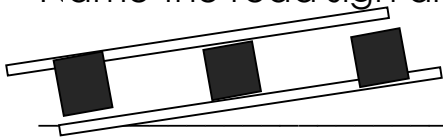
---

---

26. Name the opposite direction of North West.

---

27. Name the road sign draw below.



---

28. How is a compass useful to a ship captain?

---

29. Name any one physical feature where fishing can be carried out.

---

30. Why do people start projects?

---

31. Mention any one place where people go for recreational activities.

---

32. State any one importance of swamps to people.

---

33. Why should a farmer listen the weather forecast?

---

34. Draw any one tool used to keep peace.



35. How is a gate keeper similar to a policeman in terms of their work?

---

**For questions 36-40 answer Either for Christianity, OR for Islamic but not both questions in the same number.**

36. Either: Name the first woman to be created by God.

Or: Who was the first woman to be created by Allah?

37. Either: In which town was Jesus Christ born?

Or: Where was Prophet Muhammad born?

38. Either: Who is the father of all nations according to the Bible?

Or: Why is prophet Ibrahim remembered in the Islamic faith?

39. Either: What is lent?

Or: Name the fasting period for Muslims.

40. Either: What name was given to the journey made by Israelites from Egypt to the Promised Land?

Or: Name any one holy book in Islam.

**Section B (60 Marks)**

41. a) What is a clan?

b) Name any two symbols of a clan.

i) \_\_\_\_\_

ii) \_\_\_\_\_

c) State any one duty of a clan head.

42. Draw the following means of communication.

Radio	Phone	Drum	Television

43. a) Name the material used to make the object below.



b) Write down two uses of the above object.

i) \_\_\_\_\_

ii) \_\_\_\_\_

c) How is fire important to a potter?

\_\_\_\_\_

44. a) Name the source of the following materials.

i) Wood \_\_\_\_\_

ii) Clay \_\_\_\_\_

b) State any two uses of crafts to people.

i) \_\_\_\_\_

ii) \_\_\_\_\_

45. a) What do we call acceptable behaviours in a given society?

\_\_\_\_\_

b) Give any two examples of cultural practices.

i) \_\_\_\_\_

ii) \_\_\_\_\_

c) State any one importance of culture.

---

46. a) What is saving?

---

---

b) Write down any two ways of saving money.

i) \_\_\_\_\_

ii) \_\_\_\_\_

c) How is a bank important to a farmer?

---

47. a) What is peace?

---

b) Write down any two things that can spoil peace.

i) \_\_\_\_\_

ii) \_\_\_\_\_

c) State any one importance of living in peace.

---

48. **The diagram below shows a shelter used in a community. Use it to answer questions 48.**



a) Why is a shelter drawn above called a temporary house?

---

b) Name any one building materials used to build the above shelter.

---

c) Give a reason why most people in rural build huts.

---

d) Why do people need shelter?

---

49. a) What is vegetation? \_\_\_\_\_

---

---

b) Write down the two types of wood got from vegetation.

i) \_\_\_\_\_

ii) \_\_\_\_\_

c) Why do people cut down trees?

---

50. **Match list A and List B correctly**

**A**

Teacher

Carpenter

Doctor

Reverend

**B**

church

hospital

school

workshop

**For questions 51 -55 answer Either for Christianity, Or for Islamic but not both in the same number**

51. Either: a) Why are the following places known in the Bible

i) Mt. Sinai \_\_\_\_\_

ii) R. Jordan \_\_\_\_\_

b) Give any two books that were written by Prophet Moses

i) \_\_\_\_\_

ii) \_\_\_\_\_

Or: a) Why are the following towns important in Islamic faith?

i) Mecca \_\_\_\_\_

ii) Median \_\_\_\_\_

b) Name the book that was received by

i) Prophet Musa \_\_\_\_\_

ii) Prophet Isa \_\_\_\_\_

52. Either: a) How many apostles did Jesus have?

---

b) Write down any two apostles of Jesus.

i) \_\_\_\_\_ ii) \_\_\_\_\_

c) Name the helper did Jesus promise his apostles

---

Or: a) Name the four caliphs of Prophet Muhammad

i) \_\_\_\_\_ ii) \_\_\_\_\_

iii) \_\_\_\_\_ iv) \_\_\_\_\_

53. Either a) Mention any two places of worship.

i) \_\_\_\_\_

ii) \_\_\_\_\_

b) State any two ways people prepare for Christmas festival.

i) \_\_\_\_\_

ii) \_\_\_\_\_

Or : a) Name the place where Moslems go for prayers.

---

b) Give any two ways Moslems prepare for Idd day

i) \_\_\_\_\_

ii) \_\_\_\_\_

c) Who calls Moslems for prayers?

---

54. Either: Name any four prophets in the Bible.

i) \_\_\_\_\_ ii) \_\_\_\_\_

iii) \_\_\_\_\_ iv) \_\_\_\_\_

Or: Write down any four prophets in Islam.

i) \_\_\_\_\_ ii) \_\_\_\_\_

iii) \_\_\_\_\_ iv) \_\_\_\_\_

55. **Both:**

a) What is a prayer?

---

b) Give any two reasons why people pray to God? Allah.

i) \_\_\_\_\_

ii) \_\_\_\_\_

c) How do people talk to God or Allah?

---

**END**





# KINGS WAY PRIMARY SCHOOL

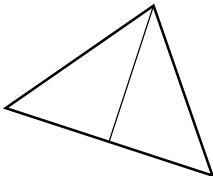
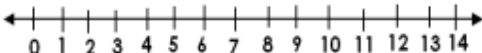
P. 4 RECESS REVISION 2020-(SET FOUR)

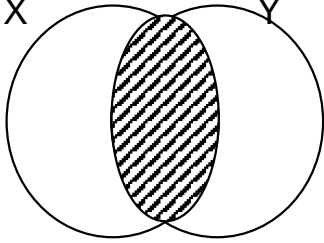
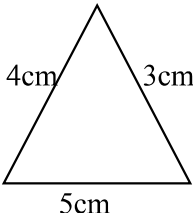

**MATHEMATICS**

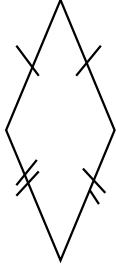


**DURATION : 2 HOURS & 30 MINUTES**

Name \_\_\_\_\_ Stream \_\_\_\_\_


## SECTION A

1.	Divide $6 \div 2$	6.	Draw tens and ones of 23.
2.	How many triangles can you see? 	7.	Write the number after 69
3.	Add using a number line. $5 + 3 = \underline{\hspace{2cm}}$ 	8.	Find the product of 5 and 3
4.	Write 15 in Roman numerals	9.	Write 693 in expanded form using values

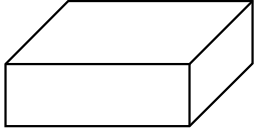
5.	Arrange numbers from the smallest to the biggest 9, 8, 3, 0, 17, 21	10.	Describe the shaded region 
11.	Write "six hundred forty three" in figures	16.	A bird has 2 eyes. How many eyes do 4 birds have?
12.	Find the perimeter of the figure below 	17.	Write $\frac{1}{2}$ in words
13.	Draw a set symbol for equivalent sets.	18.	Tell the time on the clock face below 
14	Workout: $\frac{4}{6} - \frac{1}{6}$	19.	Fill in the missing numbers in the sequence 10, 20, 30, ____, 50, 60, ____, 80

<p>15. Name the figure below</p> 	<p>20. If  represents 5 cars. How many cars are represented by  ?</p>
--	---

**SECTION B (60 Marks)**

<p>21.</p>	<p>Given the digits 2, 7, 5, 0</p> <p>a) Form the smallest four digit number.</p> <p>b) Form the biggest four digit number.</p> <p>c) Write the biggest number formed in words.</p> 
<p>22.</p>	<p>a) Add: <math>\frac{2}{8} + \frac{4}{8} + \frac{1}{8}</math></p> <p>b) Subtract: <math>\frac{9}{10} - \frac{4}{10}</math></p> <p>c) James ate <math>\frac{4}{6}</math> of a cake. What fraction of the cake remained?</p>

23. a) Name these shapes



-----



-----

b) **Draw these shapes**

Square

Trapezium

24. a) List down the multiples of 3 less than 15.

b) Find the sum of the first four counting numbers.



c) Write down all the factors of 9

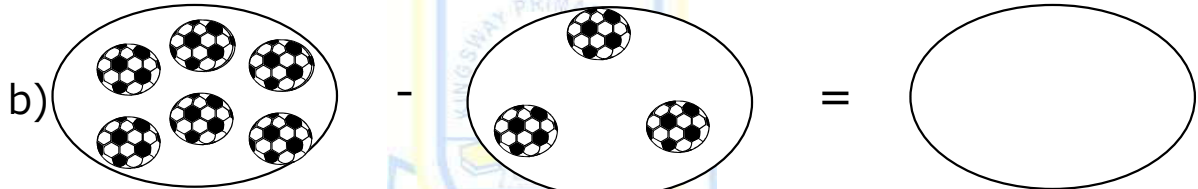
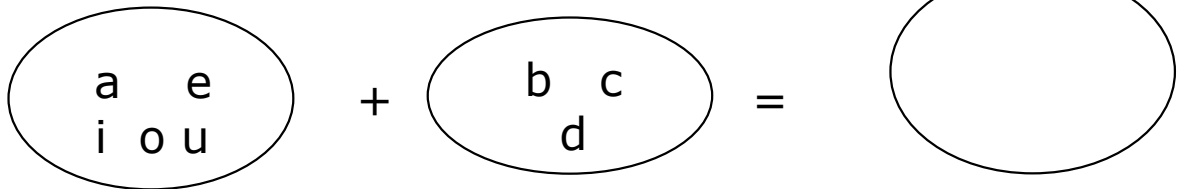
25. a) Work out:  $4 \overline{) 84}$

b)  $\begin{array}{r} 4 \quad 2 \quad 6 \\ +2 \quad 6 \quad 8 \\ \hline \end{array}$

\_\_\_\_\_

c) A man had 5 heaps of oranges with 3 oranges in each heap. How many oranges were in the heaps altogether?

26. a) Join these sets.



27. b) Study the price list and answer the questions that follow.

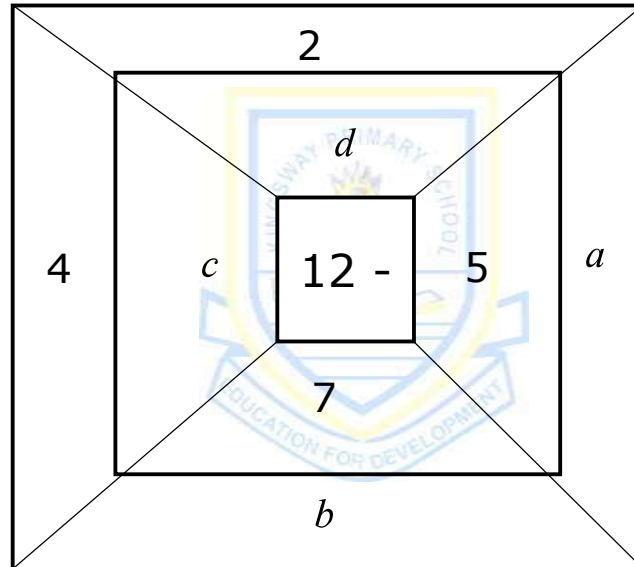
Item	Cost
Rice	Sh. 4,000
Salt	Sh. 1,000
Milk	Sh. 2,000
Soap	Sh. 3,600

a) How much money did John pay for a litre of milk and a kg of salt?

b) Which is the most expensive item?

c) How much are 2 kgs of rice?

28. Find the missing numbers.



29. Work out:

a)  $12 - \square = 7$

b)  $\square \times 3 = 6$

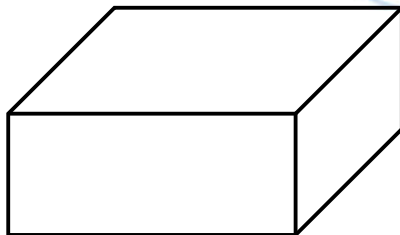
30

Denis weighs 25kg. Alex weighs 15 kg.

- a) Who is heavier?
  
  
  
  
  
  
  
  
  
  
- b) Who is lighter?
  
  
  
  
  
  
  
  
  
  
- c) Find the difference in their weight.

31.

Write the number of faces, corners and edges on the figure below.










corners=

edges=

faces=

32. The graph below shows the number of oranges Mandu sells every day.

**Scale :** =  **10 oranges**

Sun	
Mon	
Tue	
Wed	
Thur	
Fri	
Sat	

- a) How many oranges are sold on Friday?
- b) On which day does Mr. Mandu sell the least number of oranges?
- c) How many more oranges were sold on Sunday than Wednesday?
- d) Find the total number of oranges sold for the whole week

END