



KINGS WAY PRIMARY SCHOOL

P. 5 HOLIDAY REVISION 2020-(SET THREE)

English.

Time allowed: 2 hours and 15 minutes

Name: _____ **Stream:** _____

SECTION A

Sub-section I (30 marks)

In numbers 1 – 5, complete the gap in each sentence with a suitable word or group of words.

1. His car broke _____ on his way to Soroti.
2. The journalist has been collecting news _____ morning.
3. Our team captain _____ the only goal of the match.
4. She should blame _____ for her failure.
5. A _____ of wolves was seen crossing the field.

In questions 6 – 15, complete each sentence using the correct form of the word given in brackets.

6. A friend of _____ got a first grade in PLE. (my)
7. I hate reading _____ about cigarettes. (advertise)
8. The man was arrested for _____ on phone while driving a vehicle. (talk)
9. We are advised to paint all _____ things to avoid rusting. (metal)
10. Number 36 comes _____ before number 37. (immediate)
11. Stella is the _____ of the Bella twins. (pretty)
12. All the boys _____ punished for stealing mangoes last week. (to be)
13. Some of the _____ the residents gave to the journalist was false. (inform)
14. Having _____ all the food, Sarah went to her bed. (eat)
15. He was told to rewrite the work because he wrote it _____. (careless)

In questions 16 – 17, arrange the given words in alphabetical order.

16. boast, abuse, apologize, behave

17. sunny, shiny, shabby, smart

In questions 18 – 19, use each word in a sentence to show that you know the difference in their meaning.

18. break

19. brake

In questions 20 – 22, give the plural form of the given word.

20. conductress _____

21. mouse _____

22. radio: _____

In questions 23 – 25, rewrite each sentence giving the opposite form of the underlined word.

23. Some of the athletes at the field were smart.

24. The guest of honour arrived at the function early.

25. The farmer has sold his ram to a neighbour.

In questions 26 and 27, write the given short forms in full.

26. P.S.V. _____

27. p.m. _____

In question 28, rearrange the given words to make correct sentences.

28. Mr. is daughter Nicole Kato's.

In questions 29 – 30, rewrite each sentence giving one word for the underlined group of words.

29. I have lost my book in which I write important events.

30. That lady is my mother's sister.

Sub – section II

In questions 31 – 50, rewrite the sentences as instructed in brackets.

31. The stubborn boy broke the window. He is the head teacher’s son.

(Join the sentences using:.....who.....)

32. Women are more caring than men.

(Write the sentence using:...not as.....)

33. Drivers should not overload their vehicles.

(Rewrite the sentence using:.....mustn’t.....)

34. Primary five pupils elected Victoria as head girl last week.

(Rewrite the sentence beginning: Victoria.....)

35. Rachel failed the exams. She did not do enough revision.

(Join into one sentence using:.....because.....)

36. A Mercedes Benz is a very expensive car. (Rewrite and begin: What.....)

37. Martha was very clever but she failed to score aggregate four.

(Rewrite the sentence beginning: Although:.....)

38. Every time a driver breaks a law, the traffic police arrest him.

(Rewrite the sentence beginning: Whenever:)

39. The journalist will write the article tomorrow.

(Rewrite using:.....has already.....)

40. My parents like reading the New Vision newspaper more than the Observer newspaper. (Rewrite using:.....prefer.....)

41. His father will buy him a toy car. He has to perform well in mid-term exams.

(Join into one sentence using:.....if.....)

42. The driver applied the brakes. He wanted to stop the car.

(Rewrite as sentence using:.....in order.....)

43. The advertisement appeared in the dailies. It is about our school concert.

(Rewrite as one sentence using:.....which.....)

44. A windscreen is expensive. A tyre is more expensive.

(Join into one sentence using:.....than.....)

45. Dudu is not experienced. He cannot repair your car well.

(Join into one sentence using:.....enough.....)

46. You should not undertake a long journey before servicing the car.

(Rewrite the sentence using:.....after.....)

47. at what time did ojiambo catch the bus
(Rewrite and punctuate the sentence correctly.)

48. The news items were very unreliable. The editor could not publish them.
(Join uinto one sentence using:too.....to.....)

49. Mum bought two dozen books. Mum bought two dozen pencils.
(Join into one sentence using:.....as.....as.....)

50. The garage will open only after paying income tax.
(Write the sentence beginning: Unless.....)

SECTION B

51. **Read the poem below and, in full sentences, answer the questions about it.**

Elections, Elections,
The day has come,
The children run up and down,
They fear because they might not be voted,
They were busy playing and did not ask for votes.

Elections, Elections,
Things might change at the last minute,
Oh! The few votes I shall get,
My parents won't like it,
They will think I wasted their sweets.

Elections, elections,
Oh! God help me,
That I may become a head boy,
When I join P.5
Oh! God I promise to be a good leader,
I won't play next time,
I will listen to my teachers.

Questions:

(a) What is the poem about?

(b) According to this poem, why do children run up and down?

(c) What makes the writer feel that he will not be voted into office?

(d) Who does the writer think will not like few votes?

(e) Where did the writer get the sweets from?

(f) Why do you think the writer of the poem was given the sweets?

(g) In which class is the writer of the poem?

(h) Which position does the writer of the poem want?

(i) What promise does the writer make to God?

(j) When does the writer want to become a head boy?

53. **The table below shows travel arrangement of different people. Study it and, in full sentences, answer the questions that follow.**

Name	Date	Destination	Flight	Purpose of trip
KIRUMIRA	23 -12 - 2018	DUBAI	ETHIOPIAN AIRLINES	CELEBRATE CHRISTMAS
KAMU KAMU	23 -12 - 2018	DUBAI	FLY EMIRATES	CELEBRATE NEW - YEAR
MABIRIZI	30 -12 - 2018	ABU DHABI	FLY EMIRATES	CELEBRATE NEW - YEAR
MOFI	04 -01 - 2019	DOHA	QATAR AIRLINES	BUSINESS TRIP

Questions:

- (a) What is the table about?

- (b) When did Mr Kirumira travel to Dubai?

- (c) Which Airline did Kamukamu use to travel to Dubai?

- (d) Who travelled to Doha?

- (e) Which two people travelled to the same destination?

- (f) How many people used Fly Emirates to travel to their destination?

- (g) Why did Mofi go to Doha?

- (h) In which month did most of the travellers make their journeys?

(i) How many destinations are shown in the table?

(j) Suggest another word for 'trip' as used in the table.

54. **Read the passage given below and, in full sentences, answer the questions that follow.**

THE ACCIDENT

One Friday morning, when two friends of mine and I were going to school, we saw a motor accident at the junction near Kakoba Road. The victim of the accident was a seven-year-old Kwezi of P.2 at Little Angels Primary School. He was riding his bicycle to school when a car knocked him down.

The car which caused the accident lacked repair and it was in a poor mechanical condition. It left kwezi's leg broken. Kwezi could neither walk nor stand.

We ran to our class teacher and told him how Kwezi had got an accident at the junction near Kakoba Road. Our class teacher went to the headmaster and we saw them driving out in the school Van. They took Kwezi to a nearby hospital, and called his parents to inform them about what had happened. The little boy was hospitalised for over a month. He was later discharged and he is now back to school.

Questions:

(a) On which day of the week did the accident take place?

(b) Where did the accident take place?

(c) How many children from Kwezi's class saw the accident?

(d) In which class was Kwezi?

(e) What was Kwezi doing when he got the accident?

- _____
- _____
- (f) Where was Kwezi going at the time of the accident?
- _____
- _____
- (g) In which condition was the car responsible for Kwezi's accident?
- _____
- (h) Why do you think Kwezi's classmates ran to their class teacher?
- _____
- _____
- (i) Who took Kwezi to hospital?
- _____
- (j) Which other word can be used to mean the same as 'hospital' in the passage?
- _____
- _____

55. **Study the letter below and fill in the blank spaces with the words given in the box.**

sincerely, prefects, invite, post, Mr Kalemi, Kampala, monitor, brother, Friday, Joseph.



Kisugu Junior School
P.O. Box 522.

23rd Oct. 2018.

Dear _____,

How are you over there now a days? How is your class teacher _____? I think you are also preparing to elect new _____ this term. By the way, did you apply to contest for any _____?

Joseph, I have written this letter just to _____ you to come and act as a polling agent during the prefect's elections in our school next _____ beginning at 9:00 am.

I also request you to come a along with your _____ Solomon to serve as the election observer or _____ if you will offer me that service.

Yours _____,

Anthony



KINGS WAY PRIMARY SCHOOL

P. 5 HOLIDAY REVISION 2020-(SET THREE)

Mathematics.

Time allowed: 2 hours and 30 minutes

Name: _____ Stream: _____

SECTION A: (40 marks)

1. Work out: $18 \div 2 =$

2. Write 44 in Roman numerals.

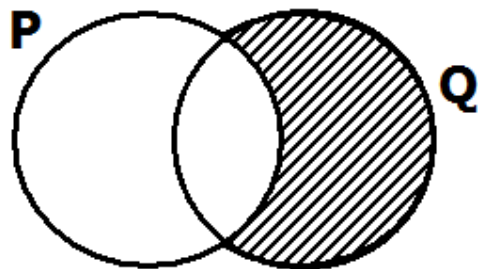
3. Find the next number in the sequence: 33 , 28 , 23 , 18 , _____

4. Work out: $\frac{3}{9} + \frac{5}{9}$

5. Change 2 Kg into grammes.


6. Simplify: 7 books + 4 books + 5 books

7. Describe the shaded part.



8. The cost of a pens is sh. 1200. Calculate the cost of 4 pens.

9. Find the sum of the 3rd and 5th even numbers.




10. Work out: $8 + 1 - 4 =$

11. Given that  stands for 6 trees. How many trees will be shown by:



12. Measure the length of line AB.

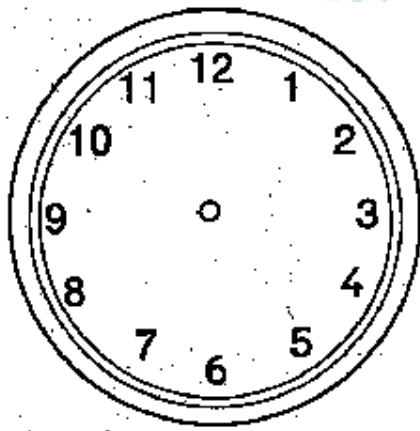


13. If set $M = \{0,2,4,6,8\}$ and set $N = \{1,2,3,4,5,6,7,8\}$. Find $M \cap N$.

14. Round off 3547 to the nearest ten.

15. Work out $\frac{3}{4}$ of 16 mangoes.

16. Show the time 6 : 45 on the clock face below.




17. Onen bought a pencil at sh. 550 and sold it at sh. 450. What was his loss?

18. Find the value of 5 in 6,752.

19. Work out:

	l	ml
	40	350
+	<u>59</u>	<u>220</u>
	<hr/>	

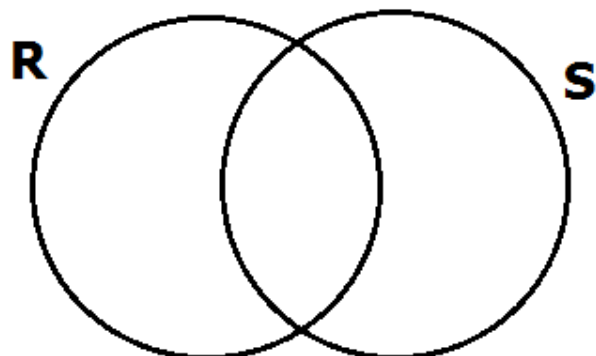
20. Draw the net of a cube in space provided below.



21. Given that set $R = \{1,b,c,d,e\}$ and set $S = \{\text{all vowel letters}\}$.

(a) List down all the elements of set S . **(1 mark)**

(b) Complete the Venn diagram below using the information given above.**(3 marks)**



(c) Find $n(R \cup S)$. **(1 mark)**

22. Given the following numerals 6 , 7 , 2 , 3.

(a) Write the smallest number that can be formed from the digits above. **(1 mark)**

(b) Find the difference between the value of 3 and 6 in the smallest number above. **(3 marks)**



(c) Write the largest number that can be formed from the digits. **(1 mark)**

23(a) Fill in the missing number: $\frac{2}{3} = \frac{\square}{9}$ **(1 mark)**

(b) Express $3 \frac{2}{5}$ as an improper fraction. **(2 marks)**

- (c) Okumu ate $\frac{4}{9}$ of an orange in the morning. What fraction of the orange was left?
(2 marks)


24. Kasule went to a supermarket and bought the following items.

1 chocolate at sh. 500

2 bars of soap at sh. 3600

1 litre of cooking oil at sh. 2000

- (a) How much does each bar of soap cost? **(2 marks)**



- (b) How much more money does he spend on cooking oil than on chocolate?
(2 marks)


- (c) Calculate Kasule's total expenditure. **(2 marks)**

- 25(a) Find the multiples of 6 between 12 to 42. **(2 marks)**

(b) List down all the factors of 15. **(2 marks)**

(c) Calculate the difference between the 4th and 6th odd numbers? **(2 marks)**

26(a) How many minutes are in 3 hours? **(2 marks)**



(b) How many months of the year start with letter J? **(1 mark)**

(c) Joseph is 16 years old and Paul is 6 years younger than Joseph. How old is Paul? **(2 marks)**

27(a) Mary had 3 mangoes. She got 7 more mangoes. How many mangoes does she have altogether? **(2 marks)**

(b) Fill in the missing number in the box: **(2 marks each)**

(i) $\square \div 3 = 15$

(ii) $10 - \square = 6$

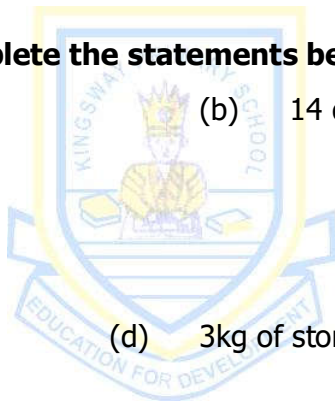
28. Use $<$, $>$ or $=$ to complete the statements below correctly. **(1 mark each)**

(a) IX _____ 10

(b) 14 days _____ 1 week

(c) $\frac{1}{2}$ _____ $\frac{2}{4}$

(d) 3kg of stones _____ 4kg of popcorn



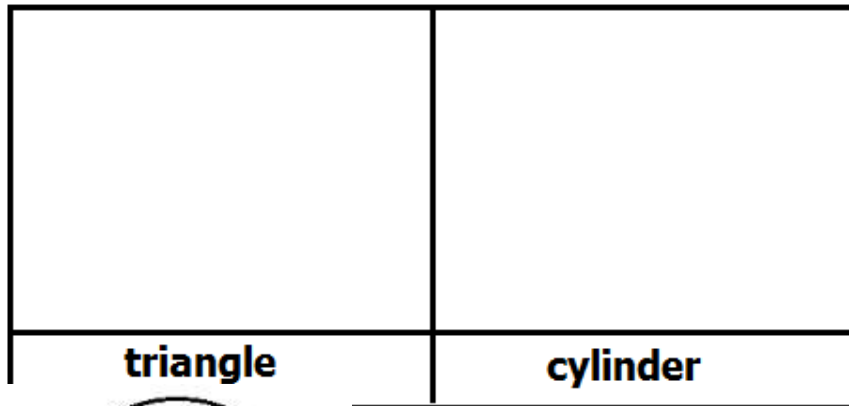
29(a) In a village, there are 356 males and 336 females. How many people are in the village? **(2 marks)**

(b) A mother shared 360 books among her 6 children. How many books did each pupil get? **(2 marks)**

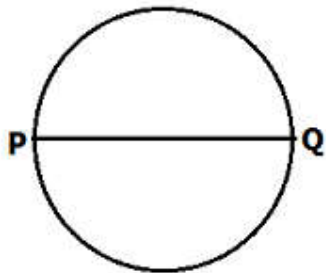
30(a) Draw the following figures.

(2 marks each)

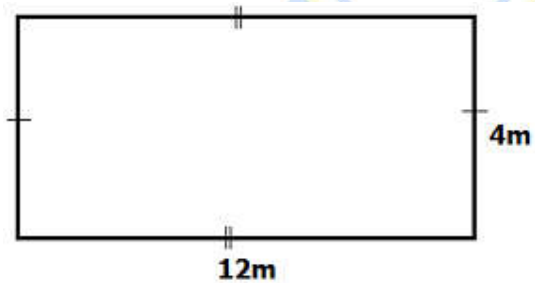
(b)



(1 mark)



31. The figure below is of a plot of land. Use it to answer the questions that follow.



(a) Calculate the area of the plot.

(2 marks)

(c) Find its perimeter.

(2 marks)

32. The table below shows the number of sweets got by different pupils in P.5.X.

Name	Number of sweets
Peter	
John	
Musa	
Kato	

- (a) Who got the least number of sweets? **(1 mark)**

- (b) How many more sweets did Musa get than Peter? **(2 marks)**

- (c) Find the total number of sweets the pupils got. **(2 marks)**





KINGS WAY PRIMARY SCHOOL

P. 5 HOLIDAY REVISION 2020-(SET THREE)

Integrated Science.

Time allowed: 2 hours and 15 minutes

Name: _____ Stream: _____

SECTION A (40 marks)

1. Mention one use of roots to a plant.

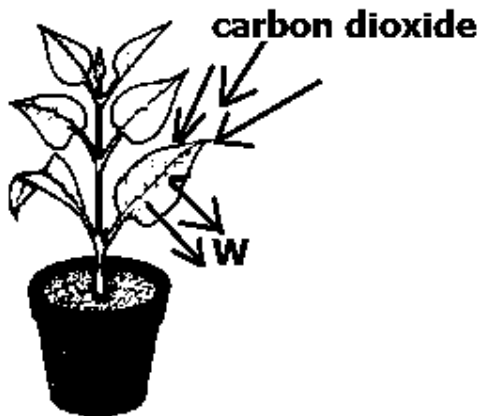
2. How is fur useful on the body of a rabbit?

3. Name the component of soil formed from decaying plants and animals.

4. Give a reason why every family should have a toilet / pit latrine.

5. State one way sunlight is important to man.

The diagram below shows a plant in the process of photosynthesis. Use it to answer question 6 and 7.



6. Name the gas marked by letter W.

7. Apart from carbon dioxide, name one other thing plants need during photosynthesis.


8. State one way a P. 5 child can promote hygiene in a family.

9. Mention one way drought is dangerous in the environment.

10. Write down one type of chicken people keep.

11. State one way plants depend on animals in the environment.

Use the diagram given below to answer questions 12 and 13.



12. Name the type of tooth shown in the diagram.

13. How is the tooth in the diagram above useful to a dog?

14. Give any form of energy we get from the sun.

15. How is a trough important in poultry keeping?

16. Write down one disease that attacks cassava plants.

17. What do dogs use for smelling?

18. Mention one sign of diarrhoea disease in man.

19. How is a weather chart useful in a classroom?

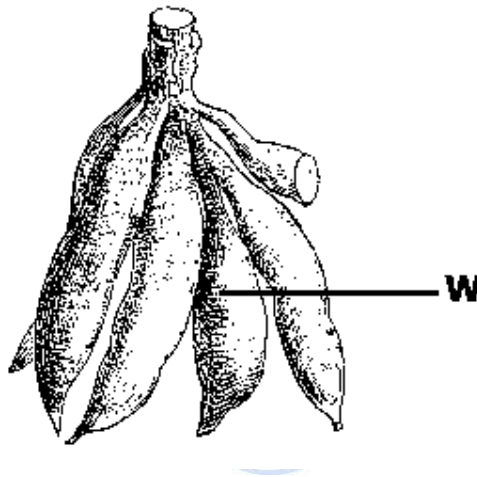
20. Name the feeding part of a bird.

21. Give one local method of preserving cereals.

22. How do mosquitoes spread malaria in man?

23. What is the importance of oxygen in the body?

The diagram below is part of a cassava plant. Use it to answer questions 24 and 25.



24. Name the part marked W.

25. What class of food do we get from part marked W?

26. Mention one importance of good sanitation.

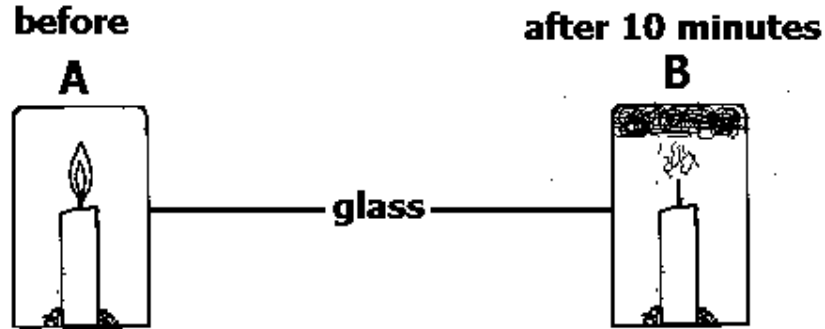
27. How is the heart important in our bodies?

28. Give one way poultry farmers control egg eating in layers.

29. How does a zebra crossing help in reducing road accidents?

30. Give one method of controlling weeds in the garden.

Use the experiment shown in the diagram to answer questions 31 and 32.



31. What gas enabled the candle to burn in A?
-
32. Why did the candle flame in B go off after sometime?
-
33. How is sugar important when preparing sugar salt solution for a dehydrated patient?
-
34. Name one animal that moves by flying.
-
35. Write down one PIASCY message you would use to protect your friends from getting AIDS?
-
36. State one way condensation is an important process in weather.
-
37. In the space below, draw a garden tool used to harvest rice.
-
38. Give one way soil fertility can be conserved.
-
39. Suggest the practice of preventing diseases in poultry.
-

40. Suggest one way of preventing contamination of water sources.

Section B (60 marks)

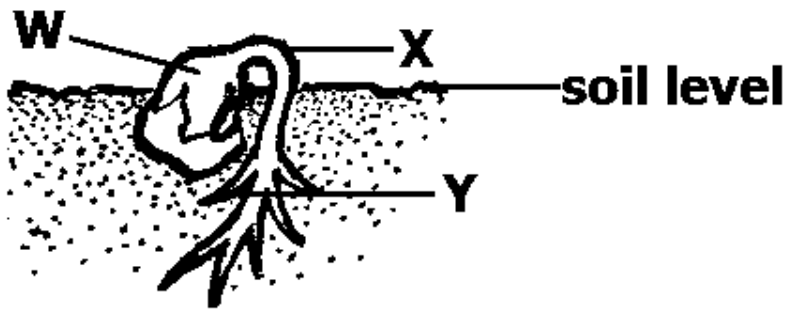
41(a) Write down one exotic breed of rabbits kept in Uganda.

(b) How does rabbit keeping benefit the growing of crops on the same farm?

(c) Give one disease of poultry that attacks rabbits.

(d) State one importance of a hutch in keeping rabbit.

42. Use the diagram below shows a germinating seed. Use it to answer the questions that follow.



(a) What type of germination is shown in the diagram above?

(b) Give one example of a seed that undergoes the above type of germination.

(c) From which part of a seed does part Y develop?

(d) Give one reason why part W turns green when it comes above the soil level.

43(a) Mention one system of poultry keeping.

(b) Write down one characteristic of exotic breeds of poultry.

(c) State one advantage of keeping local breeds of poultry.

(d) Name one vice in poultry keeping.

44(a) Mention one method of cooking food.?

(b) Give one reason why food should be cooked before eating it.

(c) State one way of preventing food from getting contaminated.

(d) Give one danger of eating contaminated food.

45. **The diagram below is of a body organ. Use it to answer questions that follow.**



(a) Name the organ in the diagram above.

(b) Give the function of the organ of the body shown above.

(c) In which part of the body is the organ above?

(d) How do motorcycle riders protect the organ above?

46(a) What are perennial crops?

(b) Give one example of a perennial crop.

(c) Mention one advantage of practicing crop rotation.

(d) Give one reason why crop farmers spray their crops.

47(a) Give one way proteins are important in our bodies.

(b) What causes anaemia in man?

(c) State one way of preventing marasmus in children.

(d) Which mineral is need for growth of strong bones?

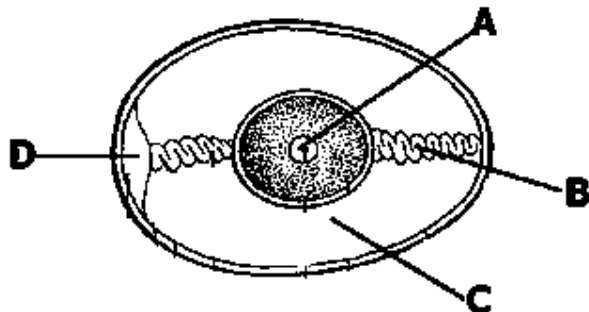
48(a) What is soil profile?

(b) Mention one living component of soil.

(c) State one cause of soil erosion.

(d) Give one method of controlling soil erosion.

Below is the diagram of an egg. Use it to answer question 49.



49(a) Name parts marked B and C.

(i) B: _____

(ii) C: _____

(b) After incubation, what does part marked A of a fertilized egg develop into?

(c) How is part D important to a developing embryo?

50(a) Name one common accident in school.

(b) Give one importance of giving first aid.

(c) How are the following important in first aid management?

(i) stretcher:

(ii) bandage:

51(a) Mention one way sanitation is promoted at school.

(b) State one area at home that is kept clean by slashing.

(c) Give one danger of stagnant water in our environment.

(d) How is dust a danger to human health?

52(a) What are communicable diseases?

(b) Mention one disease spread by houseflies.

(c) How can hookworm infestation be controlled in man?

(d) Mention one sign or symptom of worm infestation.

53. Match items in list A to list B.

A

Rain gauge

Minimum and maximum thermometer

Barometer

Wind sock

B

temperature

air pressure

strength of wind

rainfall

(i) Rain gauge _____

(ii) Minimum and maximum thermometer _____

(iii) Barometer _____

(iv) Wind sock _____

54. A P.5 pupil grouped crops as shown below.

<u>Group A</u>	<u>Group B</u>	<u>Group C</u>	<u>Group D</u>
oranges	peas	millet	cabbage
mangoes	beans	maize	tomatoes
pineapples	groundnuts	oats	egg plant
bananas	soya beans	rice	paw paw

(a) Name the group of crops in C.

(b) How do crops in group B help to improve soil fertility?

(c) State the group which is a good source of vitamins.

(d) Why would you advise people to eat crops in group C?

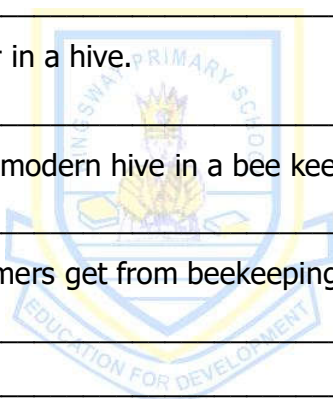
55(a) Give one duty of a worker in a hive.

(b) State one advantage of a modern hive in a bee keeping.

(c) Mention two products farmers get from beekeeping.

(i)

(ii)





KINGS WAY PRIMARY SCHOOL

P. 5 HOLIDAY REVISION 2020-(SET THREE)

Social Studies

Time allowed: 2 hours and 15 minutes

Name: _____ Stream: _____

SECTION A (40 marks)

1. Name the symbol of a school that helps in identifying its pupils.

2. What title is given to the representative of the president in a district?

3. Give one reason why Uganda is called a landlocked country.

4. How is budgeting important when spending family resources?

5. Write down one advantage of living in an extended family.

6. What proof shows that Uganda is located in both the Northern and Southern hemispheres?

7. How are longitudes and latitudes important to a map-reader?

8. State one way rules and regulations are important in the management of the class.

9. What social service is provided in a hospital?

10. How was the formation of Lake Kyoga similar to that of Lake Victoria?

11. Write down one role of a chairperson of an L.C I executive committee.

12. State one problem affecting road transport in Uganda today.

13. Name the river that flows along the border between Uganda and Democratic Republic of Congo.

14. Give one way the police helps to maintain law and order in a community.

15. How is Port Mombasa in Kenya important in the economic development of Uganda?

16. Mention any one way of promoting road safety.

17. State one way people in the mountainous areas solve transport problems?

18. Write down one way people in Uganda practise their culture?

19. Which element of a map reduces overcrowding on a map?

20. State one way forests contribute to rain formation.

21. Mention any one way child abuse is controlled in a community.


22. How is the government of Uganda trying to improve social services she provides to her citizens?

23. How does river Nile contribute to the development of industries in Uganda?

24. Give any one way recreational activities are important in school.

25. Mention one factor that hinders people in a community from meeting most of their needs.

Use the diagram given below to answer questions 26 and 27.



26. Name the physical feature marked W.

27. In the space below, draw the map symbol used to represent the feature marked Z.



28. How do children manage cold weather while going to school in the morning?

29. State one way loss of lives can be controlled when using water transport.

30. Mention one physical feature formed by volcanic eruptions.

31. Mention any one way of getting leaders in a district.

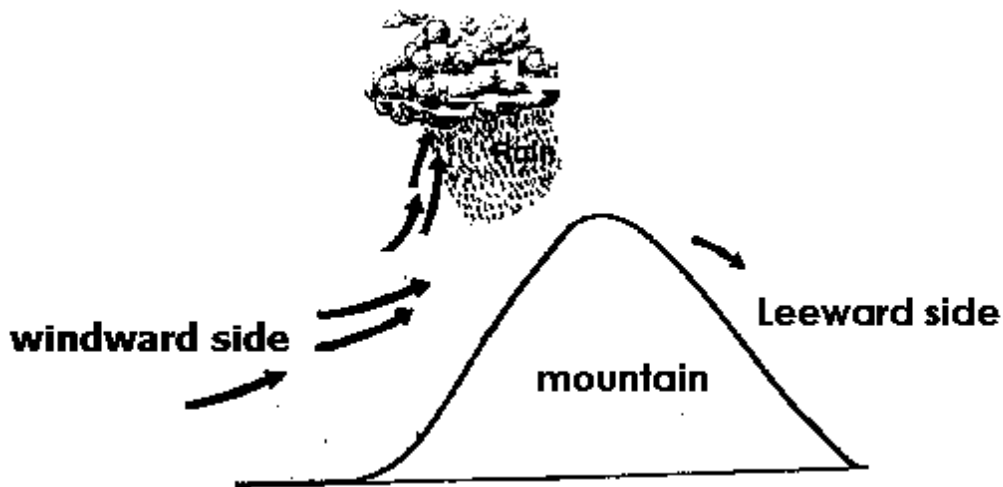
32. What type of map is useful to a tourist?

33. State one way water masses like lakes contribute to rain formation.

34. What is **natural vegetation**?

35. Name one local raw material used in basic technology.

Use the diagram below to answer questions 36 and 37.



36. Name the type of rainfall shown above.

37. Identify one district in Uganda that experiences the type of rainfall shown above.

38. Give one reason why it is good for farmers to harvest their crops during dry season.

39. Why is 8th March honoured as a public holiday?

40. Name the latitude marked $23\frac{1}{2}^{\circ}$ N.

SECTION B: (60 marks)

41(a) Mention any two traditional fishing methods used in Uganda.

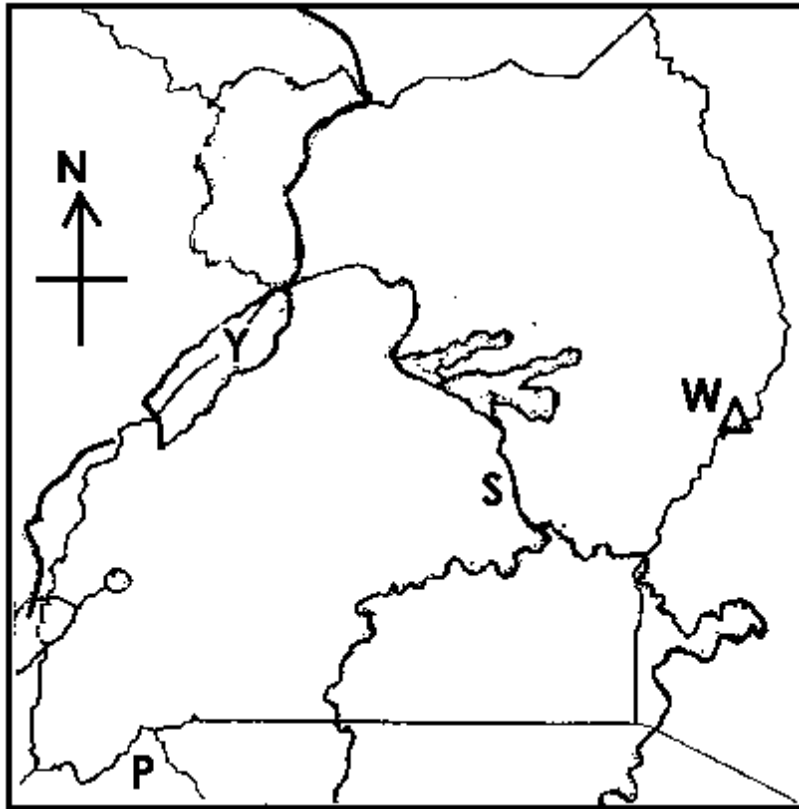
(i) _____

(ii) _____

(b) Which lake in Uganda is a salt mine?

- (c) Give one way fish smoking affects forests in Uganda.
-

Use the sketch map of Uganda given below to answer question 42.



- 42(a) What feature along the part of river Nile marked S enables the generation of hydro electricity?
-

(b) Draw the equator on the above map.

(c) Name the country marked P.

(d) How does mountain W contribute to the economic development of the people in Mbale district?

- 43(a) How does River Nile show that Lake Victoria is on a higher altitude than lake Kyoga?
-
-

(b) What name is given to the open mouth of a river?

(c) Give one reason why water transport is difficult on the part of River Nile between Lake Victoria and Lake Kyoga.

(d) Mention one economic activity don at a delta of a river.

44(a) What title is given to the cultural leader of Buganda?

(b) Give two ways cultural leaders are important to the people.

(i) _____

(ii) _____

(c) State one way culture can be a danger to development of a community.

45(a) Give one reason why the government of Uganda introduced Universal Primary Education.

(b) Apart from primary schools, mention one other type of schools in Uganda.

(c) State one cause of poor performance in schools today.

(d) Mention one problem facing schools in Uganda today.

46(a) Mention one way mountains were formed.

(b) Give two ways lakes are economically important to Uganda.

(i) _____

(ii) _____

(c) Mention one way man can conserve water bodies.

47(a) Mention two social services provided at the following centres.

(i) Radio Station:

(ii) Police Station:

(b) Give one use of a mobile telephone apart from sending and receiving messages.

(c) Mention one way people living in Kampala district get housing.

48(a) What is weather?

(b) How is a Stevenson screen important at a weather station?

(c) Name the instrument meteorologists use to measure the speed of wind.

(d) Give one natural disaster caused by too much rainfall.

49(a) State the difference between a map and a picture.

(b) How are the following elements of a map useful to a map reader?

(i) A scale:

(ii) A key:

(c) What point lies between the North and the East on a compass direction?

50(a) What is child abuse?

(b) Mention any one cause of child abuse.

(c) State any two ways children can be protected from abuse.

(i) _____

(ii) _____

51(a) What is urban – rural migration?

(b) State one problem caused by rural – urban migration.

(a) Mention any two factors that determine human settlement.

(i) _____

(ii) _____

52. **Match items in list A to those in List B correctly in the spaces provided below.**

List A

carpenter

barber

cobbler

shopkeeper

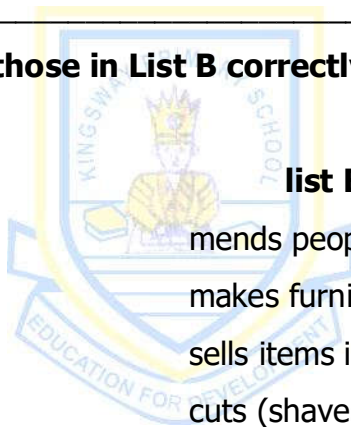
list B

mends people's shoes

makes furniture

sells items in a shop.

cuts (shaves) people's hair.



(i) carpenter _____

(ii) barber _____

(iii) cobbler _____

(iv) shopkeeper _____

53(a) Name one example of each of the following types of forests in Uganda.

(i) natural forest: _____

(ii) plantation forest: _____

(b) What type of wood do we get from plantation forests?

(c) State one way NEMA protects forests from destruction.

54(a) What is mixed framing?

(b) Name one non-traditional cash crop people grow in our district.

(c) Apart from poor weather conditions, mention one other problem that affects growing crops.

(d) Why do farmers keep goats?


55. **Write short notes about the following:**

(i) Y.K. Museveni

(i) Rebecca Kadaga

(iii) Bank of Uganda

(iv) Mulago Hospital





KINGS WAY PRIMARY SCHOOL

P. 5 HOLIDAY REVISION 2020-(SET THREE)

Religious Education

Time allowed: 2 hours and 15 minutes

Name: _____ **Stream:** _____

On each number in this paper, answer either Christianity or Islamic questions but not both.

SECTION A:

1. **Either:** Name the creature that led to the fall of man in the garden of Eden.

Or: Name the creature that led to the fall of man in paradise.

2. **Either:** On which mountain did Moses receive the Ten Commandments?

Or: On which mountain did prophet Muhammad receive the holy Qur'an?

3. **Either:** Give any one reason why Christians should pray before going to sleep?

Or: Give any one reason why Muslims should pray before going to sleep.

4. **Either:** Write down one reason why God sent Jesus Christ on Earth.

Or: Write down one reason why Allah sent prophet Muhammad to His people.

5. **Either:** Mention any one group of people with authority in a church.

Or: Mention any one group of people with authority in a mosque.

6. **Either:** State any one way the Uganda martyrs suffered.

Or: State any one way the early converts of Islam suffered.

7. **Either:** “.....take off you sandals because you are standing on a Holy ground”
Exodus 3:5. Who said the above words?

Or: “.....the signs of hypocrite are three. When he talks he lies; when he promises he does not fulfill; and when you trust him he becomes dishonest”.
Who said the above words?

8. **Either:** Write down any one similarity between the Ten Commandments and the National constitution

Or: Write down any one similarity between the pillars of Islam and the National constitution.

9. **Either:** In which garden was Jesus Christ arrested?

Or: Give the book that was revealed to prophet Musa.

10. **Either:** What did Jesus tell His followers to do to their enemies?

Or: What did prophet Muhammad advise his followers to do to their neighbours?

11. **Either:** How did Jesus Christ show love to His disciples during the last supper?

Or: How did prophet Muhammad demonstrate love for his followers?

12. **Either:** Give any one reason why fasting is important in the life of a Christian.

Or: Give any one reason why proper dressing is important in the life of a Muslim.

13. **Either:** Write down the importance of the resurrection of Jesus Christ to a Christian.

Or: Write down one importance of Friday to a Muslim.

14. **Either:** Name the Angel who brought God's message to the virgin Mary.

Or: Name the Angel responsible for blowing the trumpet on the Day of Judgment.

15. **Either:** What is meant by the term 'Exodus' in Christianity?

Or: State any one reason why a Qur'an is considered as a unique book in Islam.

16. **Either:** State one way children can care for God's creations.

Or: State one way Muslim children can care for Allah's creations.

17. **Either:** State any one way Jesus Christ showed concern for sinners.

Or: State any one way Muslims can show concern for the poor.

18. **Either:** Give any one similarity between Angels and prophets.

Or: Give any one similarity between Angels and prophets.

19. **Either:** Write down one reason why Christians visit Namugongo Shrine every 3rd of June.

Or: Write down one reason why Moslems visit the Kaaba in Makkah.

20. **Either:** How can a Christian child create peace among his classmates at school?

Or: How can a Muslim child create peace among his classmates at school?

SECTION B

21. **Either:** (a) Mention two elements of Holy Communion.

(i)

(ii)

(b) State any one way in which Holy Communion is important to Christians

(c) When was the Holy Communion initiated?

Or: (a) Mention any two Islamic values.

(i) _____

(ii) _____

(b) State any two ways in which Muslims benefit from Islamic values

(i) _____

(ii) _____

22. **Either:** (a) How do Christians use the following body parts to serve God?

(i) mouth

(ii) ears

(b) Mention any one talent that Christians use to serve God in the church.

(c) How did Adam misuse God's gift of hands?

Or: (a) How do Muslims use the following body parts to serve Allah?

(i) mouth

(ii) ears

(b) How do Muslims misuse the gift of eyes?

(c) How did Qabeel misuse Allah's gift of hands?

23. **Either:** (a) Name the disciple who denied Jesus Christ three times.

(b) State any two ways in which the disciples helped Jesus Christ to spread the word of God.

(i)

(ii)

(c) Who was the most loved apostle of Jesus?

Or: (a) Name the first companion of Prophet Muhammad (PBUH)

(b) State any two ways in which Khadija helped in spreading Islam.

(i)

(ii)

(c) How is Islam spread today by Moslems?

24. **Either:** (a) On which day does the Lent period begin in Christianity?

(b) Mention any one thing Christians do during the Lent period

(c) When does the Lent period end?

(d) Give any one reason why Christians fast.

Or: (a) At what time do Muslims pray Maghrib prayers?

(b) Mention any two benefits of congregational prayers.

(i) _____

(ii) _____

(c) In which way are Muslims called for prayers?

25. **Either:** (a) On which mountain was Jesus crucified?

(b) Mention any two strange things that happened during the death of Jesus Christ.

(i) _____

(ii) _____

(c) Give any one way in which Christians benefited from the death of Jesus Christ.

Or: (a) Name the person who migrated with prophet Muhammad from Makkah to Medina

(b) Mention any two problems faced by prophet Muhammad during his migration to Medina.

(i) _____

(ii) _____

(c) Give any one way in which the people of Medina were helpful to the Muslim migrants.

26. **Either:** (a) Mention any one act of indiscipline among pupils affects them at school.

(b) State any two ways indiscipline among children affects them at school.

(i) _____

(ii)

(c) Give any one way in which Jesus Christ showed discipline before His parents.

Or: (a) Mention any one act of indiscipline among the children at school.

(b) State any two ways in which indiscipline of pupils affects them at school.

(i)

(ii)

(c) Give any one way in which Muhammad showed discipline before the community.

27. **Either:** (a) What name is given to the prayer that was taught by Jesus Christ to His disciples.

(b) Give any two reasons why people pray.

(i)

(ii)

(c) A part from prayer, state any other way in which Christians communicate to God.

Or: (a) What name is given to the early morning prayer that starts the day?

(b) Give any two reasons why people pray.

(i)

(ii)

(c) A part from prayer, state any other way in which Moslem can worship God.

28. **Either:** (a) Give any one reason why Jesus Christ performed miracles.

(b) State any two ways in which Jesus showed his power over nature?

(i) _____

(ii) _____

(c) Name any one person Jesus raised from the dead.

Or: (a) Give any two reasons why Muslims get ablution before prayer.

(i) _____

(ii) _____

(b) Give any one condition that may cause a Moslem to use sand for getting ablution.

(c) Write down one thing that can nullify ablution.

29. **Either:** (a) Give any one reason why God created man in His own image.

(b) Mention any two of the divine Persons in the Holy Trinity.

(i) _____

(ii) _____

(c) State one way God is different from man.

Or: (a) Give any one reason why Makkah is an important city to Moslems.

(b) State any two things Moslems do when they visit Makkah city

(i) _____

(ii)

30. **Either:** (a) What is a parable?

(b) Mention any two parables Jesus used in His teaching.

(i)

(ii)

(c) Give one reason why Jesus Christ used parables in His teachings.

Or: (a) What are Hadiths?

(b) Give two examples of hadiths of prophet Muhammad.

(i)

(ii)

(c) Mention any one way Hadiths have promoted the spread of Islam.

31. **Either:** (a) Mention any three of the Ten Commandments of God.

(i)

(ii)

(iii)

(b) Why did God send the Ten Commandments to the Israelites?

Or: (a) Mention any three of the five pillars of Islam.

(i)

(ii)

(iii)

(b) What does the third pillar ask Muslims to do?

32. **Either:** (a) Write down one name for females in Christianity.

(b) Give the meaning of the name "Emmanuel" in Christianity.

(c) Mention any two Christian denominations in Uganda.

(i) _____

(ii) _____

Or: (a) Write down one name for females in Islam.

(b) Give the meaning of the name "Muhammad".

(c) Mention any two attributes of Allah.

(i) _____

(ii) _____

33. **Either:** (a) Mention one cause of temptations to a Christian.

(b) Mention any one way a Christian can overcome temptation

(c) What tempted Jesus in the Wilderness?

(d) Mention any one temptation Jesus faced in Wilderness.

Or. (a) Mention any two causes of temptations in Islam.

(i) _____

(ii) _____

(b) Mention any two ways in which a Moslem can overcome temptation

(i) _____

(ii) _____

34. **Either:** (a) What are Christian customs?

(b) Mention any one reason why Christians give offertory in Church

(c) Write down any two Christian values that people learn from the life of Jesus.

(i)

(ii)

Or: (a) Name the last child of prophet Muhammad.

(b) Who was the mother of the child named in (a) above?

(c) Write down any two qualities of the prophets of Allah.

(i)

(ii)

35. **Either:** (a) Give any two reasons why Jesus Christ sent the Holy Spirit to the Apostles.

(i)

(ii)

(b) In the space below draw any two signs of the Holy Spirit.

--	--

Or: (a) Give any two reasons why Muslims wear long dresses for prayers.

(i)

(ii)

(b) In the space below draw a dress for Moslem man and woman.

men's attire	Women's attire
--------------	----------------