



KINGS WAY PRIMARY SCHOOL

P. 5 RECESS REVISION 2020-(SET FIVE)

ENGLISH

DURATION: 2 HOURS 15 MINUTES

Name**Stream.....**

Read the following instructions carefully

1. This paper comprises two sections A & B.
2. Section A has sub-section 1 with 30 questions (30 marks) and Sub-section II has 20 questions (20 marks).
3. Section B has 5 questions (50 marks)
4. Attempt all questions. Answers to both sections must be written in the spaces provided.
5. All answers must be written in blue or black ballpoint pen or ink but not in pencil.
6. Crossing out of answers will lead to loss of marks.
7. Any handwriting that cannot be easily read may lead to loss of marks.

| FOR EXAMINERS USE ONLY | | |
|------------------------|------|------|
| QN. NO. | MARK | SIGN |
| 1-10 | | |
| 11-20 | | |
| 21-30 | | |
| 31 – 40 | | |
| 41 – 50 | | |
| 51 | | |
| 52 | | |
| 53 | | |
| 54 | | |
| 55 | | |
| TOTAL | | |

Section A

For questions 1-5, fill in the blank space with suitable word.

1. I read _____ interesting story in The New Vision newspaper this morning.
2. A rabbit is faster _____ a dog.
3. I went to the _____ to have my vehicle repaired.
4. My uncle's cat has given birth to five _____
5. _____ is the second month of the year.

For questions 6-15 use the correct form of the word(s) in the brackets to complete the sentences.

6. All girls must sit _____ when in public. (good)
7. I got all the _____ from un Otai's garage.(spare part)
8. Jogolo has _____ to the United Arab Emirates. (fly)
9. We killed a lot of _____ in our old house last weekend. (mouse)
10. The taxi driver drove the passengers _____ throughout the journey. (reckless)
11. My brother has broken the _____ of my bicycle. (carry)
12. The boys opened the dormitory door _____ (self)
13. The president's _____ was not noticed until he climbed the podium. (arrive)
14. My dress is _____ than yours. (beautiful)
15. We have _____ all the three stanzas of the national anthem. (sing)

For questions 16 and 17, construct sentences using the given words to show that you know the difference in their meaning.

16. brake _____
17. break _____

For questions 18-19 re-arrange the given words in alphabetical order.

18. carpenter, cobbler, card, copper.

19. mend, scare, meet, scare.

For questions 20-22 write the abbreviation in full.

20. etc. _____
21. can't _____

For questions 22-24 rewrite the sentences giving the opposite form of the underlined words.

22. Our head teacher bought a cheap car.

23. The lake was calm throughout the day.

24. All our answers to the questions were correct.

For questions 25-26, arrange the given words to form correct sentences.

25. should You repair vehicle my first.

26. going are Where you, Jane?

For questions 27-30, give a single word for the underlined group of word.

27. That woman sells very old cars, buses, lorries and taxis in her bond.

28. The people listening clapped when the president promised them free education.

29. Our school driver took the van to man who repairs vehicles but he didn't find him.

30. My sister of my mother is sick.

For questions 31-50, re-write the sentences as instructed in the brackets.

31. Godfrey is very shy. He cannot act in a drama.
(Re-write the sentences using----too—to)

32. Solomon is a well behaved boy. Milton is a well behaved boy.
(Re-write as one sentences beginning: Both-----)

33. Ojakol is very short. He cannot touch the ceiling of the classroom.
(Re-write using-----enough-----)

34. Samson is not a doctor. Godwin is not a doctor.
(Join the sentence sentences beginning: Neither-----)

35. All the pupils arrived at school early. (Re-write the sentences beginning: None-----)

36. The baby was bitten by a green snake. (Re-write the sentence ending----- the baby.)

37. Martha is a very hardworking girl. (Re-write the sentence beginning: What-----)

38. You should not eat food before washing your hands.
(Rewrite the sentence using-----mustn't-----)

39. Paul has brought reams of paper. (Re-write the sentence beginning: Reams -----)

40. We went for a tour yesterday, didn't we?
(Re-write the sentence ending-----did we?)

41. Honey is sweet. Sugar is also sweet. (Join the sentences using:-----equally---)

42. There isn't any salt in the food. (Re-write the sentence using-----some----)

43. That is the toolbox. My uncle brought it last week.
(Join using-----which-----)

44. Gladys likes Science more than English. (Use prefer-----)

45. Jane is in primary five. (Write the question for which this statement is the answer.)

46. Our bus driver went to the garage. He wanted to have his bus repaired.
(Join using -----in order-----)

47. I shall go to school tomorrow. I shall learn Social studies.
(Re-write as one sentence beginning: If-----)

48. I finished my work. I went home. (Re-write the sentence using-----after-----)

49. Mukasa fell sick on Sunday. Today is Tuesday and Mukasa is still sick.
(Re-write the sentence using-----for-----)

50. One by one _____ (Complete the proverb)

51. **Read the passage below carefully and answer the questions that follow in full sentences.**

Ssenyonga was overjoyed when he bought a car. Although it was old, he liked it very much. He knew that there were a number of mechanics around who could help him repair his car in case it broke down.

One day Ssenyonga wanted to travel to his home area, Kabwokhe. Kabwokhe is about twenty kilometer away from Mbarara town. He did not want to travel alone. He asked his friend, Waboineki to accompany him Ssenyonga started the car engine and off they drove. The car picked faster and faster and he started overtaking other cars. Waboineki got worried and reminded Ssenyonga about the dangers of driving at such a high speed. "You should not drive like this." Said Waboineki. Ssenyonga did not pay attention. Instead he answered, "This is not my first time to drive. May be it is your first time to travel by car."

No sooner had Ssenyonga said this than they started hearing a funny noise from the engine. The car certainly had a mechanical problem. Waboneki looked at his friend and said, "you didn't pay attention to my advice". "You see now what has happened!" Luckily enough, a breakdown vehicle came from the opposite direction. The driver of the breakdown got out and asked, "What has happened to your car?" Ssenyonga answered, "First there was a funny noise then the engine just stopped". "I do not know what the matter is." The breakdown towed Ssenyonga's car to a nearby garage. The mechanic repaired the vehicle and advised Ssenyonga against driving at a high speed. He advised him to drive carefully.

Questions

1. Why was Ssenyonga very happy?

2. How far away did the two people want to travel?

3. Who drove the car?

4. What advice did Waboneiki give Ssenyonga?

5. What do you think is the danger of driving very fast?

6. Why did the engine produce funny noise?

7. How was the car taken to the garage?

8. How many people were in the car?

9. Which is Ssenyonga's village?

10. With whom did Ssenyonga travel?

52. **Read the notice below and answer in full sentences the questions that follow.**

PUBLIC NOTICE

TO ALL RESIDENTS OF BUGEMA VILLAGE

You are invited to a general village meeting scheduled to take place on Saturday 30th May, 2020 at Nawuyo Primary School Playground.

The guest of honour will be the R.D.C, Rukungiri district. Matters to discuss are very crucial and you must attend in person otherwise you will be fined 10,000/=

CHAIRPERSON LCI, BUGEMA VILLAGE

21st March, 2020

Questions

1. What is the public notice about?

2. To whom is the above notice addressed?

3. When is the meeting scheduled to take place?

4. Which village is talked about in the notice?

5. Who will be the guest of honour at the meeting?

6. In which district is Bugema village found?

7. How much will one be fined if one fails to attend the meeting?

8. What will be the venue for the meeting?

9. Who wrote the notice?

10. Write R.D.C in full.

53. The calendar below shows some of the activities that took place in Kidotok Village in the month of January, 2020. Study it carefully and answer the questions that follow in full sentences.

54.

| Sun | MON | TUE | WED | THUR | FRI | SAT |
|-----|-----|-----------|-----------|------|----------|-----|
| | 1 | 2 | 3 | 4 | <u>5</u> | 6 |
| 7 | 8 | 9 | <u>10</u> | 11 | 12 | 13 |
| 14 | 15 | 16 | 17 | 18 | 19 | 20 |
| 21 | 22 | <u>23</u> | 24 | 25 | 26 | 27 |
| 28 | 29 | 30 | 31 | | | |

Key

5TH – A village security meeting was held at Kidotok Primary School.

10TH –Kidotok Village Chief died.

23RD –Repair of Kidotok Village Bridge.

Questions

1. What does the calendar show?

2. Which month is shown above?

3. On which day of the week did this month start?

4. What happened in Kidotok Village on 10th January, 2018?

5. When was Kidotok Village Bridge repaired?

6. How many Tuesdays were in this month?

7. Which was the sixth day of this month?

8. How many times did Moslems go to the mosque in this month?

9. What was the venue for the security meeting that took place on the 5th of this month?

10. When did this month end?

55. **Use the words in the box to complete the passage.**

| | | | |
|----------------|------------|------------|--------------|
| steering wheel | brakes | headlights | side mirrors |
| diesel | seat belts | indicators | engine |
| seats | vehicle | | |

A car is a good _____ with many parts working together. It has _____ that control the speed of a car. The _____ is used to turn the car in any direction one wishes to go and the _____ are for seeing vehicles that are coming from behind.

The _____ provides power for the car to move. Some of the vehicles use petrol while others use _____ as fuel. When the _____ are flashed, it may be a warning to other drivers. A car also has _____ that are used when the driver wants to turn to a particular side. When those lights are flashed, other road users have to give way for the vehicle to turn. The _____ are used by the passengers in cars and aeroplanes to be secure. In case of an accident, these belts tighten them on their _____ to avoid too many injuries.

56. **Re-arrange the sentence below in the correct form to make a suitable story.**

1. As I reach home, the first thing I do is to have lunch then I help my mother with house work afterwards.
2. When the breakfast is ready, I serve my parents and myself.
3. At church, I keenly attend the pastor's preaching because I like it.
4. After bathing, I rush to the kitchen to prepare breakfast.
5. Each Sunday in the morning as I wake up.
6. I greet my lovely parents.
7. After the breakfast, I pick my Bible and a pen to move to church.
8. Then I go the bathroom to brush and bathe.
9. But the moment I enjoy most, is the praise and worship.
10. When the service ends, I return home.

Correct order

END



KINGS WAY PRIMARY SCHOOL

P. 5 RECESS REVISION 2020-(SET FIVE)

MATHEMATICS

DURATION : 2 HOURS 30 MINUTES

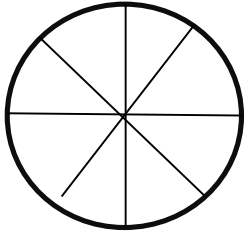
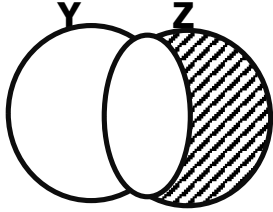
Name _____ Stm _____

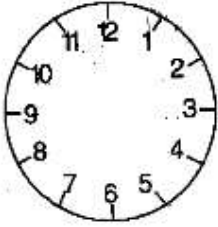
Read the following instructions carefully

1. This paper has **two** Sections: **A** and **B**.
2. Section **A** has 20 answer questions (40 marks)
3. Section **B** has 12 questions (60 marks)
4. Answer **ALL** questions. Answers to both sections must be written in the spaces provided.
5. All answers must be written using a blue or black ballpoint pen or ink. Diagrams should be drawn in pencil.
6. Unnecessary alteration of work may lead to loss of marks.
7. Any handwriting that cannot be easily read may lead to loss of marks.
8. Do not fill anything in the box indicated for examiner's use only.

| FOR EXAMINERS USE ONLY | | |
|------------------------|------|--|
| QN. NO. | MARK | |
| 1 - 10 | | |
| 11 - 20 | | |
| 21 - 22 | | |
| 23 - 24 | | |
| 25 - 26 | | |
| 27 - 28 | | |
| 29 - 30 | | |
| 31 - 32 | | |
| TOTAL | | |

SECTION A

| | | | | | | | | | |
|------------|--|------------|--|---|----|----|----|---|---|
| 1. | Work out: 11×3 | 6 | Find the next number in the sequence. $1, 2, 4, 7, 11, \underline{\hspace{2cm}}$ | | | | | | |
| 2 | Round off 465 to the nearest hundreds. | 7 | Shade $\frac{1}{2}$ of this figure.  | | | | | | |
| 3 | Work out: <table style="margin-left: 20px;"><tr><td>Hrs</td><td>min</td></tr><tr><td>9</td><td>40</td></tr><tr><td>+1</td><td>45</td></tr></table> <div style="border: 1px solid black; width: 150px; height: 30px; margin-left: 20px;"></div> | Hrs | min | 9 | 40 | +1 | 45 | 8 | Set $A = \{a, b, c, d\}$. How many subsets can we get from set A? |
| Hrs | min | | | | | | | | |
| 9 | 40 | | | | | | | | |
| +1 | 45 | | | | | | | | |
| 4 | Solve : $x + 6 = 20$ | 9 | Describe the shaded region.  | | | | | | |
| 5 | What number has been expanded? $4000 + 900 + 30 + 7$ | 10 | Reduce $\frac{12}{15}$ to its lowest terms. | | | | | | |

| | | | |
|----|---|----|--|
| 11 | Write $\frac{3}{4}$ in words. | 16 | Write 39 in Roman numerals. |
| 12 | Of the 52 pupils in a class, 28 of them are girls. How many boys are there? | 17 | Find the value of 3 in the number 9365 . |
| 13 | Work out: $\frac{2}{9} + \frac{4}{9}$ | 18 | Share 48 books equally among 6 boys. |
| 14 | Show 6:15 p.m on the clock face below.  | 19 | Write 0.7 as a common fraction. |
| 15 | Simplify: $2y + 5m + y - 3m$ | 20 | Find the G.C.F of 8 and 12. |

Section B

21 Paul collected 35 mangoes and 29 apples from his fathers's farm.
a) How many fruits did Paul collect altogether?

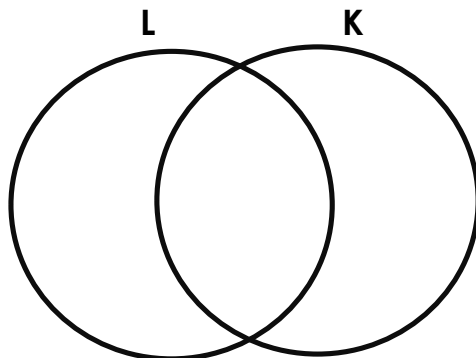
b. How many more mangoes than apples did he collect?

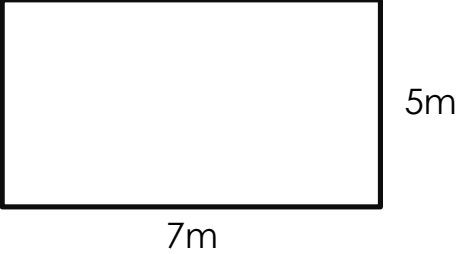
c. If each mango costs sh. 200, how much money will Paul get after selling all the mangers?

22 Given $K = \{a, e, i, o, u\}$ and $L = \{d, e, f, g, h, i, j\}$
a Describe set K .

b. Find $n(L)$

c. Use the sets K and L to complete the venn diagram below.



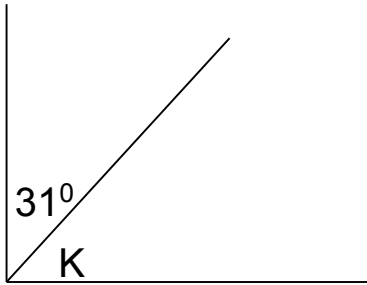
| | |
|----|---|
| d. | Find KnL |
| 23 | <p>Use the figure below to answer questions.</p>  <p style="text-align: center;">7m</p> <p style="text-align: right;">5m</p> <p>a. Work out the perimeter of the figure above.</p> |
| b. | Find its area. |
| 25 | a Express 1000cm as metres. |
| b. | Change 3 hours to minutes. |

| c. | <p>Subtract</p> <table style="margin-left: 40px;"> <tr> <td style="text-align: center;">M</td> <td style="text-align: center;">CM</td> </tr> <tr> <td style="text-align: center;">9</td> <td style="text-align: center;">18</td> </tr> <tr> <td style="text-align: center;">- 6</td> <td style="text-align: center;">42</td> </tr> <tr> <td colspan="2" style="text-align: center;"> <div style="border: 1px solid black; width: 150px; height: 40px; margin: 0 auto;"></div> </td> </tr> </table> | M | CM | 9 | 18 | - 6 | 42 | <div style="border: 1px solid black; width: 150px; height: 40px; margin: 0 auto;"></div> | | | |
|--|--|-------------|--------------|------|--------------|--------|----------|--|--------------|-----|------------|
| M | CM | | | | | | | | | | |
| 9 | 18 | | | | | | | | | | |
| - 6 | 42 | | | | | | | | | | |
| <div style="border: 1px solid black; width: 150px; height: 40px; margin: 0 auto;"></div> | | | | | | | | | | | |
| 26 | <p>Use the price list below to answer questions.</p> <table style="margin-left: 40px;"> <thead> <tr> <th style="text-align: left;">Item</th> <th style="text-align: left;">price</th> </tr> </thead> <tbody> <tr> <td>Pens</td> <td>sh. 500 each</td> </tr> <tr> <td>Rubber</td> <td>sh. 1000</td> </tr> <tr> <td>Books</td> <td>sh. 800 each</td> </tr> <tr> <td>Bag</td> <td>sh. 25,000</td> </tr> </tbody> </table> <p>a. Jackie bought 8 pens. How much money did she spend?</p> | Item | price | Pens | sh. 500 each | Rubber | sh. 1000 | Books | sh. 800 each | Bag | sh. 25,000 |
| Item | price | | | | | | | | | | |
| Pens | sh. 500 each | | | | | | | | | | |
| Rubber | sh. 1000 | | | | | | | | | | |
| Books | sh. 800 each | | | | | | | | | | |
| Bag | sh. 25,000 | | | | | | | | | | |
| b. | <p>How much will a dozen of books cost?</p> | | | | | | | | | | |
| c | <p>John had 40,000/= and bought a bag. Find his change.</p> | | | | | | | | | | |
| 27 | <p>Use >, < or =</p> <p>a. $\frac{2}{5}$ _____ $\frac{2}{10}$</p> <p>b. 28 _____ 82</p> <p>c. 1kg _____ 1000g</p> <p>3000 + 40 + 2 _____ 432</p> | | | | | | | | | | |

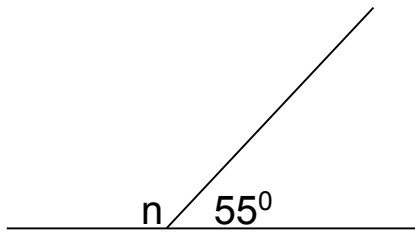
| 28 a | Solve these equations $3k = 15$ | | | | | | | | | | | | | | | |
|----------|---|---------|-------------|---------|--------|----|-------|------|---|-------|--------|-------|-------|-------|---|-------|
| b. | $\frac{W}{2} = 12$ | | | | | | | | | | | | | | | |
| c. | $q - 16 = 20$ | | | | | | | | | | | | | | | |
| 29 a. | Arrange these numbers in descending order. 340, 435, 304, 453 | | | | | | | | | | | | | | | |
| b. | Represnet the biggest number in the list above on an abacus. | | | | | | | | | | | | | | | |
| 30 a) | <p>Complete the table below corrcetly.</p> <table border="1" data-bbox="321 1499 1114 1913"> <thead> <tr> <th data-bbox="321 1499 548 1566">Name</th> <th data-bbox="548 1499 776 1566">No. of pens</th> <th data-bbox="776 1499 1114 1566">Tallies</th> </tr> </thead> <tbody> <tr> <td data-bbox="321 1566 548 1654">Mugoya</td> <td data-bbox="548 1566 776 1654">12</td> <td data-bbox="776 1566 1114 1654">_____</td> </tr> <tr> <td data-bbox="321 1654 548 1743">Mark</td> <td data-bbox="548 1654 776 1743">8</td> <td data-bbox="776 1654 1114 1743">_____</td> </tr> <tr> <td data-bbox="321 1743 548 1831">Martin</td> <td data-bbox="548 1743 776 1831">_____</td> <td data-bbox="776 1743 1114 1831">_____</td> </tr> <tr> <td data-bbox="321 1831 548 1913">Tonny</td> <td data-bbox="548 1831 776 1913">2</td> <td data-bbox="776 1831 1114 1913">_____</td> </tr> </tbody> </table> | Name | No. of pens | Tallies | Mugoya | 12 | _____ | Mark | 8 | _____ | Martin | _____ | _____ | Tonny | 2 | _____ |
| Name | No. of pens | Tallies | | | | | | | | | | | | | | |
| Mugoya | 12 | _____ | | | | | | | | | | | | | | |
| Mark | 8 | _____ | | | | | | | | | | | | | | |
| Martin | _____ | _____ | | | | | | | | | | | | | | |
| Tonny | 2 | _____ | | | | | | | | | | | | | | |

31 Find the missing angle.

a.



b.



c. Draw a line of length 5cm in the space provided below.

32 The table below shows the attendance of pupils of a P.5 class. Use it to answer questions that follow.

| Day | Mon | Tue | Wed | Thur | Fri |
|--------------|-----|-----|-----|------|-----|
| No of pupils | 180 | 250 | 200 | 220 | 250 |

a Which days had the same attendance?

b. How many pupils attended school on Wednesday?

c. Find the difference in attendance of Monday and Thursday

END



KINGS WAY PRIMARY SCHOOL

P. 5 RECESS REVISION 2020-(SET FIVE)

RELIGIOUS EDUCATION

DURATION : 2 HOURS 15 MINUTES

Name _____ stream _____

Instructions

- Answer either Christianity or Islam questions but not both in a number.
- No marks will be awarded to a pupil who attempts both questions in a number.

SECTION A (40 MKS)

1. **Either:** Who was the earthly father of Jesus?

Or: Who was the father of Prophet Muhammed?

2. **Either:** Name the Holy Book for Christians.

Or: Name the Holy Book for Muslims.

3. **Either:** Who built the Ark?

Or: Which prophet built the Ark?

4. **Either:** How many days did God take creating the world?

Or: How many days did Allah take to create the world?

5. **Either:** What did God create on the Fourth Day?

Or: What did Allah create on the fourth Day?

6. **Either:** In which place will the righteous Christians go after death?

Or: In which place will the righteous Muslims go after death?

7. **Either:** In which city was Jesus buried?

Or: In which city was Prophet Muhammad buried?

8. **Either:** State one reason why God made the Lakes for man.

Or: State one reason why Allah made the lakes for man.

9. **Either:** Which angel brought the Good News of the birth of Jesus to Mary?

Or: Which angel revealed the Quran to prophet Muhammed on Mt. Hira?

10. **Either:** Why do Christians say their prayers before going to sleep?

Or: Why do Muslims say their prayers before going to sleep?

11. **Either:** When do Christians go for general prayers?

Or: When do Muslims go for general prayers?

12. **Either:** Give the immediate punishment that God gave Adam and Eve for disobeying Him.

Or: Name the immediate punishment that Allah gave Adam and Hawa for disobeying Him.

13. **Either:** Name the Holy place of worship for Christians.

Or: Name the Holy place of prayers for Muslims.

14. **Either:** Give any one way Christians show love to friends.

Or: Give any one way Muslims show love to friends.

15. **Either:** Which sacrament makes one enter in God's family?

Or: Which pillar of Islam brings the rich and poor together?

16. **Either:** Write down one way God talks to Christians.

Or: Write down one way Allah talks to Muslims.

17. **Either:** Who was the father of Isaac?

Or: Who was the father of Ismail?

18. **Either:** Why is it good to forgive one another?

Or: On which mountain did Noah's ark rest after the floods?

19. **Either:** On which mountain did Noah's ark rest after the floods?

Or: On which mountain did Nuuh's ark rest after the floods?

20. **Either:** Why is Sunday important to Christians?

Or: Why is Friday important to Muslims?

21. **Either:** Mention one person who leads prayers in the church.

Or: Mention one person who leads prayers in the mosque

22. **Either:** Who ate the forbidden fruit first?

Or: Who ate the forbidden fruit first?

23. **Both:** What is prayer?

24. **Either:** Mention and one prophet in Bible.

Or: Mention any one prophet in Islam.

25. **Either:** Who was the first Martyr in Christianity?

Or: Name the first Martyr in Islam.

26. **Either:** Who led the Israelites out of Egypt?

Or: Who led the Ban-Israel out of Egypt?

27. **Either:** Write C.R.E in full.

Or: Write I.R.E in full.

28. **Either:** Who is our father in heaven?

Or: Who is the founder of Islam?

29. **Either:** What is the fasting period for Christians?

Or: What is the fasting month for Muslims?

30. **Either:** Name the first person to be created by God.

Or: Name the first Prophet in Islam.

31. **Either:** How does man resemble God?

Or: How does man resemble Allah?

32. **Either:** In which book in the Bible do we find the story of creation?

Or: Why did Allah create fish?

33. **Either:** How was Jesus related to Mary?

Or: How was Prophet Muhammed related to Amina?

34. **Either:** On which river was Jesus baptized?

Or: In which country do we find the Kaabah?

35. **Either:** Who was the mother of John the Baptist?

Or: Name the mother of Prophet Yahya?

36. **Either:** Who received the Ten Commandments on Mt. Sinai?

37. **Either:** On which day do Christians start fasting?

Or: What celebration marks the ends of fasting in Islam?

38. **Either:** Why is Judas Iscariot hated in Christianity?

Or: Why is Khadijah remembered in Islam?

39. **Either:** What should a good Christian do after sinning?

Or: What should a good Muslim do after sinning?

40. **Either:** Who was the last prophet in the Bible?

Or: Who was the last prophet in Islam?

Section B

41a) **Either:** Name the prayer which Jesus Christ taught His apostles.

b) Mention any two requests made in the above prayer.

i) _____

ii) _____

c) Give one reason why Christians pray.

Or: What is prayer?

i) _____

ii) _____

b) Mention any two daily prayers in Islam.

i) _____

ii) _____

c) Give one reason why Christians pray.

42a) Either: a) What do you understand by the term "Holy Trinity?"

b) Write the three persons that make up the Holy Trinity.

i) _____

ii) _____

iii) _____

Or: What is Islam? _____

b) Write down any three pillars of Islam.

i) _____

ii) _____

iii) _____

43. Either a) Name the four Gospel Books in the Bible.

i) _____

ii) _____

iii) _____

iv) _____

Or: Name the four Holy Books in Islam.

i) _____

ii) _____

iii) _____

iv) _____

44 Either: Mention the two parts of the Bible.

i) _____

ii) _____

b) Who wrote the first five books in the Bible?

c) Name the last book in the Bible.

Or: Give two leaders found in the Mosque.

i) _____

ii) _____

Give two qualities of a good leader in Islam.

i) _____

ii) _____

45. Either a) Who is a leader?

b) State any three qualities of a good religious leader.

i) _____

ii) _____

iii) _____

Or: What is zakat?

b) Mention three items that can be given as zakat.

i) _____

ii) _____

iii) _____

46a) Either: Write down any four animals created by God.

i) _____

ii) _____

Or: Write down any four animals created by Allah.

i) _____

ii) _____

iii) _____

iv) _____

47. Either: a) Mention two disciples of Jesus Christ.

i) _____

ii) _____

b. Give any two names given to Christians after baptism.

i) _____

ii) _____

Or: Give three names of Allah's prophets.

i) _____

ii) _____

ii) _____

b. Write one name given to Muslim girls.

48. Either a) What is prayer?

b. Give three reasons why Christians fast.

i) _____

ii) _____

iii) _____

Or: What is Saum?

b) Give three reasons why Muslim fast?

i) _____

ii) _____

iii) _____

49. Either: a) Match list A with list B correctly.

LIST A

Bethlehem

Jerusalem

Nazareth

Golgotha

LIST B

Where Jesus grew up.

Where Jesus was crucified.

Where Jesus was born.

Where Jesus was buried.

Bethlehem _____
Jerusalem _____
Nazareth _____
Golgotha _____

Or: **Match list A with B correctly.**

List A

List B

| | |
|----------|---|
| Mecca | Where prophet Muhammed received the Quran |
| Medina | Was built by Ibrahim. |
| Mt. Hira | Where Prophet Muhammed was born |
| Kabaah | Where Prophet Muhammed was buried |

Mecca _____
Medina _____
Mt. Hira _____
Kabaah _____

50. Either: Name the things God created on the following days.

a) First day

b) Second day

c) Fourth day

d) Sixth day

Or: Name the things Allah created on the following days.

a) First Day

b) Second Day

c) Fourth Day

d) Sixth Day

51. Either a) What is sin?

b. Give two sins children commit in school.

i) _____

ii) _____

c) State one result of sin.

Or: a) What is sin?

b) Give two sins children commit in class.

i) _____

ii) _____

c) State one result of sin.

52a) Either: Name any two religious organizations in Uganda.

i) _____

ii) _____

b) Give two ways the religious organisations have promoted development in Uganda.

i) _____

ii) _____

Or: Mention any two Muslim organisations in Uganda.

- i) _____
- ii) _____

b) Give two ways the religions organisations have promoted Development in Uganda.

- i) _____
- ii) _____

53. **Either:** a) Who heads a family?

b) Name any responsibility of the following people at home.

- i) father _____
- ii) child: _____
- iii) mother : _____

Or: Who heads a family?

b) Name any responsibility of the following people at home.

- i) Mother: _____
- ii) Father; _____
- iii) Child; _____

54. **Either:** Give any four books found in the Old Testament of the Bible.

- i) _____
- ii) _____
- iii) _____
- iv) _____

Or: Give any four impurities in Islam.

- i) _____
- ii) _____
- iii) _____
- iv) _____

55. Either a) Why did God create the following;

i) birds; _____

ii) Land: _____

b) Where will sinners go to after death?

c) Name the place where righteous Christians will go after death.

Or: a) Why did Allah create the following;

i) Birds _____

ii) Land _____

b) Where will sinners go to after death?

c) Name the place where righteous Muslims will go after death.

END



KINGS WAY PRIMARY SCHOOL

P. 5 RECESS REVISION 2020-(SET FIVE)

INTEGRATED SCIENCE

DURATION : 2 HOURS 15 MINUTES

NameStream.....

Read the following instructions carefully

1. This paper is made up of two Sections:
A and B.
2. Section **A** has 40 questions (40 marks)
3. Section B has 15 questions (60 marks)
4. Attempt all questions. Answers to both sections must be written in the spaces provided.
5. All answers must be written in blue or black ballpoint pen or ink but not in pencil. All work done in pencil, except diagrams, will **NOT** be marked.
6. Crossing out of answers will lead to loss of marks.
7. Any handwriting that cannot be easily read may lead to loss of marks.

| FOR EXAMINERS USE ONLY | | |
|------------------------|------|------|
| QN. NO. | MARK | SIGN |
| 1-10 | | |
| 11-20 | | |
| 21-30 | | |
| 31 – 40 | | |
| 41 – 50 | | |
| 51 | | |
| 52 | | |
| 53 | | |
| 54 | | |
| 55 | | |
| TOTAL | | |

SECTION A (40 MARKS)

1. Name the insect that provides man with honey.

2. Why is clay soil the best type of soil for pottery?

3. State any one danger of electricity at home.

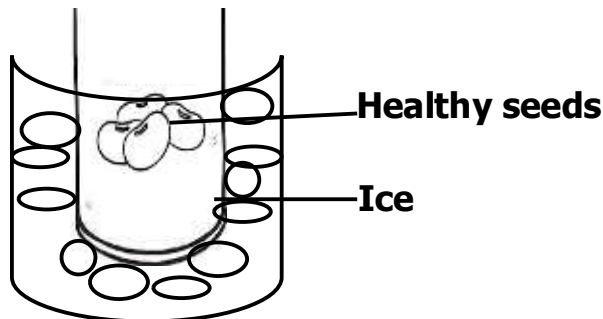
4. State any one way plants benefit from animals.

5. Name the liquid metal commonly used in a clinical thermometer.

6. Why is local chicken a better breed to keep than exotic breed?

7. How is too much rainfall dangerous to farmers?

The diagram below shows an experiment on germination.



8. Why would the seeds fail to germinate after four days?

9. Give any one example of a perennial crop.

10. Write down any one activity P.5 children can do to promote sanitation in a classroom.

11. Give any one mineral that strengthens the enamel of the human tooth.

12. In which way is a cat useful to a crop farmer?

13. What is weather?

14. Which type of bees hatch from unfertilized eggs?

15. How does mulching control weeds?

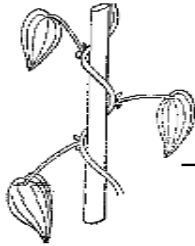
16. State any one characteristic of living things.

17. Why are we advised to iron our clothes before using them?

18. Write down any one way of preparing food.

19. Give any one block in a village food path.

20. **Name the method of climbing used by the weak stem below.**



21. Give any one effect of accidents to people.


22. State any one importance of cowdung to a crop farmer.

23. Which body organ can Opoka use to find out that tea is sugarless?

24. What are aquatic animals?

25. Why is a hutch built using wiremesh?

26. **In the space below, draw a garden tool used for collecting rubbish.**



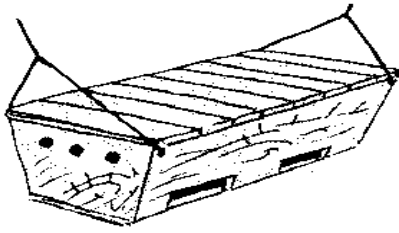
27. Name any one part of a shadow.

28. How do most plants control transpiration during dry season?

29. Why is breast milk the most suitable for babies?

30. State any one way we can prevent metals from rusting.

31. Name the bee hive shown below.



32. Why do layers sometimes lay eggs with soft egg shells?

33. What is a fracture?

34. Give any one way man has destroyed his environment.

35. Why does petrol float on water?

36. Why do animals make sound?

37. Name any one waste product from the human body.

38. Give any one importance of keeping farm records.

39. How are anthers important in plant reproduction?

40. Name any one type of germs apart from bacteria.

SECTION B

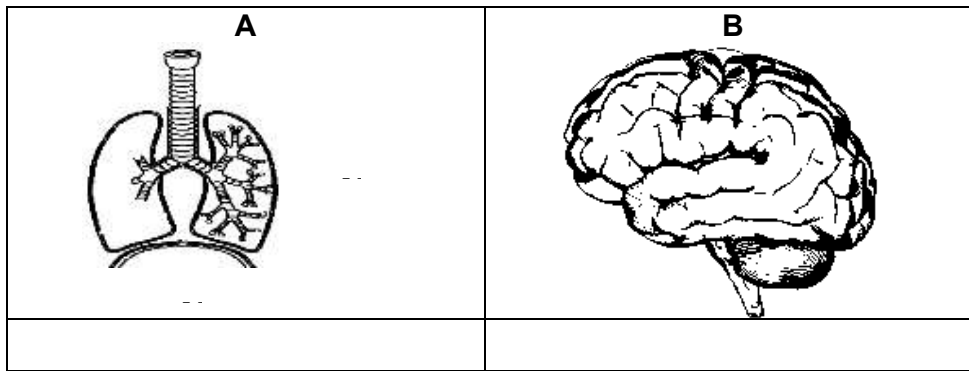
41a) Give any one example of poultry.

b) Why do farmers de-beak some poultry birds?

c) State any one advantage of deep litter system of keeping poultry.

How important is litter in a poultry house?

42. a Name the body organs show in the diagram below.



c) Which structure protects each of the above organs from damage?

i) organs **A** _____

ii) organs **B** _____

43a) What is photosynthesis?

b. How do animals benefit from photosynthesis?

c. Give any one raw material needed for photosynthesis.

d. Of what importance is chlorophyll during photosynthesis?

44.a) Give any two characteristics of insects.

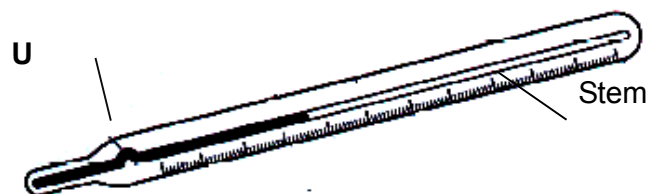
i) _____

ii) _____

b) Why do house flies lay their eggs on decomposing bodies?

c) State any one way in which insects are dangerous to man.

45. Below is a diagram of a clinical thermometer. Use it to answer questions that follow.



a) How is a clinical thermometer useful to a doctor?

b) Mention any one part of the human body where a clinical thermometer can be placed in order to take readings.

- c) State the role of part **U** in a thermometer.


- d) Which liquid is commonly used in a clinical thermometer?

- 46a. How are shadows formed?

- b) At what time of the day are shadows longest?

- c) Give any one use of shadows to man.

- d) **Complete the diagram below by drawing its shadow.**



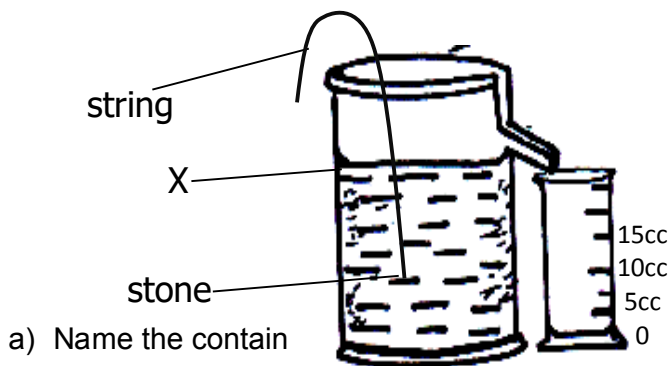
- 47a. Which intestinal worm enters the body when we eat undercooked meat?

- b) How is the worm in (a) above dangerous to man?

- c) Apart from the worm named above, name any other one intestinal worm.

- d) Give any one way of controlling the above worm among children.

48. **The diagram below shows a method of finding volume. Use it to answer questions that follow.**



- a) Name the contain

- b) Name the method of finding volume of objects shown above.

c) **If the mass of the stone is 60g, calculate its density. (2 marks)**

49.a) Give any one way of caring for teeth.

b) _____
Name the type of tooth used for tearing food?

c) _____
How is the tooth in (b) above adapted to tearing food?

d) _____
Name the first set of teeth to develop in a baby's mouth.

50.a) Mention any one use of honey to man.

b) _____
How can a bee keeper prevent his bees from swarming?

c) _____
Which equipment can a honey harvester use to protect his face from bee stings?

d) _____
Give any one role of the sterile bees in a hive.

51a) **Match vectors in list A to disease they spread in list B**

| A | B |
|----------------|--------------|
| Infected dog | yellow fever |
| Aedes mosquito | trachoma |
| Housefly | scabies |
| Itch mites | scabies |

- i) Infected dog _____
- ii) Aedes mosquito _____
- iii) Housefly _____
- iv) Itch mites _____

52a) What is soil erosion?

b) _____
State any one cause of soil erosion.

c) _____
Suggest one way farmers in hilly areas can control soil erosion.

d) State one agent of soil erosion.

53a) Apart from proteins, give any two other classes of food in a balanced diet.

i) _____

ii) _____

b) Why is breast milk regarded as the best food for babies below 6 months?

c) Give any one reason why people cook food.

54.a) Give any two breeds of rabbits kept in Uganda.

i) _____

ii) _____

b) Why do people keep rabbits?

c) Mention any one disease that attacks both poultry and rabbits.

55. What is air? _____

b) **Draw a diagram to show that air occupies space.**



c) How are the following components of air useful to man?

i) oxygen _____

ii) carbon dioxide _____

End

#StaySafe



KINGS WAY PRIMARY SCHOOL

P. 5 RECESS REVISION 2020-(SET FIVE)

SOCIAL STUDIES

DURATION: 2 HOURS 15 MINUTES

Name

Stream.....

Read the following instructions carefully

1. This paper has two sections: **A** and **B**.
2. Answer **all** questions. **All** answers to both sections **A** and **B** must be written in the spaces provided.
3. **All** answers must be written using a blue or black ball-point pen or fountain pen.
4. Unnecessary changes of work may lead to loss of marks.
5. Any handwriting that cannot easily be read may lead to loss of marks.
6. Do **not** fill anything in the boxes indicated "**For Examiners' Use Only**" and those inside the question paper.

| FOR EXAMINERS' USE ONLY | | |
|----------------------------|------|-----------|
| QN. NO. | MARK | EXRS' NO. |
| 1-10 | | |
| 11-20 | | |
| 21-30 | | |
| 31 -40 | | |
| 41-43 | | |
| 44-46 | | |
| 47-49 | | |
| 50-52 | | |
| 53-55 | | |
| TOTAL | | |

SECTION A

1. What is the importance of a compass to a pilot?

2. In which way is a dog important to people's homes?

3. Why do farmers grow cash crops?

4. Why is it not good for young children to move alone at night?

5. Name the element of weather which causes floods.

6. State one way through which a P.5 pupil can become a prefect.

7. What is weather?

8. Why is it good for every home to have trees in the compound?

9. State any one way how early man used fire?

10. Name the country found to the East of Uganda.

11. How is the green colour on the traffic light useful to pedestrians?

12. Draw a map of a pot in the space below.



13. Give one reason why many people settle on slopes of mountains.

14. Why is there no snow on the peak of Mt. Elgon?


15. Why should Mr. Opio, a policeman put on a uniform when on duty?

16. Mention the physical feature that covers the largest part of Uganda.

17. Why are thick forests in Uganda reducing day by day?

18. State one reason why a rain gauge is put at a weather station?

19. Name the map symbol below.



20. Why is Kabale cooler than Wakiso?

21. Give one duty of a father at Home.

22. Name any one raw material from swampy areas.

23. State one role of a driver in a school which has a school van.

24. Give one importance of legends to children.

25. Which physical features covers the largest of Uganda?

26. How is fishing important you know.

27. Give any one aspect of climate you know.

28. Which Stone Age site is in Uganda known for rock painting?

29. State one reason why every community should have a hospital.

30. Name the largest ethnic group in Uganda.

31. How can one become an R.D.C in Uganda?

32. Give any one use of cow dung to farmers.

33. How important is a zebra crossing important to road users?

34. Give one importance of Bulls to people.

35. State the major line of latitude marked 0°.

For questions 36-40, answer Christianity or Islam but not Both in the same questions.

36. Either: On which mountain did Moses receive the Ten Commandments?

Or: On which mountain did Prophet Mohammed receive the first revelation of the Qur'an?

37. Either: What is the value of prayer to a Christian?

Or: What is the value of prayer to a Muslim?

38. Either: Give a reason why Christians baptize people.

Or: State one reason why Muslims circumcise their male children.

39. Either: How can one renew his/her faith with God?

Or: How can one renew his/her faith with Allah?

40. Either: Why do Christians fast?

Or: Give any one importance of fasting to a Muslim?

SECTION B

41. a) What are physical features?

b. Mention nay two examples of drainage features.

i) _____

ii) _____

c. Give any one problem faced by people who live around mountains.

42.a Give any two ways how people get their basic needs.

i) _____

ii) _____

b. State two reasons why the mining sector is underdeveloped in Uganda.

i) _____

ii) _____

43a. **Match the statement in List A to list B correctly.**

A

Education

Banking

Security

Medical care

A

B

Banks

police stations

Hospitals

schools.

B

Education _____
Banking _____
Security _____
Medical care _____

44. a) Name any one landlocked country that is a neighbour to Uganda.

b. Give two problems faced by landlocked countries.

i) _____

ii) _____

c. State one way Uganda can solve her problems of landlockedness.

45.a) What title is given to the head of the police in Uganda?

b. Give the work of each of the following departments of the police in Uganda.

i) Traffic department

ii) Anti-riot Department

c. How important a police station in our community?

46.a) Mention nay two materials used to build a permanent house.

i) _____

ii) _____

b. Give one reason why people build temporary houses.

c. State any one basic need provided by a house.

47a. Mention any two types of transport.

i) _____

ii) _____

b. Which type of transport is best for transporting perishable goods from Uganda to Europe?

c. Why is road construction difficult in Kabale district?

48a) Give two factors that attract people to settle on slopes of mountain.

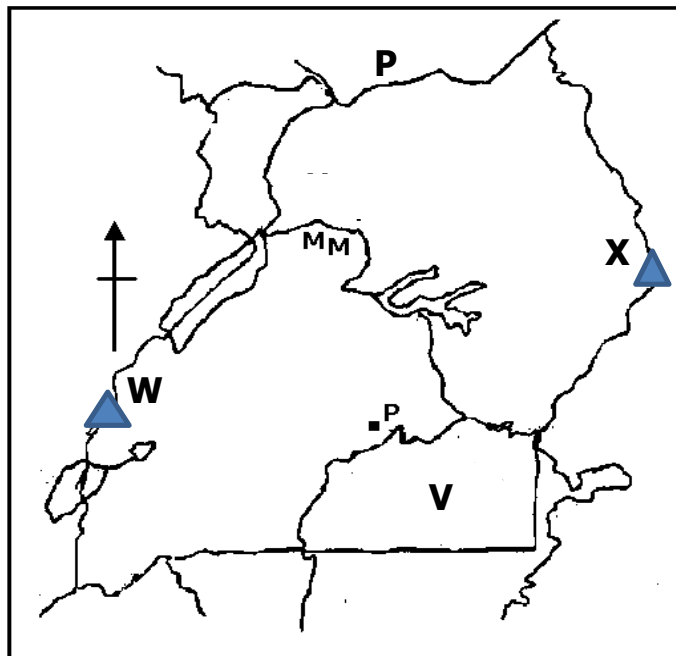
i) _____

ii) _____

b. Why do people in Mountainous areas keep donkeys?

c. Name any one economic activity carried out around mountainous areas.

49. **Study the map below and answer the questions that follow.**



a) State the Uganda's neighbour marked P.

b) How is the formation of mountain W different from mountains X?

c) Give two importance of the lake marked V the people of Uganda.

i) _____

ii) _____

50. Give any two reasons why people cut down trees.

i) _____

ii) _____

b) Name the largest natural forest in Uganda.

c) Name any one product got from soft wood.

For questions 51-55 answer either Christianity or Islam But not Both in the same question.

51. Either: Name the Holy place of worship for Christians.

b) Mention any two of the Ten Commandments God gave to Moses.

i) _____

ii) _____

c) Why were the Israelites given the Ten Commandments?

Or: Name the Holy place of worship for Muslims.

b) Mention any two pillars of Islam.

i) _____

ii) _____

c) Give any one value of pillars to Muslims.

52. **Either:** Name the apostles;

i) Who was the first to be called by Jesus?

ii) Who doubted the resurrection of Jesus?

iii) Who replaced Judas Iscariot?

iv) Who was greatly loved by Jesus?

Or: Who is a caliph?

b) Mention any two caliphs of Prophet Mohammed.

i) _____

ii) _____

c) How were caliphs helpful in Islam?

53a) **Either:** Match the following mountains to the events that happened there

- | | |
|---------------|--|
| 1. Mt. Sinai | Elijah contested with Prophets of Baal |
| 2. Mt. Ararat | Jesus ascended to Heaven |
| 3. Mt. Olives | Noah's Ark rested. |
| 4. Mt. Carmel | Moses received the Ten Commandments. |

1. Mt. Sinai _____

2. Mt. Ararat _____

3. Mt. Olives _____

4. Mt. Carmel _____

Or: Match the following places with the events that happened there.

Place

What happened

- | | |
|-------------------|--------------------------------------|
| i) Mecca | Prophet Mohammed was stoned |
| ii) Medina | Prophet Mohammed received the Qur'an |
| iii) Cave of Hira | Mohammed was buried |
| iv) Taif | Mohammed was born. |

Place

What happened

- | | |
|-------------------|-------|
| i) Mecca | _____ |
| ii) Medina | _____ |
| iii) Cave of Hira | _____ |
| iv) Taif | _____ |

54. Both: a) What is faith?

b) Name two people in the Bible who had great faith in God.

i) _____

ii) _____

c) Give any one way people strengthen their faith in God.

55. **Either:** What do we call the fasting period for Christians?

b) Why do Christians remember the following days?

i) Ash Wednesday _____

ii) Palm Sunday _____

iii) Easter Sunday _____

Or: What do we call the fasting month for Muslims?

b) Give any one importance of fasting to Muslims.

c) Mention any two groups of people who should not fast.

i) _____

ii) _____

END