



KINGS WAY PRIMARY SCHOOL

P. 5 RECESS REVISION 2020 - (SET SIX)

ENGLISH

DURATION : 2 HOURS 15 MINUTES

Name

Stream.....

Read the following instructions carefully

1. This paper comprises two sections A & B.
2. Section A has sub-section 1 with 30 questions (30 marks) and Sub-section II has 20 questions (20 marks).
3. Section B has 5 questions (50 marks)
4. Attempt all questions. Answers to both sections must be written in the spaces provided.
5. All answers must be written with a blue ballpoint pen or in ink but not in pencil.
6. Crossing out of answers will lead to loss of marks.
7. Any handwriting that cannot be easily read may lead to loss of marks.

FOR EXAMINERS USE ONLY		
QN. NO.	MARK	SIGN
1-10		
11-20		
21-30		
31 – 40		
41 – 50		
51		
52		
53		
54		
55		
TOTAL		

Section A

For questions 1-5, fill in the blank space with suitable word.

1. Nasuuli travelled _____ taxi to go and meet her uncle.
2. _____ Joel or Jack will visit Bukedde FM on Monday.
3. Mzee Mbaala is fond _____ taking his vehicle to Ngara Garage for repair.
4. The man _____ bicycle was stolen last week, has just been here.
5. The _____ collected the fare before the bus set off from the park.

For questions 6-15, use the words in brackets to complete the sentences.

6. We _____ safely to Mbarara last night. (travel)
7. The government has _____ deployed soldiers at the Red Pepper publication building. (heavy)
8. I take my car to the garage _____ a month. (two)
9. That journalist will be arrested for _____ wrong information. (publish)
10. Our teachers _____ going to take us to the Uganda Communications Communion next work. (to be)
11. The mechanic is _____ my father's car now. (repair)
12. The drunkard driver drove _____ and knocked down a pedestrian at the pavement. (careless)
13. Joan married a _____ Chinese woman. (beauty)
14. The driver applied the _____ as soon as he saw a pupil crossing the road. (brake)
15. The mechanic has _____ his tools in the toolbox. (keep)

For questions 16-17 arrange the given words in alphabetical order.

16. windscreen, wheel, headlamp, driving
-

17. depart, travel, departing, travelling
-

For questions 18-20, write the plural form of the given words.

18. garbage _____
19. studio _____
20. steering wheel _____

For questions 21-23, rewrite the sentences giving the opposite of the underlined words.

21. My mother reported to her place of work very early.

22. A lion was seen crossing the road yesterday.

23. Our headmistress briefs teachers every Monday.

For questions 24-25 use the following words in sentences to show that you know the difference in their meaning.

24. bad _____

25. bird _____

For questions 26-28, write the given abbreviations in full.

26. bro _____

27. e.g. _____

28. Hon. _____

For questions 29-30 re-arrange the given words to form correct sentences.

29. tomorrow aunt visit going I am to my.

30. do parents live your Where?

Sub-section II

For questions 31-50, re-write the given sentences as instructed in brackets.

31. Juma was washing. Juma's sister was ironing the clothes.
(Re-write the sentence beginning: While-----)

32. As soon as the old woman heard the bad news, she collapsed.
(Rewrite using-----immediately-----)

33. Dasha is tall. Kasasa is very tall. (rewrite the sentence using-----as-----as-----)

34. Mr. Apunyo has to take his article to the editor tomorrow.
(Re-write the sentence using-----must-----)

35. Kaawa liked travelling more than studying.
(Rewrite the sentence using----- prefer-----)

36. We shall bare with this nonsense, shan't we?
(Rewrite the sentence ending-----shall we?)

37. I am not interested in the movie because it is boring.
(Construct a suitable question for which this is the answer)

38. The tour we had to Nairobi was very interesting. Everybody enjoyed it.
(Re-write the sentence using----- so----that-----)

39. The bicycle saddle is very high. I cannot sit on it.
(Re-write the sentence using-----too-----to-----)

40. The traffic officer is a wise man. The driver is a wise man.
(Re-write the sentence using-----both-----)

41. Children read newspapers every day.
(Re-write the sentence beginning: Newspapers-----)

42. There aren't any day schooling children in our class.
(Re-write the sentence using-----some-----)

43. The vendor started selling the newspapers at 8:00a.m. It is now 10:00 a.m. and he is still selling them. (Re-write the sentences using-----since-----)

44. That is the man. He gave us the Pass P.L.E pullouts.
(Rewrite the sentences using-----who-----)

45. James eats chicken. Janice eats chicken.
(Rewrite the sentence using-----as well as-----)

46. Ashraf goes to church on Sunday. Asianzu goes to church on Sunday.
(Re-write the sentence using-----and so-----)

47. If you don't write neatly, you will not pass the examination.
(Rewrite the sentence beginning: Unless-----)

48. Kupya organized the main hall. He wanted to make it ready for the staff meeting.
(Rewrite the sentences using-----in order-----)

49. That is a very dangerous corner. (Rewrite the sentence beginning: What-----!)

50. Once bitten, ----- . (Rewrite and complete the proverb correctly)

51. **Read the passage below carefully and answer the questions that follow in full sentences.**

My name is Epodoi. Travelling is one of my major hobbies. Whenever I get a chance to travel, I feel happy. I love to see new places. As I travel, I learn about different people. I like travelling by bus because when I am in a bus I get a bus I enjoy the scenery of the places we go through.

One day I travelled by bus to Arua to visit one of my relatives. We used the Masindi route via Parara because the Karuma Bridge was under repair. I stood in the queue

waiting for my turn to pay my fare. After getting my ticket, I entered the bus and took the front seat near the driver. The only luggage I had was a travel bag which I kept under my seat. We left Kampala at exactly 8:00 a.m. Since the road to Masindi had been newly tarmacked, the bus moved at a very fast speed. When we reached Luwero, however, the bus stopped briefly for people to buy some refreshments. I bought roasted maize and water.

We continued with the journey and when we reached Kafu River many vendors were selling roasted cassava, ghee and soft drinks. We branched off the Gulu highway to Masindi. At this point, we stopped for some time because some passengers were getting off.

After Masindi, we took a murrum and bumpy road to Paraa. At the gate to Murchison Falls National Park, we were told not to scare the animals. I saw lions, zebras, antelopes, elephants, buffalos, warthogs and some beautiful birds enjoying the vast land in the game park. What I loved most of all were the giraffes. They are tall and beautiful. The giraffes watched us as though we were wild animals. As we crossed River Nile, we watched hippos in the river. We arrived in Arua very late in the afternoon. What a nice journey it was for me!

Questions

a) To which place did Epodoi travel?

b) At what time did he leave Kampala?

c) By which means did Epodoi travel to Arua?

d) Which snacks did he buy when they reached Luwero?

e) Why did Epodoi love giraffes most according to the passage?

f) How many animals are talked about in the passage?

g) Which river did the passengers cross?

h) Why did the bus move at very fast speed when it left Kampala?

i) Write the opposite of the following words.

i) departure _____

ii) conductor _____

52. The advertisement below was made by Buuya Garage. Study it carefully and answer the questions that follow in full sentences.

Buuya Garage located on Plot 284, Beera Street.

All our esteemed customers are informed that we have brought new stock of original spare parts from India. They include; steering wheels, bonnets, engines, bumpers and wheel caps.

We shall sell them at a reduced price for the first one month and the vehicles of the first twenty customers will be fixed free of charge.

N.B. The order of service to our customers will be first come, first served.

COME ONE COME ALL

*Management
15th February, 2018*

Questions

1. Which garage made the announcement?

2. Where is Buuya Garage located?

3. When was the announcement made?

4. From which country where the spare parts imported?

5. Who are being informed about the new stock?

6. What will happen to the vehicles of the first twenty customers?

7. Write any two spare parts that were imported by Buuya Garage.

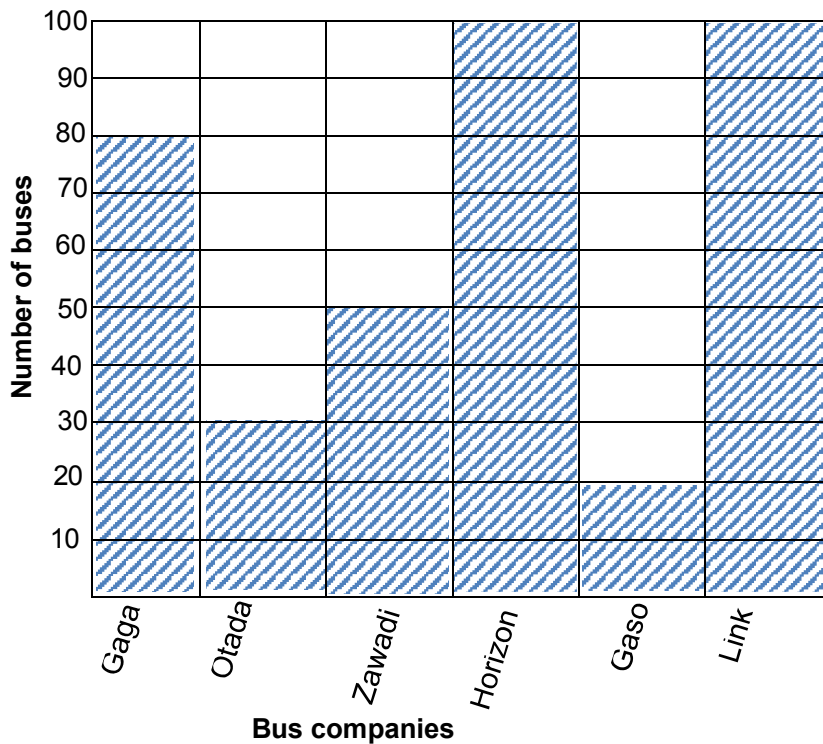
i) _____

ii) _____

8. What will be the order of service to the customers?

9. Who wrote the advertisement?

53. **The graph below is about the different Bus companies that park in Zoa Bus Park, Mweya. The records were compiled by Obilakol, the Manager of the bus park on 20th March, 2018. Study it carefully and answer the questions that follow in full sentences.**



Questions

1. What is the graph about?

2. In which park do the above buses park?

3. Which bus company has the least number of buses in the park?

4. Which bus companies have the same number of buses in the park?

5. According to the graph, which is the third richest bus company?

6. How many buses do Gaga and Link Bus Companies have altogether?

7. Where is Zoa Bus Park found?

8. How many bus companies are on the graph?

9. Who is the manager of Zoa Bus Park?

10. When were the records shown on the graph compiled?

54. **Use words in the table to complete the composition below.**

Last week, my motorcycle _____. I had to walk for about two miles before reaching _____. Mr. Tenhwa, the _____ opened his toolbox and got out a tyre lever and a _____ to repair my _____. The front tyre had a _____. There was a big hole in the tube. The other problem was with the _____, two of them had got broken.

First, Mr. Tenhwa cut a patch from an old inner tube and put some _____ on it before fixing it on the big hole. Then he looked inside his toolbox for _____ and found two new spokes, which he fixed on my motorcycle.

He got a _____ from his toolbox and pumped pressure into the tube.

mechanic, rubber solution, pump, town, puncture motorcycle, spokes, spare parts, broke down, spanner

55. **The sentences below are in a wrong order. Arrange them to make a meaningful story.**

- a) The following day, all the newspapers were covered with the news about the AIGP's death.
- b) There was murder at Kulambiro, Kisasi in 2017.
- c) These people took photographs and sent to social media.
- d) They rushed to the scene of the murder.
- e) Only to find the AIGP, his driver and the bodyguard all dead.
- f) This was the murder of the AIGP, Andrew Felix Kaweesi.
- g) When the people who were nearby heard the gunshots.
- h) Which instantly killed all the three people who were in the car.
- i) It was carried out by unknown gunmen who fired several bullets at his vehicle.
- j) The murder took place at 9 o'clock in the morning.



KINGS WAY PRIMARY SCHOOL

P. 5 RECESS REVISION 2020 - (SET SIX)

MATHEMATICS

DURATION : 2 HOURS 30 MINUTES

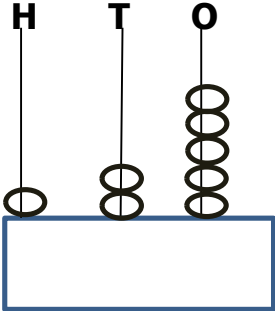
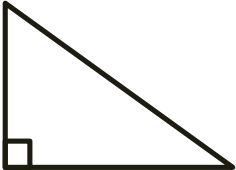
Name _____ Stm _____

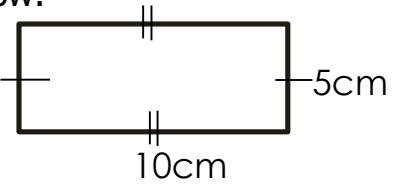
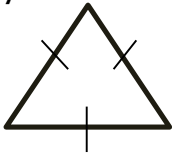
Read the following instructions carefully

1. This paper has **two** Sections: **A** and **B**.
2. Section **A** has 20 answer questions (40 marks)
3. Section **B** has 12 questions (60 marks)
4. Answer **ALL** questions. Answers to both sections must be written in the spaces provided.
5. All answers must be written using a blue or black ballpoint pen or ink
Diagrams should be drawn in pencil.
6. Unnecessary alteration of work may lead to loss of marks.
7. Any handwriting that cannot be easily read may lead to loss of marks.
8. Do not fill anything in the box indicated for examiner's use only.

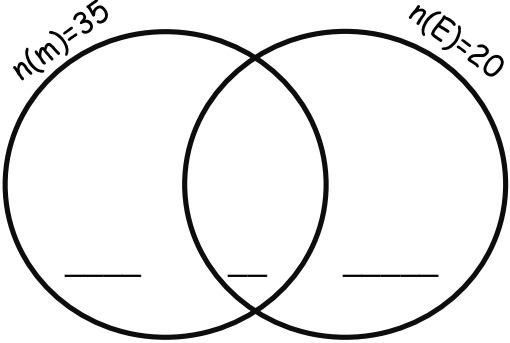
FOR EXAMINERS USE ONLY		
QN. NO.	MARK	
1 - 10		
11 - 20		
21 - 22		
23 - 24		
25 - 26		
27 - 28		
29 - 30		
31 - 32		
TOTAL		

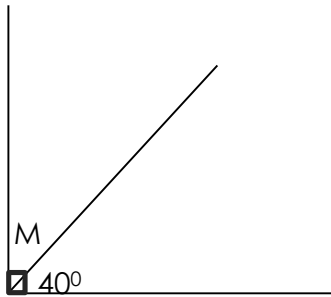
SECTION A

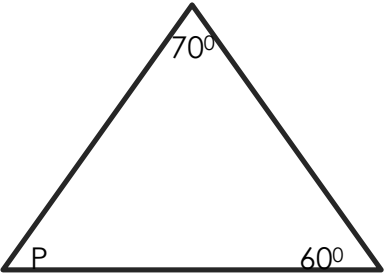
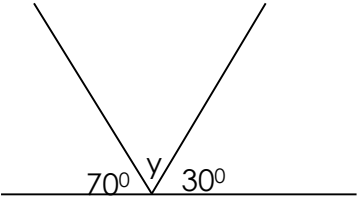
1.	Workout; 26×0	6.	Change 28 days to weeks.
2	Draw a symbol for an empty set in the space provided below.	7	<p>Write the number shown on the abacus below in Roman numerals.</p> 
3	Solve: $m - 6 = 6$	8	<p>Name the type of the triangle drawn below.</p> 
4	Round off 266 to the nearest tens.	9	Given that set $P = \{a,b,c\}$. How many subsets are in set P
5	Find the cost of 8 books if one costs sh. 800.	10	Draw tally marks for 12.

11	In a class of 56 pupils, 33 of them are boys and the rest are girls. How many girls are in the class?	16	Draw line segment AB of 6cm.
12	James ate $\frac{2}{7}$ of the sugar cane in the morning and the rest in the evening. What fraction of the sugarcane was eaten in the evening?	17	How many half litre cups can be got from a 10 litre jerrycan?
13	Workout the area of the figure below. 	18	What number has been expanded to get; $(2 \times 10^3) + (4 \times 10^2) + (6 \times 10^1) + (5 \times 10^0)$
14	Find the LCM of 6 and 8.	19	Change 312_{five} to base ten.
15	How many lines of folding symmetry has the figure below? 	20	Find the complement of 60° .

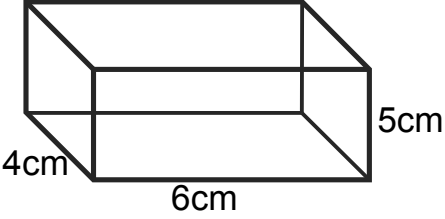
SECTION B

21 a.	<p>In class of 50 pupils, 35 like Maths(M) , 20 like English (E) and 5 like both Maths and English. Represent the above information on the venn diagram below.</p> <div style="text-align: right;">(3mks)</div> 										
b.	<p>How many pupils like only one subject?</p> <div style="text-align: right;">(2mks)</div>										
22 a.	<p>Mulamba scored the following marks in end of term on exams.</p> <table border="1" data-bbox="285 1058 976 1188"> <thead> <tr> <th>ENG</th> <th>MTC</th> <th>SST</th> <th>SCI</th> <th>RE</th> </tr> </thead> <tbody> <tr> <td>60</td> <td>75</td> <td>60</td> <td>80</td> <td>65</td> </tr> </tbody> </table> <p>What was his best done subjects?</p> <div style="text-align: right;">(1mk)</div>	ENG	MTC	SST	SCI	RE	60	75	60	80	65
ENG	MTC	SST	SCI	RE							
60	75	60	80	65							
b.	<p>Find his modal score.</p> <div style="text-align: right;">(2mks)</div>										
c.	<p>Calculate his average score.</p> <div style="text-align: right;">(2mks)</div>										

23	<p>Workout the following. (2 mks @)</p> $\begin{array}{r} 6242 \\ + 368 \\ \hline \end{array}$ $\begin{array}{r} 9862 \\ - 1223 \\ \hline \end{array}$
c.	<p>Nalwoga shared 36 pens equally among 4 pupils. How many pens did each pupil get?</p>
24	<p>Use a pair of compasses, a ruler and a pencil to construct an equilateral triangle of sides 6cm. (4mks)</p>
25	<p>Find the value of the unknown angles. (2mks@)</p> <p>a.</p> 

b.							
c.							
26	<p>Given that $P = 2$, $q = 4$ and $r = 6$, Find the value of; (2mks@)</p> <p>$P + q + r$</p>						
b.	$2r - p$						
	<div style="border-left: 3px double black; height: 50px; width: 1px; margin: 0 auto;"></div>						
c.	$r \div p$						
27	<p>Work out:</p> <table style="margin-left: auto; margin-right: auto;"> <thead> <tr> <th style="text-align: left;">Hours</th> <th style="text-align: left;">Min</th> </tr> </thead> <tbody> <tr> <td style="text-align: center;">6</td> <td style="text-align: center;">20</td> </tr> <tr> <td style="text-align: center;">-2</td> <td style="text-align: center;">50</td> </tr> </tbody> </table> <div style="text-align: center; margin-top: 10px;"> <div style="border: 1px solid black; width: 150px; height: 30px; display: inline-block;"></div> </div> <p style="text-align: right;">(2mks)</p>	Hours	Min	6	20	-2	50
Hours	Min						
6	20						
-2	50						
b.	<p>Change 6 years to months.</p> <p style="text-align: right;">(1mk)</p>						
c.	<p>Name the last day of the week.</p> <p style="text-align: right;">(1mk)</p>						

28	Expand 293 using exponents.	(2mks)
b.	What number was expanded to get; $(2 \times 1000) + (4 \times 100)$	(2mks)
c.	Find the sum of the value of 6 and 4 in the number 2684.	(2mks)
29	In a group of 45 people, $\frac{1}{9}$ of them are females.	
a)	Find the fraction of males.	(1mk)
b.	How many females are in that group?	(2mks)
c.	How many more males than females are in the group?	(2mks)

30	<p>Study the figure below and answer the questions that follow.</p>  <p>Find the number of;(1mk @)</p> <p>a) Vertices</p> <p>i)</p>												
ii)	Edges												
iii)	Faces												
b.	<p>Workout the volume of the figure above.</p> <p style="text-align: right;">(2mks)</p>												
31	<p>Complete the table below.</p> <table border="1" data-bbox="245 1251 1149 1419"> <tr> <td>Cows</td> <td>1</td> <td></td> <td></td> <td>4</td> <td></td> </tr> <tr> <td>No. of legs</td> <td>4</td> <td>12</td> <td>8</td> <td></td> <td>24</td> </tr> </table>	Cows	1			4		No. of legs	4	12	8		24
Cows	1			4									
No. of legs	4	12	8		24								
32	<p>Show 2602 on an abacus.</p> <p style="text-align: right;">(1mk)</p>												



KINGS WAY PRIMARY SCHOOL

P. 5 RECESS REVISION 2020 - (SET SIX)

RELIGIOUS EDUCATION

DURATION : 2 HOURS 15 MINUTES

Name _____ *stream* _____

Instructions

- Answer either Christianity or Islam questions but not both in a number.
- No marks will be awarded to a pupil who attempts both questions in a number.

SECTION A (40 MKS)

1. **Either:** Name the son of Adam who was killed his brother.

Or: Name the son of Adam who killed his brother.

2. **Either:** Write down the Sacrament that cleanses ones original sins.

Or: Write down the pillar of Islam that is also a pillar of faith.

3. **Either:** Why did God create Adam?

Or: Why did God create Adam?

4. **Either:** Mention any one woman in the Bible who greatly showed her faith in God.

Or: Name the woman who died for her faith in Islam.

5. **Either:** Who was the first wife of Abraham?

Or: Who was the first wife of Prophet Ibrahim?

6. **Either:** What did God use to create Eve?

Or: What did Allah use to create Hawa?

7. **Either:** Name the mother of Jacob.

Or: Name the mother of Ismail.

8. **Either:** How can a child show love the elders?

Or: How can a child show love to the elders?

9. **Either:** Give any one common examples of a sin that pupils commit at school

Or: Give any one common example of a sin that pupils commit at school.

10. **Either:** Why was Noah ordered to build the Ark by God?

Or: How many people survived the floods during Nuhu's time?

11. **Either:** Name the first book in the New Testament of the Bible.

Or: Name the Holy book that was given to Prophet Isa.

12. **Either:** In which City was Jesus Christ raised?

Or: In which city was Prophet Muhammed buried?

13. **Either:** How did Daniel show his faith in God?

Or: Name the prophet in Islam who is remembered for perseverance.

14. **Either:** Give any one symbol of a Christian family.

Or: Give any one symbol of a Muslim family.

15. **Either:** What was the work of Joseph, the earthly father of Jesus Christ?

Or: What was the work of Prophet Muhammed before He became a prophet of Allah?

16. **Both:** Mention any one similarity between Christianity and Islam.

17. **Either:** How many days did God take to create the world?

Or: How many days did Allah take to create the world?

18. **Either:** Name any one miracle that Jesus made while on earth.

Or: Mention any one miracle that was performed by Prophet Muhammed.

19. **Either:** What should a Christian do after sinning?

Or: What should a Muslim do after sinning?

20. **Either:** How can a Christian child help a hungry friend?

Or: How can a Muslim child help a hungry friend?

21. **Both:** Name any one bird God/Allah created to provide eggs.

22. **Either:** What title is given to the head of catholic in the world?

Or: What title is given to the head of Muslims in Uganda?

23. **Either:** Give any one way a Christian child can strengthen his/her faith in God.

Or: Give any one way a Christian child can strengthen his/her faith in God.

24. **Either:** In which country was Moses born?

Or: In which country was Prophet Musa born?

25. **Either:** What was the first name of Abraham?

Or: Name the first wife of Prophet Mohammed?

26. **Either:** What does the word Genesis in the Bible mean?

Or: What does the word Islam mean?

27. **Either:** Mention one way Abraham showed faith in God.

Or: Mention any one way Ibrahim showed faith in God.

28. **Either:** On which day does Lent begin?

Or: What name is given to the celebration to end fasting in Islam?

29. **Either:** State any one result of sin.

Or: State any one result of sin.

30. **Either:** Which sacrament in the Bible unites a man and a woman as a husband and a wife?

Or: Which pillar of Islam initiates one into becoming a Muslim?

31. **Either:** What general name is given to what God gave to Moses on Mt. Sinai

Or: What general name is given to the Islamic laws?

32. **Either:** Why did Joseph and Mary take baby Jesus to Egypt?

Or: Why did Prophet Muhammed leave mecca for Medina?

33. **Either:** Who did Jesus send to help the disciples after He returned to heaven?

Or: Who was the first Caliph in Islam?

34. **Either:** Name any one gospel book in the Bible.

Or: Which Prophet received the book of Tauret in Islam?

35. **Either:** Which creature tempted Adam and Eve to eat the forbidden fruit?

Or: Which creature tempted Adam and Hawa to eat the forbidden fruit?

36. **Either:** State one duty of the Reverend in the church.

37. **Either:** Why do Christians read the Bible?

Or: Why do Muslims read the Qur'an?

38. **Either:** What is a church?

Or: What is a mosque?

39. **Either:** What punishment will God give to the sinners?

Or: What punishment will Allah give the sinners?

40. **Either:** Give one way how a Bible is different from other books.

Or: Give one way how a Qu'ran/Koran is different from other books.

Section B

41a) **Either:** Name the two part of the Bible.

i) _____

ii) _____

b) Why is the Bible a very important to Christians?

c) What is the last book in the Bible?

Or: Why is the Qu'ran important to Muslims?

b) Mention any three holy books in Islam.

i) _____

ii) _____

iii) _____

42a) Either: a) What is prayer?

b) Give any one reason why people pray to God.

c) Name two types of prayer you know.

i) _____

ii) _____

Or: What is prayer?

b) Give any two reasons why people pray to Allah.

i) _____

ii) _____

c) Name the daily prayer Muslims perform first in the morning.

43. Either a) How important were apostles to Jesus Christ?

b. Mention any three apostles of Jesus Christ.

i) _____

ii) _____

iii) _____

Or: How important were the Caliphs in Islam?

b) Mention any three Caliphs in Islam.

i) _____

ii) _____

iii) _____

44 Either: Name the books in the Bible that talk about the following;

i) The story of creation

ii) The story of going out of Egypt.

b) Mention any two books of New Testament in the Bible that talk about the life of Jesus Christ.

i) _____

ii) _____

Or: Name the Holy Books received by the following Prophets in Islam

i) Prophet Musa _____

ii) Prophet Dauda _____

iii) Prophet Isa _____

b) Name the Prophet in Islam who built the Kaabah.

45. Either a) Mention any three important events that took place on the Holy week.

i) _____

ii) _____

iii) _____

b) Why was Adam and Eve chased from the garden of Eden by God?

Or: Mention any four ways in which prophet Muhammad suffered when spreading Allah's message.

i) _____

ii) _____

iii) _____

46a) Either: Who baptized Jesus Christ?

b) On which river was Jesus baptized?

c) Apart from baptism, name any other two sacraments in the Bible.

i) _____

ii) _____

Or: Name any three pillars of Islam.

i) _____

ii) _____

iii) _____

b. Which pillar of Islam makes Muslims get titles after performing it?

47. Either: a) Name any three groups of people who need help in our community.

i) _____

ii) _____

iii) _____

b. Why should a good Christian help people in the community?

Or: Name any three groups of people who need help in our community.

i) _____

ii) _____

ii) _____

b. Why should a good Muslims help people in the community?

48. Either a) Who was the youngest Christian Martyr.

b. State any three lessons we learn from the actions of the Uganda Martyrs.

i) _____

ii) _____

iii) _____

Or: Name any one of the Muslims Martyr.

b) State any three lessons we learn the Muslims Martyrs in Uganda.

i) _____

ii) _____

iii) _____

49. Either: a) What name is given to the day Jesus entered Jerusalem like a king?

b) What does "bread and wine" represent in the church today?

i) bread _____

ii) wine _____

c) Mention one thing that happened to Jesus on Holy Thursday.

Or: Why did Prophet Mohammed run from Mecca to Medina?

b. Give three reasons why the Pagans of Mecca hated Prophet Mohammed.

i) _____

ii) _____

iii) _____

50a). Either: Why did Jesus wash the Apostles feet?

b. Give three things that Jesus did to serve people.

i) _____

ii) _____

iii) _____

Or: a) Mention two things that Prophet Mohammed did to serve people.

i) _____

ii) _____

b) State any two qualities of a good Muslim leader.

i) _____

ii) _____

51. Both: a) Mention any two religious organization operating in Uganda.

i) _____

ii) _____

b) Mention two ways how the above organization have promoted development in Uganda.

i) _____

ii) _____

52a) Either a) State any four similarities between Christianity and Islam.

i) _____

ii) _____

iii) _____

iv) _____

Or: a) State any four differences between Christians and Muslims.

i) _____

ii) _____

iii) _____

iv) _____

53. **Either:** a) Mention any four promises that God gave to Jacob.

i) _____

ii) _____

iii) _____

iv) _____

Or: Mention any four promises that Allah gave to Yaqu'ub

i) _____

ii) _____

iii) _____

iv) _____

54. **Either:** Mention any four things that faith enables Christians to do.

- i) _____
- ii) _____
- iii) _____
- iv) _____

Or: Mention any four things that faith enables Muslims to do.

- i) _____
- ii) _____
- iii) _____
- iv) _____

55. **Either: Match list A with B correctly.**

- | | |
|---------------|------------------------------------|
| Holy Thursday | Jesus rose from the dead. |
| Good Friday | Jesus entered Jerusalem as a King. |
| Easter Sunday | Jesus was arrested. |
| Palm Sunday | Jesus was crucified |
- i) Holy Thursday _____.
 - ii) Good Friday _____.
 - iii) Easter Sunday _____.
 - iv) Palm Sunday _____.

Or: Match list A with B correctly.

- | | |
|---------------|------------------------------------|
| List A | List B |
| Abdu Mutwalib | First wife of Prophet Muhammed |
| Halima | Uncle of Prophet Muhammed. |
| Khadija | Grandfather of Prophet Muhammed |
| Abu-Talib | Foster Mother of Prophet Muhammed. |

- | | |
|---------------|---------------|
| List A | List B |
| Abdu Mutwalib | _____ |
| Halima | _____ |
| Khadija | _____ |
| Abu-Talib | _____ |

END



KINGS WAY PRIMARY SCHOOL

P. 5 RECESS REVISION 2020 - (SET SIX)

INTEGRATED SCIENCE.

DURATION : 2 HOURS 15 MINUTES

Name

Stream.....

Date.....

Read the following instructions carefully

1. This paper is made up of two Sections:
A and B.
2. Section **A** has 40 questions (40 marks)
3. Section B has 15 questions (60 marks)
4. Attempt all questions. Answers to both sections must be written in the spaces provided.
5. All answers must be written in blue or black ballpoint pen or ink but not in pencil. All work done in pencil, except diagrams, will **NOT** be marked.
6. Crossing out of answers will lead to loss of marks.
7. Any handwriting that cannot be easily read may lead to loss of marks.

FOR EXAMINERS USE ONLY		
QN. NO.	MARK	SIGN
1-10		
11-20		
21-30		
31 – 40		
41 – 50		
51		
52		
53		
54		
55		
TOTAL		

SECTION A (40 MARKS)

1. Why are petals of some flowers brightly coloured?

2. State any one condition of weather.

3. Mention any one system of poultry keeping in Uganda.

4. Why do plants with weak stems climb others?

5. Name the body organ that filters blood.

6. How is humus formed?

7. Why should we drain stagnant water around our homes?

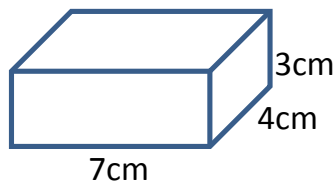
8. What name is given to the special food fed by the queen bee?

9. Give one example of a milk product.

10. Name the darkest part of a shadow.

11. How is chlorophyll important during photosynthesis process?

12. Calculate the volume of the cuboid below.



13. State the property of air that enables a nurse to give an injection to a patient.

14. Apart from nectar and pollen, name any other material bees get from the environment.

15. Mention one example of a fuel used at home.

Use the diagram below to answer questions , 16 and 17.



16. How are the roots marked K useful to a plant?

17. Give any one example of a plant with such roots.

18. How do mushrooms reproduce?

19. Give any one example of a non-flowering plant.

20. How does mulching control soil erosion?

21. How is germination similar to rusting?

22. Give any one material that can be used as litter in a poultry house.

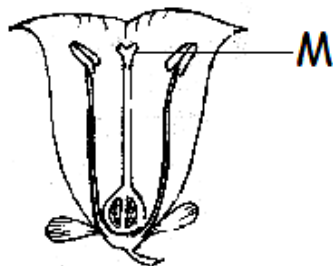
23. State any one method of planting.

24. State any one common accident at school.

25. Give any one way food gets contaminated?

26. How is a stretcher useful when giving First Aid?

27. **Name the part of a flower shown below.**



28. Why do layers sometimes lay eggs with soft egg shells?

29. In the space provided below, draw a garden tool used for collecting rubbish.



30. Give any one function of the tongue during digestion of food.

31. State any one way of controlling diseases spread through 4F's germ path.

32. Give any one PIASCY message.

33. Why does paraffin float on water when the two are mixed?

34. State any one characteristic of non-living things.

35. Why are metal items usually painted?

36. How is too much wind dangerous to farmers?

37. Give one example of an aquatic animal.

38. How can farmers improve their local breeds of chicken?

39. State the element of PHC promoted when we brush our teeth regularly.

40. How can a P.5 pupil prevent the spread of HIV/AIDS?

SECTION B

41a) What is dehydration"?

b) State any one cause of dehydration.

c) Why is a dehydrated person given ORS?

d) Name any one mineral salt lost due to excessive diarrhoea.

42. a. What name is given to each of the following in bee keeping?

i) sterile female bee _____

ii) fertile female bee _____

b) Name the type of bee that hatches from unfertilized eggs.

43a) How are vectors different from germs?

b. State any one way germs are spread from one person to another.

c. Mention any two examples of disease vectors.

i) _____

ii) _____

44.a) Give any two vaccines administered to infants.

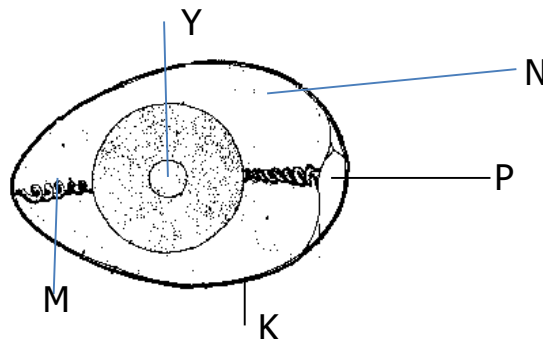
i) _____

ii) _____

b) Name the childhood killer immunisable disease that makes children lame.

c) Give any one reason why parents take their children for immunization.

45. **The diagram below is of an egg. Study and use it to answer the questions that follow.**



a) Name the parts marked M and N.

i) M _____

ii) N _____

b) Which part of an egg develops into a chick?

c) What food value do we get from eating eggs?

46a. What is air?

b) Name the gas with the highest percentage of air in the atmosphere.

c) Mention the component of air used to preserve soft drinks

d) State any one property of air?

47a. What is germination?

b) State the type of germination dicotyledonous seeds undergo.

c) How is water or moisture useful during seed germination?

d) Apart from moisture, give any one other condition necessary for germination to take place.

48.a) What is oral health?


b) Mention any two items used in promoting oral health.

i) _____

ii) _____

c) How is toothpaste useful in promoting oral health?

49. **The diagram below shows an experiment which was carried out by a P.5 pupil.**



a) Name the method above to find the volume of the stone.

b) What is the volume of the stone?

- c) Name the containers marked X and Y?
 i) X _____
 ii) Y _____

50.a) What are vices in poultry keeping?

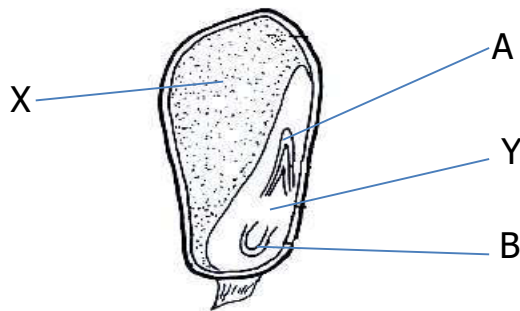
b) State any two examples of poultry vices.

i) _____

ii) _____

c) How can farmers control poultry vices on their farms?

51a) **The diagram below is of monocotyledons seed. Use it to answer the questions that follow.**



a) Name the parts marked A and Y.

A _____

Y _____

b) How is part labelled X useful to the above grain?

c) Why is the above seed called a monocotyledonous seed?

52a) Give the difference between a First Aid box and a First Aid kit

b) Name any two items found in a First Aid box.

i) _____

ii) _____

c) State the major reason why we give First Aid to casualties.

53a) Give any two exotic breeds of rabbits kept in Uganda.

i) _____

ii) _____

b) Name any one disease that attacks both rabbits and poultry?

c) What name is given to the manufactured feeds for rabbits?

54.a) What is mulching?

b) State any one advantage of mulching.

c) Write down two materials used as mulches in the garden

i) _____

ii) _____

55. Match the insects with their larva stages.

A

Butterfly

Bees

Mosquito

Housefly

B

maggot

wiggler

caterpillar

grub

i) Butterfly _____

ii) Mosquito _____

iii) Bees _____

iv) Housefly _____

End

I WISH YOU SUCCESS



KINGS WAY PRIMARY SCHOOL

P. 5 RECESS REVISION 2020 - (SET SIX)

SOCIAL STUDIES.

DURATION: 2 HOURS 15 MINUTES

Name

Stream.....

Read the following instructions carefully

1. This paper has two sections: **A** and **B**.
2. Answer **all** questions. **All** answers to both sections **A** and **B** must be written in the spaces provided.
3. **All** answers must be written using a blue or black ball-point pen or fountain pen.
4. Unnecessary changes of work may lead to loss of marks.
5. Any handwriting that cannot easily be read may lead to loss of marks.
6. Do **not** fill anything in the boxes indicated "**For Examiners' Use Only**" and those inside the question paper.

FOR EXAMINERS' USE ONLY		
QN. NO.	MARK	EXRS' NO.
1-10		
11-20		
21-30		
31 -40		
41-43		
44-46		
47-49		
50-52		
53-55		
TOTAL		

SECTION A

1. In which part of Africa does Uganda belong?

2. State any one duty of the local council committee.

3. Mention one way of keeping security at home.

4. What causes latitudes in highland areas?

5. State any one danger of a volcanic eruption in an area.

6. Name the lake shared by all the three countries in East Africa.

7. Name the type of transport commonly used by people in Kalangala district.

8. How is a mid-wife important in the community?

9. Give one effect of the rotation of the earth.

10. What does the red colour on the Traffic light mean to Motorists?

11. Why is the peak of Mt. Rwenzori snowcapped?

12. State any one economic importance of waterfalls.

13. Which mountain forms a natural boundary between Uganda and Rwanda?

14. How does deforestation lead to soil erosion?

15. What is population density?

16. Name the inland Port found on Lake Albert.

17. Mention the largest game park in Uganda.

18. Name the force that was responsible for faulting process.

19. State any one duty of the National Forestry Authority (NFA) in Uganda.

20. Why does river Nile carry a constant volume of water into the sea?

21. Name the main seaport of Tanzania that handles.

22. State any one way of locating places on a map.

23. What is distributary of a river?

24. Apart from Lake Victoria, name any one lake in Uganda crossed by the Equator.

25. Why should a good map have a key?

26. Name the water body where R. Nile pours its water.

27. State any one cause of traffic jam.

28. Mention one disadvantage that Uganda has due to its location.

29. Why is dictatorship dangerous in a kingdom?

30. Name the river that joins Lake George to Lake Victoria.

31. State any one problem faced by people who live on mountain slopes.

32. What is planted vegetation?

33. Mention any one social use of forest to people who live near them.

34. Why is Uganda called a land locked country?

35. How does grass help to control soil erosion.

For questions 36-40, answer Christianity or Islam but not Both in the same questions.

36. Either: Mention any one thing that can test Christian faith.

Or: Mention any one thing that can test Muslim faith today.

37. Either: How did King Solomon judge the case between the two women?

Or: How did Sulaiman judge the case between the two women?

38. Either: State any one way in which the Bible is different from other books.

Or: Mention any one way in which the Qur'an is different from other books.

39. Either: State any one Christian teaching that promotes democracy.

Or: State any one Muslim teaching that promotes democracy?

40. Either: Mention any one reason why Christians humble themselves during Paper?

Or: How do Muslims prepare for prayers?

SECTION B

41. a) What is a landlocked country?

b. Mention two problems faced by landlocked countries.

i) _____

ii) _____

c. Name any one neighboring country to Uganda that is landlocked.

42. a What is climate.

b. Mention any two elements of weather that dry people's clothes.

i) _____

ii) _____

c. How is the dressing of the people of Kabale different from those of those of Karamajo

43a. What is the difference between mountain Rwenzori and mountain Elgon in terms of formation?

b. Give two examples of volcanic mountains in Uganda.

i) _____

ii) _____

c. Name the type of coffee that is grown on the slopes of volcanic mountains in Uganda.

44. a) Give one rift valley lake in Uganda.

b. Why are most rift valley lakes salty?

c. State any two economic importance of lakes to Uganda.

i) _____

ii) _____

45.a) Name the type of rainfall received on flat areas.

b. Why is a rain gauge placed 30cm above the ground.

c. Mention any one danger of heavy rain to a farmer.

46.a) What is plantation farming?

b. Give two reasons why plantation farming is not commonly carried out in Uganda.

i) _____

ii) _____

c. Name any one plantation crop grown in Lugazi.

47a. What is Equinox?

b. Name the two imaginary lines that are marked 0° .

i) _____

ii) _____

c. Mention any one neighboring country of Uganda that is crossed by latitude 0° .

48a) Name the game park in Uganda that is well known for Mountain gorillas.

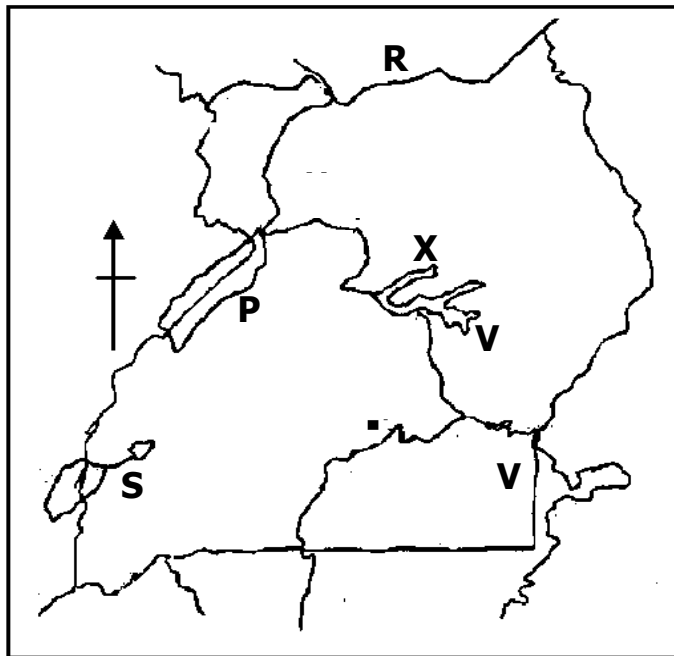
b. Give two ways Uganda benefits from game parks.

i) _____

ii) _____

c. Why are most game parks found in Savannah grassland?

49. Study the sketch map of Uganda below and use it to answer questions that follow.



a. Name the lakes marked with letters.

X _____

V _____

b. Which waterway is marked S on the map?

c. State the political importance of lake marked P.

50a). Name the type of climate that is experienced in North Eastern part of Uganda.

b. Mention any two factors that influence the climate of Uganda.

i) _____

ii) _____

c. How does climate affect people's way of dressing?

For questions 51-55 answer either Christianity or Islam But not Both in the same question.

51. Either: Mention four ways St. Stephen demonstrate his faith in God.

- i) _____
- ii) _____
- iii) _____
- iv) _____

Or: Mention four ways Sumaya demonstrated her faith in Allah.

- i) _____
- ii) _____
- iii) _____
- iv) _____

52. **Either:** State any four ways how faith is expressed in authority.

- i) _____
- ii) _____
- iii) _____
- iv) _____

Or: State any four ways how faith is expressed in authority in Islam.

- i) _____
- ii) _____
- iii) _____
- iv) _____

53a) **Either:** Match correctly the holidays in Christianity.

- | | |
|------------------|---|
| 1. Pentecost day | Jesus entered Jerusalem on a donkey. |
| 2. Palm Sunday | Jesus ate the last supper with His apostles. |
| 3. Holy Thursday | It marks the beginning of the Lent period. |
| 4. Ash Wednesday | The Apostles of Jesus received the Holy Spirit. |

- 1. Pentecost day _____
- 2. Palm Sunday _____

3. Holy Thursday _____

4. Ash Wednesday _____

Or: Match the words to sentences correctly.

i) Ramadhan Marks the day Prophet Ibrahim was going to sacrifice his son Ismail.

ii) Dhul Hijja The month of fasting in Islam.

iii) Idd-el Fitri Marks the end of fasting.

iv) Idd-el Adhuha The month when Muslims perform holy pilgrimage.

i) Ramadhan _____

ii) Dhul Hijja _____

iii) Idd-el Fitri _____

iv) Idd-el Adhuha _____

54. Either: a) Mention two types of values (Norms) that Christians need today.

i) _____

ii) _____

b) Mention any two family values in Christianity.

i) _____

ii) _____

Or: Mention two types of values (Norms) that Muslims need today.

i) _____

ii) _____

b. Mention any two family values in Islam.

i) _____

ii) _____

55. **Either:**

a) Mention any two similar practices among Christians and Muslims.

i) _____

ii) _____

b. Give any two similar beliefs among Christians and Muslims.

i) _____

ii) _____

Or: Mention any two similar practices among Christians and Muslims.

i) _____

ii) _____

b. Give any two similar beliefs among Christians and Muslims.

i) _____

ii) _____

END