



KINGS WAY PRIMARY SCHOOL

P. 7 RECESS REVISION 2020-(SET SIX)

ENGLISH

DURATION : 2 HOURS 15 MINUTES

NameStream

Read the following instructions carefully

1. This paper is made up of two Sections: A and B.
2. Section A has 50 questions (50 marks)
3. Section B has 5 questions (50 marks)
4. Attempt all questions. Answers to both sections must be written in the spaces provided.
5. All answers must be written in blue ink or with blue ballpoint pens. Crossing out of answers will lead to loss of marks.
6. Any handwriting that cannot be easily read will lead to loss of marks.



FOR EXAMINERS USE ONLY		
QN. NO.	MARK	
1-10		
11-20		
21-30		
31 – 40		
41 – 50		
51		
52		
53		
54		
55		
TOTAL		

SECTION A
Sub-Section 1

For questions 1-5, fill in the blank space with the most suitable word to complete the sentences.

1. _____ article that appeared on the front page of the New Vision newspaper caught the attention of very many readers.
2. We had hardly finished the work _____ the mad man entered our class and rubbed it.
3. I don't know what Freedom City _____ like these days.
4. Tiger is to tigress as waiter is to _____.
5. Okello is the boy with _____ I went to the police to report the case.

For questions 6-15, use the correct form of the word in brackets to complete the sentences.

6. It is risky to live in _____ areas. (mountain)
7. How many _____ does your kitchen have? (chimney)
8. Peter has been _____ the bicycle since morning. (ride)
9. Since Mutoni got involved in an accident, she is very _____. (help)
10. My sister would rather eat pork than _____ beef. (eating)
11. The boy did his work _____ and made several mistakes. (hurry)
12. Kings Way Primary School took the _____ position in the spelling bee competition. (four)
13. Carpenters usually _____ their furniture to make it shiny. (varnish)
14. When the head teacher arrived, we had _____ the National Anthem. (sing)
15. That girl is the _____ hand writer in our class. (bad)

For questions 16-17, arrange the words in alphabetical order.

16. gym, sauna, bar, hotel,

17. waiting, waiter, wait, waitress

For questions 18-20, re-arrange the words to form correct sentences.

18. knocked cyclist The down has a pedestrian careless.

19. your work father does Where?

20. an boy honest What is Solomon!

For questions 21-22, rewrite the sentence giving one word for the underlined words.

21. Did you eat the first meal of the day before you came to school?

22. All the boxes we bought were shaped liked a rectangle.

For questions 23-24, write the full form of the given abbreviations.

23. c/o _____

24. won't _____

For questions 25 and 26, use each of the given words in a sentence to show that you know the difference in their meaning.

25. die _____

26. dye _____

For questions 27-28, re-write the sentences giving the opposite of the underlined word.

27. There is the ram that ate our crops.

28. I was always encouraged by my friend.

For questions 27-28, give the plural form of the word.

29. passer-by _____

30. toothbrush _____

Sub-Section II

For questions 31-50, rewrite the sentences as instructed in brackets.

31. That is the boy. I told you about him yesterday.
(Re-write one sentence using: -----whom-----)

32. Immediately I sat at the table, the waiter took my order.
(Re-write the sentence beginning: No sooner-----)

33. We had a very good meal today. (Rewrite the sentence beginning: What -----!)

34. Stealing other people's property is bad.
(Re-write the sentence beginning: It-----)

35. We usually come to school early. We want to attend the first lesson.
(Join the two sentences using -----so that-----)

36. The king was present at the function. The queen was also present at the function.
(Join as one sentence using.....and so.....)

37. Lucy reached the bus park very late.
(Re-write the sentence using ----- arrived -----)

-
-
38. Who has stolen my ruler? (Re-write the sentence beginning: By whom-----?)
-
39. Kengoro did not graze the cows. Lutaro did not graze the cows.
(Join the two sentences using: Neither-----nor.....-)
-
40. You should not overload animals onto a truck because they may hurt one another.
(Re-write the sentence using: -----ought-----)
-
41. It was not necessary for the baker to put a lot of sugar in the dough.
(Re-write the sentences using: -----needn't-----)
-
42. It may shine brightly in the afternoon.
(Re-write the sentence using -----likely-----)
-
43. I shall visit my uncle during the holidays. I shall visit my aunt during the holidays.
(Re-write the sentence using: -----either-----or-----)
-
44. There isn't any child in the main hall.
(Re-write sentence using -----some -----)
-
45. Tom went to the bank. He wanted to withdraw some money.
(Join the sentence beginning: In order-----)
-
46. "We are doing our work now," said the children.
(Re-write one sentence beginning: The children said that-----)
-
47. I am not a dog. It cannot bark. (Join the two sentences beginning: If-----)
-
48. If Kate goes to the village, she will learn how to peel matooke.
(Re-write as one sentence beginning: Unless-----)
-

49. Mr. Juuko is a musician. Mr. Juuko is a teacher.
(Join the sentences beginning: Not only -----)

50. Disan likes swimming more than singing.
(Re-write the sentence using: -----interested-----)

SECTION B

51. *Read the story below carefully and in full sentences answer the questions that follow.*

DINNER AT FANG FANG HOTEL

During the PLE break which we had recently, I paid a visit to my aunt, Janet, who stays in Kampala City. She took me to many interesting places namely; the zoo in Entebbe, Wander World in Kansanga, Namboole Stadium and Fang Fang Hotel.

Hotels, being one of the primary six topics we had just covered, made me have a keen interest in the details of Fang Fang Hotel. The hotel is located in the city centre near the Parliamentary Buildings.

We had hardly arrived at the hotel when a smartly dressed waitress approached us and warmly welcomed us and thereafter offered us seats. The menu was right at the table where we sat. I ordered chips, liver and a bottle of champagne and my aunt also placed in her order. The waitress quickly took our orders and requested us to wait for a few minutes for our orders to be delivered.

As we waited for our food, my eyes could not stop looking at the glamorous designs in the hotel. There were countless people in each and every corner of the hotel. The Indians, Chinese, Somalis and others were all were all enjoying meals at this hotel. Shortly our orders were brought and we started feasting. The food was very **tasty**. When we finished eating and drinking, we relaxed a bit near the swimming pool and later went to the sauna. It was indeed a wonderful day.

Questions:

1. What is the story about? _____

2. When did the writer visit the mentioned hotel?

3. With whom did the writer visit the hotel?

4. How many places did the writer visit according to the passage?

5. In which class is the writer?

6. How were the writer and his aunt welcomed at the hotel?

-
-
7. Of the places visited, where do you think the writer might have seen a lion?
-
-
8. According to the passage, why do you think the writer enjoyed the visit?
-
-
9. Give another word with the same meaning as **tasty** as used in the passage.
-
-
10. Suggest the title of the story.
-

52. *The travel chart below is for Global Bus Company, P.O Box 241, Kampala. Study it carefully and answer the questions that follow in full sentences.*

Bus No.	Destination	Day	Departure	Arrival
001	Rukungiri	Daily	7:00 a.m.	1:30 p.m.
002	Gulu	Monday	5:00 a.m.	noon
003	Hoima	Tuesday	9:00 a.m.	1:00 p.m.
004	Kasese	Daily	8:00 a.m.	2:00 p.m.
005	Nebbi	Thursday	10:00 a.m.	5:00 p.m.
006	Juba	Wednesday	3:00 a.m.	Next day
007	Nairobi	Friday	midnight	Next two days
008	Soroti	Wednesday	6:00 a.m.	1:00 p.m.
009	Mbale	Daily	7:30 a.m.	noon
010	Mombasa	Thursday	4:00 a.m.	Next two days

Questions:

1. For which bus company is the travel chart above?
-
-
2. How many buses does this company have according to the travel chart?
-
-
3. Where is this bus company located?
-
-
4. How often does a Global Bus travel to Rukungiri?
-
-
5. On which day does bus number 006 travel to Juba?
-
-
6. In how many districts of Uganda does Global Company operate?
-

7. At what time does bus number 008 leave for Soroti?

8. Why do you think the bus going to Nairobi spends two days on the way?

9. How long does bus number 003 take to reach its destination?

10. Which bus leaves for its destination on Monday?

53. **The conversation below took place between George and Solomon who were classmates. Read it carefully and answer the questions that follow in full sentences.**

George: Good afternoon, Solomon.

Solomon: Good afternoon, George.

George: I have not seen you since morning. Where have you been?

Solomon: My father sent me to the bank this morning to deposit my school fees.

George: Do you want to tell me that you went alone to the bank and deposited your school fees?

Solomon: Yes, why not? Do you think it's a **complex** thing to do?

George: Yes, I think so. In fact I have never gone to the bank. I don't even know what I can do in case my father sends me there to carry out any transaction. May be you will help me.

Solomon: It's okay, George. First you need a bank pay-in slip to fill in.

The bank pay-in slip is usually provided by the school.

George: Then what next?

Solomon: After filling in the bank pay-in slip with the right amount of money you in its correct denominations, you give both the money and the slip to the teller to enter the information in the computer. Before entering the money value in the computer, the teller first checks the money to ensure that it's **genuine**.

George: Thank you very much Solomon, for helping me to know the banking procedure.

Solomon: You are welcome, my friend.

Questions:

1. How many people are taking part in the conversation?

2. Why was Solomon sent to the bank?

3. At what time of the day did the conversation take place?

4. Why do you think Solomon's father let him to go to the bank alone?

5. Who has never been to the bank according to the dialogue?

6. What is the relationship between George and Solomon?

7. Why does the teller first check the money before entering its value in computer?

8. According to the dialogue, which document is used to pay school fees in the bank?

9. How many times did George speak in the conversation?

10. Give another word to mean the same as **complex** as used in the conversation.

54. ***The sentences below are jumbled. Re-arrange them to make a good story about "How to Bake Tasty Buns"***

1. *Buy the following ingredients from the shop.*
2. *After a short time, the buns will have a golden colour.*
3. *Baking flour, eggs, butter, sugar and yeast.*
4. *Knead the dough thoroughly and shape it into fairly large balls.*
5. *After buying them, measure the right amounts of the ingredients needed and mix them to form the dough.*
6. *The heat from the oven should be carefully regulated so as not to affect the quality of the buns.*
7. *The tasty buns will now be ready and can be removed from the oven and served.*
8. *After shaping the dough into large balls, break the eggs but separate the egg white.*
9. *If you wish to bake tasty buns,*
10. *Dip the balls into the egg white and bake them in the oven.*

Correct order:

55. Use the words given below to fill in the blank spaces correctly.

*information, Dear, room, Headmistress, immediately, daughter,
police, sincerely, prefect, Matron*

Chebet Girls' Secondary School
P.O. Box 525,
Kapeng,

10th April, 2015

_____ Dr. Amaka Mazibu,

This is to inform you that your _____ Lunkuse Joyce went missing from School on 9th April. We got a report from the _____ in charge of the dormitory that she did not return to her _____ after night studies which end at 9:00 p.m.

The class _____ says that she left the classroom at about 8:15 p.m. and did not return for the lesson. We have informed the _____ and they are carrying out investigations.

If you have any _____ regarding her whereabouts, please call us and let us know. In case you don't have, we shall be glad if you come to school

_____.

We shall appreciate your cooperation on this matter.

Yours _____,
Mrs. Twinomwe Flavia
(_____)

END



KINGS WAY PRIMARY SCHOOL

P. 7 RECESS REVISION 2020-(SET SIX)

SOCIAL STUDIES & RELIGIOUS EDUCATION

DURATION: 2 HOURS 15 MINUTES


NameStream.....

Read the following instructions carefully

1. This paper has two sections:
A and B.
2. Answer **all** questions. **All** answers to both sections **A** and **B** must be written in the spaces provided.
3. **All** answers must be written using a blue or black ball-point pen or fountain pen.
4. Unnecessary changes of work may lead to loss of marks.
5. Any handwriting that cannot easily be read may lead to loss of marks.
6. Do **not** fill anything in the boxes indicated “**For Examiners’ Use Only**” and those inside the question paper.

FOR EXAMINERS’ USE ONLY		
QN. NO.	MARK	EXRS’ NO.
1-10		
11-20		
21-30		
31-40		
41-43		
44-46		
47-49		
50-52		
53-55		
TOTAL		

SECTION A: (40 MARKS)

1. Name the water body that promotes salt mining in Uganda.
.....
2. Why do most rivers in East Africa have their sources in highland areas?
.....
3. State one cause of thick vegetation around the shores of Lake Victoria?
.....
4. Name the highest mountain peak in East Africa.
.....
5. Which economic activity is represented by the symbol below?

.....
6. Why is I. K. Musaaazi considered a hero in Uganda?
.....
7. Name one type of tax the colonial government introduced in Buganda.
.....
8. Why do some rivers dry up during dry seasons?
.....
9. Why is the Prime Meridian also called Greenwich Meridian?
.....
10. Which Kabaka of Buganda received the first Arab trade to Buganda?
.....
11. Give one reason why monkeys are found in areas with thick forests?
.....
12. Why is a town called Bagamoyo remembered in the exploration history of East Africa?
.....
13. Identify the cheapest method of preserving fish in East Africa.
.....
14. State the effect caused by lack of employment among people.
.....
15. Give the reason why victoria is called an international lake?
.....
16. What type of tax is charged on locally manufactured goods in Uganda?
.....

17. State one duty of the Uganda Bureau of statistics (UBOS)
.....
18. How is culture important in a society?
.....
19. Why do most people prefer sending messages using SMS than letters?
.....
20. Identify one symbol of a clan.
.....
21. Give one reason why valley dams were constructed in Karamoja region?
.....
22. Why was German rule disliked by the people of Tanganyika?
.....
23. Name the nationalist who led Kenya to independence in 1963.
.....
24. State one way of managing waste in your school.
.....
25. Apart from Murchison falls, name any one waterfall on R. Nile in Uganda.
.....
26. Why should a school have rules and regulations?
.....
27. How do Kingdoms promote good relationship among people?
.....
28. State one way how fixing of boundaries affected the people of East Africa.
.....
29. Name the chiefdom which was once ruled by Mirambo in East Africa.
.....
30. Which tribe in Kenya was mostly affected by the white settlers on Kenya highlands?
.....
31. Why was Universal Primary Education started in Uganda?
.....
32. How do farmers in North Eastern part of Kenya help their crops to grow well?
.....
33. How is the practice of circumcision important to the males in our community?
.....
34. State one role of the Electoral commission during elections in Uganda.
.....

35. Which element of a good map determines its shape and size?
.....

For questions 36-40, answer either Christianity or Islam but not both alternatives in a number.

36. Either: Why did Jesus come on earth?
.....

Or: Why did Prophet Isa come on earth?
.....

37. Either: What is the first sacrament in Christianity?
.....

Or: What is the first pillar in Islam?
.....

38. Either: Which son of Abraham did God ask him to sacrifice?
.....

Or: Which son of Ibrahim did Allah tell him to sacrifice?
.....

39. Either: Who is the greatest prophet according to the Bible?
.....

Or: Who was the last prophet in Islam?
.....

40. Either: Identify one cause of divorce among Christian families today.
.....

Or: State one cause of divorce in Muslims families today.
.....

Section B

(Questions 41 to 55 carry four marks each.)

41. a) State any one effect of famine in the country.
.....

b) Apart from famine, name any two natural disasters that check population growth.

i)

- ii)
- c) Identify one way the government of Uganda can control rapid population growth in the country.
.....

42. a) Name the gazetted area where voting is carried out.
.....
- b) Give one reason why voting areas must be protected?
.....
- c) State any two ways in which elections violence can affect the community.
i)
ii)

43. **Match correctly list A with list B**

- A**
Raw material
Wattle
Pine
Pyrethrum
Cloves

- B**
Product
Spices
Tannin
papers
Insecticides.



- i) Wattle
- ii) Pine
- iii) Pyrethrum
- iv) Cloves

44. a) Which tribal group formed kingdoms in East Africa?
.....
- b) State any two kingdoms formed by the above tribal group mentioned in (a) above.
i)
ii)
- c) Give one reason why most pastoral tribes did not form kingdoms.
.....

45. a) Write UNRA in full.
.....
- b) Mention any two groups of people employed by the transport sector in Uganda.
i)

ii)

c) Why should a cyclist put on reflector jackets at night?
.....

46. a) What is trade?

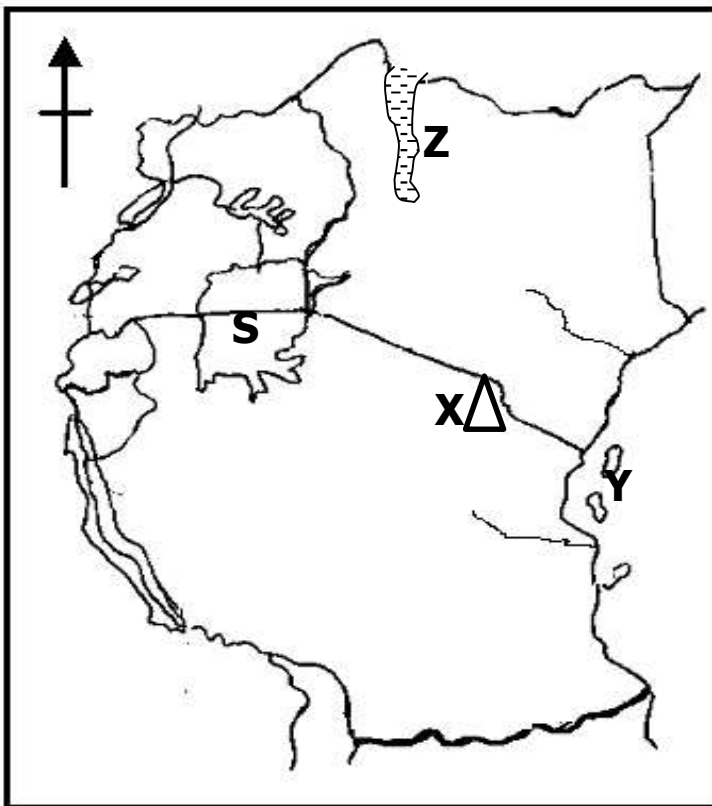
b) Why did traders of the long distance trade move in caravans?
.....

c) State down any two items of trade the Arabs brought to East Africa.

i)

ii)

47. **Study the map of East Africa and use it to answer questions that follow.**



a) Name the mineral discovered of the shores of Lake **Z** in Kenya.
.....

b) Mention the highland Bantu tribe that settled on the slopes of mountain market **X**.
.....

c) Why did H.M Stanley circumnavigate labelled **S**?
.....

d) Why did the Arabs stay at marked Y for a long time?
.....

48. a) State any one major discovery the early man made during Stone Age?
.....

b) State two ways the discovery named above improved the early man's life?

i)

ii)

c) Why did the early man live near lakes and rivers?
.....

49. a) Which game park is well known for crocodiles in Uganda?
.....

b) State the reason why tourism is called an invisible export?
.....

c) Write down any two problems facing game parks in East Africa.

i)

ii)

50. a) Which political party led the following countries to independence?

i) Tanganyika.....

ii) Uganda.....

b) Mention two ways how people in East Africa struggle for independence.

i)

ii)

For questions 51-55, answer either Christianity or Islam but not BOTH alternatives in a number.

51. Either: a) "This is my son with whom I am well pleased" Who said these words?
.....

b) On which occasion were the above words said?
.....

c) Name the river on which the words in "a" above were stated?
.....

d) How important is the occasion mentioned in "b" above to a Christian?

.....

Or: a) Why did the pagans of mecca want to kill prophet Muhammad?

.....

b) Name two holy cities in the Islamic faith.

i)

ii)

c) Mention one occasion celebrated by Muslims in Uganda today.

.....

52. Either: a) What is work?

.....

.....

b) State any two values of work to a Christian in our community.

i)

ii)

c) Mention any one type of work performed by Christians.

.....

Or: a) What is work?.....

.....

b) State any two reasons why a Muslims should work?

i)

ii)

b) Identify any one type of work in Islam.

.....

53. Either: a) What is the importance of Palm Sunday to a Christian?

.....

b) Mention one event that took place on a Good Friday.

.....

c) Name the place where Jesus' body was buried.

.....

d) Why did God send Jesus on earth?

.....

Or: a) Who was the mother of Prophet Isa in Islam?

.....

b) Apart from Isa mention any other two prophets in Islam

i)

ii)

c) What was the work of prophets in Islam?

.....

54. Either: a) Why is a Bible an important book in Christianity?

.....

b) Which book talks about the story of creation in the Bible?

.....

c) State two ways a Bible is used by Christians.

i)

ii)

Or: a) Why is a Qur'an an important book in Islam?

.....

b) To which prophet was the Qur'an revealed in Islam?

.....

c) State is the beginning Surah in the Qur'an?

.....

d) State one way a Muslim can use the Qur'an in his daily life.

.....

55. **For Both**

a) State the meaning of the word "suffering"

.....

.....

b) Mention any two causes of suffering among Gods people today.

i)

ii)

c) Write down any one form of suffering in our community today.

.....

END



KINGS WAY PRIMARY SCHOOL

P. 7 RECESS REVISION 2020 - (SET SIX)

Integrated Science

DURATION: 2 HOURS 15 MINUTES

Name Stream.....

Read the following instructions carefully.

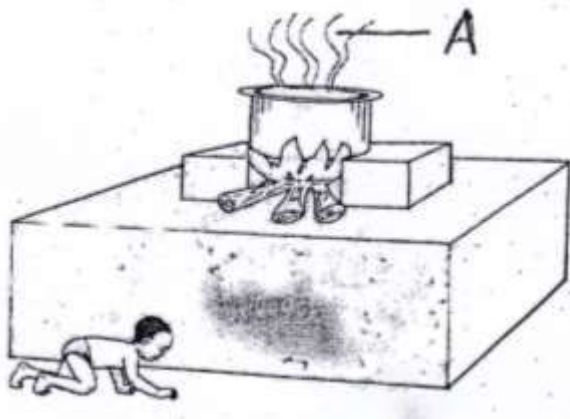
1. This paper is made up of two Sections:
A and B.
2. Section A has 40 questions (40 marks)
3. Section B has 15 questions (60 marks)
4. Attempt all questions. Answers to both sections must be written in the spaces provided.
5. All answers must be written in blue or black ballpoint pen or ink but not in pencil. All work done in pencil, except diagrams, will **NOT** be marked.
6. Crossing out of answers will lead to loss of marks.
7. Any handwriting that cannot be easily read may lead to loss of marks.

FOR EXAMINERS USE ONLY		
QN. NO.	MARK	SIGN
1-10		
11-20		
21-30		
31 - 40		
41 - 50		
41 - 43		
44 - 46		
47 - 49		
50 - 52		
53 - 55		
TOTAL		

SECTION A: (40 MARKS)

1. Name the sense organ for seeing in humans.
.....
2. At what stage is a cockroach wingless?
.....
3. How is a cistern tank important on a toilet?
.....
4. Why are children below the age of 5 years immunised?
.....
5. State one importance of timely weeding of crops.
.....
6. How is a queen bee similar to a worker bee in a hive?
.....
7. Write down one way of promoting family health in a home.
.....
8. In which system of poultry keeping are birds left to move freely?
.....
9. State any one sign of dehydration in babies.
.....
10. Why is blood clotting important to an accident victim?
.....


The diagram below shows food being cooked in a kitchen. Use it to answer questions that follow.



11. Name the accident caused by substance A.
.....
12. What is the advantage of cooking food from such a raised place?
.....

13. State one way you can care for farm animals.
.....
14. How best can a primary six girl avoid teenage pregnancy?
.....
15. Name one method of obtaining clean water from muddy water.
.....
16. Give one reason why people drain wetlands.
.....
17. At what stage do cereals develop prop roots?
.....
18. How is the function of nose-cilia similar to that of wax in the human ear?
.....

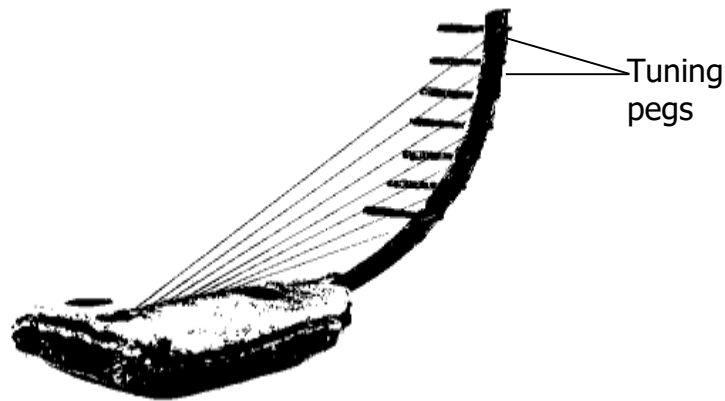
The diagram below shows a means of transport used in our community. Use it to answer question 19.



19. Which resource enables such a transport means to move?
.....
20. Name one milk product.
.....
21. Apart from boiling water, mention one other way of controlling cholera outbreak in your school.
.....
22. How does drought cause famine in an area?
.....
23. State one secondary sex characteristic common in adolescent males and females.
.....
24. Why is it bad to wear dirty clothes?
.....
25. What is main cause of fainting?
.....

26. Which rabbit disease causes itching and wounds on the ears?
.....
27. In which state of matter are molecules closely packed?
.....
28. Name any one blood cell without a nucleus.
.....
29. Mention one body part which needs to be inspected during a health parade.
.....
30. Give one way in which alcohol can be of use in a society.
.....
31. Name one insect vector that spreads germs through bites.
.....

The diagram below shows a bow harp. Use it to answer questions 32 and 33.



32. Of what importance are knobs to a bow harp?
.....
33. How do the strings produce sound?
.....
34. What is formed when light from the sun is blocked by an opaque object?
.....
35. Give one reason why doctors prescribe drugs for patients.
.....
36. Which type of seed dispersal occurs in seeds that are stored in pods?
.....
37. Name the type of change that forms a permanent new substance.
.....
38. Which force makes a stone thrown in air to fall on the ground?
.....

39. In which part of the female reproductive system does formation of a zygote occur?

.....

40. What enables a bat to fly at night without knocking obstacles?

.....

Section B

(Questions 41 to 55 carry 60 Marks.)

41. a) Name any two types of soil erosion.

i)

ii)

b) Which agent of erosion causes silting?

.....

c) How does bush burning lead to soil erosion?

.....

42. a) What is poultry?

.....

.....

b) State any two factors farmers before starting a farm.

i)

ii)

c) Write down one way of controlling ticks in domestic animals.

.....

43. a) Name any one region of a tooth.

.....

b) Which material is used for removing plaque and food particles between the teeth?

.....

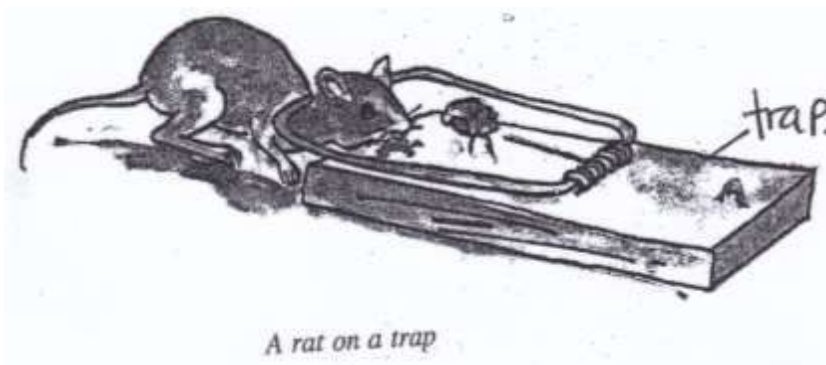
c) Apart from helping in speech, give one other use of teeth in human beings.

.....

d) Mention one way of caring for our teeth.

.....

44. **The diagram below shows a mammal pest trapped. Use it to answer questions that follow.**



a) To which group of mammals does the trapped pest belong?

.....

b) Mention one crop destroyed by the above pest.

.....

c) Besides trapping, state two other ways of controlling such a pest.

i)

ii)

45. a) Give two examples of living resources in the environment.

i)

ii)

b) Why is coal regarded as a non-renewable resource?

.....

c) State any one way of conserving non-renewable resources.

.....

46. a) Name two enemies of honey bees.

i)

- ii)
- b) Give one factor considered when choosing a site for a bee hive.
.....
- c) How can a bee keeper stock a hive?
.....

47. **The table below shows components of air, their percentages and uses in the environment. Complete it correctly**


Component	Percentage	Use in the env't
.....	78%	Preserving semen
Carbon dioxide	0.03 %
Rare gases	Used in electric bulbs
oxygen	21%

- 48. a) Give two products got from sheep.
 - i)
 - ii)
- b) How is sheep rearing beneficial to a crop farmer?
.....
- c) Name any one disease of sheep.
.....

- 49. a) Name the weather element measured using a thermometer.
.....
- b) What type of thermometer uses both mercury and coloured alcohol?
.....
- c) Give one importance of heat to people.

.....
d) State one effect of heat on matter.
.....

50. Use the diagram below about plant propagation to answer questions that follow.



a) Name the method of artificial vegetative propagation shown by letters A and B.

i) A.....

ii) B.....

b) In which two ways are plants important to man?

i)

ii)

51. a) Mention one poisonous chemical added into the human body through smoking.
.....

b) Why do some people smoke cigarettes?
.....

c) Identify any one type of smoking.
.....

d) What is danger of smoking cigarette to a pregnant woman?

.....

52. In the table below, list A shows first aid materials and list B shows their uses in a wrong order.

List A	List B
Safety pins	Holding a fractured arm motionless.
Splints	Tying splints around a fracture arm.
Armsling	Pinning bandages.
Bandage	Holding broken bones motionless.

Select from the table the correct uses of the given first aid materials and write in the space provided below.

- a) Safety pin:.....
- b) Splints:.....
- c) Armsling:.....
- d) Bandage:.....

53. a) State any two similarities between fish and amphibians.

- i)
- ii)

b) Which fin on a fish works like a steering wheel of a school bus?

.....

c) State one way fish and amphibians control the malaria outbreaks in areas near lakes and rivers.

.....


54. a) Mention any two sexually transmitted diseases in humans.

- i)
- ii)

b) State any one family planning method that also controls sexually transmitted diseases in humans.

.....
c) In which one way do sexually transmitted diseases affect human health?
.....

55. **The diagram below shows a home in Namataba Village. Use it to answer questions that follow.**



a) Name one element of a clean home shown in the home above.
.....

b) What sanitation activity is being carried out by:

i) the girl.....

ii) the boy.....

c) Why are windows on the above house left open?
.....

END



KINGS WAY PRIMARY SCHOOL

P. 7 RECESS REVISION 2020-(SET SIX)

Mathematics

DURATION : 2 HOURS 30 MINUTES

NameSTREAM.....

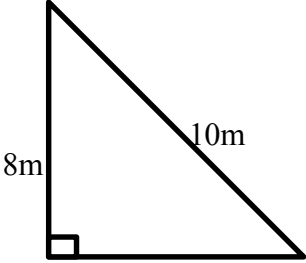
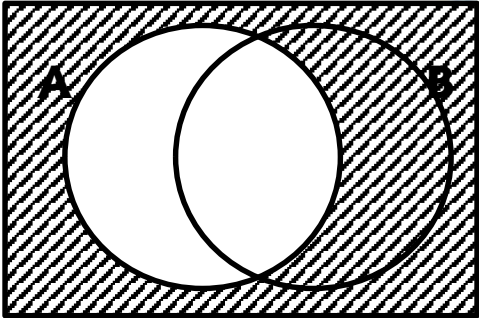
Read the following instructions carefully


1. This paper has two Sections: A and B.
2. Section A has 20 answer questions (40 marks)
3. Section B has 12 questions (60 marks)
4. Answer ALL questions. Answers to both sections must be written in the spaces provided.
5. All answers must be written using a blue or black ballpoint pen or ink. Diagrams should be drawn in pencil.
6. Unnecessary alteration of work may lead to loss of marks.
7. Any handwriting that cannot be easily read may lead to loss of marks.
8. Do not fill anything in the box indicated for examiner's use only.

FOR EXAMINERS USE ONLY

QN. NO.	MARK	
1 - 10		
11 - 20		
21 - 22		
23 - 24		
25 - 26		
27 - 28		
29 - 30		
31 - 32		
TOTAL		

Section A (40 Marks)

1. Work out : $24 \div 6 =$.	5. Calculate the area of the figure below. 
2. Write 194 in Roman numbers	6. Solve: $5 - 3m = 17$
3. In the figure below describe the shaded part. 	7. Write 0.025 in standard form
4. Simplify: $^{-}8 - ^{-}3$	8. Using a pencil, a ruler and pair of compasses only, construct an angle 135° .

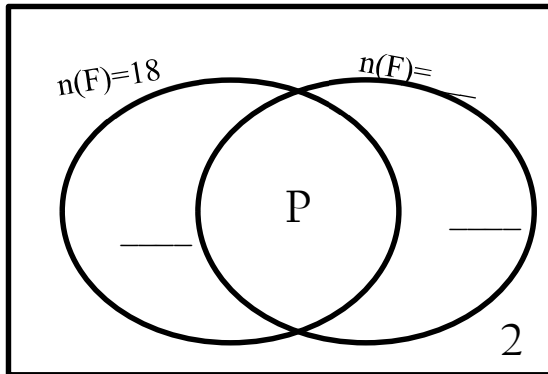
9.	By selling a shirt at sh. 13,000, a retailer made a loss of sh. 3,000. How much did he buy the shirt?	13.	Shade 25% of the figure 
10	Find the average of $2x$, 0 , 2 $3x$ and 8	14.	The radius of a circular Kraal is $7m$. What is the area of the Kraal?
11.	Solve for X : $3x-1=26$	15.	The cost of 3 apples is sh. 3000, What is the cost of 7 similar apples at the same rate?
12.	Find the LCF of 6 and 4	16.	$5x$, $3x$, and $2x$ are exterior angles of a regular polygon. Find the value of x

17	Express 110_{two} to base five	18.	Without dividing, determine the number which is exactly divisible by 3 from the list below 3604 7812 9362
19.	Express 12:45 p.m in 24 hour clock.		
20.	Find the range of the following integers; +5,-6, 0, -1 ,+3 and -8		

Section B (60 marks)

21	<p>a) Nangobi deposited sh.500,000 in a bank which offers 10% interest p.a. Find her amount after 3 years.</p> <p>b) A trader had a bundle of 100 notes arranged consecutively from AK 00644500. Find the serial number of the last note.</p>
----	---

22. In a farmers' group of 30 farmers, 18 of them grow food crops(F) 10 grow cash crops only and P grow both types of crops
- a) Represent the above data on the venn diagram below.



- b) If 15 farmers grow cash crops, find the value of P.

- c) What is the probability of picking a farmer who grows only one crop to be the model farmer?



23 a) Simplify: $\frac{0.72 \times 3.6}{0.3 \times 0.9}$

b)Workout: $\frac{1}{3} - \frac{1}{4} + \frac{1}{2}$

24.

The two opposite sides of a rectangle are $(2m-5)\text{cm}$ and $(m+3)\text{cm}$.

a) Find the value of m

b) If the width is 7cm , calculate the area of the rectangle.

25.

Given that the sum of the values in the table below are the same vertically, horizontally and diagonally, find the value of a , b , c and d

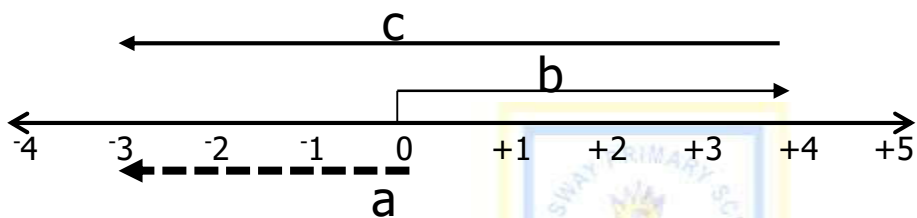
a	d	4
7	5	b
6	c	8

26.	<p>Balinda used $\frac{3}{5}$ of his money to buy a mathematical set and he remained with sh. 2,000</p> <p>a) What fraction of money did Balinda remain with?</p> <p>b) How much did he have at first?</p>
27.	<p>A driver left home at 8:45a.m and reached his detination at 11:45 a.m. he drove at 40km.hr as he went back to his home through the same distance in 2 hours.Calculate his average speed.</p>
28.	<p>Ali had two fifty-thousand shilling notes and bought the following.</p> <p>3 kg of sugar at sh.4,000 per kg</p> <p>2 litres of paraffin at sh 8,000</p> <p>500gm of salt at sh. 1,000 a kg</p> <p>1½ of meat at sh10,000 a kg</p> <p>a) Calculate his total expenditure</p>

b) What was his change?

29 Use the number line below

a) to write the integers represented by arrows

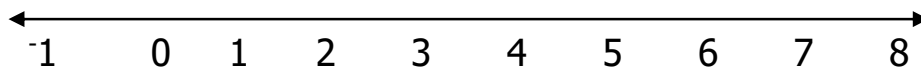


a = _____

b = _____

c = _____

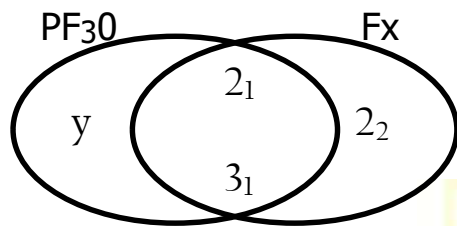
b) Workout 3×2 using the number line below



30 a) Construct a rectangle ABCD where $AB = 8\text{cm}$, $BC = 6\text{cm}$

b) Measure diagonal BD

31 Use the venn diagram below to answer the questions that follow.



a) Find the value of:

i) y

ii) x

b) Work out the G.C. F of 30 and X

32. Given the numeral 634.59

a) What is the place value of 9 in the number above?

b) Work out the product of the place value of 5 and value of 3 in the number above.

c) Add: $351_{\text{six}} + 42_{\text{six}}$