


**MID – TERM III (2012) EXAMS**  
**LITERACY 1B FOR P.3**

**NAME:** \_\_\_\_\_ **STREAM:** \_\_\_\_\_

**SECTION B. (40 Marks)**

1. Draw a map of a tree in the space provided.



2. Name the first animal to be tamed by man.

\_\_\_\_\_

3. From which direction does the sun rise?

\_\_\_\_\_

4. In which division is your school found?

\_\_\_\_\_

5. From which land form does man get clay?

\_\_\_\_\_

6. How do we call crops grown for sale?

\_\_\_\_\_

7. Name the main source of heat and light.

\_\_\_\_\_

8. What title is given to the head of a school?

\_\_\_\_\_

9. Give one reason why children are taken to school.

\_\_\_\_\_

10. Name the type of food got from water.

\_\_\_\_\_

11. How many members sit on local council I Executive committee?

\_\_\_\_\_

12. Name the main source of water.

\_\_\_\_\_

13. What name is given to the group of trees growing together?


14. Name any one thing made of clay. \_\_\_\_\_
15. Write down any member of a nuclear family.  
\_\_\_\_\_
16. Name any one leader at school.  
\_\_\_\_\_
17. How do we call the place where people keep their money safely?  
\_\_\_\_\_
18. Write down any one example of a domestic animal kept by the people in your division.  
\_\_\_\_\_
19. What name is given to the low land between two or more hills?  
\_\_\_\_\_
20. Mention any one crop that grow well in swamps.  
\_\_\_\_\_
21. Give one use of wind to man.  
\_\_\_\_\_
22. Which type of gas is used in a fire extinguisher?  
\_\_\_\_\_
23. What is the main work of the police?  
\_\_\_\_\_
24. Name any one building material. \_\_\_\_\_
25. Mention any one place where people in your division get food from.  
\_\_\_\_\_
26. Give any one way how bees are useful to man.  
\_\_\_\_\_
27. Mention any one symbol of a school that makes your school different from others.  
\_\_\_\_\_
28. Name the official language used in your district.  
\_\_\_\_\_
29. Write down any one basic need of man.  
\_\_\_\_\_

30. In which season do farmers harvest their crops?  
31. Mention any one place where people go when they are sick.

32. Write down any one important place found in your district.

33. Name the main source of food.

34. Draw and name any one means of road transport.



35. Name the food taboo for Moslems.

36. In the space below draw a picture of a pot.

37. Name the holy place worshipping for Christians.

38. On which day of the week do Moslems go for Juma prayers?

39. For how many days do Christians fast?

40. For how many days do Moslems fast?

**SECTION B.**

41. (a) How is a compass useful to the map reader?

---

(b) Mention two groups of people who use a compass in their daily work.

(i) \_\_\_\_\_ (ii) \_\_\_\_\_

(c) Write down any one cardinal point of compass.

---

42. Draw the map symbol of the following:

(i) bridge	(ii) swamp
(iii) dam	(iv) mountain

43. (a) Mention any two sources of water.

(i) \_\_\_\_\_ (ii) \_\_\_\_\_

(b) Give any two uses of water to people.

(i) \_\_\_\_\_

(ii) \_\_\_\_\_

44. (a) What are **domestic animals**?

\_\_\_\_\_

---

(b) Write three things man gets from domestic animals.

(i) \_\_\_\_\_ (ii) \_\_\_\_\_

(iii) \_\_\_\_\_

45. (a) Which type of clouds bring rainfall?

---

(b) Name any two types of clouds you know.

(i) \_\_\_\_\_ (ii) \_\_\_\_\_

(c) Name the highest clouds in the sky.

---

46. (a) Write down any two uses of electricity.

(i) \_\_\_\_\_

(ii) \_\_\_\_\_

(b) Write any two things that use electricity at home.

(i) \_\_\_\_\_

(ii) \_\_\_\_\_

47. (a) What are **physical features**?

---

(b) Give three examples of physical features.

(i) \_\_\_\_\_ (ii) \_\_\_\_\_

(iii) \_\_\_\_\_

48. (a) Mention any three examples of garden tools you know.

(i) \_\_\_\_\_ (ii) \_\_\_\_\_

(iii) \_\_\_\_\_

(b) Give any one use of a Panga to a farmer.

---

49. (a) Mention any three examples of crops that can be grown in swamps.

(i) \_\_\_\_\_ (ii) \_\_\_\_\_

(iii) \_\_\_\_\_

(b) What are food crops?

---

50. (a) Give any three examples of tribes found in your sub-county division.

(i) \_\_\_\_\_ (ii) \_\_\_\_\_

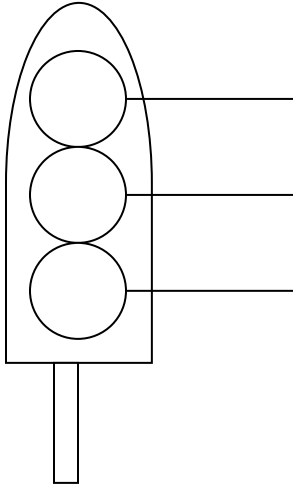
(iii) \_\_\_\_\_

(b) Name the biggest tribe in your sub-county / division.

51. (a) Write down any four activities done by the people in your division.

(i) \_\_\_\_\_ (ii) \_\_\_\_\_

52. (a) Name the road sign below:



(b) Name the colours labeled A and B.

A: \_\_\_\_\_

B: \_\_\_\_\_

(c) Which traffic light tells the drivers to stop?

\_\_\_\_\_

53. (a) **Match the following leaders with their places of work.**

**Leaders**

Mayor  
President  
King  
Headteacher

**Places**

School  
Kingdom  
Municipality  
Country

(i) Mayor: \_\_\_\_\_

(ii) President: \_\_\_\_\_

(iii) King: \_\_\_\_\_

(iv) Headteacher: \_\_\_\_\_

54. (a) Mention any two Christian names for boys.

(i) \_\_\_\_\_ (ii) \_\_\_\_\_

(b) Mention any two Christian names for girls.

(i) \_\_\_\_\_ (ii) \_\_\_\_\_

55. (a) Name the first two people to be created by God.

(i) \_\_\_\_\_ (ii) \_\_\_\_\_

(b) Apart from man, name any other two things God created.

(i) \_\_\_\_\_

(ii)

---

**\*\* The End. \*\***