

**NAMAGUNGA PRIMARY BOARDING SCHOOL**  
**TERM I HOLIDAY WORK - 2020**  
**PRIMARY THREE – LITERACY 1A**

Name: .....Stream: .....

**SECTION: A**

1. Name one economic activity carried out in our sub-county.

\_\_\_\_\_

2. What do you call a girl child to your uncle or aunt?

\_\_\_\_\_

3. How does a dog move?

\_\_\_\_\_

4. Give one source of food?

\_\_\_\_\_

5. Name one symbol of a school.

\_\_\_\_\_

6. What is a piglet?

\_\_\_\_\_

7. Name this tool used by a policeman.



\_\_\_\_\_

8. Why do people sing and dance?

\_\_\_\_\_

9. Mention one cause of child abuse.

\_\_\_\_\_



10. How do you keep your classroom clean?

---

11. Draw a map of the picture below.



12. Which type of transport does a yacht use?

---

13. Give one example of a garden tool.

---

14. Why do people keep rabbits at home?

---

15. Write one item used to dispose off rubbish.

---

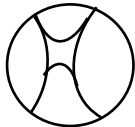
16. What name is given to a person who makes furniture?

---

17. Mention one member found in an extended family.

---

18. Write one material used to make the item drawn below.



---

19. How can we prevent accidents at school?

---

20. State the value of a potter in our sub-county.

---

21. How useful is a cat at home?

---

22. Which type of crop is tobacco?

---

23. Why do we need balls as children?

---


24. How are hills important to people?

---

25. What social service is provided from hospitals?

---

26. Draw a symbol of a forest in the space below.



27. Write the basic need provided by a dog.

---

28. Why are forests important in our sub-county?

---

29. Name the means of communication.



---

30. Where do wild animals live?

---

31. What do we call a group of parishes?

---



32. State one example of a class rule.

---

33. Who is an oculist?

---

34. In which direction does the sun rise?

---

35. How do you care for goats at home?

---

36. How do Christians talk to God?

---

37. On which mountain did Moses receive the Ten Commandments?

---

38. How can you help a person in need?

---

39. What should a Christian do after sinning?

---

40. Give one example of a good thing to do in the Lenten season.


---

### **SECTION: B**

41 (a) Name any two elements of a good map.

(i) \_\_\_\_\_ (ii) \_\_\_\_\_

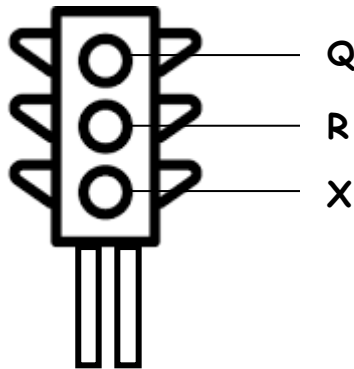
(b) Name the element which encloses a map.



(c) Why do we need a title on a map?

---

42. Answer questions about traffic lights.



(a) Name the colours of the traffic lights above.

Q \_\_\_\_\_

R \_\_\_\_\_

X \_\_\_\_\_

(b) Give the meaning of the traffic light marked letter X?

---

43. Give the products of the following cash crops.

Cash crop	Product
sugarcane	_____
tea	_____
coffee	_____
cocoa	_____

44. Study the domestic animal and answer questions that follow.



(a) State the value of the animal drawn in a home.

\_\_\_\_\_

(b) Write the habitat for a rabbit.

\_\_\_\_\_


(c) Why do people rear domestic animals?

(i) \_\_\_\_\_

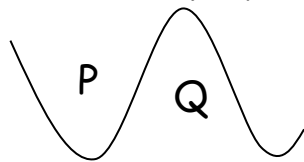
(ii) \_\_\_\_\_

45 (a) Name the following map symbols.

(i)  \_\_\_\_\_

(ii)  \_\_\_\_\_

(b) Name the physical features marked P and Q.



P is \_\_\_\_\_

Q is \_\_\_\_\_

46 (a) Name the places where these accidents may happen.



\_\_\_\_\_



\_\_\_\_\_

(b) Write two causes of accidents at school.

(i) \_\_\_\_\_

(ii) \_\_\_\_\_

47 (a) What are economic activities?

\_\_\_\_\_

(b) Why do people carry out economic activities in our sub-county?

\_\_\_\_\_

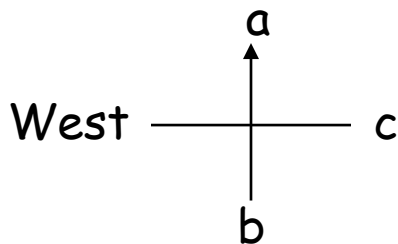
(c) Who is a doctor?

\_\_\_\_\_

(d) Give the commonest economic activity carried out in our sub-county?

\_\_\_\_\_

48 (a) Name the major points marked by letters; a , b and c.



a \_\_\_\_\_

b \_\_\_\_\_

c \_\_\_\_\_

(b) Mention one person who uses a compass to do work.

\_\_\_\_\_

49 (a) What do we call the condition of the atmosphere at any given time?



\_\_\_\_\_

(b) Outline one importance of rainfall.

\_\_\_\_\_

(c) Name the condition of weather which causes drought.

\_\_\_\_\_

(d) What is wind?

\_\_\_\_\_

50 (a) What is road transport?

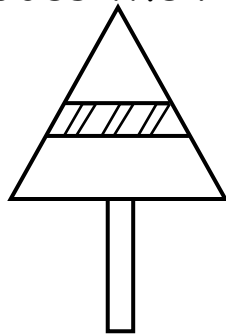
\_\_\_\_\_

(b) Give two means of air transport.

(i) \_\_\_\_\_

(ii) \_\_\_\_\_

(c) What does the road sign drawn below show?



\_\_\_\_\_

51 (a) Write “Yes” or “No” to fill the gaps.

(i) Grasshoppers stay in the sky. \_\_\_\_\_

(ii) An ostrich is a domestic bird. \_\_\_\_\_

(iii) A carpenter makes pottery. \_\_\_\_\_

(iv) Ornaments are things used for decoration. \_\_\_\_\_

52 (a) Write three examples of customs.



(i) \_\_\_\_\_

(ii) \_\_\_\_\_

(iii) \_\_\_\_\_

(b) Give one importance of customs.

\_\_\_\_\_

53 (a) On which day do Christians go for general prayers?

\_\_\_\_\_

(b) Why do people pray?

(i) \_\_\_\_\_

(ii) \_\_\_\_\_

(c) Who is the earthly father of Jesus?

\_\_\_\_\_

54 (a) What do we call a person who guides others

\_\_\_\_\_

(b) State two duties of your class monitors as leaders.

(i) \_\_\_\_\_

(ii) \_\_\_\_\_

(c) What do you learn from Jesus as a good leader?

\_\_\_\_\_

55. Match correctly.

Simon peter

betrayed Jesus

Judah Iscariot

died for our sins



Thomas

most beloved apostle of Jesus

Jesus

doubted the resurrection of  
Jesus

