



# SHALOM PRIMARY SCHOOL.2020

CLASS: PRIMARY THREE

SUBJECT: LITERACY I A

Name: ..... Stream: .....

## SECTION A (40 MARKS)


1. Name the human body part used for seeing.

\_\_\_\_\_

2. Name the domestic animal that gives us milk.

\_\_\_\_\_

3. Name the part of the plant shown below.



4. Mention any **one** example of a food stuff eaten at home.

\_\_\_\_\_

5. Write any **one** common accident that can happen at home.

\_\_\_\_\_

6. How is are handkerchiefs useful to pupils?

\_\_\_\_\_

7. Give any **one** item used for cleaning teeth.

\_\_\_\_\_

8. Why do people boil water for drinking?

\_\_\_\_\_

9. Write the immunisable disease that makes children lame.

\_\_\_\_\_


10. Name any **one** product got from hens.

\_\_\_\_\_

11. Why do people sleep under treated mosquito nets?

---

12. Draw and name any **one** item used in giving first aid.



13. Name any **one** member of a nuclear family.

---

14. Mention any **one** disease in your sub county.

---

15. Why do we wash hands after using the toilet?

---

16. How can people avoid bad body smell?

---

17. Mention any **one** way of protecting yourself against rainy weather.

---

18. How is a ball useful to pupils?

---

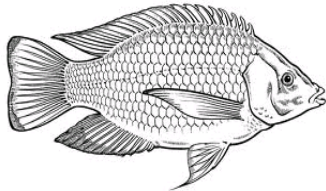
19. Give any **one** reason why people eat food.

---

20. Name any **one** dangerous insect in our environment.

---

21. How useful is the animal to people?



---

22. Mention any **one** activity done by farmers in the dry season.

---

23. Name the garden tool used for collecting rubbish.

---

24. How do we call animals that live in the bush?

---

25. Give any **one** use of the sun to people.

---

26. Write any **one** thing plants need to grow well.

---

27. Mention the soil used to make pots.

---

28. How useful are plants to people?

---

29. Mention the main natural source of water.

---

30. Give any **one** reason why animals move.

---

31. Write any **one** use of a clock face in a classroom.

---

32. Draw and name **one** item used for cutting finger nails.



33. How does a bee protect itself?

---

34. Name any **one** example of a living thing in our compound.

---

35. Mention any **one** use of water to people.

---

36. Write any **one** use of rain to people.

---

37. Give any **one** use of electricity at home.

---

38. How do we call moving air?

---

39. Write any **one** way of keeping food free from germs.

---

40. Name the home of a bird.

---

**SECTION B. (60 marks)**

41. (a) Mention any **two** items used for cleaning a classroom.

(I) \_\_\_\_\_

(II) \_\_\_\_\_

(b) How do we keep the classroom clean?

(i) \_\_\_\_\_

(ii) \_\_\_\_\_

42. (a) Write any **one** example of food stuffs rich in proteins.

---

(b) Which part of these plants is eaten by people?

(i) sugarcane \_\_\_\_\_

(ii) mangoes \_\_\_\_\_

(i) Cabbage \_\_\_\_\_

43. **Draw these garden tools.**

<b>axe</b>	<b>hoe</b>	<b>panga</b>	<b>basket</b>

44. Name these animal homes.

(a) people \_\_\_\_\_

(b) dog \_\_\_\_\_

(c) pig \_\_\_\_\_

(d) Why do people build houses?

---

45. (a) Mention any **one** disease spread by a housefly.

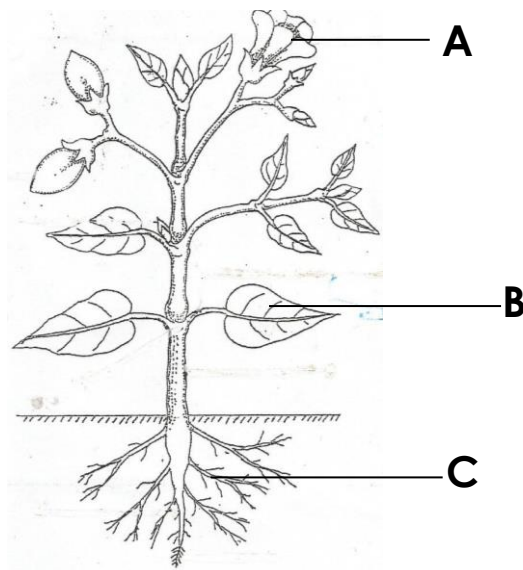
(b) Name **one** place where houseflies lay their eggs.

(c) Give any **two** ways of preventing cholera at school.

(i) \_\_\_\_\_

(ii) \_\_\_\_\_

46. Name the parts of the plant labelled below.



**A** \_\_\_\_\_ **B** \_\_\_\_\_ **C** \_\_\_\_\_

(b) Which part of the plant makes food?

---

47. (a) Write any **two** items people use to keep water.

(i) \_\_\_\_\_

(ii) \_\_\_\_\_

(b) How does water get contaminated?

---

(c) Give one way of making water safe for drinking?

---

48. **Match correctly.**

- |                 |                                  |
|-----------------|----------------------------------|
| (a) grandmother | brother to my father or mother   |
| (b) uncle       | daughter to my brother or sister |
| (c) aunt        | mother to my mother or father    |
| (d) niece       | sister to my mother or father    |

- |                 |       |
|-----------------|-------|
| (a) grandmother | _____ |
| (b) uncle       | _____ |
| (c) aunt        | _____ |
| (d) niece       | _____ |

49. a) What are aquatic animals?

\_\_\_\_\_

b) Give two examples of aquatic animals.

(i) \_\_\_\_\_


(ii) \_\_\_\_\_

c) Write any one danger of wild animals.

\_\_\_\_\_

50. a) **The diagram below shows items used in keeping sanitation.**

**Name the items below.**



b) Give any **one** way how people keep their latrines clean.

c) Name any **one** disease that can spread due to poor sanitation.

\_\_\_\_\_

51. **Match the animal in A to their movement in B correctly.**

**A**

snake

baby

frog

caterpillar

(a) snake

(b) baby

(c) frog

(d) caterpillar

**B**

wriggling

leaping

slithering

crawling

\_\_\_\_\_

\_\_\_\_\_

\_\_\_\_\_

\_\_\_\_\_

52. a) What are social insects?

\_\_\_\_\_

b) Name any **one** social insects found in our environment.

\_\_\_\_\_

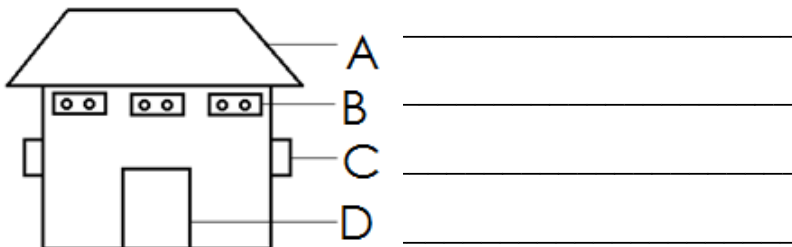
c) How are insects useful to people?

\_\_\_\_\_

d) Which part of an insect is used for breathing?

\_\_\_\_\_

53. Name the parts of a house.



54. (a) Name any two animals that live in the soil.

(i) \_\_\_\_\_ (ii) \_\_\_\_\_

(b) Name the component of soil which takes the biggest percentage.

\_\_\_\_\_

(c) Give one cause of soil erosion.

\_\_\_\_\_

55. **Use the words below to complete correctly.**

**(doctor, teacher, barber, community, pastor, police officer, banker)**

A \_\_\_\_\_ is a group of people living and working together. We have a \_\_\_\_\_ who trims our hair, \_\_\_\_\_ who teaches children in school, there is a \_\_\_\_\_ who keeps law and order, then a \_\_\_\_\_ who preaches the word of God in a church, if you visit a bank you find a \_\_\_\_\_ collecting and keeping money and then a \_\_\_\_\_ who treats sick people in a hospital among many other important people.

**END**