



SHALOM PRIMARY SCHOOL.2020

CLASS: PRIMARY THREE

SUBJECT: LITERACY I B

Name: **Stream:**

Section A.

1. Name **one** symbol of a school.

2. How is a school useful to a community?

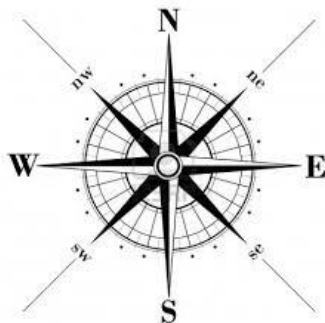
3. Name **one** animal used for transport.

4. Why do we need police officers on the roads?

5. Who heads the Local Council I Committee?

6. Which animal provides security to people?

7. Give the use of this instrument below to people.



8. Mention **one** activity done by farmers in the wet season.

9. Where can people keep their money safely?

10. State **one** use of hills to people.

11. Name **one** lake found in Kampala.

12. What is a map?

13. Draw and name **one** item that can be made out of banana fibres.



14. Why do most people use road transport in your area?

15. State any **one** natural source of water.

16. Along which road is your school located?

17. From which direction does the Sun rise?

18. How can children keep security at their homes?

19. Which type of weather dries our crops?

20. How do you keep your classroom clean?

21. How are markets important to people?

22. Why do people keep domestic animals?

23. In which division is your school found?

24. Mention **one** activity done at school.

25. Give any **one** type of family.

26. How do people in a community care for hills?

27. Which language is spoken by the Basoga?

28. What name is given to the four major points of a compass?

29. State **one** way of caring for domestic animals.

30. Why is it not good to settle in valleys?

31. Why do we need clinics in our community?

32. Mention **one** product that is got from sugar canes.

33. How many divisions make up Kampala District?

34. Name one feature that is found on the school sign post.

35. Why do some people plant trees in their compounds?

RELIGIOUS EDUCATION.

36. For Both: State any **one** activity done in church service.

37. Either: How did Jesus show love to us?

Or: How does Allah show love to Muslims?

38. Either: Which prophet was swallowed by a big fish?

OR. Name any one prophet in Islam.

39. Either: Mention any **one** leader in a church.

OR: Mention any one leader in Islam.

40. Either: Why do Christians fast?

OR: Why do Muslims fast?

SECTION B.

41. a) State **one** duty of each of these people in the family.

i) A Father_____

ii) A mother_____

iii) Children_____

b) Write **one** problem faced by families.

42. a) What is communication?

b) Draw and name any **three** means of communication used by people.

43. a) Mention any **two** groups of people who work in your school.

i)_____ii)_____

b) How does your school get its needs?

c) Write **one** need of a school.

44. a) Identify any **two** types of houses built in your area.

i)_____

ii) _____

b) Give any **two** materials used in building the above houses.

i) _____

ii) _____

45. a) What are food crops?



b) Outline any **two** examples of food crops grown in your area.

i) _____

ii) _____

c) How can we care for our crops?

46. a) Name the traffic road signs below.



b) Why are road signs important to road users?

c) Name **one** group of road users.

47. a) What other word is used to mean physical features?

b) Mention any **three** physical features.

i) _____ ii) _____

iii) _____

48. a) Which economic activity is carried out by most people on lakes and rivers?

b) Give any other **three** economic activities in your area.

i) _____

ii) _____

iii) _____

49. List down four sources of food to man.

(i) _____

(ii) _____

(iii) _____

(iv) _____

50. Match the following correctly.

Kingdom

King's title.

i) Buganda

Emorimor

ii) Busoga

Kabaka

iii) Bunyoro

Omukama

iv) Teso

Kyabazinga

Kings

King's title.

i) Buganda

ii) Busoga

iii) Bunyoro

iv) Teso

RELIGIOUS EDUCATION.

51. a) On which day do Christians go for general prayers?

b) State **two** reasons why people pray.

i) _____

ii) _____

c) Name **one** place where one can pray from.

52. a) Who led the Israelites to the promised land?

b) State any **two** qualities of a good leader.

i) _____

ii) _____

c) Name **one** other leader in the Bible.

53. a) Name the first **two** people to be created by God.

i) _____ ii) _____

b) How did the above people disobey God?

c) Where did the above people live?

54. **Study the picture below and answer the questions about it.**



a) On which day did the above event take place?

b) Why did Jesus send us the Holy Spirit?

c) Mention any **two** gifts of the Holy Spirit.

i) _____ ii) _____

55. a) Mention any **two** miracles performed by Jesus.

i) _____

ii) _____

b) How can a Christian show care for others.

i) _____

ii) _____

THE END