

MID - TERM 2 (2013) EXAMS

MATHS FOR P.1

NAME: _____ **STREAM:** _____

1. Fill in the missing numbers.

50, 51, _____, _____, 54, 55.

2. Sort and form new sets.

A set of tables.

3. Ring the smaller numbers.

17 or 20

33 or 35





70 or 60

4. Write in words.

9 _____ 10 _____

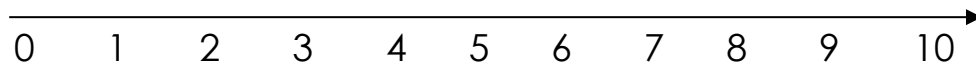
16 _____ 8 _____

5. Read and draw shapes.

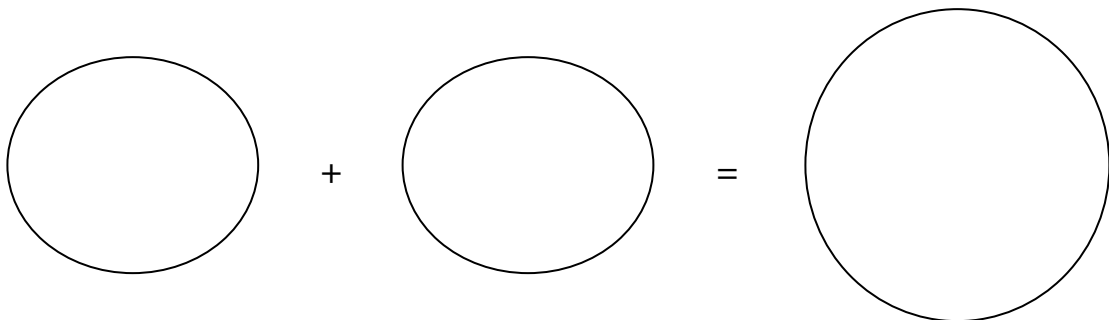
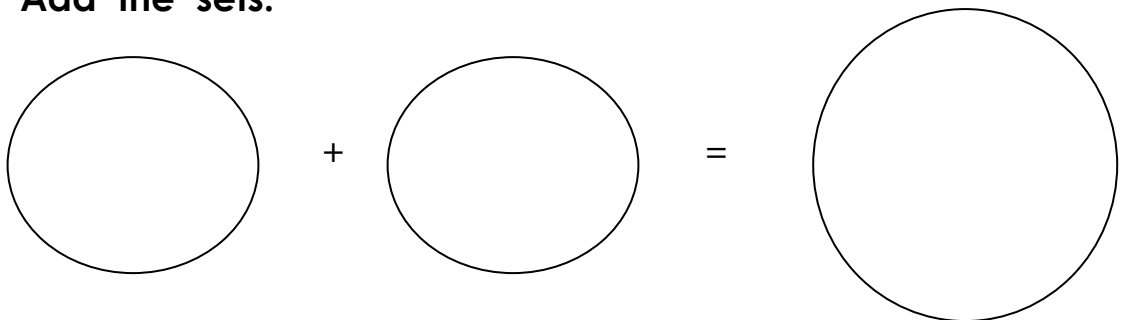
circle	rectangle	triangle	square
			

6. Add using a number line.

$4 + 2 = \underline{\quad}$



7. Add the sets.



8. Work out:

$$\begin{array}{r} \text{T} \quad 0 \\ 5 \quad 4 \\ + 1 \quad 2 \\ \hline \end{array}$$

$$\begin{array}{r} \text{T} \quad 0 \\ 8 \quad 5 \\ - 3 \quad 1 \\ \hline \end{array}$$

9. Word problem

Ten plus three equals to _____

Nine take away six gives _____

10. Tell the time.

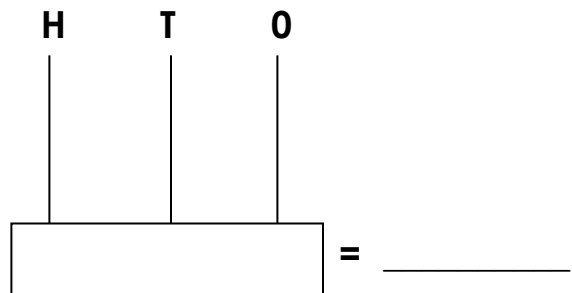
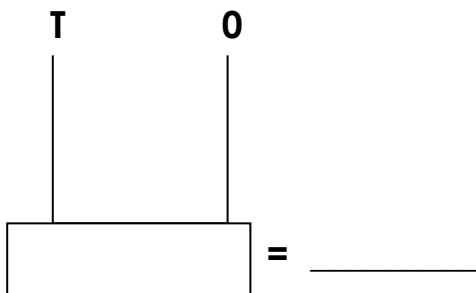


It is _____ O'clock.



It is _____ O'clock.

11. Fill in the abacus correctly.



12. Write in figures.

Zero _____

Seventy nine _____

One hundred _____

13. Write the numbers before and after.

_____, 18, _____

_____, 27, _____

_____, 35, _____

14. Multiply:

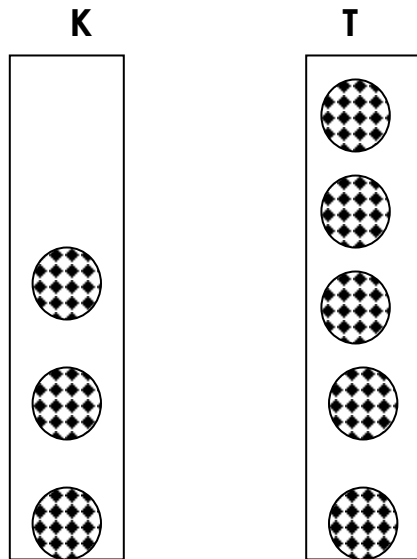
$2 \times 3 = \underline{\hspace{2cm}}$

$3 \times 4 = \underline{\hspace{2cm}}$

15. Arrange the numbers starting with the smallest.

10, 5, 8, 1, 3

16. Fill in **more or **less** correctly.**



Set K has _____members.

Set T has _____members.

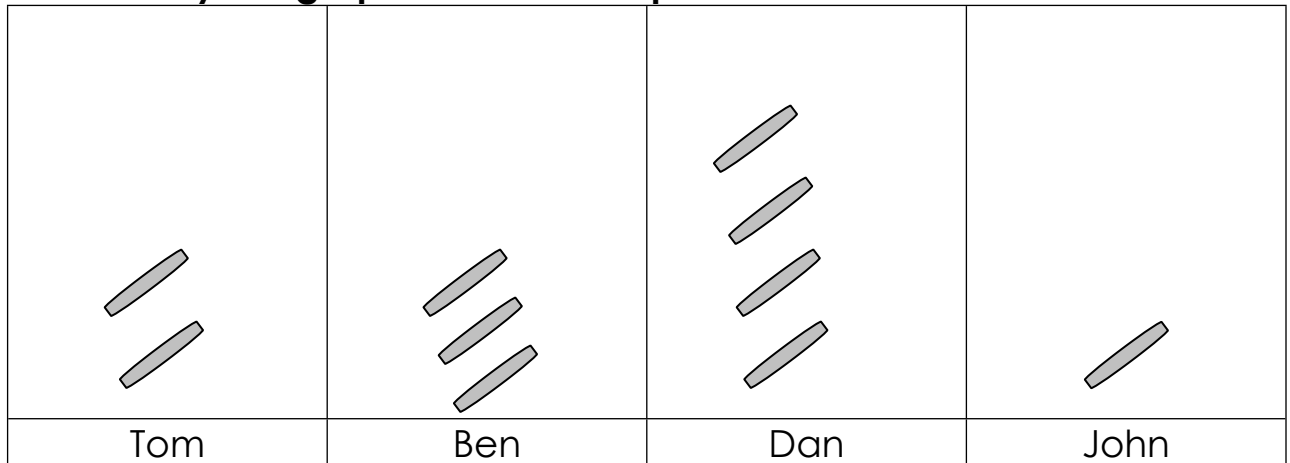
17. Fill in correctly.

342 _____hundreds _____tens _____ones.

57 _____tens _____ones.

194 _____hundreds _____tens _____ones.

18. Study the graph and answer questions.



(a) Who has three pencils?

(b) How many pencils has Tom?

(c) Who has one pencil?

(d) Dan has _____pencils.

(e) Who has many pencils?

(f) How many pencils are they altogether?

**** The End. ****