

NAME: _____

1. Read and draw the sets.

- (a) A set of four tins. (b) A set of six cups.

2. Add these:

$$\begin{array}{r} 2 \quad 3 \\ + 2 \quad 1 \\ \hline \end{array}$$

$$\begin{array}{r} 4 \quad 5 \\ + 2 \quad 1 \\ \hline \end{array}$$

3. Read and write the number.

eight = _____ nineteen = _____

thirty four = _____ sixty five = _____

4. Fill in the missing numbers.

(a) 1st, _____, 3rd, _____, 5th, _____

(b) 23, 24, _____, 26, _____, 28, _____

(c) 64, _____, 66, _____, 68, _____, 70.

5. Multiply these:

$$\begin{array}{r} 3 \times 2 = \\ 5 \\ \times 2 \\ \hline \end{array}$$

$$\begin{array}{r} 4 \times 4 = \\ 2 \quad 3 \\ \times 2 \\ \hline \end{array}$$

6. Add these fractions.

$$\frac{1}{3} + \frac{1}{3} =$$

$$\frac{2}{7} + \frac{4}{7} =$$

7. Subtract the fractions.

$$\frac{4}{6} - \frac{2}{6} =$$

$$\frac{5}{10} - \frac{3}{10} =$$

8. Fill in longer or shorter.

The ruler is _____ than the pencil.

The pencil is _____ than the ruler.


9. Add in metres.

2 metres + 6 metres = _____ metres.

$$\begin{array}{r} 5 \text{ metres} \\ + 7 \text{ metres} \\ \hline \end{array}$$

$$\begin{array}{r} 2 \quad 5 \text{ metres} \\ + 2 \quad 3 \text{ metres} \\ \hline \end{array}$$

10. Tell the time on the clock face.




It is _____ O'clock.




It is _____ O'clock.

(b) Read and show the time.



It is nine o'clock.



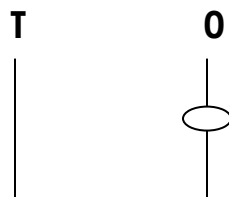
It is six o'clock.

11. Fill in Tens and Ones.

= _____Tens and _____Ones.

= _____Tens and _____Ones.

(b) Write the number on the abacus.





12. **Divide: (share)**

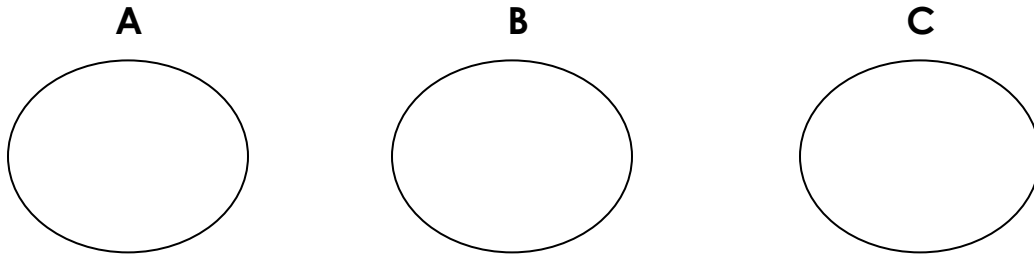
(a) $4 \div 2$

(b) $6 \div 2 =$

(c) $10 \div 2 =$

(b) share eight apples among two boys.

13. **Study the sets blow and answer the questions given.**

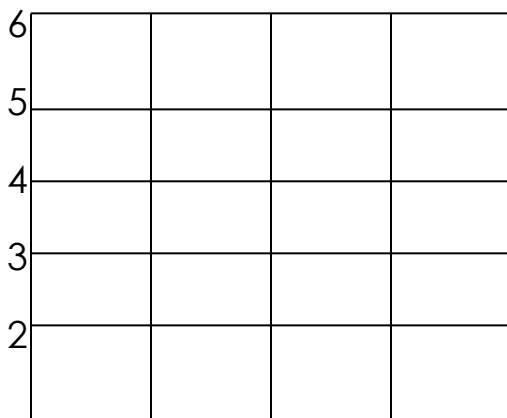


(a) Set C has _____ members.

(b) Which set has the least members?

(c) How many members are in Set A and C altogether?

14. **Read and shade the graph.**



Paula has three balls.

Nina has two balls.

Joan has five balls.

Liz has one ball.

1

~~Nina~~ ~~Liz~~ ~~Paula~~ ~~Fina~~

15. Read and draw the shapes.

Rectangle

Kite

16. Read, understand and work out.

(a) Five grams plus two grams equals _____grams.

(b) Juma has six grams of sugar.
Tom has eight grams of sugar.

They have _____grams altogether.

(c) Opiyo bought 9 eggs.
Five of them were bad.

How many were good?

(d) Jack has ten litres of milk.
Dick has three litres of milk.

Who has more milk?

Who has less milk?

(e) Three girls have _____legs.

**** The End . ****