

**END OF SEPTEMBER EXAMS**  
**MATHS FOR P.2**

**NAME:** \_\_\_\_\_ **STREAM:** \_\_\_\_\_

1. **Add these correctly.**

(a)  $4 + 3 =$

(b) 
$$\begin{array}{r} 5 \quad 3 \\ + 2 \quad 1 \\ \hline \end{array}$$

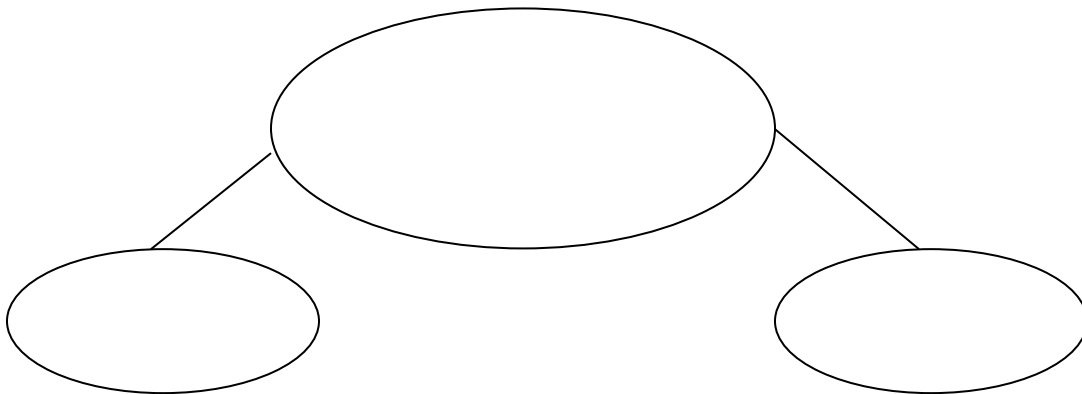
(c) 
$$\begin{array}{r} 4 \quad 3 \quad 0 \\ + 2 \quad 4 \quad 2 \\ \hline \end{array}$$

\_\_\_\_\_

\_\_\_\_\_

(d) Mary has 12 oranges. Juma has 21 oranges. How many Oranges do they have altogether?

2. **Form smaller sets and fill in the gaps.**




A set of \_\_\_\_\_ balls.


A set of \_\_\_\_\_ trees.

3. (a) **Shade the fractions.**

$\frac{1}{3}$



$\frac{3}{4}$



4. **Match number words with figures.**

Seventy six	171
Sixty seven	76
One hundred seventeen	67
One hundred seventy one	117

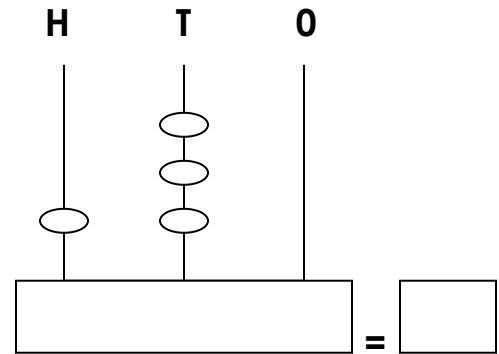
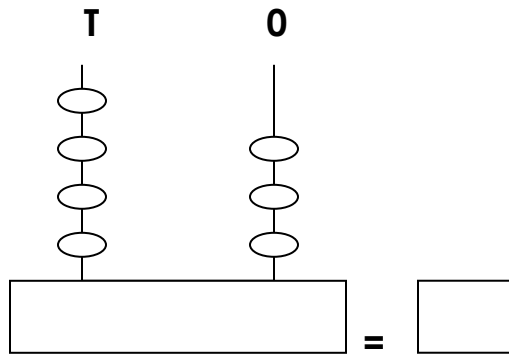
5. **Fill in correctly.**

47 = \_\_\_\_\_tens \_\_\_\_\_ones.

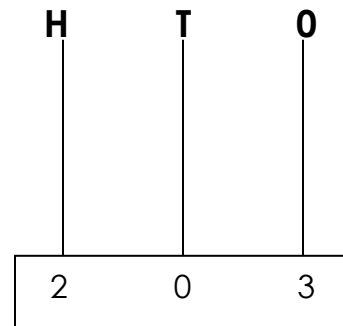
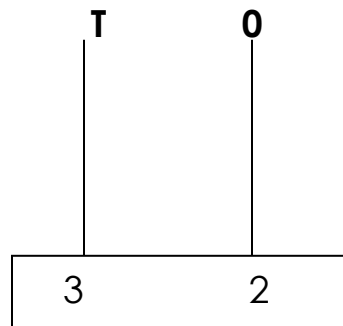
236 = \_\_\_\_\_hundreds 3 tens \_\_\_\_\_ones.

\_\_\_\_\_ = 8 hundreds 0 tens 9 ones.

6. (a) **Write the number shown on the abacus.**



(b) **Use beads to show the given numbers on the abacus.**



**7. Take away:**

(a)  $9 - 3 =$

(b)  $482$

$\underline{-152}$

\_\_\_\_\_

(c) John has 27 apples. He gives Ali 12 apples.  
How many apples remain?

8. (a) \_\_\_\_\_ Has 3 legs.

They have \_\_\_\_\_ legs.

(b)  $7 \times 2 =$

(c)  $21$

$\underline{\times 4}$

\_\_\_\_\_

**9. Fill in the missing number;**

(a) 15, 16, 17, \_\_\_\_\_, 19.

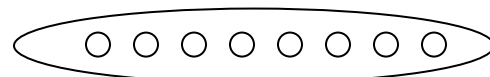
(b) 4, 6, 8, 10, \_\_\_\_\_, 14.

(c) 70, 60, 50, \_\_\_\_\_, 30.

**10. Divide:**

(a)  $6 \div 3 =$

(b) Share equally;



11. **Fill in the boxes.**

(a)  $\square + 2 = 5$

(b)  $3 + \square = 9$

(c)  $\square - 2 = 7$

12. **Look at the prices of these shop things.**

(a) How many does a bread cost?

\_\_\_\_\_

(b) A \_\_\_\_\_ cost Sh. 50

(c) How much does ice cream and a book cost altogether?

(d) Julia had 2000 shillings and bought a book.  
How much money remained?

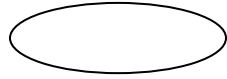
13. **Work out:**

(a) 2 litres + 4 litres = \_\_\_\_\_ litres.

(b) 6 litres + 5 litres = \_\_\_\_\_ litres.

(b) Phillip had 18 litres of milk. He gave John 10 litres.  
How many litres remained?

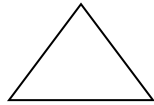
14. Match the shapes.



Rectangle

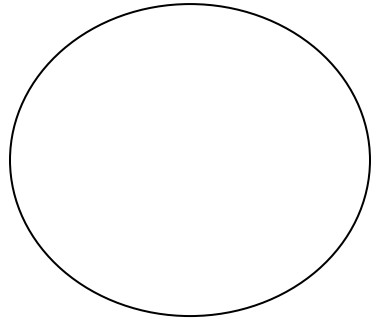


Triangle



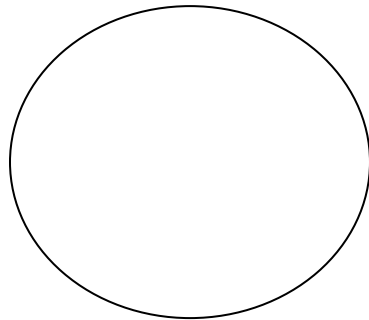
Oval

15. **Tell the time:**



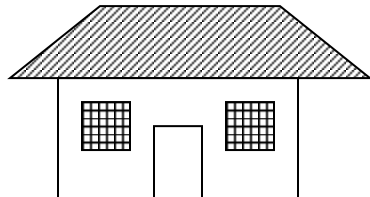
It is \_\_\_\_\_ o'clock.

16. **Show this time on the clock face.**



It is 2 o'clock.

17. **Use bigger than or smaller than** to compare the size of the objects.



(a) A bungalow is \_\_\_\_\_ a hut.

(b) A hut is \_\_\_\_\_ a bungalow. **\*\*The End.\*\***