


END OF 1ST TERM (2013) EXAMS


MATHS FOR P.2

NAME: _____ STREAM: _____

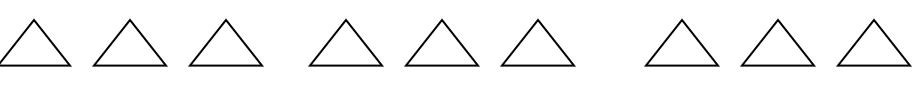
1. Count and write the number.


(a) _____ = _____

(b)  = _____

(c)  = _____

(d) _____ = _____

(e)  = _____

(f)  = _____

2. Count the letters and write the number in words.

(a) Monday = _____

(b) Teacher = _____

(c) bag = _____

(d) principal = _____

(e) headmaster = _____

3. **Fill in the missing numbers.**

20, 21, _____, _____, 24, 25

10, 20, _____, _____, 50, 60

_____, 80.

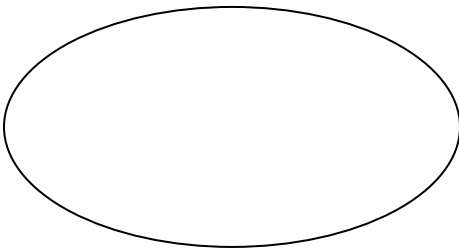
4. **Circle the smaller number.**

(a) 6 and 16

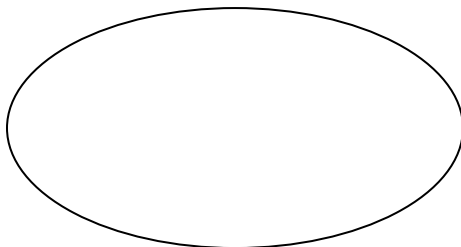
(b) 41 and 14

(c) 107 and 117


5. **Draw the following sets.**



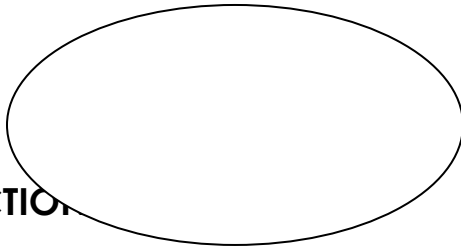
A set of four girls.



A set of five cups.



A set of seven flowers.



A set of six chairs.

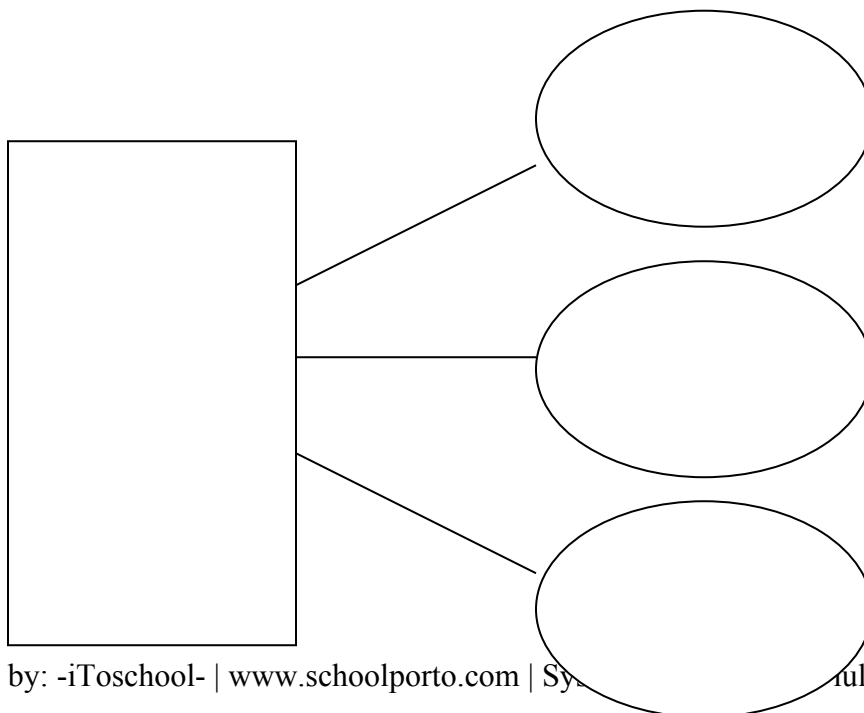
SECTION

6. **Match correctly.**

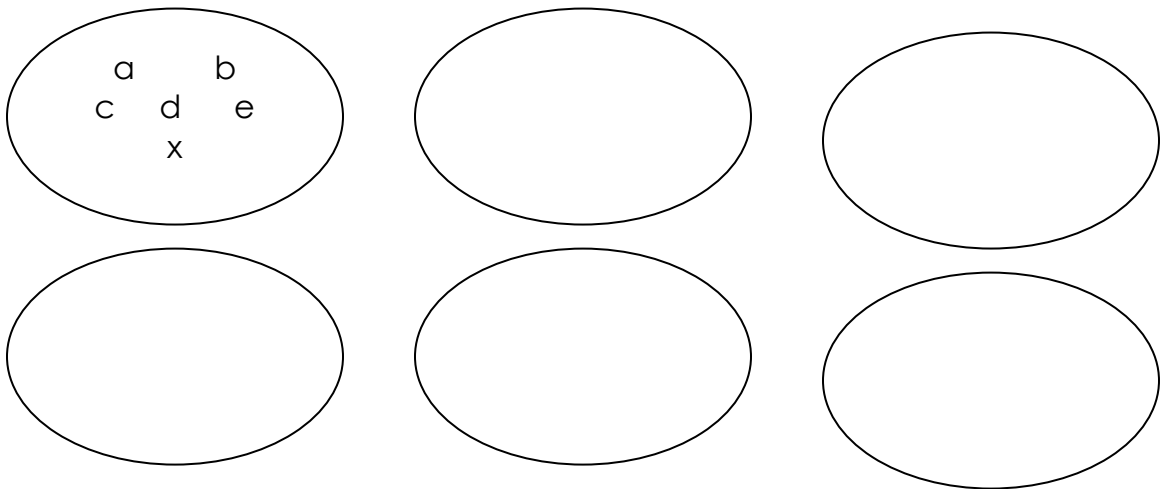
- 2 + 7
- 0 + 2
- 4 + 6
- 3 + 3

- 11
- 6
- 10
- 2

7. **Form new smaller sets from big sets.**



8. Arrange these sets from smallest to the biggest.



- (a) Set _____ comes first.
- (b) Set _____ comes second.
- (c) Set b comes _____

9. (a) What is a **set**?

(b) Things found in a set are called _____

SECTION C.

10. (a) How many days make a week?

(b) Name any one day of the week.

11. Write the number names (words)

8 _____

18 _____

20 _____

12. Read and write the number.

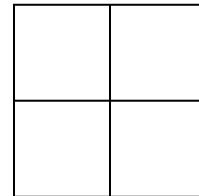
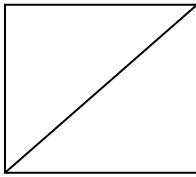
(a) fifteen _____

(b) sixty seven _____

(c) one hundred _____

13. **Shade these fractions.**

$\frac{1}{2}$



$\frac{3}{4}$

SECTION D. (8 marks)

14. **Draw tens and ones**

24 =

(a) 36 = _____

(b) 43 = _____

(c) 55 = _____

(d) 62 = _____ tens _____ ones.

**** The End. ****