

Mid – Term 2 (2012) Exams
Maths for P.2

Name: Stream:

Section A.

1. draw the Following Sets.

(A) A Set of 3 Books. (B) A Set of 4 Chairs.

2. complete the Tens and Ones.

(A) 84 = Tens Ones.

(B)

Tens Ones.

3. write Their Number Names.

(A) 10 (B) 65

(C) 17

4. add: (A) 6 (B) 7 2 (C) 3 + 2 + 8 =

+ 5 + 1 6

5. name the Shaded Fractions.

(A) (B)

6. **Draw the Abacus and Show:**

(A) 3 2 (B) 2 1 5

7. **which Number Comes Before and After?**

(A) 9

(B) 38

(C) 107

8. **take Away (Subtract)**

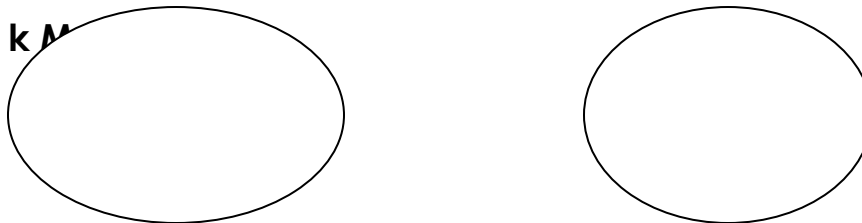
(A) 4 2 (B) 9 (C) 8 7

- 1 1 - 3 - 2 4

9. **arrange These Letters and Make a Meaningful Word.**

(A) T E S (B) S daynu

10. **use “more” Or “less” To Complete Correctly.**



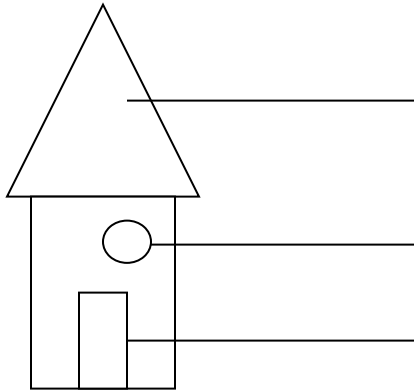
set K has Members Than Set M.

set M has Members Than Set K.

11. **read and Write the Number.**



(A) Twelve (B) Thirty Six

12. name the Shapes On the Hut.



Section B.

13. what Is the Time?



it Is O'clock. It Is O'clock.

14. share Equally: (Divide)

(A) $12 \div 2 =$

(B) $6 \div 3 =$

(C) $4 \div 4 =$

15. complete the Ordinal Numbers.

1st, 2nd, , , 5th, 6th,

16. find the Missing Numbers.

(A) $+ 3 = 5$ (B) $+ 7 = 10$

17. add On the Number Line.

(A) $3 + 2 = 5$

0 1 2 3 4 5

(B) $2 + 1 = 3$

0 1 2 3 4 5

18. add:

(A) 346 (B) 217 (C) 700

$+ 312 + 642 + 58$

19. what Number Is Shown On the Abacus?


(A) H T O (B) T O

= =

20. write Two Non Standard Units of Measuring Length.

(A) (B)

which Tree Is Taller and Which One Is Shorter?



(a) The Tree Is Taller Than the Tree.

(b) The Tree Is Shorter Than the Tree.

21. (A) Days Make a Week.

(B) Write Down One Month of the Year.

22. multiply (Times)

(A) $2 \times 5 =$ (B) 6 (C) 3 4

X 3 X 2

23. rose has 24 Bananas.

fina has 15 Bananas.

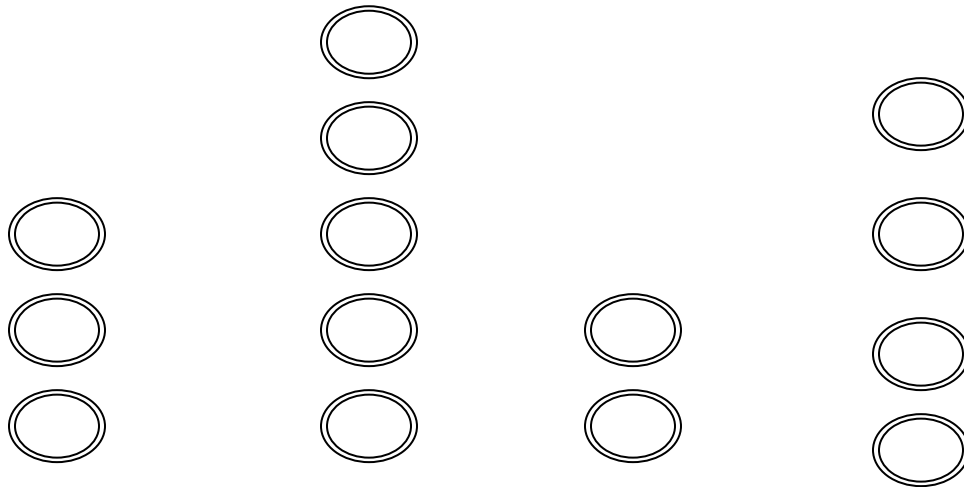
how Many Bananas Do They Have Altogether?

(B) Kintu Had 37 Cows. He Killed 12 Cows. How Many Cows Remained?

24. subtract:

(A) 6 0 0 (B) 8 4 5 (C) 9 5 4

25. the Graph Below Shows 4 Primary Two Pupils Who Bought Pancakes From the Canteen.



Mutete Babirye Jesse Kato

(A) How Many Pancakes Did Kato Buy?

(b) Who Bought Three Pancakes?

(c) Who Bought the Biggest Number of Pancakes?

(D) How Many Cakes Did Jesse and Mutete Buy Altogether?

**** The End. ****