



SHALOM PRIMARY SCHOOL.2020

CLASS: PRIMARY THREE

SUBJECT: MATHEMATICS

Name: Stream:

SECTION A

1. Add $5 + 5 =$

2. Write 46 in words.

3. Name the set.



4. Divide $10 \div 2 =$

5. How many items make a pair?

6. Subtract $\frac{7}{7} - \frac{3}{7} =$

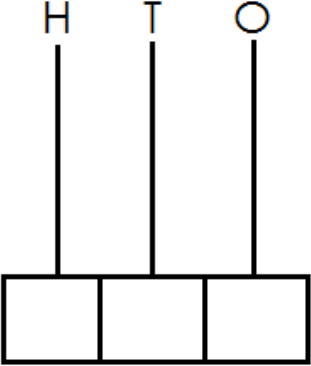
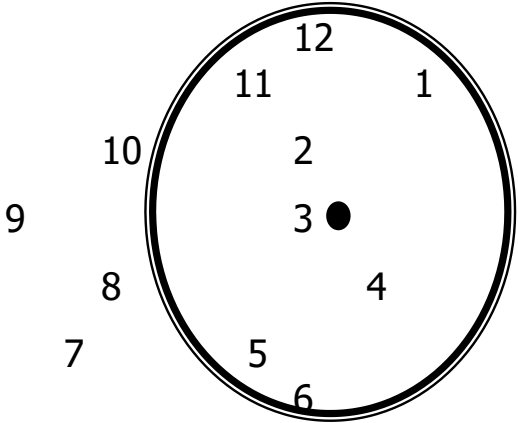
7. Complete
 $96 =$ _____ tens _____ ones.

8. Shade $\frac{2}{4}$

9. Multiply

$$\begin{array}{r} 31 \\ \times 3 \\ \hline \end{array}$$

10. Draw a rectangle.

<p>11. Show 413 on the abacus.</p> 	<p>12. How many days make a week?</p> <p>13. Work out</p> $ \begin{array}{r} 254 \\ + 130 \\ \hline \\ \hline \end{array} $
<p>14. Write in full. Sun. _____</p>	<p>15. Put the time on a clock face. 3 o'clock.</p> 
<p>16. What number comes after 56?</p> <p>_____</p>	
<p>17. Find the missing number</p> $\square + 4 = 9$	
<p>18. One pencil costs sh.200. What is the cost of 4 pencils?</p>	

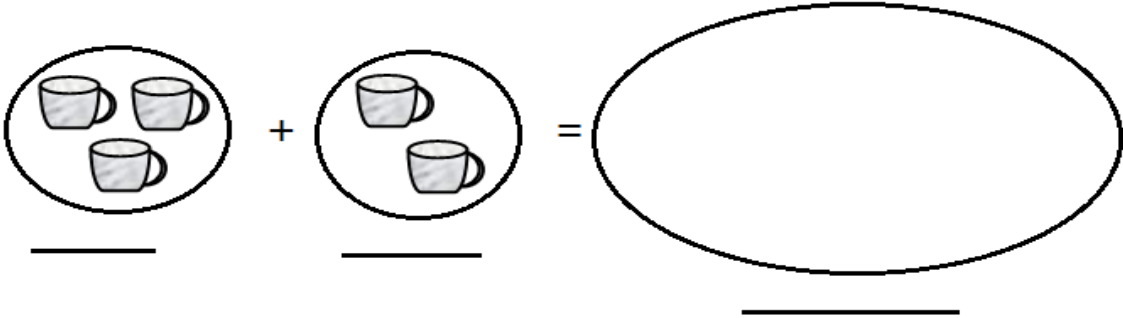
--	--

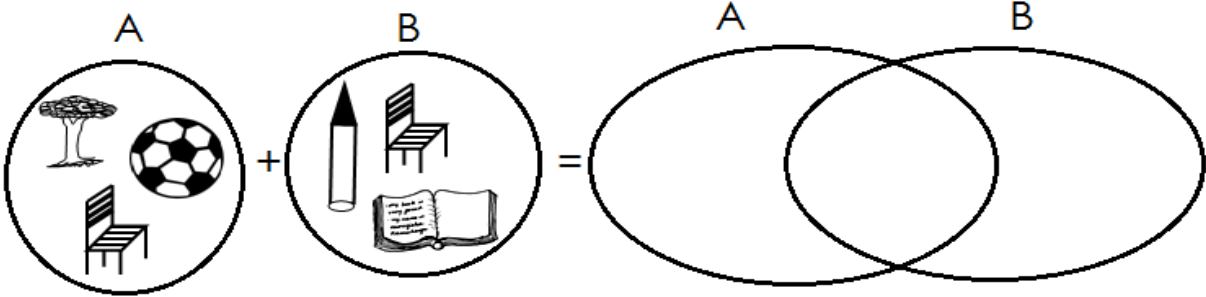
19. Mr. Mukasa bought 25 chairs, 13 chairs got broken. How many chairs remained?

20. Which is heavier?
 $\frac{1}{2}$ kg of rice or $\frac{1}{4}$ kg of sugar

SECTION B

21. Join the sets. (3 marks each)

a) 


b) 

22. Add (2 marks each)
 a) $3\text{kg} + 2\text{kg} = \underline{\hspace{2cm}}$

b)
$$\begin{array}{r} 4 \text{ 3 metres} \\ + 2 \text{ 4 metres} \\ \hline \end{array}$$
 c)
$$\begin{array}{r} 2 \text{ 5 6} \\ + 3 \text{ 2 8} \\ \hline \end{array}$$

23. Complete

(2 marks)

a)  _____ tens _____ ones = _____

b) Expand (2 marks)

$$263 = \underline{\hspace{2cm}} + \underline{\hspace{2cm}} + \underline{\hspace{2cm}}$$

c) _____ = 4 hundreds + 4 tens + 9 ones

(1 mark)

24(a) Martin has 136 hens. Mary has 231 hens. How many hens do they have altogether? (2 marks)

b) Multiply (2 marks)

$$\begin{array}{r} 230 \\ \times 3 \\ \hline \\ \hline \end{array}$$

25. Add

a) $\frac{2}{8} + \frac{1}{8} + \frac{3}{8} =$ (2mks) b) $\frac{5}{10} + \frac{4}{10} =$ (2mks)

c) Shade (1mk)



26. Use taller or shorter to complete each)

(2 marks)



Amina

Jamira

a) Amina is _____ than Jamira.

b) Jamira is _____ than Amina.

27. Write in words.

(2 marks each)

a) $\frac{1}{2} =$

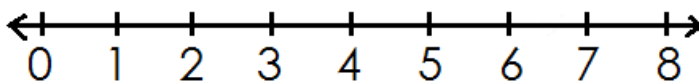
b) Shs. 5 =

c) 222 =

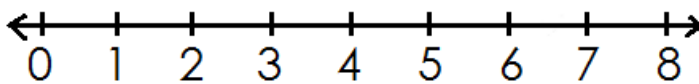
28. Work using a number line.

(2 marks each)

a) $3 + 4 =$

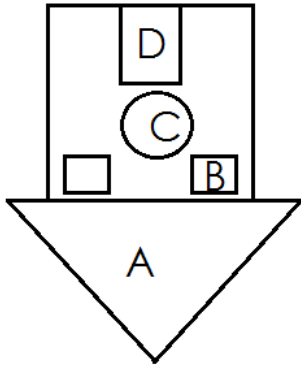


b) $7 - 4 =$



29. Name the shapes.

(marks each)



A _____
B _____
C _____
D _____

30. Write the place values

(2 marks each)

a) 1 7
└───

b) 9 3 0
└───

c) 5 8 7
└───

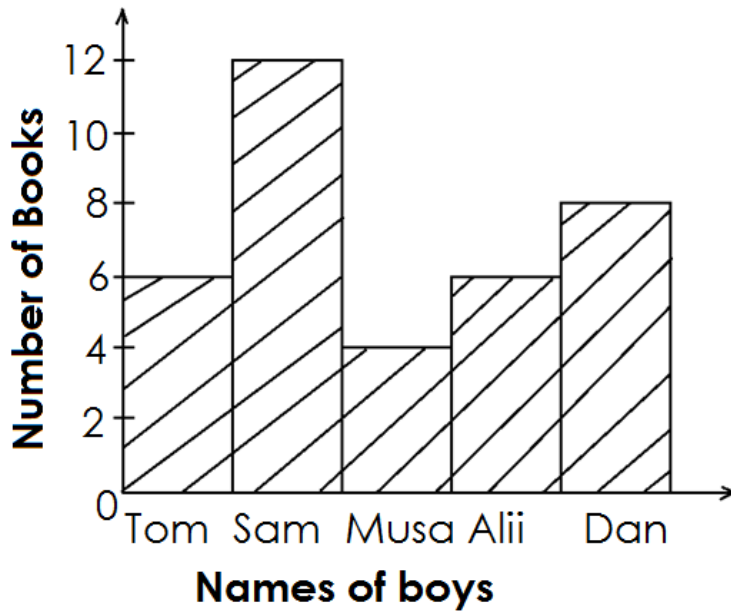
31. Fill in the missing numbers.

(1 mark each)

a) 0, 2, 4, 6, _____, _____, 12.

b) 5, 10, 15, _____, 25, _____.

32. Study the graph below and use it to answer questions.
Five boys collected books.



a) How many books did Dan collect? (1 mark)

b) Who collected the highest number of books? (1 mark)

c) Who collected the same number of books? (2 marks)

d) How many books were collected by Musa? (1 mark)

