



END OF TERM III TOP CLASS EXAMINATION
MATHEMATICAL CONCEPTS

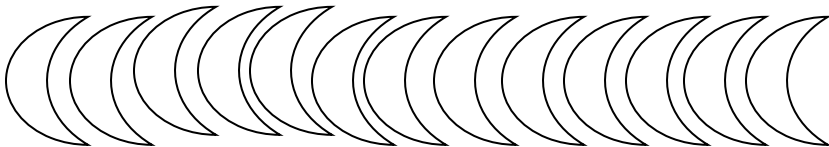
My Name is _____

Date: _____

1. Count and write in words







2. Write the number before

_____, 15

_____, 10

_____, 7

_____, 27

_____, 27

_____, 11

_____, 50.

3. Addition in words

One + two = _____

nine + five = _____

eight + three = _____

four + thirteen = _____

4. Addition of numbers

$3 + 2 + 4 = \square$


$9 + 2 + 3 = \square$

$9 + 7 = \square$

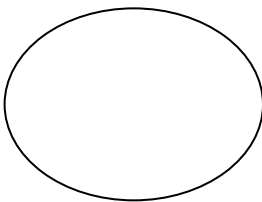
$$\begin{array}{r} 2 \\ 4 \\ + 6 \\ \hline \hline \end{array}$$

$$\begin{array}{r} 8 \\ 2 \\ + 1 \\ \hline \hline \end{array}$$

5. Match these shapes



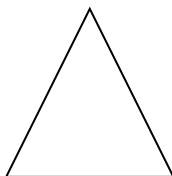
triangle




Square



zig-zag



rectangle



circle


6. Read and draw the pictures

six chairs

eleven sticks

one table

6. Fill in the missing number ordinals

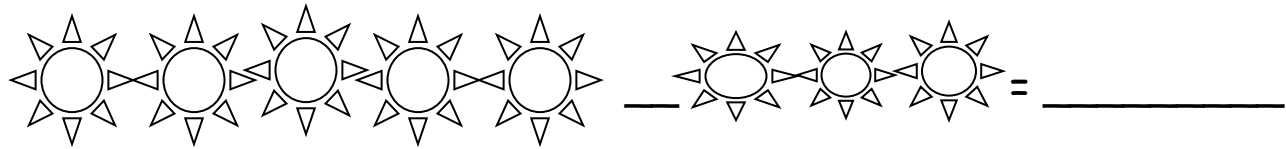
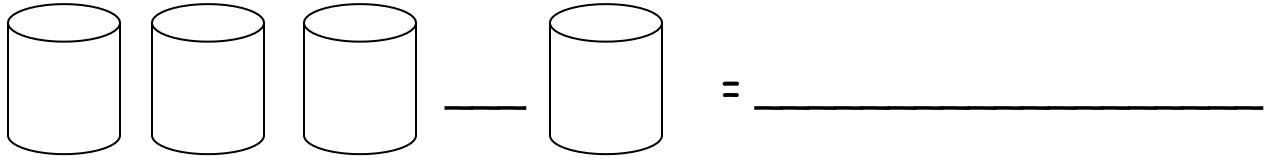


7. Write in words

11 _____ 19 _____

15 _____ 20 _____

8. Take away objects



9. Name these sets.

A set of 2 chairs

10 Read and draw

A big ball _____

A small ball _____

A big fish _____

11. Take away

$20 - 10 =$ _____ $4 - 2 =$ _____

$17 - 6 =$ _____ $11 - 7 =$ _____

$9 - 6 =$ _____ $0 - 0 =$ _____

.....MERRY CHRISTMAS.....