

MID - TERM III (2011) EXAMS

NUMBERS FOR BABY CLASS.



NAME: _____

1. Listen and write the number.

(a) _____ (b) _____

(c) _____ (d) _____

2. Add the objects.






3. Draw the sticks for the number.






(a) 4

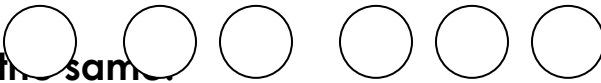
(b) 3 =

(c) 6 =

4. Read the number and shade.

2 =   

3 =     

4 = 

5. Match the same.

10

14

11

12



12

10



13

11

6. Fill in the missing numbers.

1  3  5

2  4  6

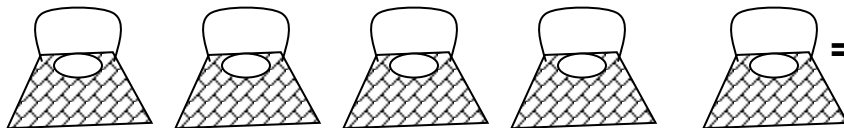
3  5  7

7. Count and write the number.



=

=



8. Add these:

1 + 1 =

2 + 3 =

2 + 4 =

3 + 4 =

****The End.****