


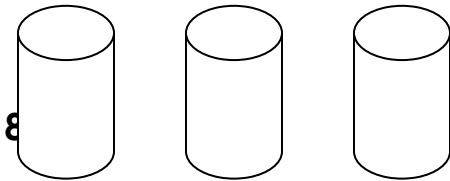
**Mid – Term 2 (2012) Exams**  
**Numbers for Top Class.**

**Name:**

**A. 4 = 5 =**



**B. count and Match to the Number.**




7

3



**C. read and Draw.**

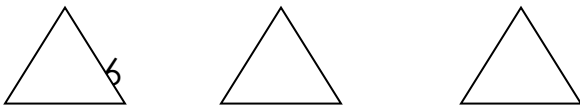
**3 Balls 6 Girls 4 Flowers**



**D. fill in the Missing Numbers.**

**1 3 5 7**

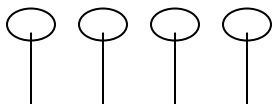

10 12 14



**E. circle the Smaller Number.**

**3 And 5 7 And 1 4 And 8**

**F. match the Sets.**

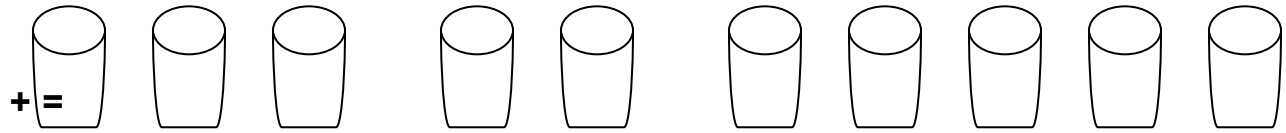


c C C C C C C

**G. count and Fill in the Number.**

+ =

+ =




+ =

+ =

+ =

**H. add the Objects.**

+ =



**I. add the Numbers.**

**3 + 2 = 4 + 3 =**

7 6

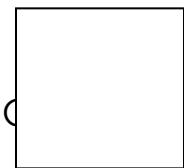
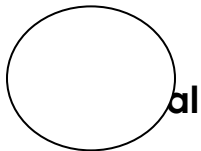
**J. name the Sets.**

**This Is a Set of 3**

This Is a Set of 4

**(Books, Pots, Cups, Flowers)**

**K. match the Shapes.**



**\*\* The End. \*\***