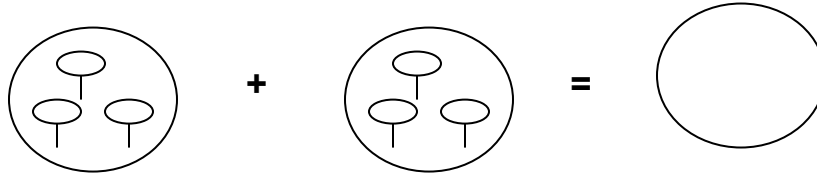
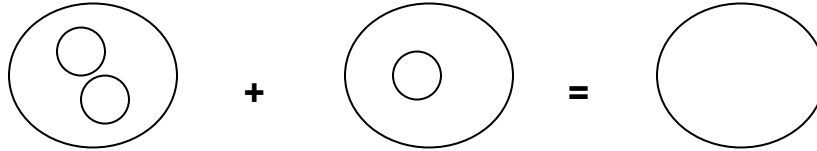


MID - TERM III (2011) EXAMS

NUMBERS FOR TOP CLASS.

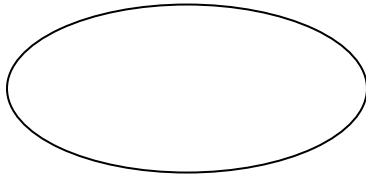
NAME: _____

1. Add objects.

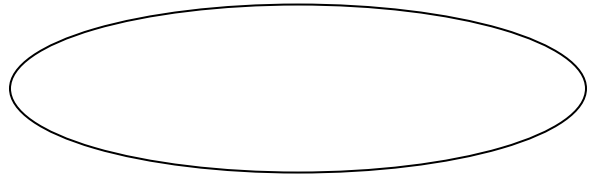


2. Read and draw the sets.

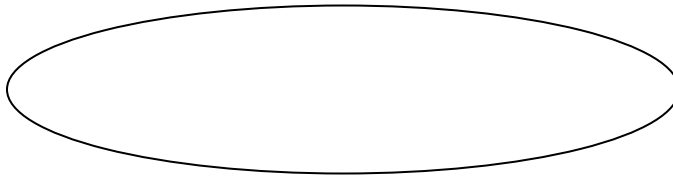
A set of three flowers.



A set of six chairs.



A set of four fish.



3. Match objects to numbers.

C C C C C C C

3

7

4

6

4. Add these:

$$5 + 5 =$$

3

3

$$\begin{array}{r} + 3 \\ \hline \end{array}$$

$$3 + 4 + 5 =$$

5

$$\begin{array}{r} + 9 \\ \hline \end{array}$$

5. Read and add these:

One plus one equals _____

Three plus four equals _____

Two plus zero equals _____

6. Complete these numbers.

1, 2,

11, 12,

24, 30

7. Take away.

$$4 - 2 =$$

$$8 - 3 =$$

7

$$\begin{array}{r} - 2 \\ \hline \end{array}$$

1 0

$$\begin{array}{r} - 5 \\ \hline \end{array}$$

8. Read and write the number.

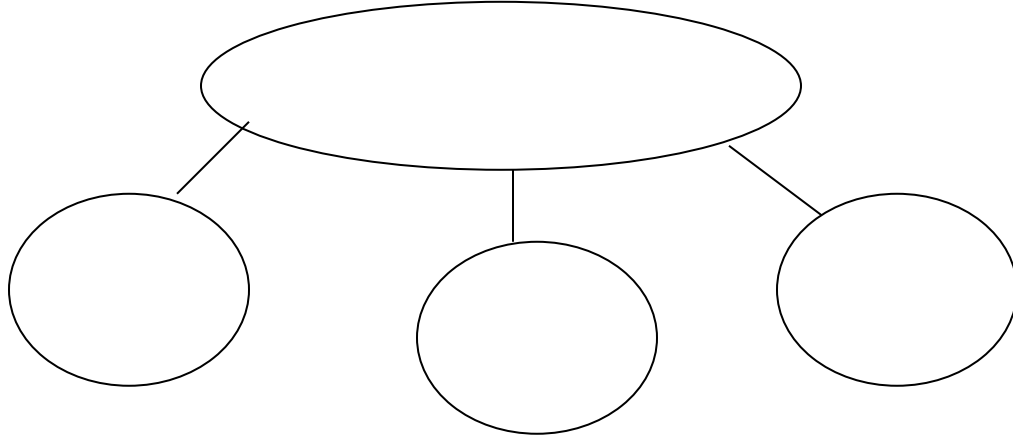
five = _____

fourteen = _____

eighteen = _____

seven = _____

9. Make new sets and name them.



10. Circle the smaller number.

4 and 9

16 and 5


11. Read and draw these shapes.


Triangle


Square


Kite

12. Read and answer correctly.

Ali 

Tom 

Tina 

Rose 

- (a) How many balls has Tom?
- (b) Ali hasballs.
- (c) Tina and Rose haveballs altogether.
- (d) Who has more balls?

(e) They haveballs altogether. ****The End.****