

MID – TERM III (2012) EXAMS
NUMBERS FOR TOP CLASS.

NAME: _____

1. Write in words:

1 = _____ 9 = _____

6 = _____ 5 = _____

2. Arrange in order from the smallest.

4 3 5 _____

8 7 6 _____

14 15 13 _____

3. Draw pictures to show:

a triangle

three balls

a rectangle

4. Fill in the missing numbers.

6 7 8

12, 13, , , 16.

, 10, 11, 13.

5. Count and write the number.

6. Read and write the number.

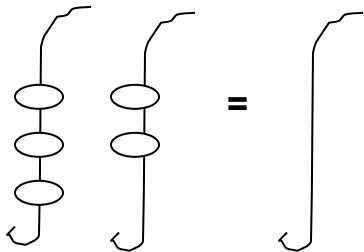
Ten

eight

twenty

twelve

7. Add these:



$$1 + 3 = \boxed{}$$

$$\begin{array}{r} 8 \\ + 2 \\ \hline \end{array}$$

$$\begin{array}{r} 0 \\ + 0 \\ \hline \end{array}$$

One plus five equals _____

8. Join the dots in order of numbers

five

seven



nine

six

eight

9. Take away:

(a) _____ - _____ = _____

(b)  -  = _____

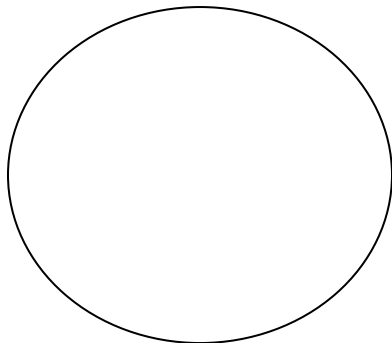
(c) $7 - 7 =$ _____

$$\begin{array}{r} 8 \\ - 2 \\ \hline \end{array}$$

(d) Five take away three equals _____


11. Tell the time:

(a)



It is _____ o'clock.

(b)



It is _____ o'clock.

