

END OF 1ST TERM EXAMS
MATHS FOR BABY CLASS.

NAME: _____

1. **Copy:**

4	1	3	6

2. **Match the same.**

5

8

2

7

7

5

8

2

3. **Circle the odd man.**

9

7

9

5

5

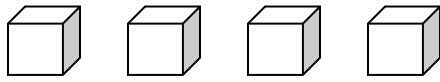
3

0

10

10

4. **Count and match.**



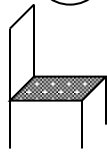
1



5



4

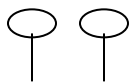


3

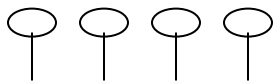
5. **Count and write the number.**



=



=

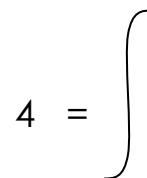
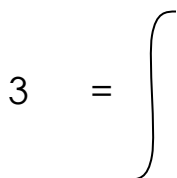
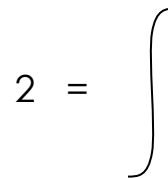
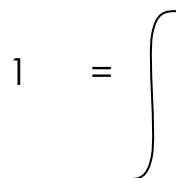


=



=

6. **Draw beads.**



7. **Read these numbers.**

0

1

2

4

**** The End. ****