

Numbers for top class 2011 -EOY-

1. **My name is** _____

2. **Add these:**

$2 + 4 =$

$3 + 0 =$

$2 + 1 + 4 =$


$6 + 4 + 2 =$

$$\begin{array}{r} 3 \quad 1 \\ + 2 \quad 4 \\ \hline \end{array}$$


$$\begin{array}{r} 4 \quad 0 \\ + 3 \quad 1 \\ \hline \end{array}$$

3. **Read and draw.**


two cups



six balls.



eight apples



4. **Group them in;**

2s ○ ○ ○

3s C C C C C C

○ ○ ○

C C C C C C

There are _____ groups of twos.

There are _____ groups of threes.

5. **Multiply these:**

$2 \times 2 =$

$3 \times 2 =$

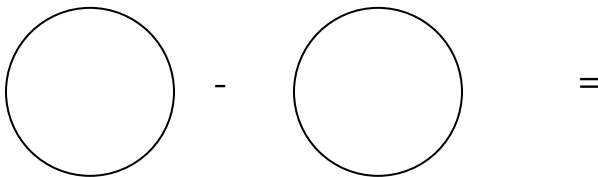
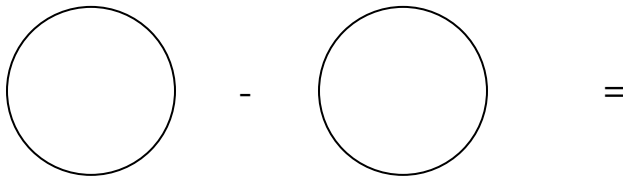
$4 \times 2 =$

$2 \times 1 =$

6. Match number words.

seven	0
sixteen	14
three	7
fourteen	16
zero	3

7. Take away objects.



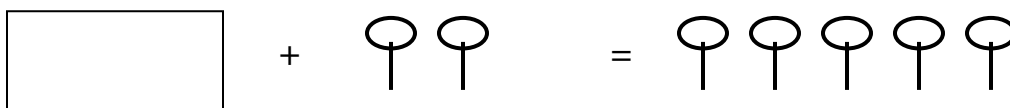
8. Subtract:

$6 - 2 =$

$8 - 3 =$

$$\begin{array}{r} 10 \\ - 5 \\ \hline \end{array}$$

9. Fill in the missing objects.



(b) Fill in the missing numbers.

$2 + \square = 5$

$7 + \square = 10$

$4 + \square = 4$

$\square + 3 = 7$

10. Read and add.

2 balls plus 3 balls equals _____ balls.

5 balls plus 4 balls equals _____ balls.

6 balls plus 6 balls equals _____ balls.

11. Fill in the missing numbers.

1 3 5

13 15 17 19

41 43 45 47

**** The End. ****