

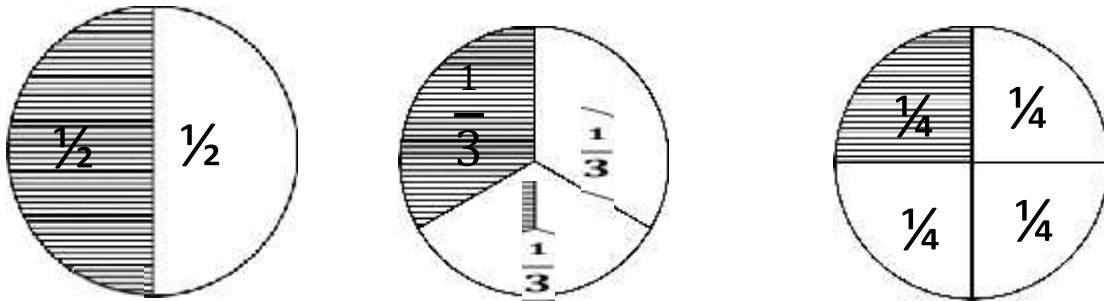


HORMISDALLEN SCHOOLS RECESS PACKAGE, 2020 PRIMARY THREE

P.3 PROJECT WORK

Comparing fractions using “greater than” or “less than”

1. Trace and cut circles of the same size. Then circle them as shown below.



Extract one piece from the divided circle and compare them

- a) $\frac{1}{2}$ is _____ $\frac{1}{3}$
- b) $\frac{1}{4}$ is _____ $\frac{1}{3}$
- c) $\frac{1}{3}$ is _____ $\frac{1}{6}$

Making shapes

2. Get hard boxes and cut out the shapes below;
 - i) Circle
 - ii) Square
 - iii) Rectangle
 - iv) Star

P.3 MATHEMATICS SET TWO

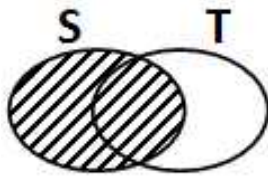
SECTION A

1. Work out: 85

$$\begin{array}{r} 85 \\ - 32 \\ \hline \end{array}$$

2. Find the value of the underlined digit in the number $7\text{ 3 }04$.

3. Describe the shaded region on the Venn diagram below.



4. Write “three thousand forty two” in figures.

5. If  has 4 legs. How many legs do 3 tables have?

6. Subtract: $\frac{5}{7} - \frac{3}{7}$


7. Write XV in Hindu Arabic numerals.

8. Find the two numbers in the sequence.
230, 235, 240, _____, _____, 255, 260.

9. What name is given to the third month of the year?

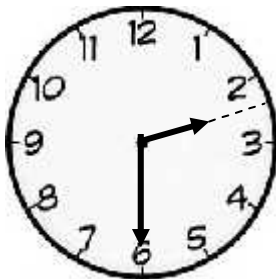
10. Write in short: $700 + 60 + 5$

11. Multiply:
$$\begin{array}{r} 56 \\ \times 3 \\ \hline \end{array}$$

12.  costs sh. 1500. What is the cost of 3 similar cups?

13. Set K is a set of cows with two legs. List the members of set K.

14. Tell the time



15. What is the difference between 90 and 35?

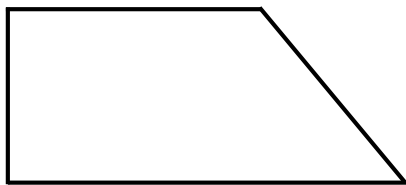
16. The height of Kato is 160cm and the height of Wasswa is 175cm.
Who is taller?

17. Divide: $3 \overline{)69}$

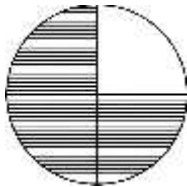
18. Fill in the box correctly.

$$\square - 10 = 20$$

19. Name the shape below.



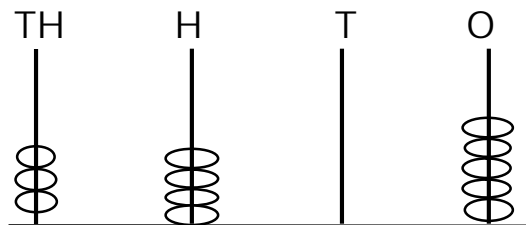
20. Write is the shaded fraction in words



SECTION B

21. a) Add: 3 tens + 4 ones.

b) What number has been shown on the abacus?

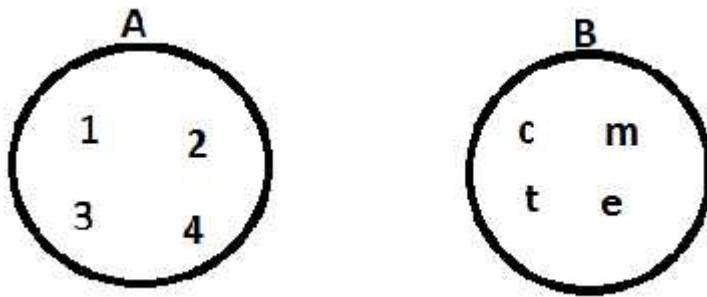


c) Write the number shown on the abacus in words.

d) Expand the number above.

22. a) Draw a set of six balls in the space below.

b) Use equivalent or non-equivalent



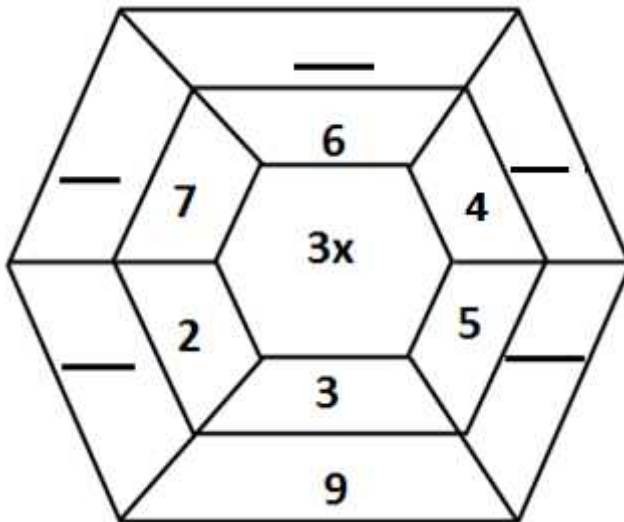
i. Set A is _____ to set B

ii. List the elements in set B.

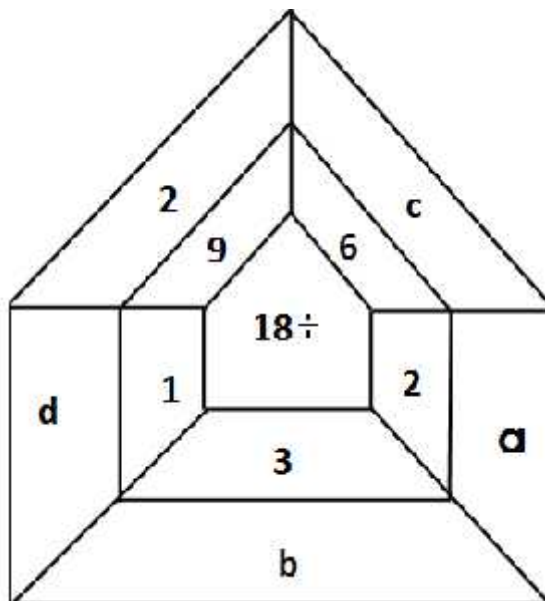
iii. Find $n(A)$

23. Find the missing numbers.

a)



b)



a _____

b _____

c _____

d _____

24. a) Which number comes just before 80?

b) Fill in the missing.

i. 15, 17, _____, _____, 23, 25, _____

ii. 340, 350, _____, _____, 380, 390, _____

25. Study the shopping bill below and use it to answer the questions.

Teddy went and bought the following items;

3 sweets each at sh. 200

1 tin of ice cream at sh. 1500

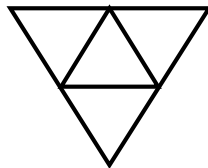
2 books each at sh. 500

a) How much money did she pay for 2 tins of ice cream?

b) Find the cost of 2 books and 3 sweets.

c) If Peter sh 1000 and bought a sweet and a book, how much money did he remain with?

26. a) How many triangles can you see?



b) Draw the shapes below.

Trapezium	Rectangle	Cone

27. Use +, -, x or ÷ to complete the statement.

i. $12 \underline{\hspace{1cm}} 3 = 4$

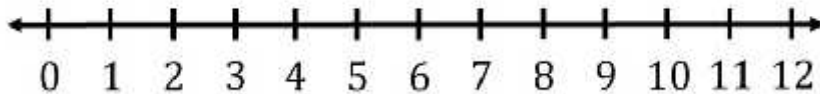
ii. $3 \underline{\hspace{1cm}} 7 = 21$

iii. $9 \underline{\hspace{1cm}} 5 = 4$

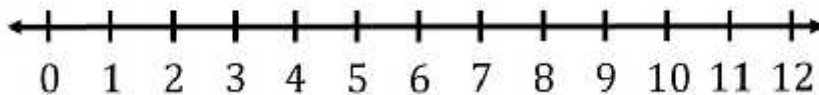
iv. $13 \underline{\hspace{1cm}} 2 = 15$

28. Use the number line to work out the following;

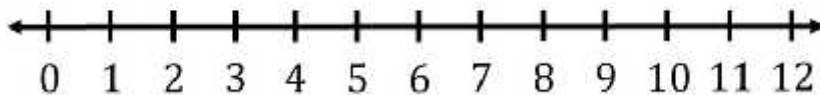
i. $5 + 3$



ii. $5 - 3$



iii. 5×3



29. Complete the following;


a) $16 \div \square = \square$

$8 \times 2 = \square$

$\square \div 8 = \square$



_____ stools of _____ legs = _____ legs.



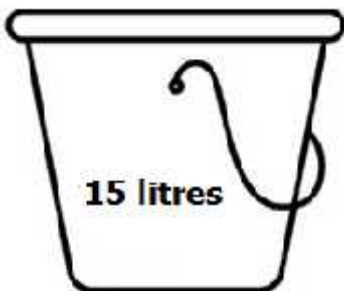
i. There are _____ groups of _____ boys.

ii. _____ x _____ = _____

30. a) Simplify 3 goats + 2 goats + 4 goats.

Study the containers below carefully;

Container A



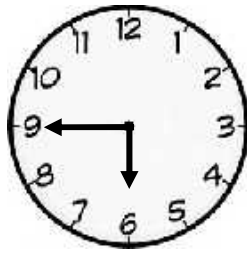
Container B



b) Which container holds more water?

c) Find the total number of litres in the two containers.

31. a) What is the time on the clock face below?







It is _____

b) Add: week Days

$$\begin{array}{r} 1 \quad 3 \\ + 4 \quad 2 \\ \hline \end{array}$$

c) Share 132 sweets among 6 children.

32. Study the graph and answer the questions that follow.

Ethan	
Joel	
Hellen	
Ssali	

a) Who has the highest number of eggs?

b) Write the names of children who have the same number of eggs.

c) How many eggs does Joel have?

d) How many eggs do Hellen and Joel have altogether?

e) How many more eggs does Ssali have than Joel?

LITERACY TWO SET TWO

SECTION A

1. How is the tongue useful to man?

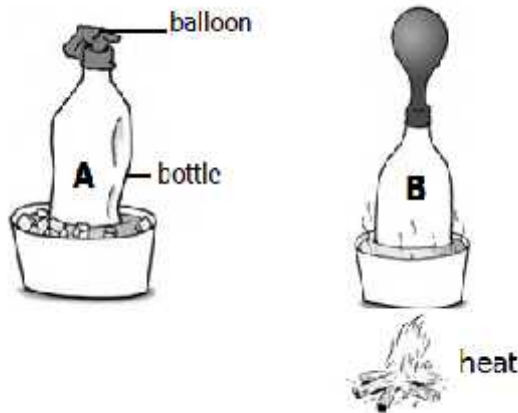
2. Mention one activity done by children at home to keep the compound clean.

3. How does wearing of shoes promote good health?

4. Why are we advised to boil water for drinking?

5. Which part of sugarcane is eaten by man?

6. Name the property of air below.



7. State one way people manage cold weather.

8. Mention any one characteristic of living things.

9. Why is a toilet useful in a school?

10. Write any one example of health giving food.

11. Why do we bathe?

12. Why is it bad to play with broken bottles?

13. State one main natural source of light.

14. Why are gills important to a fish?

15. Why do P.3 pupils cut their finger nails short?

16. Define environment.

17. Suggest any one reason why soil is important to man.

18. Name any one item made from clay.

19. In which way is a trash bin important in the headteacher`s office?

20. Name any one factor of weather.

21. a) Write any one characteristics of each type of soil
i. Sandy soil _____
ii. Clay soil _____
iii. Loam soil _____
b) Mention any one use of soil to man.

22. a) Mention any two childhood immunisable diseases.
i. _____
ii. _____
b) In which two ways can parents help children below 5 years to fight against immunisable diseases?
i) _____
ii) _____

23. a) In space below draw and name three dangerous objects found at school.

b) How can a P.3 pupil prevent injuries in a home?

24. a) Define first aid.

b) Mention any two reasons why we give first aid to casualties.

i. _____

ii. _____

c) How is a cotton gauze useful during the administering first aid.

25. Match the following correctly.

A

Snake

Chameleon

Fish

Bat

Snake _____

Chameleon _____

Fish _____

Bat _____

B

flying

swimming

gliding

crawling

26. a) Mention any two things you use to keep your body clean.

i) _____ ii) _____

b) How do we call the rooms for;

i) bathing? _____

ii) cooking food? _____

27. a) Give one material from which soil is made.

b) Mention the type of soil which has the;

i) finest particles _____

ii) roughest particles _____

c) How is water important in the soil?

28. a) Mention any two man made sources of water.

i) _____ ii) _____

b) Suggest any two ways how water sources can be protected from being contaminated.

i. _____

ii. _____

30. a) Name one activity done during rainy season.

b) How is an umbrella useful to man during rainy weather?

c) Suggest any two ways how rain is useful to man.

i. _____

ii) _____

31. Use the diagram below and answer the questions that follow.



a) Name the crop store drawn above

b) How is the part marked **P** useful to the crop store?

c) Mention any two crops that are stored in the store above.

i) _____ ii) _____

P.3 LITERACY ONE SET TWO

SECTION A

1. Name the longest river in Uganda.

2. Who heads a municipality?

3. Name the mineral obtained from Lake Katwe.

4. State any one way of controlling soil erosion in hilly areas.

5. Mention any one example of fish caught from lakes and rivers.

6. Which local language is spoken by the Banyoro?

7. Who assists the head teacher at school in his or her absence by title?

8. Write U.P.E in full.

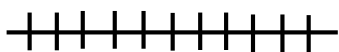
9. State any one way in which police officers keep law and order.

10. Give one way a drum was useful to the people of long ago.

11. What are economic activities?

12. How many members make up LCI committee?

13. Write the meaning of the symbol below.



14. Write any one material used to construct a tarmac road.

15. State any one man made source of water.

16. Mention any one element of a good map.

17. Which official area is weather and its changes studied and recorded from?

18. Give one group of road users you know.

19. Draw and name any one item made by a potter.



20. In which season do farmers plant their crops?

21. Name any one animal used for transport.

22. What do we call the stories of long ago?

23. State any one duty of K.C.C.A to the people of Kampala.

24. Give any one use of a radio to people.

25. Mention one product obtained from milk.

26. How was fire useful to early man?

27. State why food is regarded as a basic need of man.

28. Mention any one activity done by children at home.


29. Give any one state of weather.

30. Write any one product got from cotton.

31. Name any one example of a social service centre found in your area.

32. State any one problem faced by people living in urban centres.

33. Draw and name any one local means of communication.



34. How are lakes and rivers important to people in your area?

35. Write down any one example of a domestic bird kept by people.

36. **Either:** Which term is used to mean the special way of talking to God?

Or: Which Islamic term means a prayer?

37. **Either:** In which town was Jesus born?

Or: In which town was Prophet Muhammad born?

38. **Either:** From which material was Adam created?

Or: According to the scriptures, who created Adam and Haawa?

39. **Either:** Which prayer did Jesus teach His apostles?

Or: Name the prayer Muslims perform on Friday.

40. **Both:** Give one reason why people pray to God/Allah.

SECTION B

41. **Complete the table below.**

Tribe	Cultural leader by title
Baganda	_____
_____	Kyabazinga
Batooro	_____
_____	Omukama

42. a) What is the difference between a map and a picture?

b) State two similarities between a map and a picture.

i. _____

ii. _____

c) Draw a map of a table in the space below.



43. a) Write down any two responsibilities of a child at home.

i) _____


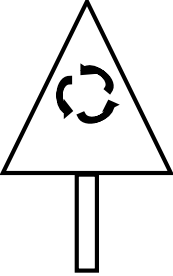


ii) _____

b) Mention any two examples of activities that should be done by a child at home.

i) _____

ii) _____

44. Name these road signs.

			
_____	_____	_____	_____

45. a) What are physical features?

b) List down any three examples of physical features.

i) _____ ii) _____

iii) _____

46. a) Write in full: KCCA

b) State any three duties of KCCA.

i) _____

ii) _____

iii) _____

47. Draw the following map symbols.

Dam	Swamp	Hill	Bridge

48. a) State one role played by L.CI committee members in your area.

b) Which member of the LCI committee is in charge of children's affairs? _____

c) Apart from the member mentioned above, list down any other two members on the LCI committee.

i) _____

ii) _____

49. a) Give two examples of legends you know.

i) _____

ii) _____

b) State any one reason why legends are taught to pupils.

c) Which legend is commonly taught among the Baganda?

50. a) Give two examples of children`s rights.

i) _____

ii) _____

b) State any two ways children`s rights can be promoted in your area.

i) _____

ii) _____

Answer either Christianity or Islam but not both in a number.

51. **Either:**

a) Write any four apostles of Jesus Christ.

i) _____ ii) _____

iii) _____ iv) _____

Or:

a) Give any two things given as zakat in the mosque.

i) _____ ii) _____

b) Mention any two people who qualify to get zakat.

i) _____ ii) _____

52. **Either:**

a) For how long do Christians fast?

b) Name the period when Christians carry out fasting.

c) Which day marks the beginning of fasting in Christianity?

Or:

a) For how long do muslims fast?

b) Name the period when Muslims carry out fasting.

c) Write the term used to mean fasting in Islam.

d) Why do Muslims practice fasting?

53. **Either:** Name any four prophets in the Bible.

i) _____ ii) _____

ii) _____ iv) _____

Or:

a) Name any four prophets in the Quran.

i) _____ ii) _____

ii) _____ iv) _____

54. **Either:** Mention the four gospel books in the holy Bible

i) _____ ii) _____

ii) _____ iv) _____

Or: Write the four holy books used in Islam.

i) _____ ii) _____

ii) _____ iv) _____

55. **Both:**

a) Give any four reasons why people pray to God/Allah

i. _____

ii. _____

iii. _____

iv. _____