



HORMISDALLEN SCHOOLS RECESS PACKAGE, 2020 PRIMARY THREE

LITERACY ONE SET FOUR SECTION A

1. What name is given to a place where things of long ago are kept?

2. Draw a map symbol of a forest.



3. Name one social service centre you know.

4. Why is a market an important place to people in our community?

5. What is the staple food for Baganda?

6. Mention any one wood fuel used in your area.

7. Name the major source of clay.

8. Why do we need a police post in our village?

9. Which bank prints and issues new currency?

10. Write NEMA in full.

11. What is the use of a wall clock in your classroom?

12. Why are wetlands important to people living around them?

13. State one problem people face in villages.

14. Draw and name any one item made out of wood.



15. Why is Kampala city having many people?

16. Mention one television station you know.

17. Why is it that there are few Ugandans reading newspapers daily?

18. Give one reason why a Local council I committee is important in our community.

19. What is a resource?

20. State any one importance of water at school.

21. Give any one use of vegetation to people.

22. Which other name can be used to mean physical features?

23. Name the first animal to be tamed by early man.

24. State one example of records.

25. Give one use of culture to people in our community?

26. Why is a P.3 pupil called a child?

27. How do people misuse their money?

28. Give one group of wrong doers.

29. What is deforestation?

30. Apart from banks, name any other place where people can keep money.

31. In which district is Uganda's International airport located?

32. State one way parents have benefited from UPE programme in schools.

33. How can morals be promoted among pupils in a school?

34. Why is Kasubi tombs an important site to Buganda kingdom?

35. Give any one example of a perishable trade item.

ISLAMIC RELIGIOUS EDUCATION

36. According to Islamic beliefs, who was the last messenger of Allah?

37. Why do muslims put all their faith in prophet Muhammad?

38. State one way a muslim can care for Allah's creation.

39. What is Ramadhan?

40. How can a P.3 child show love to his or her parents?

SECTION B

41. a) State any two rights of children.

i) _____

ii) _____

b) Give one way child abuse can be controlled in our communities.

c) Write down one effect of child abuse.

42.a) Write down two ways people destroy natural vegetation

i) _____

ii) _____

b) State two ways of conserving vegetation.

i. _____

ii. _____

43.a) Mention one raw material used to make;-

i) baskets _____

ii) shoes _____

b) State any one importance of crafts to people.

c) Name any one source of palm leaves in your area. _____

44. a) Write in full: UWEC

b) Give the role played by each body below.

i) NFA

ii) NEMA

iii) UWA

45. How are these resources useful to people:-

a) Trees ?

b) Land ?

c) Water ?

d) Money ?

46. a) What are basic needs?

b) Give any one basic need for a family.

c) State any one problem faced by family members due to lack of money.

d) Mention any one activity that can be carried out by family members to earn money.

47. a) Why do people marry?

i) _____

ii) _____

b) Which type of marriage is presided over by church leaders?

c) Name any other type of marriage existing in your community.

48. a) What is fuel?

b) Mention any three examples of fuel.

i) _____ ii) _____

iii) _____

49. a) Give any two requirements needed to start a project.

i) _____ ii) _____

b) Why do people set up projects?

c) How can one manage a project?

50. a) What name is given to written information about an event?

b) Why do people keep written information?

c) Identify two items people spend money on wisely.

i) _____

ii) _____

RELIGIOUS EDUCATION

51. a) Write down two pillars of Islam.

i) _____

ii) _____

b) Draw and name two body parts muslims wash before prayers.

52. a) Mention two groups of people who are not supposed to fast.

i) _____

ii) _____

b) How long does fasting for muslims take?

c) How is Ramadhan important to muslims?

53. a) **Match correctly**

Aswir 6:00 a.m.

Ishae 1:00 p.m.

Zuhuri 4:00 p.m.

Subuhi 8:00p.m.

Aswir _____

Ishae _____

Zuhuri _____

Subuhi _____

54.a) What is a sin?

b) State any one example of a sin.

c) What should people do after sinning?

d) What does Allah do to sinners who repent?

55.a) Name the creature that tricked Haawa to sin.

b) How did Adam and Haawa annoy Allah?

c) What punishment did Allah give these people after sinning :-

i) Adam ?

ii) Haawa ?

LITERACY TWO SET FOUR

SECTION A

1. Mention one product of bees.

2. Give any one group of living things.

3. State any one use of trees to people.

4. What is a seedling?

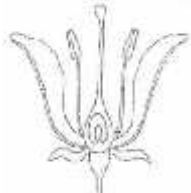
5. How does a fish move?

6. Write down the gas seeds use to germinate.

7. Give one example of an animal whose body is covered by fur.

8. Mention one dangerous object that can pierce.

9. Name the part of a plant shown below.



10. Why is loam soil the best for crop growth?

11. State any one importance of crop rotation.

12. Name one common disease of man.

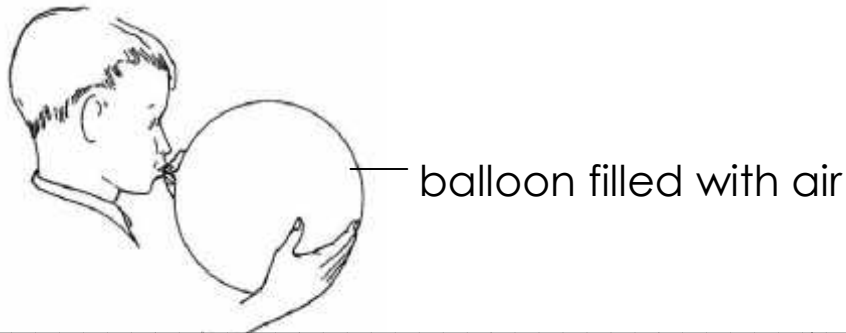
13. Identify one animal that has more than six legs.

14. Why is a spider not regarded as an insect?

15. How can people care for their garden tools?

16. Why do bees visit flowers?

17. Which property of air is shown in the diagram below?



18. Which sense organ helps people to know that an object is hot?

19. What are weeds?


20. State one practice that can be done to promote body hygiene.

21. Give one characteristic of plants.

22. What is personal hygiene?

23. Write P.H.C in full.

24. Name this way of preserving food.



25. How are candles and bulbs useful in a home?

26. Which vitamin do we get from the early morning sunshine?

27. State one way of conserving energy.

28. Why do people save energy?

29. Write one characteristic of insects.

30. Give one example of a plant that is first grown in a nursery bed.

31. Why do parents take their children for immunization?

32. Write down the importance of stomata to plants.

33. Define a shadow.

34. Outline any one sign of a child suffering from kwashiorkor.

35. How do animals depend on people?

36. How are teeth important to animals?

37. What do we call the covering of top soil with dry plant materials?

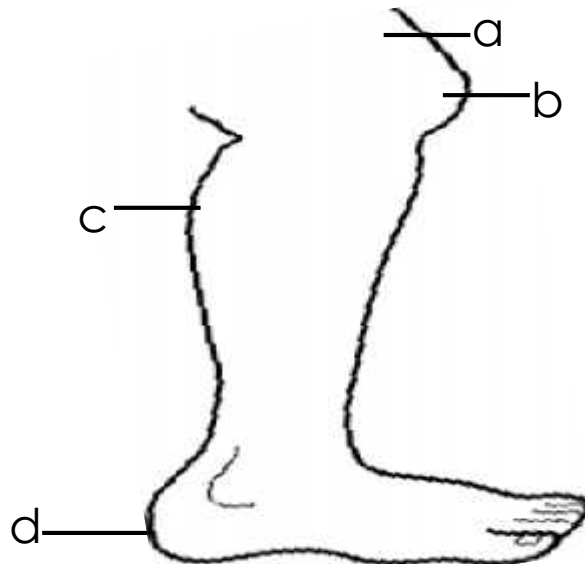
38. How are seeds useful to people?

39. Why do plants climb others?

40. Give any one natural cause of change in the environment.

SECTION B

41. Name the parts of the leg marked with letters.



a _____

b _____

c _____

d _____

42. a) a) What is mulching?

b) Suggest any two uses of mulching the garden.

i) _____

ii) _____

c) Mulching is a good crop practice. Give one reason why it may be dangerous.

43. Outline any two physical exercises.

i) _____

ii) _____

b) Mention one item P.3 pupils can use for skipping.

c) Why do people perform physical exercises?

44. a) Mention any two aspects of weather.
i) _____ ii) _____
b) Which element of weather makes people wet?

c) Which weather instrument is used to measure the amount of rainfall received in an area?

45. a) Give any two examples of trees in the environment.
i) _____ ii) _____
b) Mention two items made from bees.
i) _____ ii) _____
46. a) Give two forms of energy got from the sun.
i) _____ ii) _____
b) State any one example of a planet.

c) Suggest one danger of too much sunshine.

47. a) Rusting is dangerous to the environment. Name two requirements necessary for rusting to take place.
i) _____ ii) _____
b) Leah placed a nail in a tin filled with water and left it for some three days. What do you think happened to the nail ?

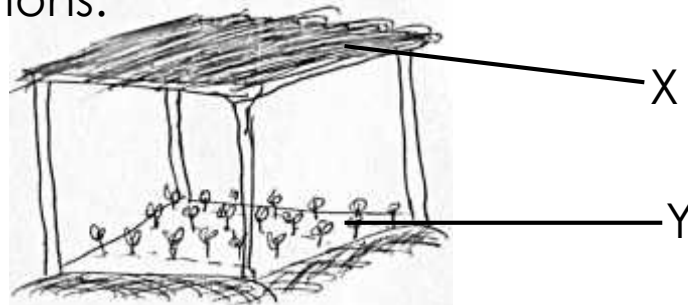
c) How can garden tools be prevented from rusting?

48. a) Give two examples of seeds eaten by man.
i) _____ ii) _____

b) Suggest two conditions required for a seed to germinate.

i) _____ ii) _____

49. Study the diagram below and answer the questions.



a) Name the type of garden above.

b) What name is given to the young plants marked Y?

c) Give the importance of part marked X to the plants.

d) How can P.3 pupils care for the young plants in the diagram?

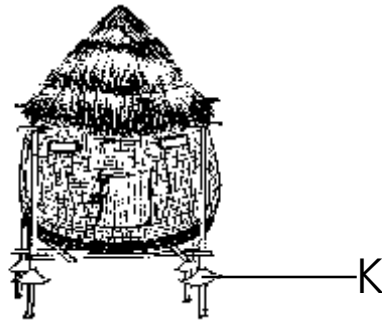
50.a) What do we call a place where seeds are first planted to grow into seedlings before being taken to the main garden?

b) Mention any two crops that can be planted in a nursery bed.

i) _____ ii) _____

c) Which garden tool is used for transplanting seedlings?

51. Below is a crop store. Use it to answer the questions.



a) Name the crop store above.

b) How is the crop store above important to crop farmers?

c) Give the use of part labelled **K** to the crop store in the diagram.

d) Mention one crop that can be kept in that crop store.

52. a) What is the difference between vectors and germs?

b) Identify the diseases spread by these vectors.

i) water snails _____

ii) tsetse flies _____

iii) rabid dogs _____

53. a) Malaria is common in people. Name any one other disease spread by mosquitoes.

b) How can P.3 pupils protect themselves from mosquito bites while sleeping at night?

c) How can malaria be controlled in our homes?

d) Where do mosquitoes lay their eggs?

54. a) What is a balanced diet?

b) State any one factor that may lead to lack of food in a home.

c) Mention one nutritional deficiency disease caused by poor feeding.

d) How can marasmus be controlled in children?

55. Study the diagram below and answer questions that follow.



a) Name processes marked S and R.

S _____

R _____

b) What title should be given to the above diagram?

c) Name the type of clouds formed at **G**.

P.3 ENGLISH SET FOUR

Fill in the missing letters

1. e__e__h__nt
2. b__r__s
3. l__ __v__s
4. s__al__
5. l__o__s

Complete the following sentences with a suitable word.

6. The man is pointing _____ the sun.
7. Mary goes to town _____ taxi.
8. The sun rises _____ the east.
9. We use our eyes to _____.
10. A _____ makes good furniture.
11. The house is _____ fire.
12. The visitor is knocking _____ the table.
13. The baby is crying _____.
14. A _____ repairs machines.
15. A pilot _____ aeroplanes.
16. The old man is walking _____ the rain.
17. One by one makes a _____.

Write the singular forms of the given words.

18. oxen _____
19. teeth _____
20. sheep _____
21. furniture _____
22. pianos _____

Write the opposite of the underlined word.

23. I came late today. _____
24. My knife is sharp. _____
25. My father has bought a new car. _____
26. This is a short tree. _____
27. Lake Victoria is shallow. _____
28. The cow is feeding its young one. _____
29. The ewe and its lambs are lost. _____
30. The sow is in the sty. _____
31. That lady is very rich. _____
32. My nephew is graduating today. _____

Write one word for the underlined group of words.

33. A person who sells meat is here.

34. My mother has gone where vehicles are repaired.

35. A dog and its youngone are in a kennel.

36. John has gone to a place where many trees are growing together.

37. The house of a lion is very clean.

38. The house of a cow is smelling.

Complete the following correctly.

39. as hot as _____
40. as brave as _____
41. as green as _____
42. as good as _____
43. as gentle as _____

Use the following in sentences to show that you understand their meaning.

44. hut _____
45. hurt _____
46. see _____
47. sea _____

Fill in the blanks with the correct word from the brackets.

48. This box is _____ heavy. (two, too)
49. You should not _____ on the bench. (right, write)
50. We all crossed the _____. (sea, see)
51. Can you take your _____ please? (sit, seat)
52. Mary lives _____. (their, there)
53. Brendah has lost her _____. (site, sight)

Underline the adjectives in the following sentences.

54. The day is very hot.
55. Jane runs very fast.
56. That girl is beautiful.
57. The old woman is very kind.
58. We have a fat baby.

Use the adjective given in the brackets correctly.

59. Sarah is _____ than her sister. (thin)
60. Joan is a _____ girl. (lazy)
61. January is _____ than February. (hot)
62. May I have _____ food? (much)
63. She has the _____ handwriting. (good)
64. A king is the _____ person on the earth.
(happy)
65. We did the _____ work. (easy)
66. Paul's work is the _____. (bad)

Write a small word from a big word.

67. carpenter _____
68. workshop _____

Complete the table given correctly.

- | | | |
|---------------|----------------|----------|
| 69. fat | _____ | fattest |
| 70. _____ | better | _____ |
| 71. beautiful | more beautiful | _____ |
| 72. _____ | _____ | heaviest |
| 73. lazy | lazier | _____ |

Join the sentences as instructed in the brackets.

74. Lule is clean. Kato is dirty. (Join using ... but ...)

75. I have a box. I have a pen. (Join using ... and ...)

76. Grace is a girl. Jemimah is a girl. (Begin: Both)

77. This is the boy. His pen is lost.(Join using ... whose ...)

78. This is the shop. It caught fire.(Join using ...which ...)

79. **Read the poem and answer the questions in full sentence.**

Mother rain, Mother rain
Clouds are seen first in the sky
Strong wind blows away everything
Little water drops are seen
So funnily she comes.

She washes away the dust
She washes away the top soil layer
She leaves the land bear
She destroys the crops
Farmers cry
So funnily she does it.

Questions:

a) What is the poem about?

b) What is seen first in the sky?

c) What does the strong wind do?

d) What happens to the dust?

e) How much drops of water are seen?

f) What happens to the top soil layer?

g) Why does the farmer cry?

h) How many stanzas does the poem have?

i) Give the best title to the poem.

j) Write a small word from 'farmer'

80. **Choose a word from the box and fill in the gap correctly.**

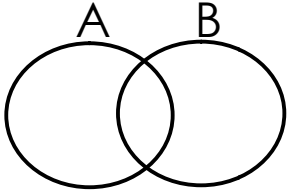
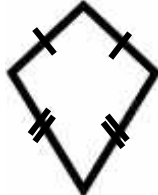
Clouds cover the sun in the _____ and make it _____. When the sky is covered with clouds, we call it a _____ weather. It is not _____ or hot. There is no _____ blowing in the atmosphere.


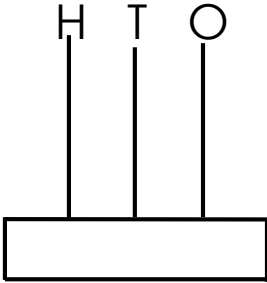
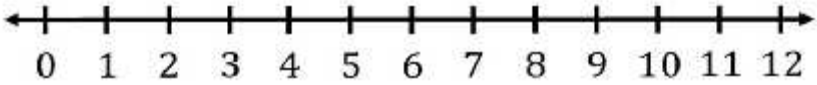
There are different types of _____ namely _____ cirrus, stratus and cumulus clouds. As the clouds are important in different ways but the _____ is nimbus clouds _____ it provides us with _____.

**rain, cold, dark, because, clouds, wind
most, sky, cloudy, nimbus**

MATHEMATICS SET FOUR

SECTION A

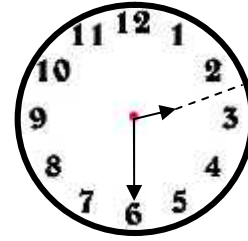
1.	Add: $\begin{array}{r} 1 \quad 1 \\ + \quad 4 \\ \hline \end{array}$	2.	Write XX in Hindu Arabic numerals.
3.	Shade set A on the Venn diagram below. 	4.	Find the next number in the sequence. 18, 16, 14, 12, _____
5.	Find the value of 4 tens.	6.	Name the shape drawn below.  _____
7.	Which number comes just after 49 ?	8.	What is the place value of the underlined digit in $3 \underline{9} 4$?
9.	Share 15 mangoes among 3 boys. How many mangoes will each boy get ?		

<p>10. Betty weighs 18kg and Ronald weighs 20kg. Who is heavier?</p>	<p>11. Subtract:</p> <table style="margin-left: auto; margin-right: auto;"> <tr> <td style="padding-right: 20px;">Wks</td> <td>Days</td> </tr> <tr> <td style="text-align: center;">4</td> <td style="text-align: center;">5</td> </tr> <tr> <td style="text-align: center;">- 1</td> <td style="text-align: center;">2</td> </tr> <tr> <td colspan="2" style="text-align: center;"><hr style="width: 100%;"/></td> </tr> <tr> <td colspan="2" style="text-align: center;"><hr style="width: 100%;"/></td> </tr> </table>	Wks	Days	4	5	- 1	2	<hr style="width: 100%;"/>		<hr style="width: 100%;"/>	
Wks	Days										
4	5										
- 1	2										
<hr style="width: 100%;"/>											
<hr style="width: 100%;"/>											
<p>12. How many curved lines does the figure have?</p> 	<p>13. Given that Set $D = \{p, a, t, e, l\}$ Find $n(D)$</p>										
<p>14. Find the missing number.</p> <p><input type="text"/> $\times 2 = 8$</p>	<p>15. Write in short.</p> <p>$3000 + 600 + 70 + 2$</p>										
<p>16. Represent 215 on the abacus below.</p> 	<p>17. Subtract:</p> <table style="margin-left: auto; margin-right: auto;"> <tr> <td style="padding-right: 20px;">km</td> <td>m</td> </tr> <tr> <td style="text-align: center;">7</td> <td style="text-align: center;">500</td> </tr> <tr> <td style="text-align: center;">- 2</td> <td style="text-align: center;">200</td> </tr> <tr> <td colspan="2" style="text-align: center;"><hr style="width: 100%;"/></td> </tr> <tr> <td colspan="2" style="text-align: center;"><hr style="width: 100%;"/></td> </tr> </table>	km	m	7	500	- 2	200	<hr style="width: 100%;"/>		<hr style="width: 100%;"/>	
km	m										
7	500										
- 2	200										
<hr style="width: 100%;"/>											
<hr style="width: 100%;"/>											
<p>18. Use the numberline below to workout $5-2 =$</p> 											

19. Name two body parts we use to measure length.

- i) _____
ii) _____

20. What is the time ?



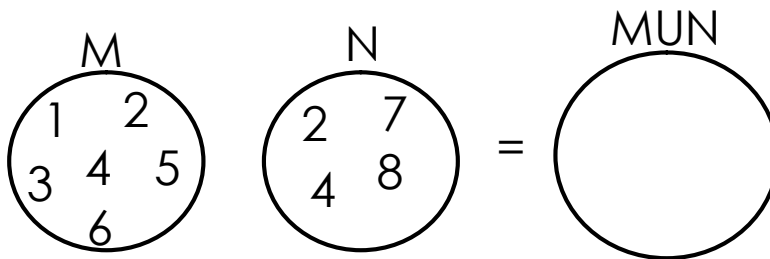
SECTION B

21. Match the following.

- $2 + 3$
 3×2
4
 $8 - 6$
 $9 \div 3$

- 2
IV
5
3
6

22. a) Join these sets.



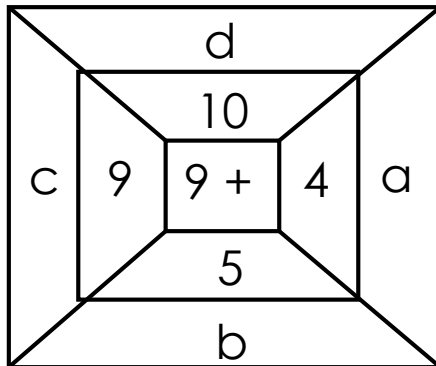
b) How many elements are common in both set M and set N ?

23. a) Add:

$$\begin{array}{r} 284 \\ + 012 \\ \hline \end{array}$$

b) There are 45 pupils in P.3 class. 18 of them are girls. How many boys are in P.3 class?

24. Find the missing numbers.



a =

b =

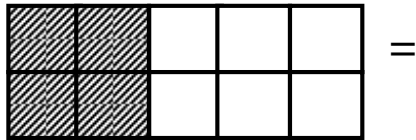
c =

d =

25. a) Take away $\frac{3}{8}$ fr $\frac{7}{8}$

b) John walked $\frac{3}{7}$ of the journey and ran $\frac{2}{7}$ of it. What fraction of the journey did he cover?

c) Name the shaded fraction.



26. a) Name the last month of the year.


b) Fill in the missing months of the year.

i) January, _____, March

ii) _____, May, June, _____

iii) August, September, _____,
November, December

27. a) Complete correctly.

i)  _____ tens _____ ones

ii) 4798 = _____ hundreds _____ tens _____ ones

iii) 5 hundreds 2 tens 8 ones = _____

b) Find the value of 4 in each number.

a) 5492

b) 43

c) 4987

28. Name these set symbols.

a) \cup _____

b) \cap _____

c) \emptyset _____

d) $=$ _____

e) \longleftrightarrow _____

29. Match correctly.

Pentagon 2 weeks

A third 5 sides

A year $\frac{1}{3}$

Fortnight 3 sides

A triangle 12 months

30. a) Subtract 22 from 656






b) There are 43 pupils in P.3W, a teacher gave 3 sweets to each pupil. How many sweets did the teacher give out?

31. a) Draw a zigzag line below.




b) How many straight lines does the figure below have?

32. Five primary three children went to the market and bought cups as shown on the graph below.

Name	Number of cups
Ronald	
Rayan	
Davis	
Mary	
Joshua	

a) Who bought the least number of cups?

b) Who bought the same number of cups?

c) If  costs shs. 500. How much money did Joshua spend on buying cups?

d) How many cups did they buy altogether?

