



HORMISDALLEN SCHOOLS RECESS PACKAGE - 2020

P.4 SOCIAL STUDIES

Project work

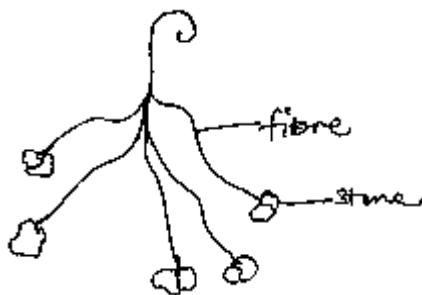
Using materials got from the environment, namely;

- Sticks
- Fibre
- Cardboards
- Manilla paper
- Stones

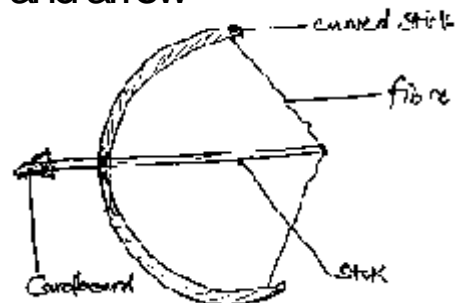
Make the following tools used by the earlyman during the process of hunting.

a)

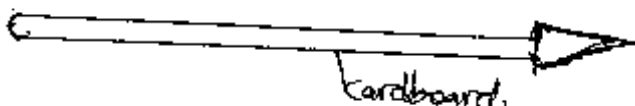
b) Bolas



b) Bow and arrow



c) spear



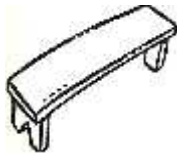
Note:

Make the tools of reasonable sizes and bring them on the reporting day to school.

P.4 SOCIAL STUDIES (SET ONE)

Section A

1. Draw a map of the object below.



2. Apart from Kalangala, name any other island district of Uganda.

3. Point out one way people destroy forests in your community.

4. State any one problem faced by crop growers in our community.

5. Mention any one symbol of a school.

6. Give one danger of wind to people.

7. Why does sugarcane grow well in swampy areas?

8. Point out any one discovery of earlyman.

9. Write UBC in full.

10. Name the deepest lake in Uganda.

11. How are forests useful to carpenters in your community?

12. Which type of electricity is used by most people in our district?

13. State the role of the secretary for defence on a Local Council Committee.

14. Give any one importance of shadows to people.

15. What social service is provided at any given taxi park?

16. Name the mineral mined from the shores of lake Albert.

17. Mention any one modern method of preserving fish.


18. Apart from keeping security, give one other importance of dogs at home.

19. Why is shelter said to be a basic need?

20. Mention the original homeland of the Bantu who are living in Uganda today.

21. Why is milk regarded as a perishable good?

22. Kabaka is to Baganda as _____ is to the Banyoro.
- 23. Draw and name the state of weather that helps farmers in winnowing.**



24. Mention the legend associated by Acholi people.
-
25. What is swamp drainage?
-
-
26. Suggest one cause of urban – rural migration in Uganda today.
-
27. Write down the main duty of the Uganda Police.
-
28. Name the river in Uganda that attracts very many tourists.
-
29. Mention one symbol of a clan.
-
30. Why are class rules important to a P.4 pupil?
-
31. State one problem faced by people living in highland areas of Uganda.
-
32. What is deforestation?
-
-
33. Give any one example of a poultry product.
-
34. Why are newspapers rarely used as a means of communication in rural areas?
-
35. State any one effect of child abuse to people in our community.
-

For questions 36 – 39, answer either Christianity or Islam but not both in a number.

36. **EITHER:** What is lent?

OR: What name is given to the fasting period for Muslim believers?

37. **EITHER:** Who is believed to be the grandfather of all believers?

OR: Name the prophet who built the Holy Kaaba according to the Quran.

38. **EITHER:** Point out one reason why Cain killed his brother Abel according to the Bible.

OR: Give one reason why Prophet Muhammed left Mecca for Medina.

39. **EITHER:** Name the first book in the Old Testament.

OR: Mention the first Surah of the Quran.

40. **ALL:** Give one practice that is common between Christians and Muslims.

SECTION B

41. (a) Give any one role of the traffic police in our district.

(b) State any two causes of road accidents.

i) _____

ii) _____

(c) How is a zebra crossing important to pedestrians?

42. (a) Give the use of a scale to a map reader.

(b) Apart from a scale, mention any other two elements of a map.

i) _____

ii) _____

(c) Which element of a map is known as its heading?

43. (a) What are physical features?

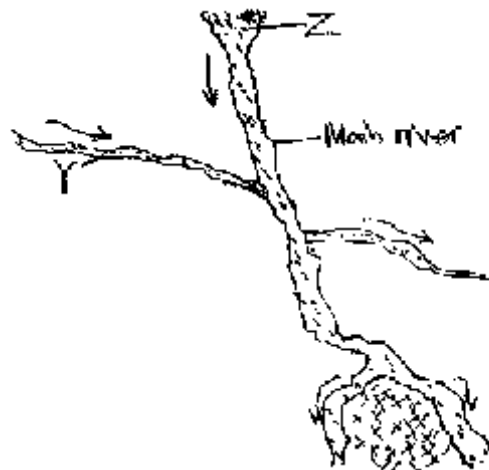
(b) Mention any one group of physical features found in our district.

(c) Give two importance of physical features to people in our communities.

i) _____

ii) _____

44. Use the diagram below to answer the questions that follow.



(a) Identify the sections of the river labelled Y and Z

Y _____
Z _____

(b) Why is it dangerous to settle along river banks?

(c) Point out one economic activity that can be carried out on rivers like the Nile.

45. (a) What are traditional cash crops?

(b) Give any two examples of traditional cash crops grown in our district.

i) _____
ii) _____

(c) Point out one importance of farming to the people in your community.

46. (a) Mention any two ways the earlyman used to obtain food.

i) _____
ii) _____

(b) **Draw the following tools of the earlyman.**

Bone needle	Bolas

47. (a) Give any one reason why the government introduced UPE programme in schools countrywide.

(b) Write down any one way parents have benefited from UPE programme in schools.

(d) Which form of education was introduced in Uganda by the missionaries?

(e) Name any one social service centre providing education in Uganda.

48. **Match the following items correctly.**

List A

Bakiga

Bahima

Lugbara

Karimojong

List B

Nilo Hamites

Sudanic people

Bantu

Hamites

a) Bakiga

b) Bahima

c) Lugbara

d) Karimajong



49. (a) Give the meaning of the term 'trade'.


(b) State any two reasons why people carry out trade.

i) _____

ii) _____

(c) State any one problem faced by traders.

50. (a) **Draw a map symbol for a plateau.**



(b) Point out any two economic activities carried out by people living on the plateau.

i) _____

ii) _____

(c) Apart from a plateau, name any other relief feature found in our district.

For questions 51 – 54, answer either Christianity or Islam but not both in a number.

51. EITHER:

(a) Write down any two gifts of the Holy Spirit.

i) _____

ii) _____

(b) Give any two ways in which we can use gifts of the Holy Spirit to serve the Almighty God.

i) _____

ii) _____



OR:

(a) Write down any two gifts that Allah gave you.

i) _____

ii) _____

(b) Give two ways in which we can use our gifts to serve Allah.

i) _____

ii) _____

52. EITHER:

(a) Name two symbols in Christianity.

i) _____

ii) _____

(b) State any two importance of symbols among Christians.

i) _____

ii) _____

OR:

(a) Mention any two symbols used in Islam.

i) _____

ii) _____

(b) Draw any one symbol used by Muslims in the space below.



(c) State any one importance of symbols in Islam.

53. EITHER:

(a) According to the scriptures, who is a Prophet?

(b) Name any two Prophets in the Bible.

i) _____

ii) _____

(c) Write down any one duty of prophets.

OR:

(a) Give the meaning of the word 'Prophet'.

(b) Name any two Prophets in Islam.

i) _____

ii) _____

(c) Write down one duty of Prophets.

54. EITHER:

(a) Name the mountain where the Ten Commandments were received by Moses on Mt. Sinai.

(b) Write down any three of the Ten Commandments that were given to Moses by God.

i) _____

ii) _____

iii) _____

OR:

(a) Mention any two of the five pillars of Islam.

i) _____

ii) _____

(b) Give any one importance of the pillars among Muslims.

(c) State any other duty of an Imam in the Islamic faith besides leading prayers in a Mosque.

55. FOR ALL

(a) Who is a friend?

(b) Write down any two qualities of a good friend.

i) _____

ii) _____

(c) State any one way you can care for your friend.
