



HORMISDALLEN SCHOOLS RECESS PACKAGE - 2020

P.4 SST (SET THREE)

SECTION A

1. Which direction is your shadow in the morning while facing the north?

2. Point out any one method of controlling soil erosion in hilly areas.

3. Name the line of latitude marked 0° on the globe.

4. Which colour is used to represent water bodies on a map?

5. Give any one example of an economic activity carried out in your area.

6. Name any one district in Uganda found in Lake Victoria.

7. Mention the raw material used in making the craft below.



8. Name the type of electricity generated from fast flowing water.

9. The Uganda flag has three colours, black, yellow and red. Which one represents brotherhood?

10. Mention any one example of a natural disaster.

11. Why is the government of Uganda creating many districts countrywide?

12. How can people benefit from the nearest commercial banks?

13. State any one way security is kept at school.

14. Mention the local language spoken by the Iteso.

15. Give any one example of a drainage feature found in your community.

16. Mention any one cause of road accidents.

17. Write the use of a radio at home.

18. Mention the best weather condition for winnowing dry harvested seeds.

19. Why do few people use air transport in Uganda?

20. Name the district where we find the international Airport of Uganda.

21. Identify any one domestic animal used for transport.


22. Which element of a map measures the actual ground distance found on a map.

23. Why do people visit hospitals?

24. Name any one mountainous district in Uganda.

25. In which way are floods dangerous to people?

26. Mention the body in charge of protecting swamps in Uganda today.

27. What does the map symbol below represent?


28. What is altitude?

29. Around which landforms is orographic rainfall commonly received?

30. Mention the major lake in your district.

31. Apart from pilots, mention any one other group of people who use a compass in their work.


32. Write down one role of a bursar at school.

33. Mention any one example of leaders in your school community.

34. Write UBC in full.

35. Give one use of commercial banks to people in your area.

36. Draw and name one road sign you know.



37. Give one thing that make up culture.

38. State one cause of child abuse to the community.

39. Suggest any one use of grass to farmers.

40. Which social service is provided by Mulago referral hospital?

SECTION B

41. a) What are social activities?

b) Write down any two examples of social activities besides naming children.

i) _____

ii) _____

c) State any one value of social activities to people.

42. Match the following correctly.

A

Head of state

Bishop

Headteacher

Sub-county chief

B

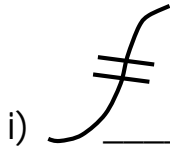
Institutional leader

Accounting officer

regional leader

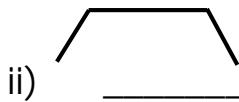
political leader

43. Name the following symbols used on maps.



_____ (iii)





_____ (iv)



44. Match the following weather instruments to their uses.

i) Six's thermometer

- measures atmospheric pressure

ii) Rain gauge

- measures the lowest and highest temperature of a place.

iii) Barometer

- shows direction of wind.

iv) Windvane

- measures the amount of rainfall received.

i) Six's thermometer _____

ii) Rain gauge _____

iii) Barometer _____

iv) Windvane _____

45. a) Name any two cardinal points of a compass.
 i) _____ (ii) _____
 b) Which compass direction is directly opposite to Northwest?

 c) If Peter was facing South and then turned 90° anti-clockwise, what was his new direction?

46. a) Name the social service that can be provided from the sickbay at your school.

 b) Write down any two duties of a child at school.
 i) _____
 ii) _____
 c) How does the school benefit the community?

47. a) Who is the current Inspector General of Police in Uganda?

 b) Name the ministry which is responsible for the activities of the police force in Uganda.

 c) Give two ways the police officers maintain law and order.
 i) _____
 ii) _____
48. a) In the space below, draw and name any two road signs you know;
- | | |
|--|--|
| | |
| | |
- b) Suggest any two ways road accidents can be controlled in Uganda.
 i) _____
 ii) _____
49. a) What is weather?

b) State any two states of weather.

i) _____

ii) _____

c) Which element of weather causes floods in our environment?

50. a) Write down any one type of family.

b) Mention any one role of a family head.

c) Suggest any two causes of family misunderstandings.

i) _____

ii) _____

For questions 51-54, answer either Christianity or Islam BUT not both in a number.

51. a) Either: What did God create last?

b) For how many days did God create the universe?

c) Write down any two punishments God gave Adam for disobedience.

i) _____

ii) _____

Or: a) What is an evil?

b) Name the evil Adam and Hawa did against Allah.

c) How did Allah punish the following people for disobedience?

i) Adam _____

ii) Hawa _____

52. Either: a) Write down the first four books in the Holy Bible.

i) _____ iii) _____

ii) _____ iv) _____

Or:

a) Write down the four Holy books used in the Islam.

i) _____ iii) _____

ii) _____ iv) _____

53. Either a) What is a prayer?

b) Which prayer did Jesus teach the apostles?

c) State any two reasons why Christians pray to God.

i) _____

ii) _____

Or:

a) What name is given to the daily prayer said by Muslims before sunrise?

b) Mention any one condition that can spoil one's prayer in Islam.

c) Give any two importance of prayers to Muslims.

i) _____

ii) _____

54. Either: a) What is a church?

b) Write down any two activities that take place in churches.

i) _____

ii) _____

c) Give any one Christian denomination existing in our community.

Or:

a) What do we call a process of reminding Muslims time for prayers.

b) Give one reason why Muslims go to the mosque on juma day.

c) Write down any two activities that take place in a mosque.

i) _____

ii) _____

55. FOR ALL:

a) List down any three examples of religious leaders in our community.

i) _____

ii) _____

iii) _____

b) Write down any one quality of a good leader.
