

NAMAGUNGA PRIMARY BOARDING SCHOOL

REVISION SET II (JUNE 2020)

PRIMARY FOUR - SCIENCE

Time allowed: 2 hours 15 minutes

Name:

Stream: Date:

INSTRUCTIONS:

1. This paper is made up of two sections; A and B
2. Answer all questions carefully
3. A good handwriting is expected.
4. Unnecessary crossing may lead to loss of marks.
5. Read the questions carefully before answering.

SECTION	EXAMINER'S MARK	HOD'S MARK
A		
B		
TOTAL		

SECTION A

1. Name any one component of a first aid kit.


2. Mention the insects whose habitat is the anthill

3. How are accidents dangerous to human life?

4. State any one class of food

5. Name the sense organ for feeling

6. Draw a garden tool used to harvest cereals



7. Of what importance is lateral line to a fish?

8. Apart from being a habitat, state any one other importance of a web to a spider

9. How can a P.4 child take care of domestic animals at home?

10. Which immunisable disease causes lameness in infants?

11. Give one reason why it is important to boil water before using it for drinking

12. Apart from bathing, mention any other one way of maintaining personal hygiene.

13. State the main function of a flower to a plant.

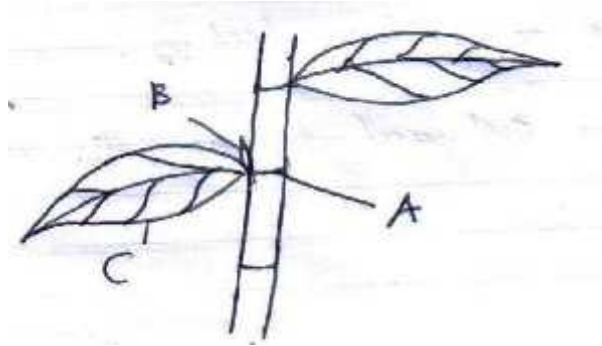
14. Name one natural source of light in the environment

15. State one product farmers obtain from rabbits

16. Name any one example of a perennial crop

17. Why do animals move from one place to another?

The diagram below shows a part of a stem, use it to answer questions 18 and 19.



18. Name part labelled A

19. Write one part of a plant that grows from part B

20. Which type of weather favours the planting of crops?

21. Mention one activity carried out to promote sanitation at home.

22. State one way in which food gets contaminated.

23. Name are crop commonly grown in swamps.

24. Mention any one type of leaf found in plants.

25. Why are farmers encouraged to keep their garden tools in a dry place?

26. State any one sign of pest attack on a plant.

27. Mention one method of preparing food.

28. Which type of crops has seeds in pods and root nodules?

29. Why is it important to sundry the beddings regularly?

30. Name the body organ which enables us to remember things.

31. Give the meaning of the word "wind".

32. State one danger of too much rain to people.

33. Why is a cow grouped under living things?

34. What do we call the immediate help given to people who have got an accident?

35. Name one substance that bees get from flowers.

36. Write one PIASCY message.

37. Give one man made change in the environment.


38. Give one role played by a mother at home.

39. How are ground nuts propagated?

40. Which disease is controlled by draining stagnant?

SECTION B

41. Study the diagram below and answer the questions that follow



a) Name the weather instrument above.

b) Mention the use of the weather instrument above.

c) State the use of the Stevenson screen at a weather station.

d) Which colour is the Stevenson screen painted?

42. (a) Name two examples of accidents that occur in young children.

i. _____

ii. _____

(b) Give two importance of first aid to casualties.

i. _____

ii. _____

43. (a) Name two domestic animals that produce eggs.

i. _____

ii. _____

(b) Give two ways of caring for domestic animals on a farm.

i. _____

ii. _____

44. (a) What is a family?


(b) Name two types of families

i. _____

ii. _____

(c) Give one danger of having only young children in a family.

45. Study the diagram below and answer the questions that follow



a) Name the above domestic equipment.

b) How can a P.4 child use the above equipment to help a mother washing clothes?

c) In which units is the water in the above equipment measured?

d) How many 5litre containers can be used to fill the above equipment?

46. (a) Name two types of clouds in the sky

i. _____

ii. _____

(b) State two uses of clouds to people

i. _____

ii. _____

47. (a) Name the type of soil that has fine and sticky particles

(b) Write two components of soil

i. _____

ii. _____

(c) Give one use of sand soil to people

48. (a) Briefly explain the term pollination

(b) How do we call the male gametes of a plant?

(c) Mention one agent of pollination

(d) Why do birds visit flowers?

49. (a) Mention two childhood immunisable diseases

i. _____

ii. _____

(b) Besides the childhood immunisable diseases, give one other immunisable disease.

(c) Name one vaccine immunised against the childhood immunisable diseases.

50. (a) Mention two items used to clean our bodies

i. _____

ii. _____

(b) State the importance of keeping our body clean

(c) Why do we use medicated soap when bathing?

51. Match the following garden tools with their functions

Garden tool

Hay fork

Sickle

Rake

Spade

Function

cuts grass

collecting rubbish

lifts manure

moves loose soil

Correct order

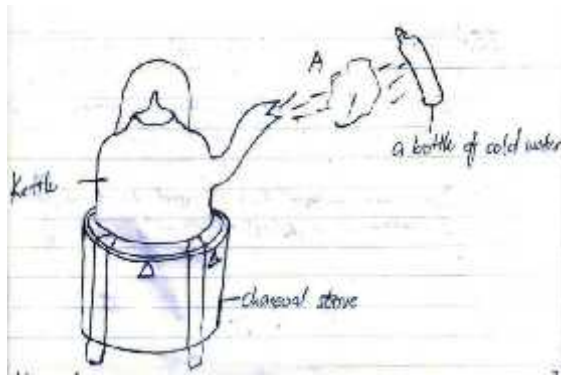
i. Hay fork

ii. Sickle

iii. Rake

iv. Spade

52. The experiment below shows a certain process that takes place in the environment. Study it carefully and use it to answer the questions that follow.



a) What does the experiment above represent in the environment?

b) Name the process taking place at point A.

c) What do the following represent in the above process?

i. Kettle _____

ii. Charcoal stove _____

53. What main food value do we get from eating foods below?

a) Honey _____

b) Eggs _____

c) Carrots _____

d) State the best ways of controlling deficiency diseases among young children.

54. (a) Which disease is controlled by the messages in PIASCY?

(b) State any two examples of PIASCY messages at your school.

i. _____

ii. _____

(c) How are PIASCY messages important to children in schools?

55. (a) Give the meaning of the word sanitation.

(b) State two ways of promoting sanitation at home.

i. _____

ii. _____

(c) Draw one material that is used to promote proper sanitation in a school compound

