

NAMAGUNGA PRIMARY BOARDING SCHOOL
REVISION SET II (JUNE 2020)
SOCIAL STUDIES WITH RELIGIOUS EDUCATION
PRIMARY FOUR

Time allowed: 2 hours 15 minutes

Name:

Stream: Date:

INSTRUCTIONS:

1. This paper is made up of two sections; A and B
2. Answer all questions carefully
3. A good handwriting is expected.
4. Unnecessary crossing may lead to loss of marks.
5. Read the questions carefully before answering.

SECTION	EXAMINER'S MARK	HOD'S MARK
A		
B		
TOTAL		

SECTION A

1. What is a community?

2. Name the side of a relief feature that receives a lot of rainfall

3. Why is a hospital useful in a community?

4. What is a homestead?


5. Give one reason for a high population near Mukono town.

6. How do people benefit factories?

7. Why are schools, churches and other public places closed today?

8. Why are forests of value to farmers?

9. Name the instrument shown below



10. Name the natural vegetation that support rice growing.

11. How are courts useful in our community?

12. What title is given to the head of a municipality?

13. How does weather influence trade?

14. Name the feature on a river that helps to generate Hydro Electric Power.


15. Give one danger of settling near rivers.

16. Which type of rainfall is received around forests?

17. What is weather?

18. In which water body does R. Ssezibwa pour its water?

19. Draw a map symbol of a hill



20. Name the type of road that is suitable for all seasons.

21. How is the fire brigade department of the police useful in our community?

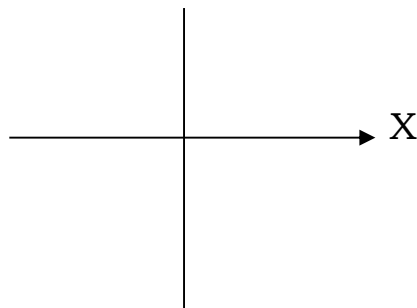
22. Give one use of prefects at school.

23. What is a clan?

24. Name one symbol of a school

25. Give one unsafe way of using the road.

26. Name the compass direction marked X.



27. How are markets important in our districts?

28. Give one danger of living near swamps.

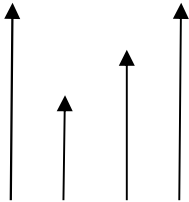
29. How are midwives important in our community?

30. Name the major latitude marked 0°

31. Give one way of locating places

32. Write down one element of a good map

33. Identify the map symbol below



34. Give one reason for planting trees in our school compound

35. Which district neighbours Mukono in the East

For questions 36 – 40 answer either Christianity or Islam but not both

36. **Either:** Which prayer did Jesus teach his disciples?

Or: Why do Muslims pray five times a day?

37. **Either:** What name is given to the first four books of the New Testament?

Or: Name the Holy book which was revealed to prophet Isa

38. **Either:** Which group of people introduced Christianity to Uganda?

Or: Which group of people introduced Islam to Uganda?

39. **Either:** Name the place where most Uganda martyrs were killed?

Or: Name the place where the non believers will be sent by Allah

40. **Either:** What name is given to the meal Jesus served his apostles on Holy Thursday?

Or: Which angel revealed the Quran to prophet Muhammad?

SECTION B

41. (a)What are economic activities?

(b)Give any one example of traditional economic activities.

(c)Mention two problems faced by people in carrying out economic activities.

i. _____

ii. _____

42. (a)What is natural vegetation?

(b)Give any one example of natural forests in Uganda.

(c) State at least two human activities that negatively affect vegetation

- i. _____
- ii. _____


43. (a) Name the longest river in our district.

(b) How has River Nile contributed to the industrial development in Uganda?

(c) Give any two importance of lakes and rivers to people around them.

- i. _____
- ii. _____

44. Name the map symbols drawn below.



45. (a) What is transport?

(b) Name the fastest type of transport in Uganda

(c) Give any two goods that can be transported using pipeline transport.

- i. _____
- ii. _____

46. Match the weather instruments in list A with their uses in list B correctly.

LIST A	LIST B
Rain gauge	measures air pressure
Wind vane	measures the amount of water vapour
Hygrometer	shows the direction of wind
Barometer	measures the amount of rainfall received in an area

(a) Rain gauge

(b) Wind vane

(c) Hygrometer

(d) Barometer

47. (a) Apart from using a compass, mention any other one way a sailor can locate direction places.

(b) Name the direction where the compass needle points when at rest.

(c) Give any two groups of people who use a compass in doing their work.

i. _____

ii. _____

48. (a) Name the type of cloud that gives us rain.

(b) Why does the windward side of a mountain receive much rainfall?

(c)How are thick forests and large water bodies useful to farmers?

(d)Give any one element of weather.

49. (a)What are social services?

(b)Name the social service provided by a dog at home.

(c)Mention any two problems faced by the government when providing social services to people.

i. _____

ii. _____

50. (a)What are legends?

(b)According to the legend of the Bachwezi, who was the underground king?

(c)Mention any two lessons you learn from the legend of the spear and the bead.

i. _____

ii. _____

For questions 51 – 55 answer either Christianity or Islam but not both in a number

Either:

51. (a) Name the place where Jesus changed water into wine

(b) Give any one reason why Jesus performed miracles

(c) Name one miracle performed by Jesus

Or:

(a) Mention any three prophets in the Quran

i. _____

ii. _____

iii. _____

(b) Why did Allah send prophets to his people?

Either:

52. What do we remember from the following places

a) Golgotha

b) Mt. Sinai

c) River Jordan

d) The garden of Eden

Or:

What do the following words mean in the Islamic faith?

a) Allah Akbar

b) Salam Aleikum

c) Hadith

d) Tayammum

Either:

53. Match the information in list A correctly with B

List A

List B

Mathias

- he was a tax collector

Judas Escariot

- denied Jesus

Simon Peter

- he replaced Judas Iscariot

Matthew

- he betrayed Jesus

a) Mathias

b) Judas Iscariot

c) Simon Peter

d) Matthew

Or:

Match the information in list A correctly with list B

List A

List B

Amina

- first Caliph

Abdallah

- first wife

Abubakar

- father

Hadijjah

- mother

a) Amina

b) Abubakar

c) Abudallah

d) Hadijjah

Either:

54. (a) On which day did the apostles receive the Holy Spirit?

(b) Write any two gifts of the Holy Spirit

i.

ii.

(c) Why do Christians need the Holy Spirit today?

Or:

(a) List down any four pillars of Islam

- i. _____

- ii. _____

- iii. _____

- iv. _____

Either:

55. (a) Who is regarded as the grandfather of all believers in Christianity?

(b) Name the son of the grandfather of all believers in Christianity

(c) Give two ways the grandfather of all believers showed his faith to God

- i. _____

- ii. _____

Or:

(a) Which prophet in Islam is regarded as the father of all believers in Islam?

(b) Name the son of the grandfather of all believers in Islam

(c) Give two ways the grandfather of all the believers in Islam showed his faith to Allah.

- i. _____

- ii. _____

END