

MID – TERM 2 (2013) EXAMS

LITERACY 1A FOR P.3

NAME:..... **STREAM:**.....

SECTION A.

1. What do we call moving air?

.....

2. Where does the sun rise from?

.....

3. A collection of trees growing in the same place is called

.....

4. What are **wild animals**?

.....

5. How does chameleon protect itself?

.....

6. Which gas is used in fire extinguishers?

.....

7. Draw a compound leaf.



8. How long is the gestation period of a Rabbit?

.....

.....

9. What type of soil is the best for growing crops?

.....

10. In one sentence define the term **germination**.

.....

11. Which cloud is the highest in the sky?

12. Why do we brush our teeth?
.....

13. In which season do farmers harvest crops?
.....

14. What name is given to a man made pond for keeping fish?
.....

15. Mention one natural source of water.
.....

16. What is the use of the gills on a fish?
.....


17. How many seasons do we have in Uganda?
.....

18. A house of a wild rabbit is called a

19. A leaf usesfor breathing.

20. Apart from the moon and stars which other insect gives light at night
.....

21. Draw and name one sense organ.
.....



22. Give one reason why people keep domestic animals.
.....
.....

23. Name the type of root shown below.
.....

24. A young plant in a nursery bed is called a
.....

25. What is **personal hygiene**?

.....


26. What is the use of scales to a fish?

.....

27. State one disease that attacks people and has no cure.

.....

28. Draw and name one product man gets from a cow.



29. A house of a bee is called a

.....

30. State one reason why we eat food.

.....

.....

31. Write one use of water at home.

.....

32. Write in full **P.H.C.**

.....

33. Draw and name one thing we use to clean our bodies.



.....

34. How many main body parts does an insect have?

.....

35. Name this living thing below.

.....

- 36. We boil drinking water to kill
- 37. The family where we find father, mother, children, Aunties, Uncles, Cousins, Grandmothers and grandfathers is called an
-
- 38. Which part of a plant sucks water from the soil?
.....
- 39. A female rabbit is called a
- 40. The moon does not produced it's own light. Where does it get its light from?
.....

SECTION B.

- 41. (a) In one sentence define the term **a pond**.
.....
- (b) Mention any two places where a pond can be found.
 - (i)
 - (ii)
- (c) Give one animal that can be found in a pond.
.....
- 42. (a) Define the term **weather**.
.....
-
- (b) Write down any three types of weather.
 - (i)
 - (ii)
 - (iii)
- 43. Give the habitat of these animals.

Pig:

Rabbit:

Spider:.....

dog:

44. Use the diagram to answer questions about the fish.
Name the parts marked a b c.

a

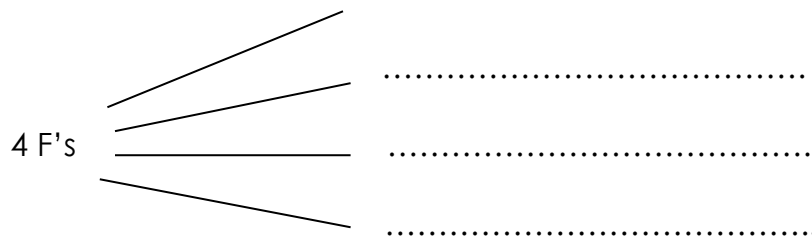
b

c

(b) What does a fish use for breathing?

.....
.....

45. Write the **4 F's** in full.



46. What are **social insects**?

.....
.....

(b) List down any three examples of social insects.

(i)

(ii).....

(iii).....

47. Name one product from each of the following animals.

Animal

Product

Cow

.....

Pig


Sheep

Hen


48. Mention any two examples of artificial source of light.

(i)..... (ii).....

(b) Draw and name two natural sources of light.




.....



.....

49. The vertical arrangement of soil layers from top to bottom is called

.....
(b) Name these soil layers marked below.



a

b

c

50. (a) Write down any two diseases that attack rabbits.

(i)

(ii)

(b) Give any two reasons why people keep rabbits.

(i)

(ii).....

51. (a) List down any two characteristics of birds.

(i)

(ii)

(b) Mention any two products we get from domestic birds.

(i)..... (ii).....

52. Give the uses of these garden tools shown.

53. **Match correctly.**

Lion	Lamb
Fish	Duckling
Sheep	Fry
Duck	Cub

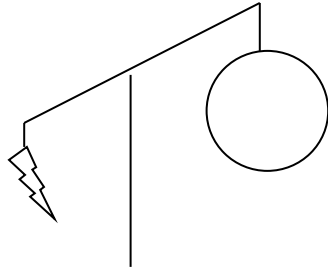
Lion:

Fish:

Sheep:

Duck:

54. (a) Name the property of air drawn below.



.....

(b) Mention any two properties of air.

(i)


(ii)

(c) Give one use of air.


.....

55. **Draw these types of soil below.**

Sand soil



Clay soil



(b) Name any two immunisable diseases.

(i)

(ii)

**** The End. ****

**** I wish you success. ****