

**MID – TERM III (2011) EXAMS**  
**LITERACY (I) FOR P.2**

**NAME:** \_\_\_\_\_ **STREAM:** \_\_\_\_\_

**SECTION A.**

**1. Fill in the missing letters.**

(a) f\_\_ \_\_d

(b) acc\_\_dent

(c) an\_\_mal

(d) b\_\_\_\_dge

**2. name two materials used in building strong houses.**

(i) \_\_\_\_\_ (ii) \_\_\_\_\_

**(b) Match the following building materials to their sources.**

Reeds

Lake

Stones

Sungle



Timber

forest

Sand

Quarry

**3. Draw and name two places where we get water.**



.....

.....

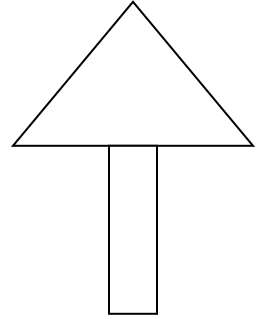
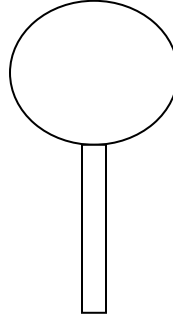
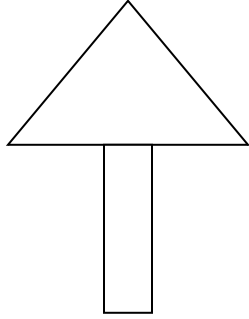
**4. Things owned by the school are called .....**

**(school needs, school property)**

**5. Write down two school property.**

(i) ..... (ii) .....

6. **Name the following road signs.**



(i)..... (ii)..... (iii) .....

**SECTION B.**

7. Name one animal used for transport.

.....

8. Which type of transport is mostly used?

.....

9. Mention the four types of weather.

(i)..... (ii) .....

(iii)..... (iv) .....

10. ....is the first help or treatment given to a person before being taken to the hospital.

11. List two items found in the first aid box.

(i)..... (ii) .....

13. **Draw these things we make in our community.**

mortar	pot	brooms

14. Give three examples of people who keep peace and security.

(i) .....

(ii) .....

(iii) .....

15. **Name these animals.**


**R.E**

16. **Match these:**

Good Friday

Jesus ate the last supper.

Palm Sunday

Jesus rose from the dead.

Holy Thursday

Jesus entered Jerusalem.

Easter Sunday

Jesus died on the Cross.

(i).....

(ii).....

(iii).....

(iv).....


17. God gave us people to help us at school.

Name four.

(i)..... (ii).....

(iii)..... (iv).....

18. **Draw yourself helping a friend.**



19. God gave me these parts of the body to;

Legs to .....

Eyes to .....

**\*\* The End. \*\***