

# MID - TERM III (2011) EXAMS

## LITERACY 1B FOR P.3

---

**NAME:** \_\_\_\_\_ **STREAM:** \_\_\_\_\_

1. Draw a map of a tree in the space provided.



2. Write L.C in full.

.....  
.....

3. Name the first animal to be tamed by man.

.....

4. What are legends?

.....

5. From which land form does man get clay?

.....

6. In which municipality is your school found?

.....

7.

What does the symbol shown represent on a map?

.....

8. How do you call crops grown purposely for eating?

.....

9. Name the type of food we get from water.

.....

10. Give one reason why children are taken to school.

.....

11. Name the main source of heat and light.

.....

12. Mention one garden tool you know.

.....

13. What title is given to the head of a school?

14.

Name the physical feature marked X.

15. Mention one dangerous insect in our municipality.

16. What is a **taboo**?

17. Name the current minister of Education and Sports in Uganda.

18. Why is a dispensary important in your school?

19. Name one animal which can be used for transport.

20. Write **U.P.E** in full.

21. Mention one school symbol.

22. Name the official language used in your school.

23. Mention one cash crop grown by people in our municipality.

24. Write one basic need of man.

25. Mention one danger of rain.

26. In which season do farmers harvest their crops?

27. Mention a place where people go when they are sick.

28. From which direction does the sun set?


29. Mention a place where people keep their money safely.

30. What is the work of the police?

31. Mention one place where law breakers are punished.

32. Write one place where people get food from.

33. Name and draw one thing found in your class.




34. Give one use of bees to people.

.....  
.....

35. Write one important place found in your municipality.

36. Mention one leader found in a mosque.

37. Draw a Church in the space provided.



38. How do Moslems call God?

.....  
.....

39. How many commandments did God give to Moses?

.....

40. For how many days do Christians fast?

.....  
**SECTION B.**

41. (a) What are **resources**?

.....  
.....  
(b) Give three examples of resources.

(i).....

(ii).....

(iii).....

42. (a) What is child abuse?

.....  
(b) Mention three common child abuse practices in your municipality.

(i).....

(ii).....

(iii).....

43. (a) How is a compass useful to the map reader?


.....  
(b) Mention three groups of people who use a compass.

(i)..... (ii).....


(iii).....

44. Draw the map symbols for the following:


(i) swamp:




(ii) bridge:



(iii) dam:



(iv) quarry:



45. (a) Mention two sources of water.

(i)..... (ii).....

(b) Give two uses of water.

(i) .....

46. **Write the raw materials for making the following products.**

	.....
	.....
	.....
	.....

47. (a) From which land form does man get clay?

.....

(b) Mention three crops that can be grown in swamps.

(i)..... (ii)..... (iii).....

48. (a) Who is a **child** in Uganda?

.....

(b) Write three of the children's rights.

(i).....

(ii) .....

(iii) .....

49. (a) What are domestic animals?

.....

(b) Write three things man gets from domestic animals.

(i)..... (ii)..... (iii).....

50. (a) Write the following in full.

(i) AIDS: .....

(ii) PIASCY:.....

.....  
(b) Write two ways in which aid spreads.

51. (a) What are **vectors**?

.....  
(b) Mention the diseases spread by the following vectors.

(i) Mosquito: .....

(ii) Tsetsefly: .....

(iii) Black flies: .....

52 (a) What is a **project**?

.....  
(b) Give three examples of projects.

(i).....

(ii) .....

(iii) .....

53. (a) Write two uses of electricity.

(i) .....

(ii).....

(b) Write two dangers of electricity.

(i) .....

(ii).....

54. (a) What name is given to the holy book of Christians?

.....  
(b) Mention three prophets found n the bible.

(i)..... (ii)..... (iii).....

55. (a) Who created heaven and earth?

.....  
(b) Name and draw three sources of light created by God.

(i)

(ii)

(iii)

--	--	--

---

**\*\* The End. \*\***