

NAMAGUNGA PRIMARY BOARDING SCHOOL
TERM I HOLIDAY WORK - 2020
PRIMARY THREE - LITERACY 1B

NAME: _____ STREAM: _____

SECTION A

1. Name one animal which provides milk to people.

2. Give any one useful thing we get from bees.

3. How is firewood useful at home?

4. Why do we need nail clippers when cleaning our bodies?

5. Write any one example of insects eaten by man.

6. Name any one food that builds the body.

7. Which animal roars for protection?

8. What do we call crops grown for sale?

9. Which part of a house allows in light?

10. How is this garden tool useful to a farmer?



11. Name any one insect that protects itself by biting?

12. Which childhood immunisable disease leads to lameness?

13. Write the health practice a person should do after visiting a toilet.

14. Name the best type of soil for growing crops.

15. What do we call birds kept at home?

16. Why do animals move from place to place?

17. Name the type of weather below.



i.

18. What is formed when dead plant and animal remains rot?

19. Which sense organ is used for tasting?

20. Why do we need light in our classrooms?

21. Apart from babies name any one other group of vulnerable people.

22. Name one animal which moves by swimming.

23. How do we care for babies at home?

24. State any one role of a mother in a family.

25. Why is it bad to play with a razor blade?

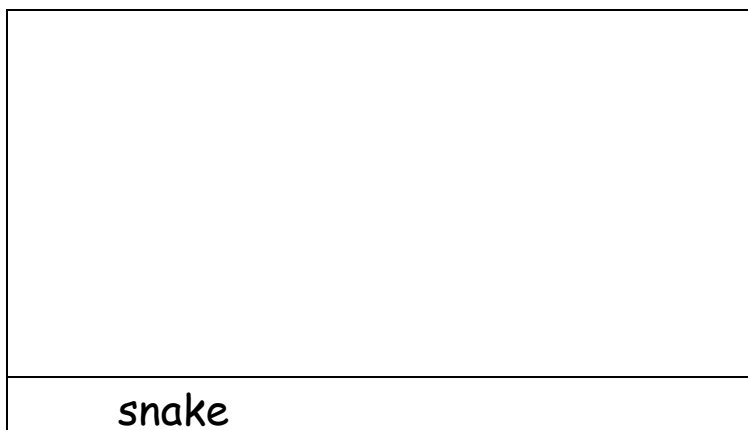
26. Apart from bandages, name any one other first aid kit.

27. Write any one thing we make using animal skins.

28. How are eggs from hens helpful to people?

29. Why do we do physical body exercises?

30. **In the space below, draw this animal without legs.**



31. State any one danger of much rainfall.

32. Name any one disease spread through drinking dirty water.

33. How is a mop useful when cleaning the dormitory?

34. State any one use of water at home.

35. Which part do birds use to pick food?

36. Why should pit latrines be kept clean?

37. In which type of season do farmers mainly grow crops?

38. How is clay soil useful to people?

39. Name any one example of vegetables we eat.

40. How do farmers care for garden tools?

SECTION B

41. a) Name the young ones of the following animals.

i) dog - _____

ii) duck - _____

b). How do people care for animals at home?



42. What do we call plants which bear flowers?

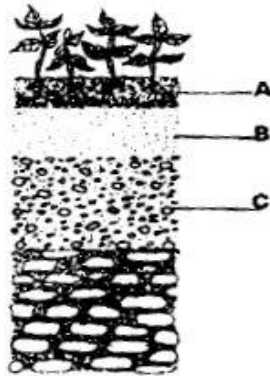
b). Give two examples of plants which bear flowers?

i) _____

ii) _____

c) State any one use of flowers to people?

43. The diagram below shows soil profile.



Name the soil layers A, B and C

A) _____ B) _____

C) _____

b) Why is the layer 1 good for growing crops?

44. a) Write the three main body parts of an insect.

i) _____

ii) _____

iii) _____

b). How are spiracles useful to insects?

45. Apart from tanks, give any two other things we use to store water at school.

i) _____

ii) _____

b) How is water made dirty ?

i) _____

ii) _____

46. What are food crops?

b) Give any two examples of food crops.

i) _____

ii) _____

c) Why do people grow food crops?

47. a) How are children mistreated at home?

i) _____

ii) _____

b) Write any two groups of people who mistreat children at school.

i. _____

ii) _____

48. Match correctly.

- a. bedbugs by biting
- b. snails by stinging
- c. bees by producing a nasty smell
- d. snakes by withdrawing into hard shells.

49. a) What are non-living things?

b) State any two characteristics of non-living things.

i) _____

ii) _____

c) Why do we need stones in our environment?

50. a) Use the tool below to answer the question correctly.



Name the above tool.

b) How is the above tool useful at school?

51. Apart from the above tool, give any two other tools we use to clean our classroom.

i) _____

ii) _____

b) .Complete the table correctly.

Sense organ	Use
_____	for vision
nose	for _____
_____	for tasting
ears	for _____

52.a)What do we call a meal containing all food values in their right amount?

b) State any two classes of food.

i) _____

ii) _____

c) Why do we eat food?

53.a) How do we keep our bodies clean?

i) _____

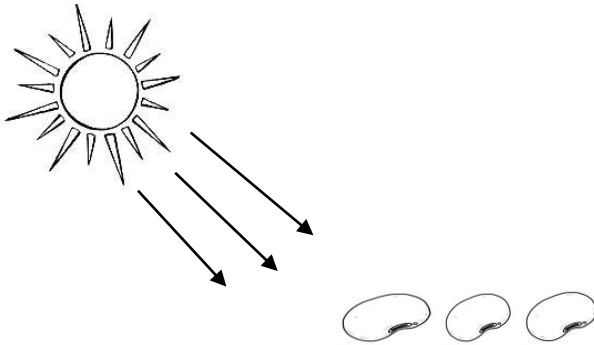
ii) _____

b) State two dangers of having dirty teeth?

i) _____

ii) _____

54. Use the diagram below to answer the questions correctly.



a). Name the above way of preserving food.

b). Which element of weather helps the beans above to dry?

c). Apart from beans, give any two other foods we can preserve using the above way.

i) _____

ii) _____

55a). Give two examples of utensils.

i) _____

ii) _____

b) How do we keep utensils clean?

Why should utensils be washed before serving on food?

